

Please check the examination details below before entering your candidate information

Candidate surname

Other names

Centre Number

Candidate Number

--	--	--	--	--

--	--	--	--

Pearson Edexcel International Advanced Level

Wednesday 7 June 2023

Morning (Time: 1 hour 45 minutes)

Paper
reference

WCH15/01

Chemistry

International Advanced Level

UNIT 5: Transition Metals and Organic

Nitrogen Chemistry

You must have:

Scientific calculator, Data Booklet

Total Marks

Instructions

- Use **black** ink or ball-point pen.
- If pencil is used for diagrams/sketches/graphs it must be dark (HB or B).
- **Fill in the boxes** at the top of this page with your name, centre number and candidate number.
- Answer **all** questions.
- Answer the questions in the spaces provided
– *there may be more space than you need.*

Information

- The total mark for this paper is 90.
- The marks for **each** question are shown in brackets
– *use this as a guide as to how much time to spend on each question.*
- In the question marked with an **asterisk (*)**, marks will be awarded for your ability to structure your answer logically, showing how the points that you make are related or follow on from each other where appropriate.
- A Periodic Table is printed on the back cover of this paper.

Advice

- Read each question carefully before you start to answer it.
- Show all your working in calculations and include units where appropriate.
- Try to answer every question.
- Check your answers if you have time at the end.

Turn over ►

P71943A

©2023 Pearson Education Ltd.

N:1/1/1/



Pearson

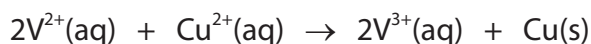
SECTION A

Answer ALL the questions in this section.

You should aim to spend no more than 20 minutes on this section.

For each question, select one answer from A to D and put a cross in the box ☒. If you change your mind, put a line through the box ☒ and then mark your new answer with a cross ☒.

- 1 The equation for a redox reaction is shown.



What is the cell diagram for this reaction?

- A $V(s) | V^{3+}(aq), V^{2+}(aq) || Cu(s) | Cu^{2+}(aq)$
- B $V(s) | V^{2+}(aq), V^{3+}(aq) || Cu^{2+}(aq) | Cu(s)$
- C $Pt(s) | V^{3+}(aq), V^{2+}(aq) || Cu(s) | Cu^{2+}(aq)$
- D $Pt(s) | V^{2+}(aq), V^{3+}(aq) || Cu^{2+}(aq) | Cu(s)$

(Total for Question 1 = 1 mark)

- 2 Some standard electrode potentials are shown.

Right-hand electrode system	E^\ominus / V
$Mg^{2+} + 2e^- \rightleftharpoons Mg$	-2.37
$Ce^{3+} + 3e^- \rightleftharpoons Ce$	-2.33
$Mn^{2+} + 2e^- \rightleftharpoons Mn$	-1.19
$Mn^{3+} + e^- \rightleftharpoons Mn^{2+}$	+1.49
$Ce^{4+} + e^- \rightleftharpoons Ce^{3+}$	+1.70

Which reaction is thermodynamically feasible?

- A $2Ce + 3Mg^{2+} \rightarrow 2Ce^{3+} + 3Mg$
- B $4Ce^{3+} \rightarrow Ce + 3Ce^{4+}$
- C $3Mn^{2+} \rightarrow Mn + 2Mn^{3+}$
- D $Mg + 2Ce^{4+} \rightarrow Mg^{2+} + 2Ce^{3+}$

(Total for Question 2 = 1 mark)

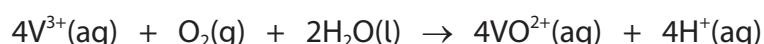


3 In a chemical reaction, $E_{\text{cell}}^{\ominus}$ is **directly** proportional to

- A K_c
- B $\Delta_r H^{\ominus}$
- C $\Delta S_{\text{system}}^{\ominus}$
- D $\Delta S_{\text{total}}^{\ominus}$

(Total for Question 3 = 1 mark)

4 For the reaction shown, $E_{\text{cell}}^{\ominus} = +0.89\text{V}$.



Which statement can be deduced from this information only?

- A the reaction will **not** occur under any conditions
- B the reactants are kinetically stable with respect to the products
- C the reactants are thermodynamically unstable with respect to the products
- D an aqueous solution of V^{3+} will oxidise rapidly on standing in air

(Total for Question 4 = 1 mark)

5 Which reaction occurs at the **negative** electrode in a hydrogen-oxygen fuel cell?

- A $\text{H}_2 + 2\text{OH}^- \rightarrow 2\text{H}_2\text{O} + 2\text{e}^-$
- B $2\text{H}^+ + 2\text{e}^- \rightarrow \text{H}_2$
- C $\text{O}_2 + 4\text{H}^+ + 4\text{e}^- \rightarrow 2\text{H}_2\text{O}$
- D $4\text{OH}^- \rightarrow \text{O}_2 + 2\text{H}_2\text{O} + 4\text{e}^-$

(Total for Question 5 = 1 mark)

Use this space for any rough working. Anything you write in this space will gain no credit.

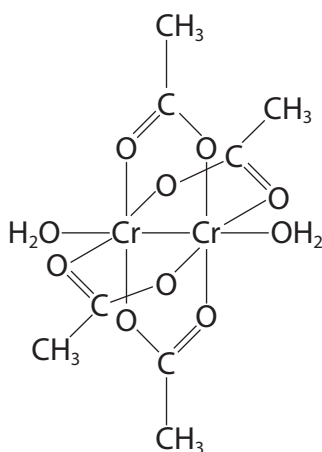


6 Which electronic configuration is correct?

- A Ti^{2+} $[\text{Ar}]4s^2$
- B Cr $[\text{Ar}]3d^44s^2$
- C Fe^{3+} $[\text{Ar}]3d^34s^2$
- D Cu $[\text{Ar}]3d^{10}4s^1$

(Total for Question 6 = 1 mark)

7 The structure of the complex $\text{Cr}_2(\text{CH}_3\text{CO}_2)_4(\text{H}_2\text{O})_2$ is shown.



What is the coordination number of chromium in this complex?

- A two
- B four
- C six
- D twelve

(Total for Question 7 = 1 mark)

Use this space for any rough working. Anything you write in this space will gain no credit.



8 Which complex contains **only** monodentate ligands?

- A $[\text{Fe}(\text{CN})_6]^{4-}$
 B $[\text{Cr}(\text{C}_2\text{O}_4)_3]^{3-}$
 C $[\text{Ni}(\text{EDTA})]^{2-}$
 D $[\text{Co}(\text{NH}_2\text{CH}_2\text{CH}_2\text{NH}_2)_2\text{Cl}_2]$

(Total for Question 8 = 1 mark)

9 Which complex has a ligand-metal-ligand bond angle of 109.5° ?

- A $[\text{CuCl}_4]^{2-}$
 B $[\text{Fe}(\text{EDTA})]^-$
 C $[\text{Ag}(\text{NH}_3)_2]^+$
 D $[\text{Pt}(\text{NH}_3)_2\text{Cl}_2]$

(Total for Question 9 = 1 mark)

10 Which ion is **not** blue?

- A VO^{2+}
 B $[\text{Co}(\text{H}_2\text{O})_6]^{2+}$
 C $[\text{Cr}(\text{H}_2\text{O})_6]^{2+}$
 D $[\text{Cu}(\text{H}_2\text{O})_6]^{2+}$

(Total for Question 10 = 1 mark)

Use this space for any rough working. Anything you write in this space will gain no credit.



11 Which equation shows a **redox** reaction in which the solution turns yellow?

- A $\text{Fe} + 2\text{HCl} \rightarrow \text{FeCl}_2 + \text{H}_2$
- B $\text{VO}_3^- + 2\text{H}^+ \rightarrow \text{VO}_2^+ + \text{H}_2\text{O}$
- C $\text{Cr}_2\text{O}_7^{2-} + 2\text{OH}^- \rightarrow 2\text{CrO}_4^{2-} + \text{H}_2\text{O}$
- D $2\text{Cr}(\text{OH})_3 + 3\text{H}_2\text{O}_2 + 4\text{KOH} \rightarrow 2\text{K}_2\text{CrO}_4 + 8\text{H}_2\text{O}$

(Total for Question 11 = 1 mark)

12 Aqueous ammonia is added in **excess** to an aqueous solution of Cu^{2+} .

What is the equation for the overall reaction?

- A $[\text{Cu}(\text{H}_2\text{O})_6]^{2+} + 2\text{NH}_3 \rightarrow [\text{Cu}(\text{H}_2\text{O})_4(\text{OH})_2] + 2\text{NH}_4^+$
- B $[\text{Cu}(\text{H}_2\text{O})_6]^{2+} + 2\text{NH}_3 \rightarrow [\text{Cu}(\text{NH}_3)_2(\text{H}_2\text{O})_4]^{2+} + 2\text{H}_2\text{O}$
- C $[\text{Cu}(\text{H}_2\text{O})_6]^{2+} + 4\text{NH}_3 \rightarrow [\text{Cu}(\text{NH}_3)_4(\text{H}_2\text{O})_2]^{2+} + 4\text{H}_2\text{O}$
- D $[\text{Cu}(\text{H}_2\text{O})_6]^{2+} + 6\text{NH}_3 \rightarrow [\text{Cu}(\text{NH}_3)_6]^{2+} + 6\text{H}_2\text{O}$

(Total for Question 12 = 1 mark)

13 Which equation shows the formation of a precipitate?

- A $[\text{Zn}(\text{OH})_4]^{2-} + 2\text{H}_3\text{O}^+ \rightarrow [\text{Zn}(\text{H}_2\text{O})_4(\text{OH})_2]$
- B $[\text{Zn}(\text{H}_2\text{O})_6]^{2+} + 4\text{OH}^- \rightarrow [\text{Zn}(\text{OH})_4]^{2-} + 6\text{H}_2\text{O}$
- C $[\text{Cr}(\text{H}_2\text{O})_3(\text{OH})_3] + 3\text{H}_3\text{O}^+ \rightarrow [\text{Cr}(\text{H}_2\text{O})_6]^{3+} + 3\text{H}_2\text{O}$
- D $[\text{Cr}(\text{H}_2\text{O})_3(\text{OH})_3] + 3\text{OH}^- \rightarrow [\text{Cr}(\text{OH})_6]^{3-} + 3\text{H}_2\text{O}$

(Total for Question 13 = 1 mark)

Use this space for any rough working. Anything you write in this space will gain no credit.

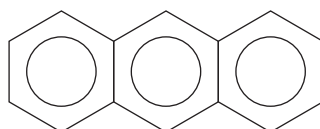


14 What is the sequence of oxidation number changes for vanadium when V_2O_5 is used in the contact process?

- A +2 → +1 → +2
- B +2 → +5 → +2
- C +5 → +4 → +5
- D +5 → +6 → +5

(Total for Question 14 = 1 mark)

15 What is the **total** number of delocalised electrons in anthracene?



anthracene

- A 6
- B 10
- C 14
- D 18

(Total for Question 15 = 1 mark)

16 Which statement explains why bromine reacts more readily with phenol than with benzene?

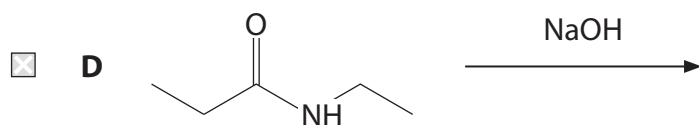
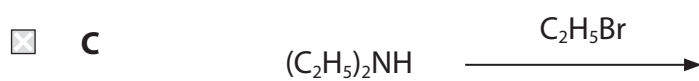
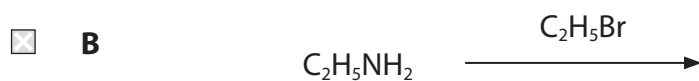
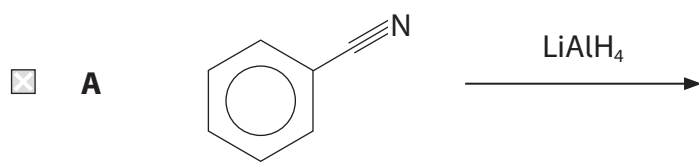
- A the O—H bond in phenol is polar
- B the oxygen atom in phenol is very electronegative
- C a lone pair of electrons on oxygen in phenol is delocalised into the ring
- D the electron density in the ring is greater in benzene than in phenol

(Total for Question 16 = 1 mark)

Use this space for any rough working. Anything you write in this space will gain no credit.



17 Which reaction can form a **secondary** amine?



(Total for Question 17 = 1 mark)

Use this space for any rough working. Anything you write in this space will gain no credit.

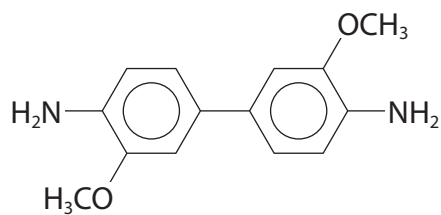
DO NOT WRITE IN THIS AREA

DO NOT WRITE IN THIS AREA

DO NOT WRITE IN THIS AREA



18 Compound **X** reacts with **excess** nitrous acid, followed by coupling with **excess** phenol to form an azo dye.



compound **X**

What is the structure of the azo dye?

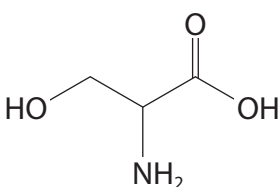
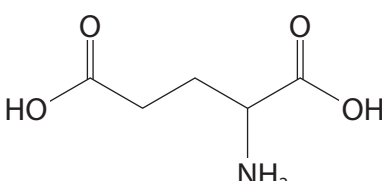
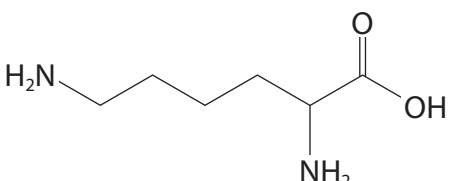
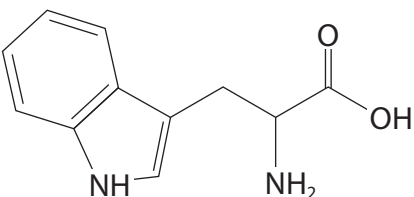
- A**
- B**
- C**
- D**

(Total for Question 18 = 1 mark)



19 Four amino acids are dissolved in deionised water to form separate 0.05 mol dm^{-3} solutions.

Which amino acid will give the solution with the **lowest** pH?

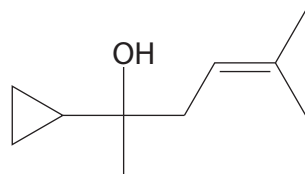
- A 
- B 
- C 
- D 

(Total for Question 19 = 1 mark)

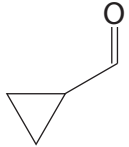
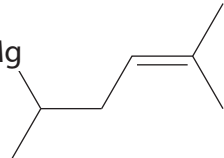
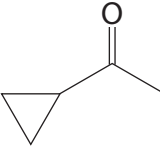
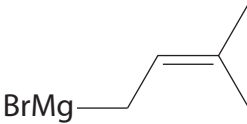
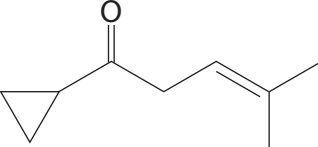
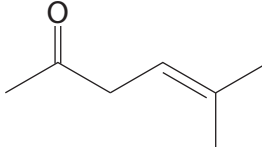
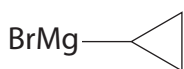
Use this space for any rough working. Anything you write in this space will gain no credit.



20 Which carbonyl compound and Grignard reagent would **not** react to form compound **Y**?



compound **Y**

	Carbonyl compound	Grignard reagent
<input type="checkbox"/> A		BrMg 
<input type="checkbox"/> B		BrMg 
<input type="checkbox"/> C		BrMgCH_3
<input type="checkbox"/> D		BrMg 

(Total for Question 20 = 1 mark)

TOTAL FOR SECTION A = 20 MARKS

DO NOT WRITE IN THIS AREA

DO NOT WRITE IN THIS AREA

DO NOT WRITE IN THIS AREA

BLANK PAGE



SECTION B

Answer ALL the questions. Write your answers in the spaces provided.

21 This question is about mercury, Hg, and its compounds.

Mercury is a liquid element in the same group of the Periodic Table as zinc.

The electronic configuration of mercury is $[\text{Xe}]4f^{14}5d^{10}6s^2$.

(a) Mercury forms compounds in either the +1 or +2 oxidation states.

Explain why mercury is classified as a d-block element but is **not** a transition element.

(3)

.....

.....

.....

.....

.....

.....

.....

.....

DO NOT WRITE IN THIS AREA

DO NOT WRITE IN THIS AREA

DO NOT WRITE IN THIS AREA



- (b) Mercury reacts with nitric acid to form an aqueous solution of $\text{Hg}(\text{NO}_3)_2$ and nitrogen monoxide gas.

The **unbalanced** equation is shown.



- (i) Explain, using oxidation numbers, why this is a redox reaction.

(2)

.....

.....

.....

.....

.....

- (ii) Deduce the **ionic** half-equations for this reaction.
State symbols are not required.

(2)

- (iii) Complete the equation for this reaction by adding the stoichiometric coefficients.

(1)



(c) Mercury(II) fulminate, $\text{Hg}(\text{CNO})_2$, is an explosive.

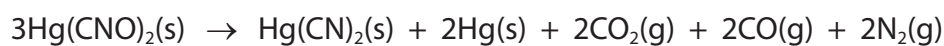
- (i) It is produced in the reaction between $\text{Hg}(\text{NO}_3)_2$ and ethanol. The other products of the reaction are ethanal and water.

Write the equation for the reaction of one mole of $\text{Hg}(\text{NO}_3)_2$ with ethanol to form mercury(II) fulminate.

State symbols are not required.

(2)

- (ii) $\text{Hg}(\text{CNO})_2$ decomposes as shown.



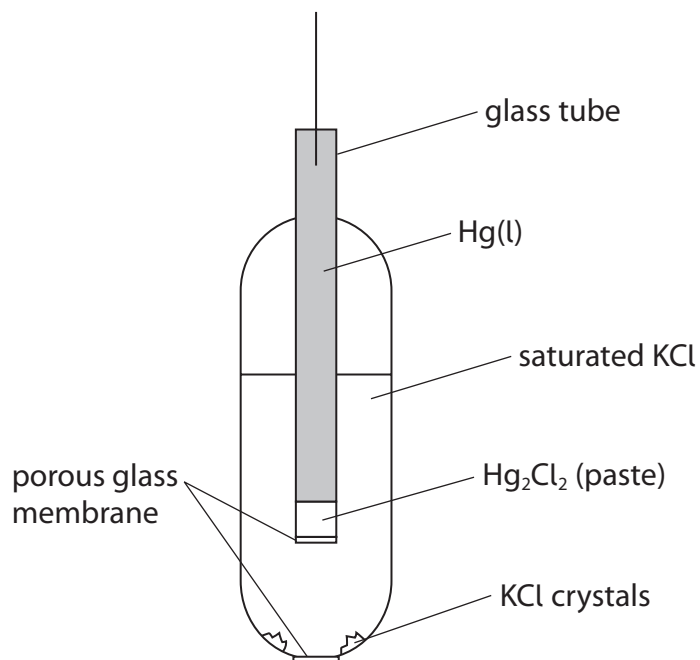
Calculate the **total** volume, in cm^3 , of gas produced when 1.00 g of $\text{Hg}(\text{CNO})_2$ decomposes at room temperature and pressure.

(3)

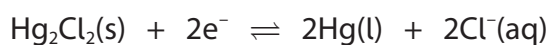


(d) Mercury(I) chloride, Hg_2Cl_2 , is also known as calomel.

A saturated calomel electrode may be used as an alternative to the standard hydrogen electrode.



The half-equation for the calomel electrode is



The standard electrode potential of the calomel electrode is $E^\ominus = +0.24\text{V}$.

(i) Suggest why KCl crystals are needed in the outer tube of the electrode.

(1)

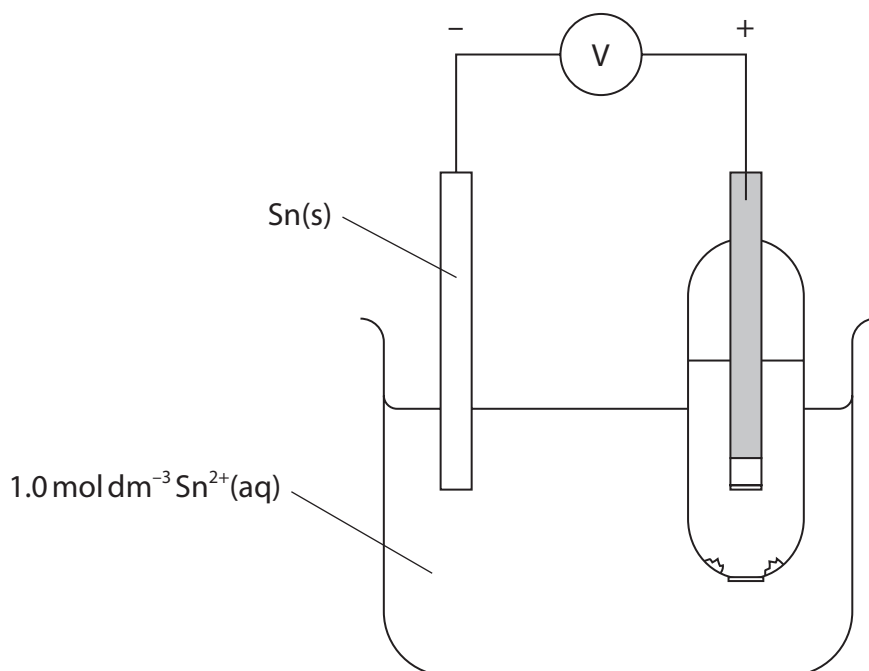
.....

.....

.....



- (ii) A calomel electrode was used to measure the standard electrode potential of the $\text{Sn}^{2+}(\text{aq}) | \text{Sn}(\text{s})$ half-cell.



The reading on the voltmeter in this cell was +0.37V.

Deduce the standard electrode potential for the $\text{Sn}^{2+}(\text{aq}) | \text{Sn}(\text{s})$ half-cell.

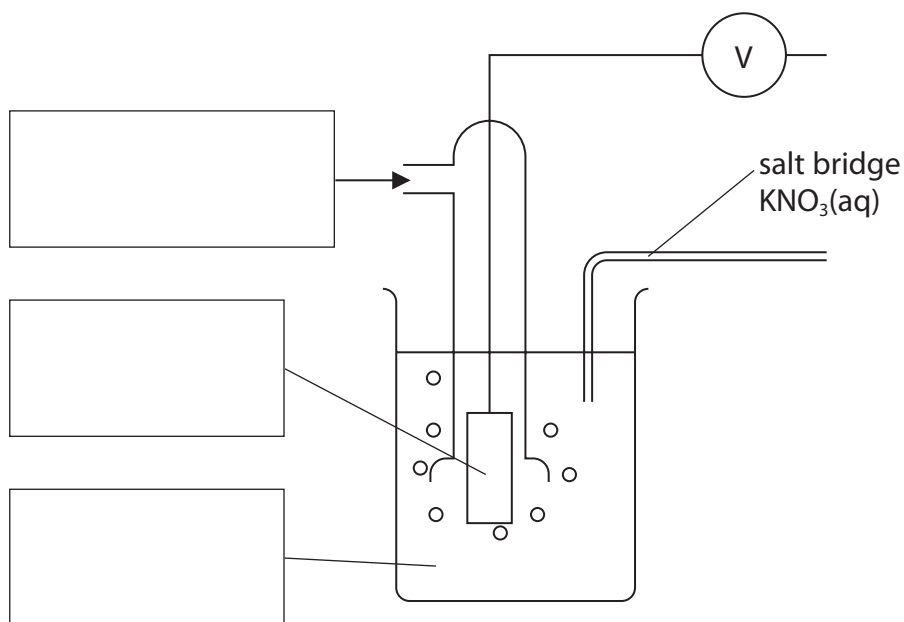
(1)

- (iii) Write the overall equation for the cell reaction.

(1)

(iv) Add labels to complete the diagram of a standard hydrogen electrode. Include details of any essential conditions.

(3)



(v) Suggest **one** advantage of using a calomel electrode, in place of a standard hydrogen electrode, when measuring a cell potential.

(1)

(Total for Question 21 = 20 marks)

DO NOT WRITE IN THIS AREA

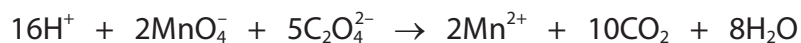
DO NOT WRITE IN THIS AREA

DO NOT WRITE IN THIS AREA



22 The amount of calcium ethanedioate, CaC_2O_4 , present in a sample of spinach is determined by redox titration.

11.4 g of spinach leaves are stirred in 50.0 cm^3 of a warm acidified solution of $0.0100 \text{ mol dm}^{-3}$ potassium manganate(VII), KMnO_4 , oxidising all the ethanedioate ions, $\text{C}_2\text{O}_4^{2-}$.



The excess manganate(VII) ions, MnO_4^- , are then titrated with an acidified solution of $0.0500 \text{ mol dm}^{-3}$ iron(II) sulfate, FeSO_4 .



25.95 cm^3 of iron(II) sulfate solution was needed for complete reaction.

Calculate the percentage by mass of CaC_2O_4 present in the spinach leaves. Give your answer to an appropriate number of significant figures.

(Total for Question 22 = 6 marks)

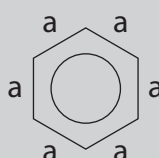


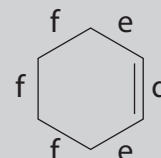
*23 Some thermochemical, X-ray diffraction and bromination information on benzene and cyclohexene is shown.

Thermochemical data

Compound	Enthalpy of hydrogenation / kJ mol^{-1}
benzene	-208
cyclohexene	-120

X-ray diffraction data

	
Benzene bond	a
Bond length / pm	139

			
Cyclohexene bond	d	e	f
Bond length / pm	129	150	153

Bromination

Compound	Reaction conditions	Organic product
benzene	FeBr_3 , heat	bromobenzene
cyclohexene	room temperature	1,2-dibromocyclohexane

Explain how **all** this information provides evidence that the electrons in the π -bonds of benzene are delocalised.

(6)

.....

.....

.....

.....

.....

.....

.....

.....

.....

.....



DO NOT WRITE IN THIS AREA

DO NOT WRITE IN THIS AREA

DO NOT WRITE IN THIS AREA

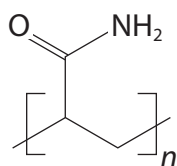
(Total for Question 23 = 6 marks)



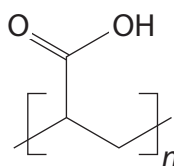
P 7 1 9 4 3 A 0 2 1 3 6

24 This question is about polymers.

- (a) Polyacrylamide (PAM) and polyacrylic acid (PAA) are water-absorbent addition polymers.

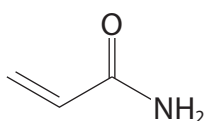


PAM



PAA

- (i) PAM is made from the acrylamide monomer.



acrylamide

Give the IUPAC name for acrylamide.

(1)

- (ii) Explain why PAM is able to absorb **large** amounts of water.
Include a diagram in your answer.


(3)



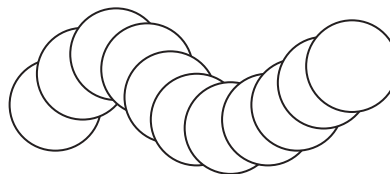
(iii) The structure of PAA in aqueous solution is pH-dependent.

Below pH 4, the structure of PAA is compact due to the formation of intramolecular hydrogen bonds.

Above pH 8, PAA has an open coil structure.



compact structure
below pH 4



open coil structure
above pH 8

Suggest why PAA exists as an open coil structure above pH 8.

(2)

.....

.....

.....

.....

.....

.....

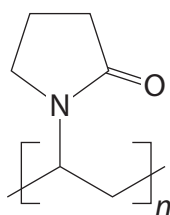
DO NOT WRITE IN THIS AREA

DO NOT WRITE IN THIS AREA

DO NOT WRITE IN THIS AREA



- (b) Polyvinylpyrrolidone (PVP) is an addition polymer used in the pharmaceutical industry. The average molar mass of PVP is $90\,000\text{ g mol}^{-1}$.



PVP

- (i) Draw the structure of the vinylpyrrolidone monomer used to make PVP. (1)
- (ii) Calculate the number of monomers needed to make one molecule of PVP polymer with a molar mass of $90\,000\text{ g mol}^{-1}$.
Give your answer to the nearest whole number. (2)
- (iii) A 740 mg tablet of a painkiller contains 4.0% PVP by mass.
Calculate the number of molecules of PVP polymer in the tablet. (3)

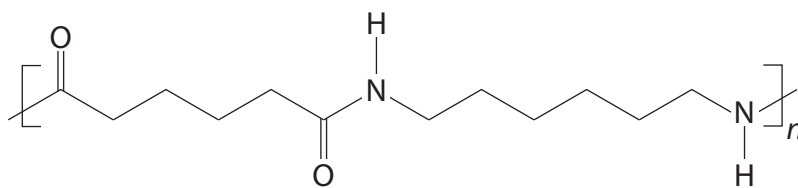


(c) All types of nylon are condensation polymers.

(i) State what is meant by the term **condensation polymer**.

(2)

(ii) The structure of nylon 6,6 is shown.



nylon 6,6

Nylon 6,6 is made from two monomers.

Deduce the **structural** formulae of these two monomers.

(2)

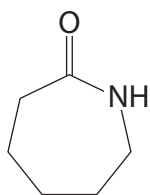
structural formula of monomer 1

--

structural formula of monomer 2

--

(iii) Caprolactam can be directly converted to give a different polymer, nylon 6, in a ring-opening polymerisation reaction.



caprolactam

Draw **two** repeat units of nylon 6.

(2)

(Total for Question 24 = 18 marks)

TOTAL FOR SECTION B = 50 MARKS

DO NOT WRITE IN THIS AREA

DO NOT WRITE IN THIS AREA

DO NOT WRITE IN THIS AREA



DO NOT WRITE IN THIS AREA

DO NOT WRITE IN THIS AREA

DO NOT WRITE IN THIS AREA

BLANK PAGE

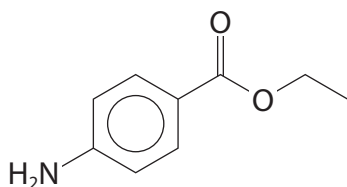


P 7 1 9 4 3 A 0 2 7 3 6

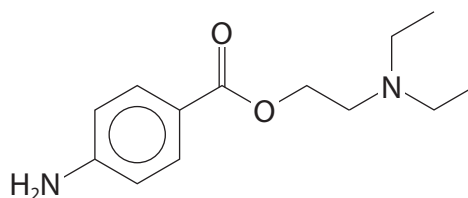
SECTION C

Answer ALL the questions. Write your answers in the spaces provided.

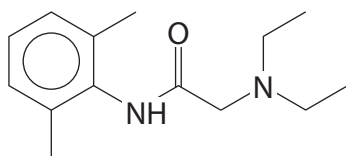
- 25 The synthetic drugs of the 'Caine' family are used as local anaesthetics. Caine drugs prevent nerve activity by binding to sodium channel receptors in the lipid cell membranes of neurons.



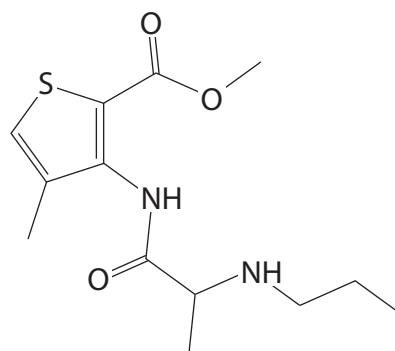
benzocaine



procaine



lidocaine



articaine

- (a) Name the **three** functional groups present in benzocaine.

(2)

.....

.....

DO NOT WRITE IN THIS AREA

DO NOT WRITE IN THIS AREA

DO NOT WRITE IN THIS AREA



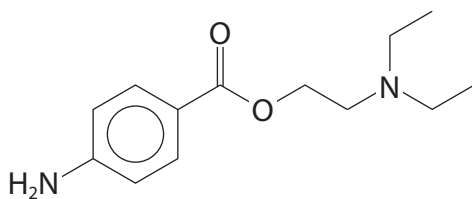
(b) Procaine can react with hydrochloric acid to form a monohydrochloride salt.

- (i) Write an equation, using **molecular** formulae, for this reaction.
State symbols are not required.

(2)

- (ii) Explain by considering **both** nitrogen atoms in procaine which nitrogen is more likely to be protonated in the reaction with hydrochloric acid.

(2)



.....

.....

.....

.....

.....

.....

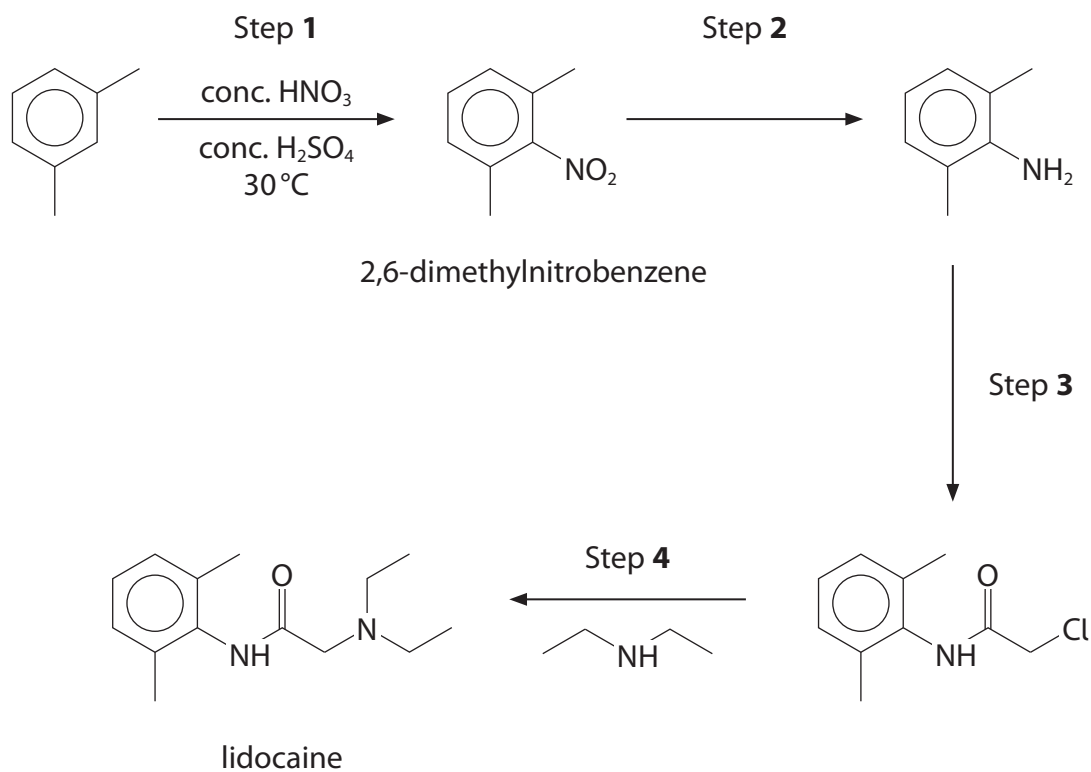
- (c) When benzocaine and procaine are hydrolysed, one of the products formed is the same in both reactions.

Give the structure of this product.

(1)



(d) Lidocaine can be prepared in the synthesis shown.



(i) Give the mechanism for Step 1.

Include an equation for the formation of the electrophile.

(4)



(ii) A low yield of 2,6-dimethylnitrobenzene is obtained in Step 1 due to the formation of additional organic products.

Give possible structures for **two** additional organic products.

(2)

(iii) Give the reagents for Step 2.

(1)

(iv) Deduce the **skeletal** formula of the reagent for Step 3.

(1)

(v) State the type and mechanism of reaction occurring in Step 4.

(1)

DO NOT WRITE IN THIS AREA

DO NOT WRITE IN THIS AREA

DO NOT WRITE IN THIS AREA

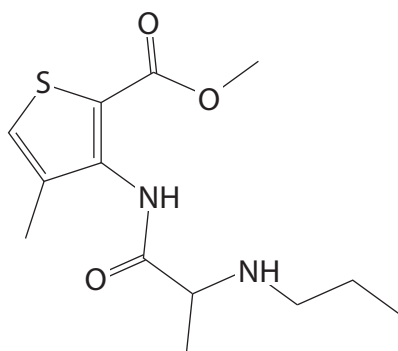


P 7 1 9 4 3 A 0 3 1 3 6

(e) Articaine is a chiral molecule.

Indicate any chiral centres on the structure of articaine.

(1)



articaine

(f) Articaine is metabolised in the body with a half-life of 20 minutes.

A patient is given a dose of 100 mg of articaine.

Calculate the mass of articaine **in micrograms**, μg , remaining in the body after **4 hours**.

[$1 \mu\text{g} = 10^{-3} \text{mg}$]

(3)

(Total for Question 25 = 20 marks)

TOTAL FOR SECTION C = 20 MARKS
TOTAL FOR PAPER = 90 MARKS



DO NOT WRITE IN THIS AREA

DO NOT WRITE IN THIS AREA

DO NOT WRITE IN THIS AREA

BLANK PAGE



P 7 1 9 4 3 A 0 3 3 3 6

DO NOT WRITE IN THIS AREA

DO NOT WRITE IN THIS AREA

DO NOT WRITE IN THIS AREA

BLANK PAGE



DO NOT WRITE IN THIS AREA

DO NOT WRITE IN THIS AREA

DO NOT WRITE IN THIS AREA

BLANK PAGE



P 7 1 9 4 3 A 0 3 5 3 6

The Periodic Table of Elements

1 2 3 4 5 6 7 0 (8) (18)

1.0
H
hydrogen
1

Key

relative atomic mass
atomic symbol
name
atomic (proton) number

(1)	(2)	(3)	(4)	(5)	(6)	(7)	(8)	(9)	(10)	(11)	(12)	(13)	(14)	(15)	(16)	(17)	(18)																																						
6.9 Li lithium 3	9.0 Be beryllium 4	23.0 Na sodium 11	24.3 Mg magnesium 12	39.1 K potassium 19	39.1 Ca calcium 20	88.9 Sc scandium 21	45.0 Ti titanium 22	47.9 V vanadium 23	50.9 Cr chromium 24	52.0 Mn manganese 25	54.9 Fe iron 26	55.8 Co cobalt 27	58.9 Ni nickel 28	63.5 Cu copper 29	65.4 Zn zinc 30	69.7 Ga gallium 31	72.6 Ge germanium 32	74.9 As arsenic 33	79.0 Se selenium 34	79.9 Br bromine 35	83.8 Kr krypton 36	85.5 Rb rubidium 37	87.6 Sr strontium 38	88.9 Y yttrium 39	91.2 Zr zirconium 40	92.9 Nb niobium 41	95.9 Mo molybdenum 42	101.1 Ru ruthenium 44	102.9 Rh rhodium 45	106.4 Pd palladium 46	107.9 Ag silver 47	112.4 Cd cadmium 48	114.8 In indium 49	118.7 Sn tin 50	121.8 Sb antimony 51	127.6 Te tellurium 52	127.6 I iodine 53	131.3 Xe xenon 54	132.9 Cs caesium 55	137.3 Ba barium 56	178.5 Hf hafnium 72	178.5 Ta tantalum 73	180.9 W tungsten 74	183.8 Re rhenium 75	186.2 Os osmium 76	190.2 Ir iridium 77	192.2 Pt platinum 78	195.1 Au gold 79	200.6 Hg mercury 80	204.4 Tl thallium 81	207.2 Pb lead 82	209.0 Bi bismuth 83	209.0 Po polonium 84	210.0 At astatine 85	222.0 Rn radon 86
[223] Fr francium 87	[226] Ra radium 88	[227] La* lanthanum 57	[227] Ac* actinium 89	[261] Rf rutherfordium 104	[262] Db dubnium 105	[266] Sg seaborgium 106	[264] Bh bohrium 107	[277] Hs hassium 108	[268] Mt meitnerium 109	[271] Ds darmstadtium 110	[272] Rg roentgenium 111	Elements with atomic numbers 112-116 have been reported but not fully authenticated																																											

140 Ce cerium 58	141 Pr praseodymium 59	144 Nd neodymium 60	147 Pm promethium 61	150 Sm samarium 62	152 Eu europium 63	157 Gd gadolinium 64	163 Dy dysprosium 66	165 Ho holmium 67	167 Er erbium 68	169 Tm thulium 69	173 Yb ytterbium 70	175 Lu lutetium 71
----------------------------------	--	-------------------------------------	--------------------------------------	------------------------------------	------------------------------------	--------------------------------------	--------------------------------------	-----------------------------------	----------------------------------	-----------------------------------	-------------------------------------	------------------------------------

* Lanthanide series

232 Th thorium 90	[231] Pa protactinium 91	238 U uranium 92	[237] Np neptunium 93	[242] Pu plutonium 94	[243] Am americium 95	[247] Cm curium 96	[251] Cf californium 98	[254] Es einsteinium 99	[253] Fm fermium 100	[256] Md mendelevium 101	[254] No nobelium 102	[257] Lr lawrencium 103
-----------------------------------	--	----------------------------------	---------------------------------------	---------------------------------------	---------------------------------------	------------------------------------	---	---	--------------------------------------	--	---------------------------------------	---

* Actinide series



DO NOT WRITE IN THIS AREA

DO NOT WRITE IN THIS AREA

DO NOT WRITE IN THIS AREA