

## GENERAL CERTIFICATE OF SECONDARY EDUCATION

## MATHEMATICS A

Unit C (Higher)

A503/02

SPECIMEN

Duration: 2 hours

Candidates answer on the Question Paper

**OCR Supplied Materials:**

None

**Other Materials Required:**

- Geometrical instruments
- Tracing paper (optional)
- Scientific or graphical calculator

Candidate  
ForenameCandidate  
Surname

Centre Number

Candidate Number

**INSTRUCTIONS TO CANDIDATES**

- Write your name clearly in capital letters, your Centre Number and Candidate Number in the boxes above.
- Use black ink. Pencil may be used for graphs and diagrams only.
- Read each question carefully and make sure that you know what you have to do before starting your answer.
- Your answers should be supported with appropriate working. Marks may be given for a correct method even if the answer is incorrect.
- Answer **all** the questions.
- Do **not** write in the bar codes.
- Write your answer to each question in the space provided.

**INFORMATION FOR CANDIDATES**

- The number of marks is given in brackets [ ] at the end of each question or part question.
- Use the  $\pi$  button on your calculator or take  $\pi$  to be 3.142 unless the question says otherwise.
- Your Quality of Written Communication is assessed in questions marked with an asterisk (\*).
- The total number of marks for this paper is **100**.
- This document consists of **24** pages. Any blank pages are indicated.

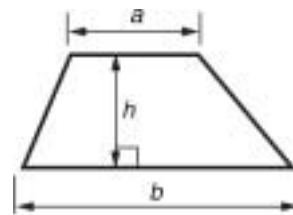


You are permitted to use a  
calculator for this paper.

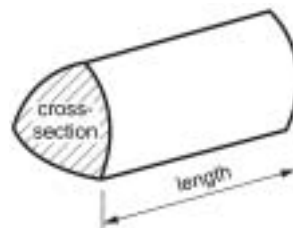


## Formulae Sheet: Higher Tier

**Area of trapezium**  $= \frac{1}{2}(a + b) h$



**Volume of prism**  $= (\text{area of cross-section}) \times \text{length}$

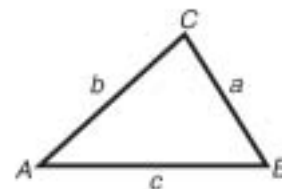


**In any triangle ABC**

**Sine rule**  $\frac{a}{\sin A} = \frac{b}{\sin B} = \frac{c}{\sin C}$

**Cosine rule**  $a^2 = b^2 + c^2 - 2bc \cos A$

**Area of triangle**  $= \frac{1}{2} ab \sin C$



**Volume of sphere**  $= \frac{4}{3} \pi r^3$

**Surface area of sphere**  $= 4\pi r^2$



**Volume of cone**  $= \frac{1}{3} \pi r^2 h$

**Curved surface area of cone**  $= \pi r l$



**The Quadratic Equation**

The solutions of  $ax^2 + bx + c = 0$ ,  
where  $a \neq 0$ , are given by

$$x = \frac{-b \pm \sqrt{(b^2 - 4ac)}}{2a}$$

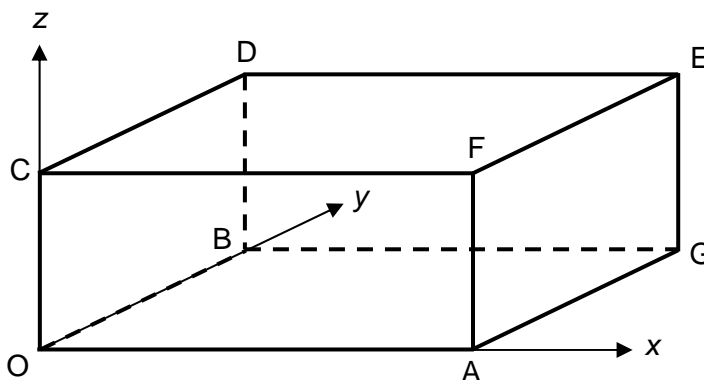
**PLEASE DO NOT WRITE ON THIS PAGE**

- 1 Pam gives her cat  $\frac{2}{3}$  of a tin of cat food at each meal.  
The cat has 2 meals each day.

How many tins of cat food will Pam need to buy to feed her cat for 7 days?

\_\_\_\_\_ [3]

- 2 The diagram shows a classroom in the shape of a cuboid.  
O is the origin, A is (8, 0, 0), B is (0, 7, 0) and C is (0, 0, 3).  
All lengths are in metres.



- (a) Write down the coordinates of these corners of the classroom.

(i) D

(a)(i) ( \_\_\_\_\_, \_\_\_\_\_, \_\_\_\_\_ ) [1]

(ii) E

(ii) ( \_\_\_\_\_, \_\_\_\_\_, \_\_\_\_\_ ) [1]

- (b) A light is to be fitted at the midpoint of the ceiling edge CF.

Write down the coordinates of this point.

(b) ( \_\_\_\_\_, \_\_\_\_\_, \_\_\_\_\_ ) [2]

- (c) A projector is to be fitted at the centre of the ceiling.

Write down the coordinates of this point.

(c) ( \_\_\_\_\_, \_\_\_\_\_, \_\_\_\_\_ ) [1]

4


- 3 In a school there are 5 House teams, A, B, C, D and E.  
In a football competition, each team plays every other team once.


- (a) Complete the table to show all the games to be played.  
The game when B plays D has been entered for you.

	A	B	C	D	E
A					
B				B,D	
C					
D					
E					

[2]

- (b) Explain why parts of the table are shaded.

(i) Some parts are shaded  because \_\_\_\_\_  
\_\_\_\_\_ [1]

(ii) Other parts are shaded  because \_\_\_\_\_  
\_\_\_\_\_ [1]

4 Use your calculator to work these out.

(a)  $\frac{8 \cdot 7 + 3 \cdot 9}{2 \cdot 1 \times 5 \cdot 4}$

(a) \_\_\_\_\_ [2]

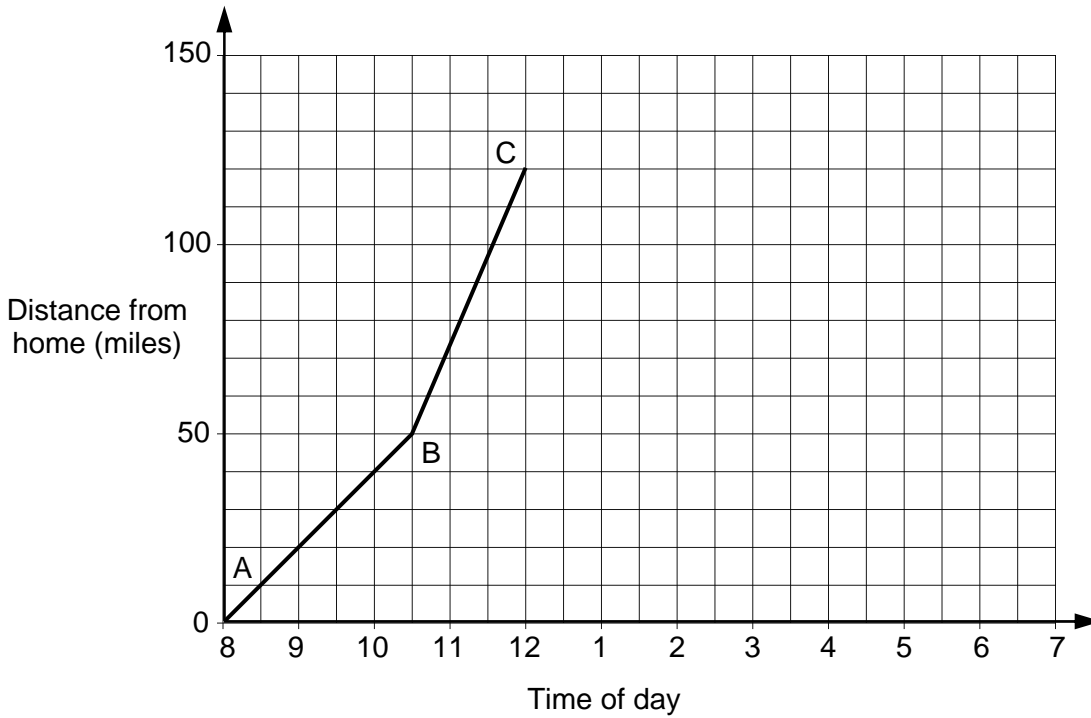
(b)  $\frac{4}{5} - \frac{3}{7}$

(b) \_\_\_\_\_ [1]

(c)  $\sqrt{6 \cdot 3^2 + 5 \cdot 2^2}$

(c) \_\_\_\_\_ [2]

- 5 The Khan family went on a day trip to a theme park.  
The graph represents their car journey to the theme park.



- (a) Work out the speed of the car on the section of the journey AB.

(a) \_\_\_\_\_ mph [2]

- (b) On which part of the journey was the car travelling faster?  
How can you tell this?

\_\_\_\_\_ because \_\_\_\_\_  
\_\_\_\_\_ [1]

- (c) The family stayed at the theme park for 4 hours.  
The return car journey took 2 hours.

Complete the graph to show the rest of their day out. [2]

7

- 6 Use trial and improvement to find the solution of this equation correct to 1 decimal place.

$$x^3 + 2x^2 = 13$$

Show all your trials and their outcomes.

---

[4]

## 8

7\* Brian wants to invest £10 000 for one year.  
His bank offers two plans.

- 'Annual Booster': 6.5% per year, with the interest added at the end of the year.
- 'Monthly Plus': 0.5% per month compound interest, with the interest added at the end of each month.

Brian will make no withdrawals during the year.

Recommend which plan Brian should use, and why.

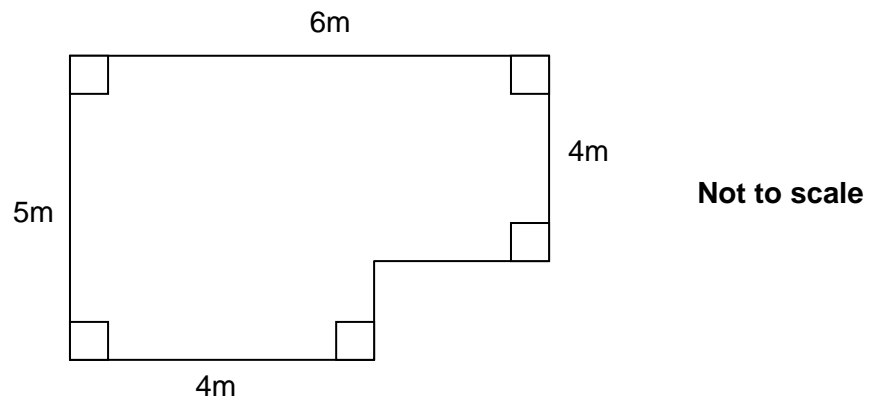
---

[5]



9

8 This is the plan of Catalina's bedroom.



Catalina has chosen to use carpet costing £8.99 per square metre to cover her bedroom floor.

Work out the cost of the carpet.

£ \_\_\_\_\_ [5]

9 (a) Multiply out the brackets.

$$3(2x + 5)$$

(a) \_\_\_\_\_ [2]

(b) (i) Rearrange this equation to make  $p$  the subject.

$$t = 7p - 50$$

(b)(i)  $p =$  \_\_\_\_\_ [2]

(ii) Rearrange this equation to make  $x$  the subject.

$$y = \sqrt{2x}$$

(ii)  $x =$  \_\_\_\_\_ [2]

11

**10** A one ounce measure of poppy seeds contains approximately  $1.4 \times 10^5$  seeds.

Given that 1 ounce is equal to 28.3 g, work out how many poppy seeds would be in a 1 kg measure of seeds.

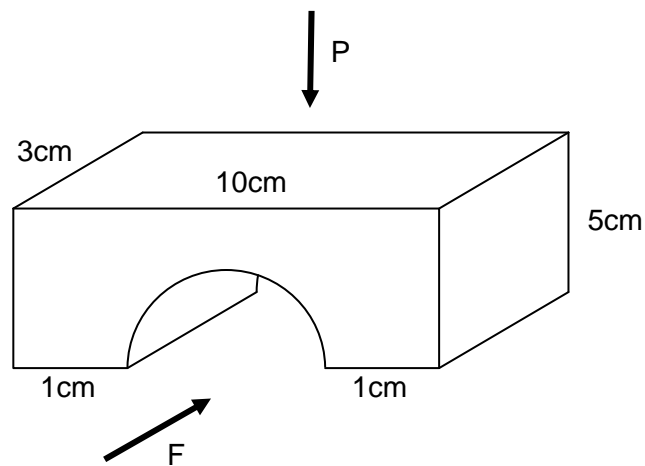
Give your answer in standard form.

---

[3]


12

- 11 The diagram shows a child's building brick.  
The brick is a cuboid with a semi-circular tunnel.




- (a) On the grids, draw the front elevation (from F) and the plan (from P).

Front elevation



Plan



[4]

13

(b) Calculate the volume of the brick.

(b) \_\_\_\_\_ cm<sup>3</sup> [5]

14

12 In normal conditions, the stopping distance,  $D$  feet, of a car travelling at  $V$  mph is given by this formula.

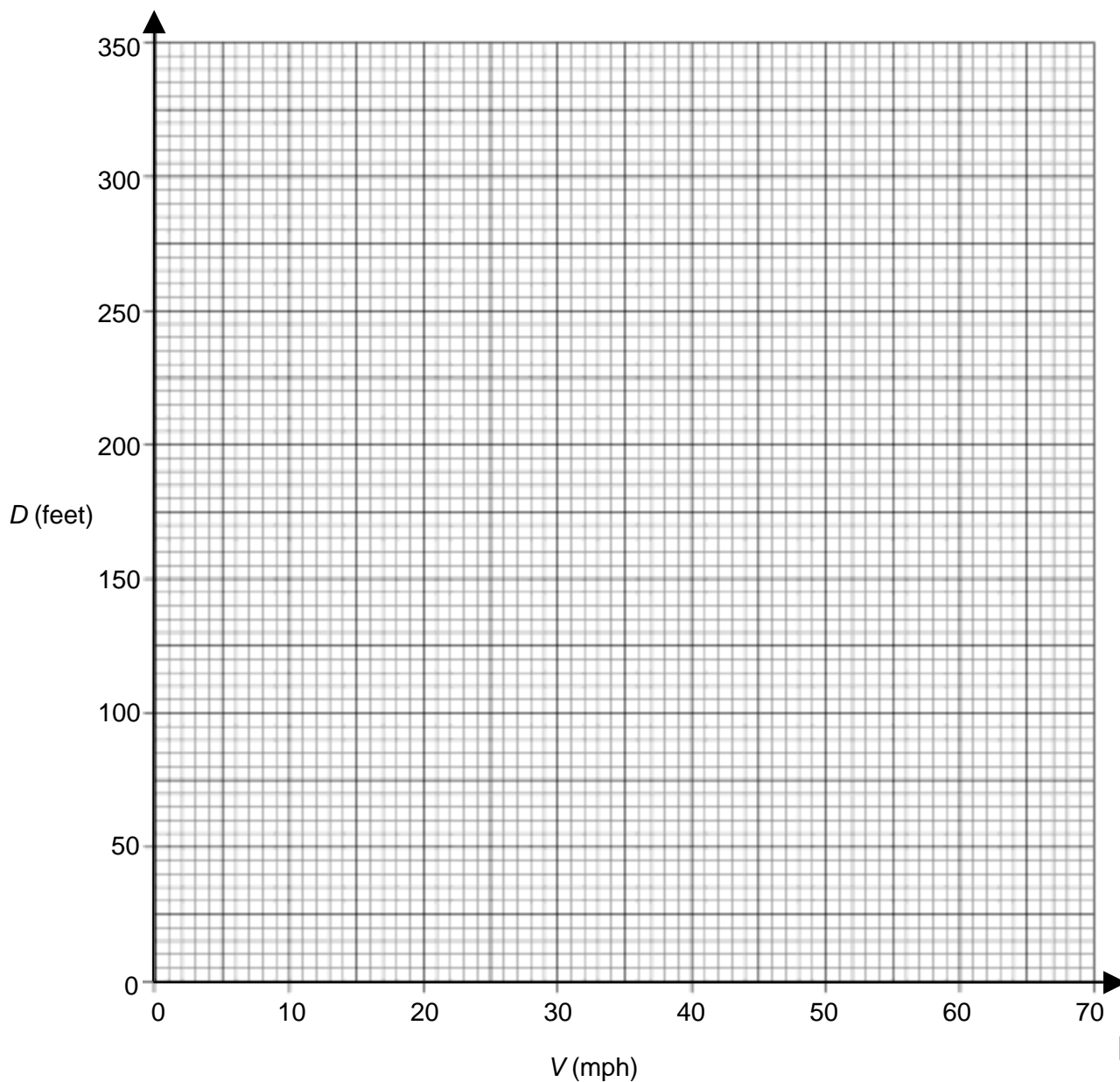
$$D = V + \frac{V^2}{20}$$

(a) Complete the table.

$V$ (mph)	0	10	20	30	40	50	60	70
$D$ (feet)			40			175	240	315

[2]

(b) Draw the graph of  $D = V + \frac{V^2}{20}$ .



[3]

15

- (c) Use your graph to find the stopping distance of a car travelling at 66 mph in normal conditions.

(c) \_\_\_\_\_ feet [1]

- (d) On wet roads the stopping distance is twice as far as in normal conditions.

Use your graph to find the maximum speed a car could travel at if it must stop in a distance of 200 feet on a wet road.

(d) \_\_\_\_\_ mph [2]

- 13 (a) Factorise these expressions.

(i)  $4x^2 - 20x$

(a)(i) \_\_\_\_\_ [2]

(ii)  $x^2 - 25$

(ii) \_\_\_\_\_ [1]

- (b) Multiply out the brackets and simplify.

$$(2x - 1)(3x + 4)$$

(b) \_\_\_\_\_ [3]

16

- 14 One year, a company director paid £35 460 tax at the higher rate of 40%.  
The following year, this higher rate increases to 50%.

If her salary stays the same, how much will she pay in tax at the new higher rate?

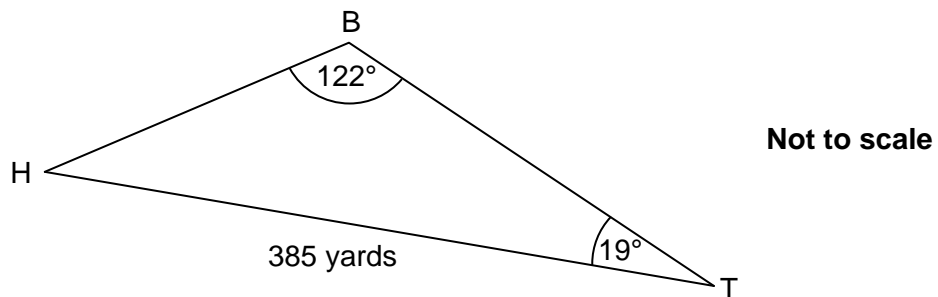
£ \_\_\_\_\_ [4]



17

15 On a golf course, the distance from the tee, T, to the hole, H, is 385 yards.

After his first shot, a golfer's ball lands at B.  
Angle HTB =  $19^\circ$  and angle TBH =  $122^\circ$ .



Calculate the distance, BH, of the ball from the hole.

\_\_\_\_\_ yards [3]

18

16 A line and a curve have the following equations.

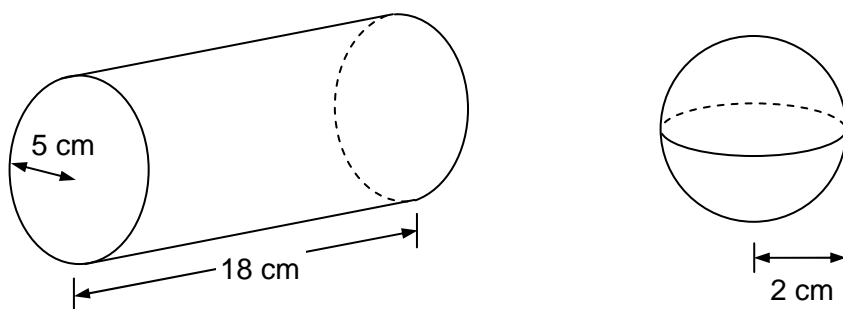
$$\begin{aligned}3x + 2y &= 7 \\ y &= x^2 - 2x + 3\end{aligned}$$

Find the coordinates of the points of intersection of the line and the curve by solving these simultaneous equations algebraically.

( \_\_\_\_\_ , \_\_\_\_\_ ) ( \_\_\_\_\_ , \_\_\_\_\_ ) [8]

19

- 17 A solid metal cylinder of radius 5 cm and length 18 cm is melted down and made into spheres of radius 2 cm.



Assuming that none of the metal is lost in the process, work out how many of the spheres can be made.

---

[5]

20

18 Anya, Bill and Chris are playing basketball.

They have the following probabilities of getting a basket on their next shot.

$$\text{Anya } \frac{2}{5} \quad \text{Bill } \frac{1}{3} \quad \text{Chris } \frac{1}{4}$$

They each take one shot at the basket. Anya goes first, then Bill and finally Chris.

(a) Calculate the probability that exactly one of them gets a basket.

(a) \_\_\_\_\_ [4]

(b) Calculate the probability that Bill is the first of the three of them to get a basket.

(b) \_\_\_\_\_ [3]

22

- 19 The length of the base of a triangle is 12 cm, correct to the nearest cm.  
The area of the triangle is  $60 \text{ cm}^2$ , correct to the nearest  $10 \text{ cm}^2$ .

Calculate the upper and lower bounds of the height of the triangle.

Upper bound \_\_\_\_\_ cm

Lower bound \_\_\_\_\_ cm [5]

**BLANK PAGE**

**PLEASE DO NOT WRITE ON THIS PAGE**

**PLEASE DO NOT WRITE ON THIS PAGE**



**Copyright Information**

Permission to reproduce items where third-party owned material protected by copyright is included has been sought and cleared where possible. Every reasonable effort has been made by the publisher (OCR) to trace copyright holders, but if any items requiring clearance have unwittingly been included, the publisher will be pleased to make amends at the earliest opportunity.

OCR is part of the Cambridge Assessment Group. Cambridge Assessment is the brand name of University of Cambridge Local Examinations Syndicate (UCLES), which is itself a department of the University of Cambridge.





**OXFORD CAMBRIDGE AND RSA EXAMINATIONS**

**General Certificate of Secondary Education**

**MATHEMATICS A**

**A503/02**

Unit C (Higher)

**Specimen Mark Scheme**

The maximum mark for this paper is **100**.

This document consists of **6** printed pages and **2** blank pages.

1		10	3	<b>B2</b> for 9.3 or better <b>Or M1</b> for $\frac{2}{3} \times 2 \times 7$
2	(a)	(i) (0,7,3)	1	
		(ii) (8,7,3)	1	
	(b)	(4,0,3)	2	<b>SC1</b> for correct 3 values in any order
	(c)	(4,3.5,3) oe	1	
3	(a)	All 9 pairs correct	2	<b>B1</b> for 4 correct pairs Ignore entries in shaded sections
	(b)	(i) Cannot play themselves oe	1	
		(ii) Play each other once only	1	
4	(a)	1.11(11...) oe	2	<b>B1</b> for $12.6 \div 11.34$
	(b)	$\frac{13}{35}$ or 0.371...	1	
	(c)	8.169 or 8.17 or 8.2	2	<b>B1</b> for 66.73 seen
5	(a)	20	2	<b>M1</b> for $50 \div 2.5$ oe Condone 2.30 for <b>M1</b>
	(b)	BC, steeper line	1	
	(c)	Horizontal line to (4,120) Line(s) from <i>their</i> (4,120) to (6,0)	1 <b>ft1</b>	By eye May be curve as long as no vertical part
6		Value between 1 and 2 inclusive 1.8 or 1.9 Value between 1.8 and 1.9 1.8	1 1 1 1	Or after 1.8 <b>and</b> 1.9 used, mention of closer to 1.8

7 *		<p>Calculates correct amount of interest (AB: 650, MP: 616.77 or 616.78 or 617) or correct total sum (AB: 10 650, MP: 10 616.77 or 10 616.78 or 10 617) for each plan <b>and</b> recommends that Brian uses Annual Booster plan as he will earn more money. Well laid-out answer with correct and clear language throughout.</p> <p>Makes minor errors in calculating amount of interest or total sum for each plan <b>and</b> makes a recommendation based on their calculations. Some structure to the calculations or recommendation with minor errors in spelling, punctuation or grammar.</p> <p>Correctly calculates amount of interest or total sum for one plan, and may or may not make a recommendation. Little structure evident.</p> <p>No relevant calculations</p>	<p><b>5</b></p> <p><b>3-4</b></p> <p><b>1-2</b></p> <p><b>0</b></p>	<p>For lower mark – calculates amount of interest or total sum for each plan but makes no recommendation/incorrect recommendation based on their calculations <b>or</b> there are a number of errors in spelling, punctuation or grammar.</p> <p>For lower mark – attempts to calculate amount of interest or total sum for one plan (working must be seen) and no recommendation made.</p>
8		<p>Missing length 1 or 2 soi  <math>5 \times 4 + 4 \times 2</math> or <math>6 \times 4 + 1 \times 4</math> or  <math>6 \times 5 - 2 \times 1</math>  <i>Their</i> <math>28 \times 8.99</math>  251.72</p>	<p><b>1</b>  <b>M2</b>    <b>M1</b>  <b>A1</b></p>	<p><b>M1</b> for correct area of one rectangle</p>
9	(a) (b)	<p><math>6x + 15</math></p> <p>(i) <math>\frac{t+50}{7}</math></p> <p>(ii) <math>\frac{y^2}{2}</math></p>	<p><b>2</b>  <b>2</b>  <b>2</b></p>	<p><b>B1</b> for <math>6x</math> or <math>+ 15</math> seen</p> <p><b>M1</b> for <math>t + 50 = 7p</math> or other correct first step</p> <p><b>M1</b> for <math>y^2 = 2x</math></p>
10		<p>4.9 to <math>4.95 \times 10^6</math></p>	<p><b>3</b></p>	<p><b>M1</b> for <math>1.4 \times 10^5 \div 28.3 \times 1000</math> oe  <b>And A1</b> for 4900000 to 4950000</p>

11	(a)	Correct front elevation including semi-circle radius 4	<b>2</b>	<b>B1</b> for 10 by 5 rectangle
		Correct plan including two dotted 'hidden' lines	<b>2</b>	<b>B1</b> for 10 by 3 rectangle
	(b)	$3 \times 10 \times 5$ 150 $(0.5 \times) \pi \times 4^2 \times 3$ 75.4 74.5 to 74.7	<b>M1</b> <b>A1</b> <b>M1</b> <b>A1</b> <b>A1</b>	<u>Alternative method</u> <b>Or M1</b> for $10 \times 5$ <b>And M1</b> for $-(0.5 \times) \pi \times 4^2$ <b>And A1</b> for 24.87 or 24.9 <b>And M1</b> for $(24.87 \text{ or } 24.9) \times 3$ <b>And A1</b> for 74.5 to 74.7
12	(a)	0, 15, 75, 120	<b>2</b>	<b>B1</b> for two values correct
	(b)	8 points correctly plotted Curve through <i>their</i> points	<b>2</b> <b>1</b>	<b>B1</b> for 4 points correctly plotted $\pm \frac{1}{2}$ sm sq. $\pm \frac{1}{2}$ small square
	(c)	275 to 287	<b>1</b>	
	(d)	35.5 to 37	<b>2</b>	<b>M1</b> for reading from 100 feet
13	(a)	(i) $4x(x - 5)$	<b>2</b>	<b>M1</b> for $4(x^2 - 5x)$ or $x(4x - 20)$
		(ii) $(x - 5)(x + 5)$	<b>1</b>	
	(b)	$6x^2 + 5x - 4$	<b>3</b>	<b>B1</b> for each of $6x^2$ , $5x$ , $-4$
14		44 325	<b>4</b>	<b>M2</b> for $35\,460 \div 0.4$ <b>Or M1</b> for 40% of pay = 35 460 <b>And A1</b> for 88 650
15		147.8° to 148°	<b>3</b>	<b>M2</b> for $385 \times \sin 19 \div \sin 122$ <b>Or M1</b> for $\frac{x}{\sin 19} = \frac{385}{\sin 122}$
16		$3x + 2(x^2 - 2x + 3) = 7$ $2x^2 - x - 1 = 0$  $(2x + 1)(x - 1)$  $x = 1$ <u>and</u> $x = -\frac{1}{2}$ oe $y = 2$ $y = 4\frac{1}{4}$ oe $(1, 2)$ and $(-\frac{1}{2}, 4\frac{1}{4})$	<b>M1</b> <b>A1</b>  <b>FTM2</b>  <b>B1</b> <b>B1</b> <b>B1</b> <b>B1</b>	oe method to eliminate one variable or $4y^2 - 25y + 34 = 0$ oe of these terms  or $(4y - 17)(y - 2)$ or factorisation for their trinomial <b>or M1</b> for $(2x \pm 1)(x \pm 1)$ or for $(4y \pm 17)(y \pm 2)$ or ft "correct", wrong signs  Last four marks are independent of any previous method

## 5

17		$\pi \times 5^2 \times 18$ $\frac{4}{3} \times \pi \times 2^3$ <i>their 1413.7 ÷ their 33.5</i> 42.(...) 42	<b>1</b> <b>1</b> <b>M1</b> <b>A1</b> <b>1</b>	soi by 1413.7 soi by 33.5
18	(a)	$\frac{27}{60}$ oe	<b>4</b>	<b>M1</b> for $\frac{2}{5} \times \frac{2}{3} \times \frac{3}{4}$ <b>And M1</b> for $\frac{3}{5} \times \frac{1}{3} \times \frac{3}{4}$ <b>And M1</b> for $\frac{3}{5} \times \frac{2}{3} \times \frac{1}{4}$ <u>After 0 scored</u> <b>SC1</b> for sight of two of $\frac{3}{5}, \frac{2}{3}, \frac{3}{4}$
	(b)	$\frac{12}{60}$ oe	<b>3</b>	<b>M2</b> for $\frac{3}{5} \times \frac{1}{3}$ <b>Or M1</b> for $\frac{3}{5} \times \frac{1}{3} \times \frac{1}{4}$ <b>And M1</b> for $\frac{3}{5} \times \frac{1}{3} \times \frac{3}{4}$
19		Using $\frac{2 \times 60}{12}$ soi $\frac{2 \times 65}{11.5}$ oe 11.3 $\frac{2 \times 55}{12.5}$ oe 12.5 8.8	<b>M1</b> <b>M1</b> <b>A1</b> <b>M1</b> <b>A1</b>	

### Assessment Objectives and Functional Elements Grid

GCSE MATHEMATICS A

A503/02: Unit C (Higher)

Qn	Topic	AO1	AO2	AO3	Functional
1	Fractions			3	3
2	3-D coordinates	2	3		
3	Listing		4		2
4	Calculator work	5			
5	Dist/time graph		3	2	
6	Trial and improvement	4			
7	Repeated percentage change			5	5
8	Compound area		5		5
9	Expand brackets, Rearrange formula	6			
10	Standard form			3	
11	Views. Volume	4		5	
12	Quadratic graph	6		2	2
13	Factorise, Expand brackets	6			
14	Reverse percentages		4		4
15	Sine rule	3			
16	Line and curve	8			
17	Cylinder and sphere			5	
18	Probability		7		
19	Bounds	5			
	TOTAL	49	26	25	21

7

**BLANK PAGE**

**SPECIMEN**

**BLANK PAGE**