



Please write clearly in block capitals.

Centre number

--	--	--	--	--

Candidate number

--	--	--	--

Surname

---

Forename(s)

---

Candidate signature

---

# GCSE MATHEMATICS

# H

Higher Tier Unit 1 Statistics and Number

Wednesday 2 November 2016

Morning

Time allowed: 1 hour

## Materials

For this paper you must have:

- a calculator
- mathematical instruments.



## Instructions

- Use black ink or black ball-point pen. Draw diagrams in pencil.
- Answer **all** questions.
- You must answer the questions in the spaces provided. Do not write outside the box around each page or on blank pages.
- Do all rough work in this book.

## Information

- The marks for questions are shown in brackets.
- The maximum mark for this paper is 54.
- The quality of your written communication is specifically assessed in Questions 1 and 9. These questions are indicated with an asterisk (\*).
- You may ask for more answer paper and graph paper. These must be tagged securely to this answer book.

## Advice

- In all calculations, show clearly how you work out your answer.



N 0 V 1 6 4 3 6 0 1 H 0 1

WMP/Nov16/E3

**43601H**

Answer **all** questions in the spaces provided.

- 1** On Thursday, the number of cars using 13 car parks is recorded.  
Here are the results.

40	51	72	47	60
55	61	75	63	69
52	64	56		

- \*1 (a)** Show the data on an ordered stem-and-leaf diagram.  
Remember to complete the key.

**[4 marks]**

Key: \_\_\_\_\_ | \_\_\_\_\_ represents \_\_\_\_\_ cars



**1 (b)** On Friday, the median number of cars using the car parks is 15% lower than Thursday.

Work out the median for Friday.

**[3 marks]**

---

---

---

---

---

---

---

Answer \_\_\_\_\_

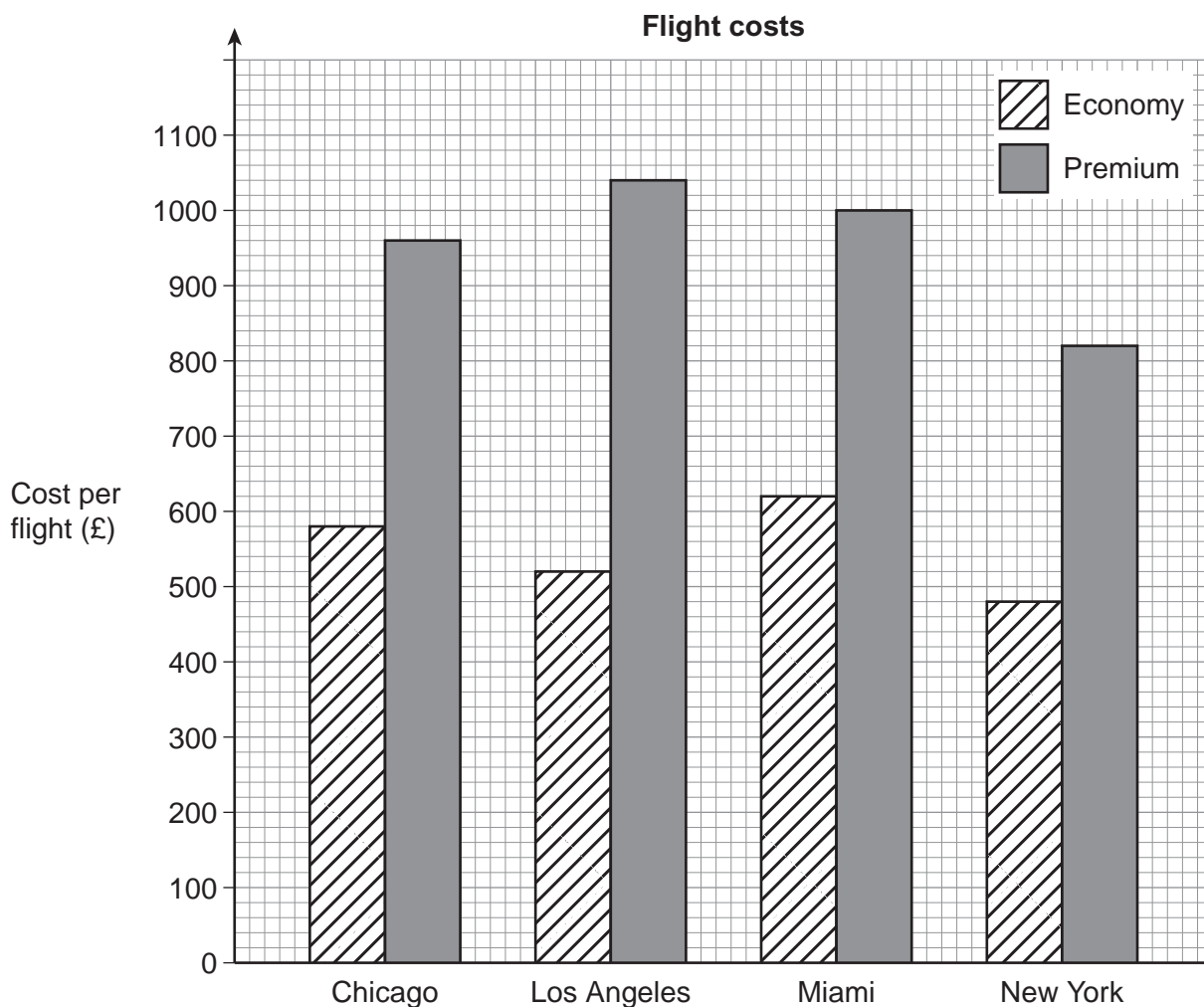
**Turn over for the next question**

7
---

**Turn over ►**



2 The bar chart shows the cost of flights to four cities.



75 people fly to Miami.  
Some fly Economy and the others fly Premium.

The total cost of the **Economy** flights is £37 820

Use the bar chart to work out the total cost of the **Premium** flights.

[4 marks]

---

---

---

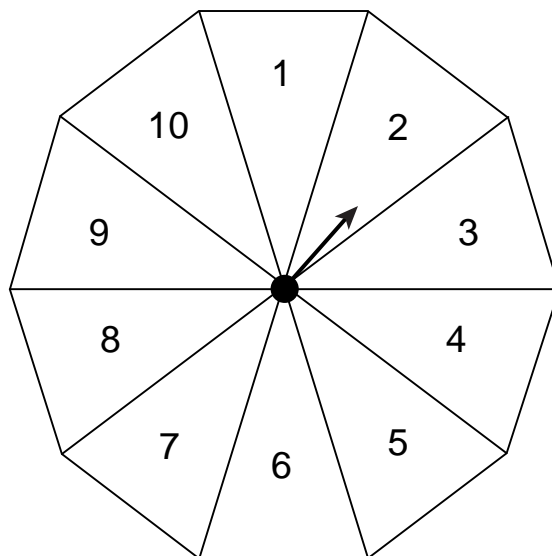
---

---

Answer £ \_\_\_\_\_



- 3 (a)** A fair spinner has 10 equal sections.



Here are the results of eight spins.

4      7      5      6      4      9      4      2

Circle the probability of the arrow landing on 4 on the next spin.

[1 mark]


$$\frac{1}{10}$$

$$\frac{3}{8}$$

$$\frac{4}{10}$$

$$\frac{4}{9}$$

- 3 (b)** Describe how to test if a six-sided dice is fair.



[2 marks]

---



---



---



---



---

7

Turn over ►



4 In a survey, 160 people chose A, B or C.

30 women and 26 men chose B.

**Women** chose A : B : C in the ratio 1 : 2 : 3

2 **more** people chose A than chose C.

Complete the table.

[5 marks]

	A	B	C	Total
Women		30		
Men		26		
Total				160



5 Each day Chen buys pasta or a sandwich.

Pasta	£3.20
Sandwich	£2.75

For 45 days, the relative frequency of Chen buying a sandwich was  $\frac{1}{5}$

Altogether, how much did he pay?

**[4 marks]**

---

---

---

---

---

---

---

Answer £ \_\_\_\_\_

**Turn over for the next question**



- 6 The table shows information about the waiting times of 400 patients.

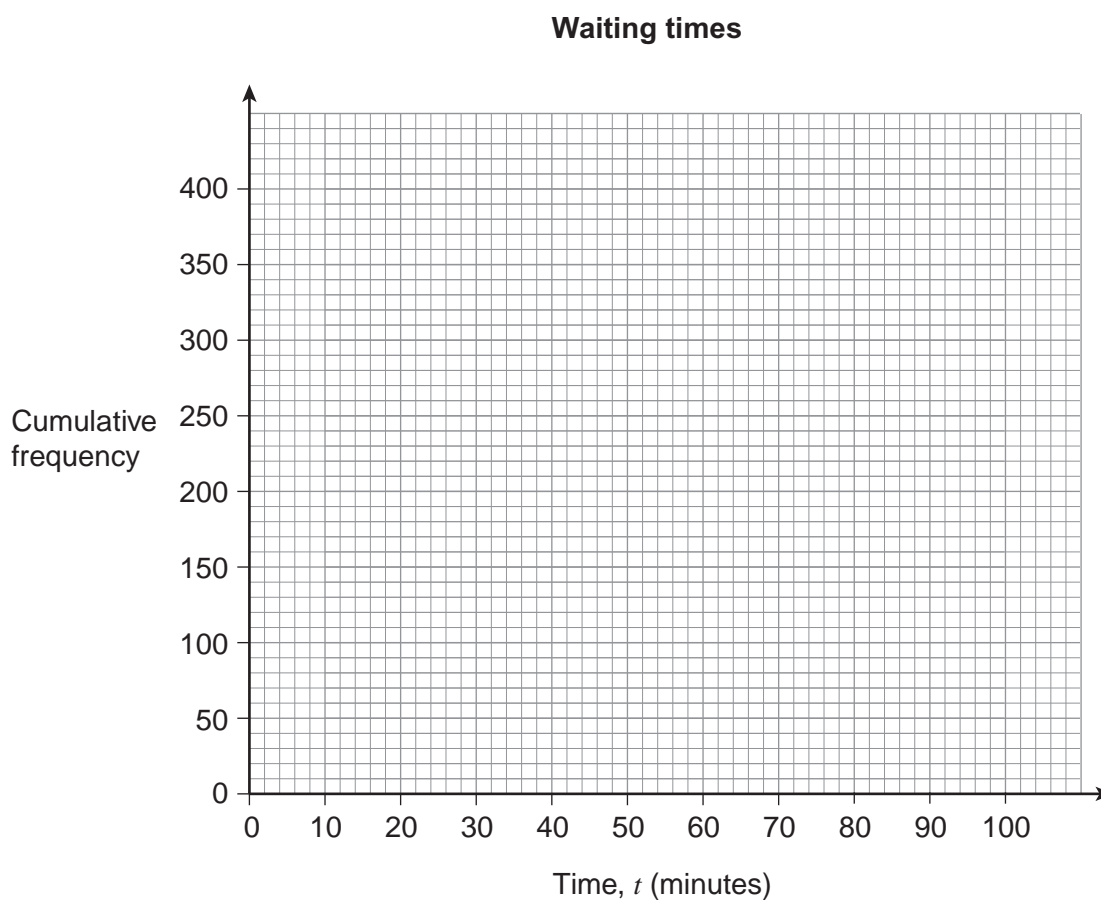
Time, $t$ (minutes)	Frequency	Cumulative frequency
$10 < t \leq 30$	50	50
$30 < t \leq 50$	40	
$50 < t \leq 65$	110	
$65 < t \leq 80$	155	
$80 < t \leq 100$	45	

- 6 (a) Complete the cumulative frequency column.

[1 mark]

- 6 (b) Show the information on a cumulative frequency graph.

[3 marks]





7 In a competition, Amy and Beth each get five marks.

For each person,

the marks are put in order

the score is the mean of the middle three marks.

**Amy**

Mean of all <b>five</b> marks	7.6
Lowest mark	6.5
Highest mark	9.9

**Beth**

Score	7.4
-------	-----

Who has the higher score?  
You **must** show your working.

**[4 marks]**

---

---

---

---

---

---

---

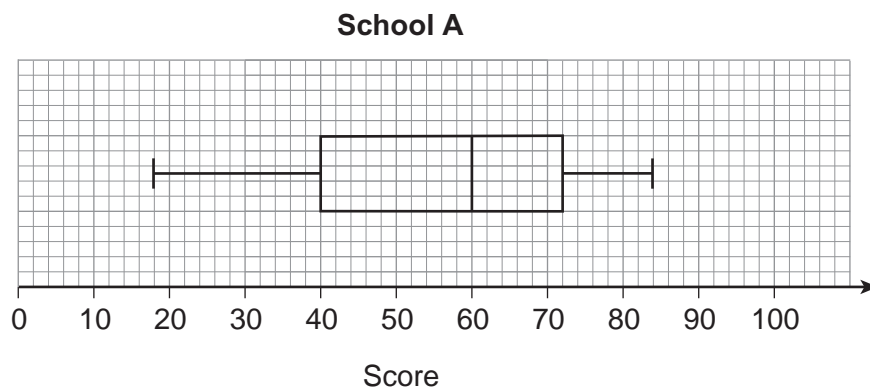
---

Answer \_\_\_\_\_



**8** Students from two schools took part in a maths challenge.  
None of the students scored 60 or 72

**8 (a)** 164 students from school A took part.



Work out the number of students from school A who scored **more than 72**

**[2 marks]**

---

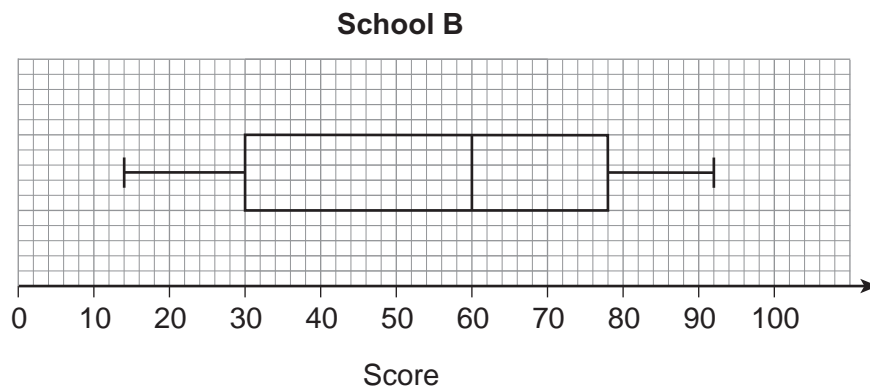


---

Answer \_\_\_\_\_



8 (b) This box plot represents the scores of the students from school B.



190 students in total from **both** schools scored **more than** 60

Use both box plots to work out the number of students from school B who took part.

[2 marks]

---



---



---

Answer \_\_\_\_\_

Turn over for the next question

4
---

Turn over ►



**\*9**

I decrease a number by 26%

The answer is  $9 \times 10^{-7}$ 

What number did I start with?

Give your answer in standard form.

**[3 marks]**

---

---

---

---

---

---

---

Answer \_\_\_\_\_



10 The table shows information about 1500 people watching a sport.

		Gender	
		Male	Female
Age group	Adult	340	260
	Child	502	398

Kelly wants to survey 75 of these people, stratified by age group and gender.

How many **more** children than adults should she survey?

[3 marks]

---

---

---

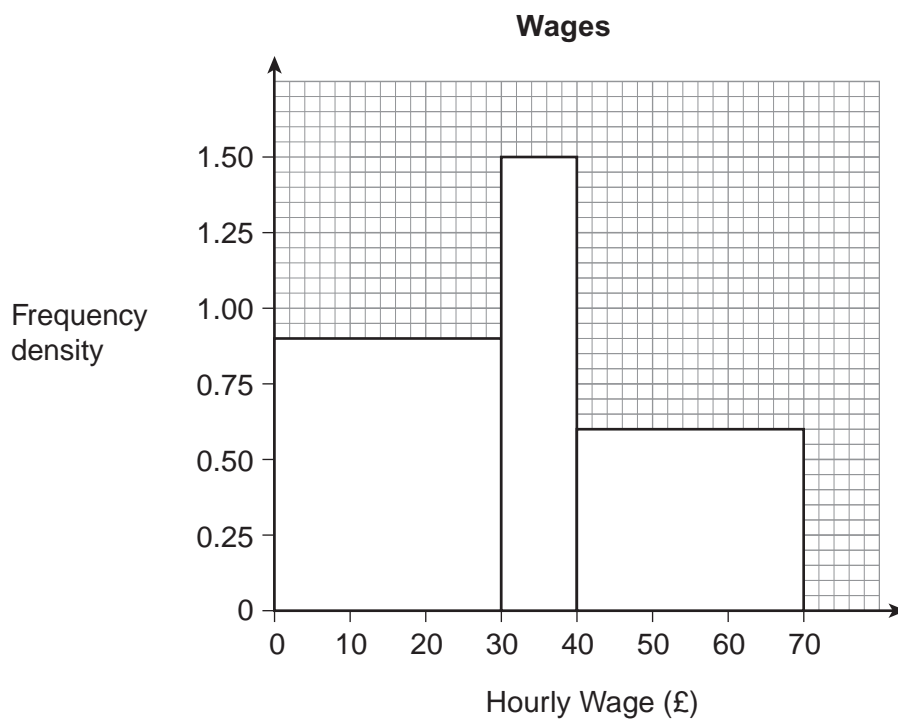
---

---

Answer \_\_\_\_\_



11 The histogram shows information about the hourly wages of people in a company.



11 (a) Show that there are 60 people in the company.

[2 marks]

---



---



---



---



11 (b) Estimate the mean hourly wage.

[4 marks]

---

---

---

---

---

---

---

Answer £ \_\_\_\_\_

11 (c) Sarah has the 12th highest hourly wage in the company.

Estimate her hourly wage.  
You **must** show your working.

[2 marks]

---

---

---

---

---

Answer £ \_\_\_\_\_

Turn over for the next question

8
---

Turn over ►



- 12** The table shows information about the ages, in years, of 100 people.

Age (years)	Frequency
Under 18	12
18 to 65	78
Over 65	10
	Total = 100

Two of the people are chosen at random.

- 12 (a)** Work out the probability that both are over 65

**[2 marks]**

---

---

---

Answer \_\_\_\_\_





**12 (b)** Work out the probability that one is under 18 and the other is 18 or over.

**[3 marks]**

---

---

---

---

---

Answer \_\_\_\_\_

**END OF QUESTIONS**



**There are no questions printed on this page**

**DO NOT WRITE ON THIS PAGE  
ANSWER IN THE SPACES PROVIDED**



**There are no questions printed on this page**

**DO NOT WRITE ON THIS PAGE  
ANSWER IN THE SPACES PROVIDED**



**There are no questions printed on this page**

**DO NOT WRITE ON THIS PAGE  
ANSWER IN THE SPACES PROVIDED**

**Copyright Information**

For confidentiality purposes, from the November 2015 examination series, acknowledgements of third party copyright material will be published in a separate booklet rather than including them on the examination paper or support materials. This booklet is published after each examination series and is available for free download from [www.aqa.org.uk](http://www.aqa.org.uk) after the live examination series.

Permission to reproduce all copyright material has been applied for. In some cases, efforts to contact copyright-holders may have been unsuccessful and AQA will be happy to rectify any omissions of acknowledgements. If you have any queries please contact the Copyright Team, AQA, Stag Hill House, Guildford, GU2 7XJ.

Copyright © 2016 AQA and its licensors. All rights reserved.

