

Wednesday 6 November 2013 – Morning

GCSE MATHEMATICS A

A502/01 Unit B (Foundation Tier)

Candidates answer on the Question Paper.

OCR supplied materials:

None

Other materials required:

- Geometrical instruments
- Tracing paper (optional)

Duration: 1 hour



Candidate forename		Candidate surname	
--------------------	--	-------------------	--

Centre number								Candidate number				
---------------	--	--	--	--	--	--	--	------------------	--	--	--	--

INSTRUCTIONS TO CANDIDATES

- Write your name, centre number and candidate number in the boxes above. Please write clearly and in capital letters.
- Use black ink. HB pencil may be used for graphs and diagrams only.
- Answer **all** the questions.
- Read each question carefully. Make sure you know what you have to do before starting your answer.
- Your answers should be supported with appropriate working. Marks may be given for a correct method even if the answer is incorrect.
- Write your answer to each question in the space provided. Additional paper may be used if necessary but you must clearly show your candidate number, centre number and question number(s).
- Do **not** write in the bar codes.

INFORMATION FOR CANDIDATES

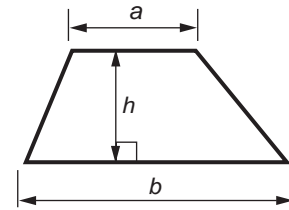
- The number of marks is given in brackets [] at the end of each question or part question.
- Your quality of written communication is assessed in questions marked with an asterisk (*).
- The total number of marks for this paper is **60**.
- This document consists of **16** pages. Any blank pages are indicated.



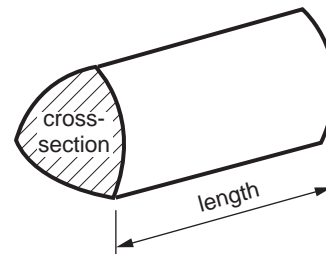
2

Formulae Sheet: Foundation Tier

Area of trapezium = $\frac{1}{2} (a + b)h$



Volume of prism = (area of cross-section) \times length

**PLEASE DO NOT WRITE ON THIS PAGE**

3

Answer **all** the questions.

- 1 These are the different prices and colours of postage stamps that can be bought in a Post Office.

Stamp price	Colour
1p	Maroon
2p	Dark Green
5p	Ash Pink
10p	Light Tan
20p	Light Green
50p	Light Grey
£1.00	Ruby
£1.50	Terracotta
£2.00	Slate Blue
£3.00	Purple
£5.00	Grey Blue

- (a) Jay buys a Maroon coloured stamp and a Ruby coloured stamp.

How much altogether does Jay pay for these stamps?

(a) £ _____ [2]

- (b) Ahmed takes a parcel to the Post Office.
He puts stamps with a total value of £8 on the parcel.
None of the stamps on the parcel are the same.

Write down two ways this can be done.

(b) First way _____

Second way _____ [2]

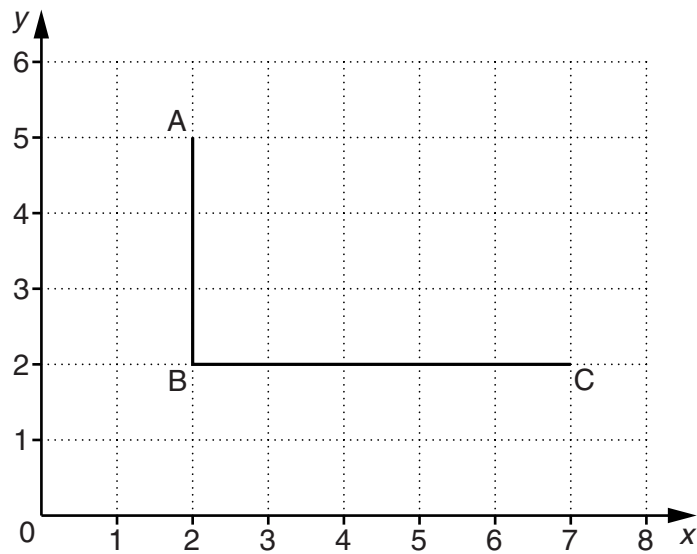
- (c) Carole buys one 2p stamp, two 20p stamps and one 50p stamp.
She pays with a £1 coin.

How much change should she receive?

(c) _____ p [2]

4

2 Two sides of a rectangle ABCD are drawn on this one-centimetre grid.



(a) Write down the coordinates of C.

(a) (_____ , _____) [1]

(b) What is the length of side BC?
Give your answer in **millimetres**.

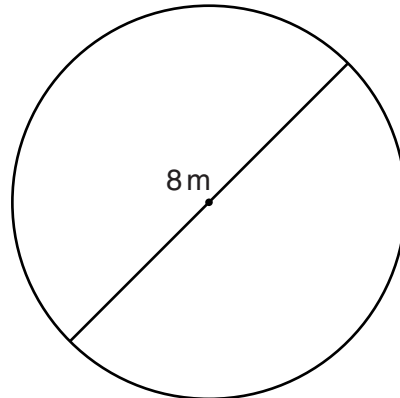
(b) _____ mm [1]

(c) On the grid, complete rectangle ABCD.

[1]

5

- 3 Amy has a circular lawn.
Its diameter is 8 metres.



- (a) A diameter is drawn on the diagram.

Complete the statement, using a word from this list.

tangents	semicircles	chords
----------	-------------	--------

A diameter splits any circle into two _____ [1]

- (b) Write down the radius of Amy's lawn.

(b) _____ m [1]

- (c) Amy finds this rule to work out how far it is around her lawn.

The circumference, C , is 3 times the diameter, d .

Write this as a formula using algebra.

(c) _____ [2]

6

- 4 (a) Work out each of these calculations.
Write the answers in order, starting with the smallest.

10% of 310

 20×1.5 6^2 $\frac{1}{4}$ of 100

_____ [4]
smallest

7

(b)* Kieran took a Maths test and a Science test in September.
These are his test scores.

Maths	Science
11 out of 20	7 out of 10

In November, Kieran took another Maths test and another Science test.
These are his new scores.

Maths	Science
30 out of 50	18 out of 25

Kieran says, "I have improved in both Maths and Science."

Is Kieran correct?


Support your answer with evidence.

[4]

8

- 5 (a) **Estimate** how much Maria will pay for 2.9 kg of these potatoes.
Show the values you use.

Potatoes
61p a
kilogram



(a) _____ [3]

- (b) A supermarket sells these bags of potatoes.

- (i) Marek buys 4 of these bags of potatoes.

How much does he spend?



(b)(i) £ _____ [1]

- (ii)* Alison needs 30 potatoes for a barbeque.
She buys one of these bags.
The supermarket says that each potato weighs at least 125 g and not more than 200 g.

Can Alison be sure that she has enough potatoes?
Show how you decide.

[3]

- (c) John eats one potato for his dinner each day.
3 potatoes weigh about a pound.
There are 365 days in a year.

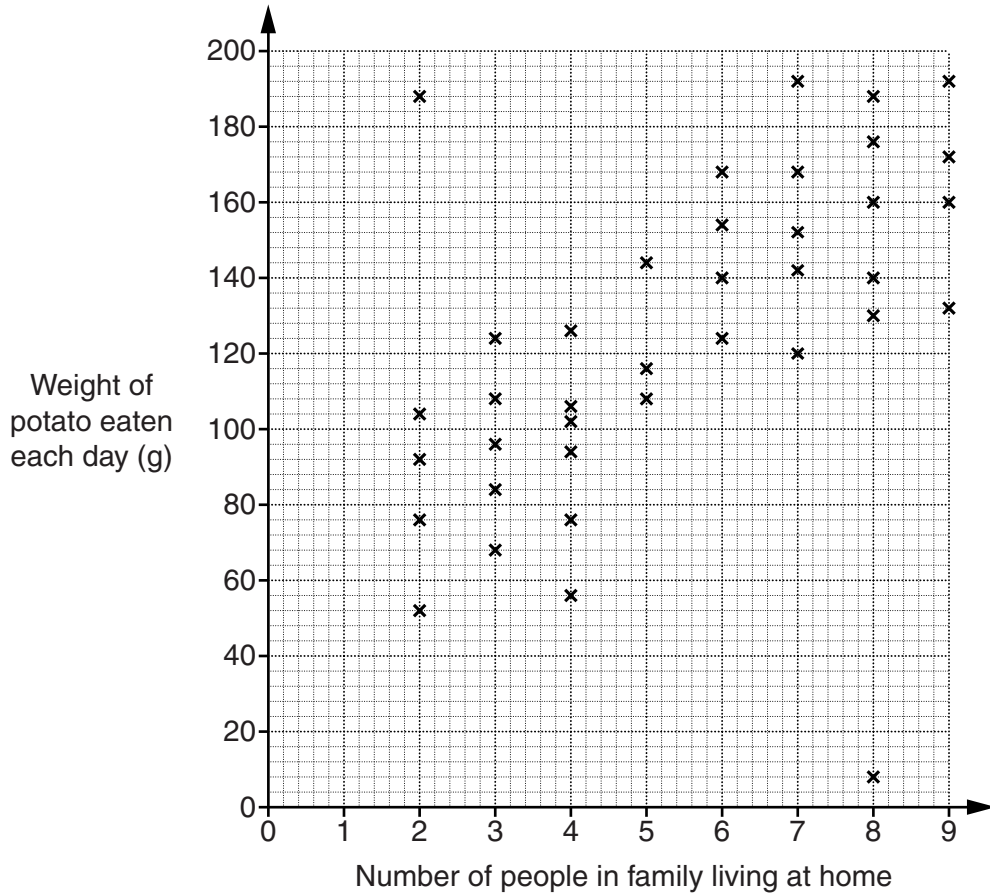
Roughly how many pounds of potatoes does John eat in a year?

(c) _____ pounds [2]

(d) Nikki asked some people in her school these questions.

How many people in your family live at home, including you?
 About what weight of potato, in grams, do **you** eat each day?

She plotted the results on this scatter graph.



(i) There are two points that do not appear to fit the pattern of Nikki's results.

Write down the answers that **one** of these two people gave to Nikki.

Number in family _____ and weight of potato eaten _____ g [1]

(ii) What does Nikki's scatter diagram suggest about the weight of potato eaten by a person and the number of their family living at home?

 _____ [1]

(iii) Describe the type of correlation shown in the scatter diagram.

(d)(iii) _____ [1]

10

6 (a) (i) How many sides does a regular hexagon have?

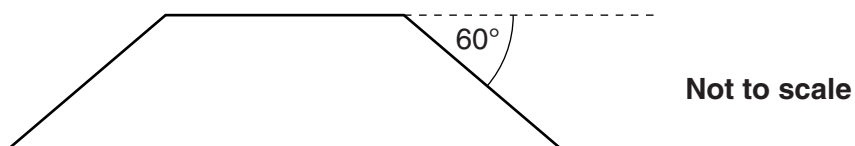
(a)(i) _____ [1]

(ii) Write down two other things that are special about any **regular** hexagon.

1 _____

2 _____ [2]

(b) This is a drawing of part of a regular hexagon.
One side has been extended.



Work out the size of one interior angle of a regular hexagon.

(b) _____ ° [2]

(c) Use one of the following

less than

equal to

greater than

to complete this statement.

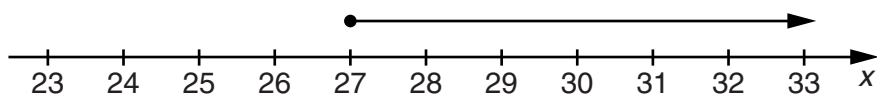
The size of an interior angle of a square is

the size of an exterior angle of a regular hexagon.

Use figures to support your choice.

[2]

- 7 (a) Complete the inequality that is represented on this number line.



(a) x _____ [1]

- (b) Solve this inequality.

$$x + 3 < 11$$

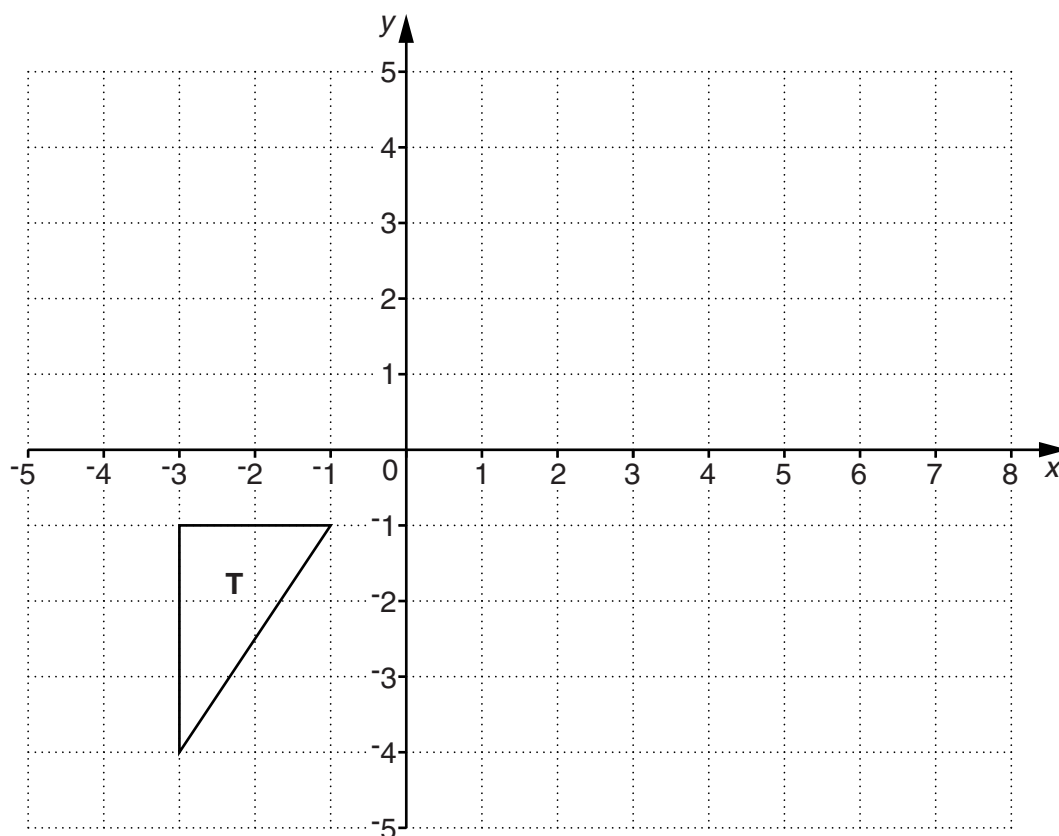
(b) _____ [1]

- (c) Find the smallest **whole** number that satisfies this inequality.

$$x - 1 \geq 4.6$$

(c) _____ [2]

8 The grid shows triangle **T**.



(a) Reflect triangle **T** in the x -axis.
Label the image **A**.

[2]

(b) Rotate triangle **T** 180° about the point $(0, 0)$.
Label the image **B**.

[2]

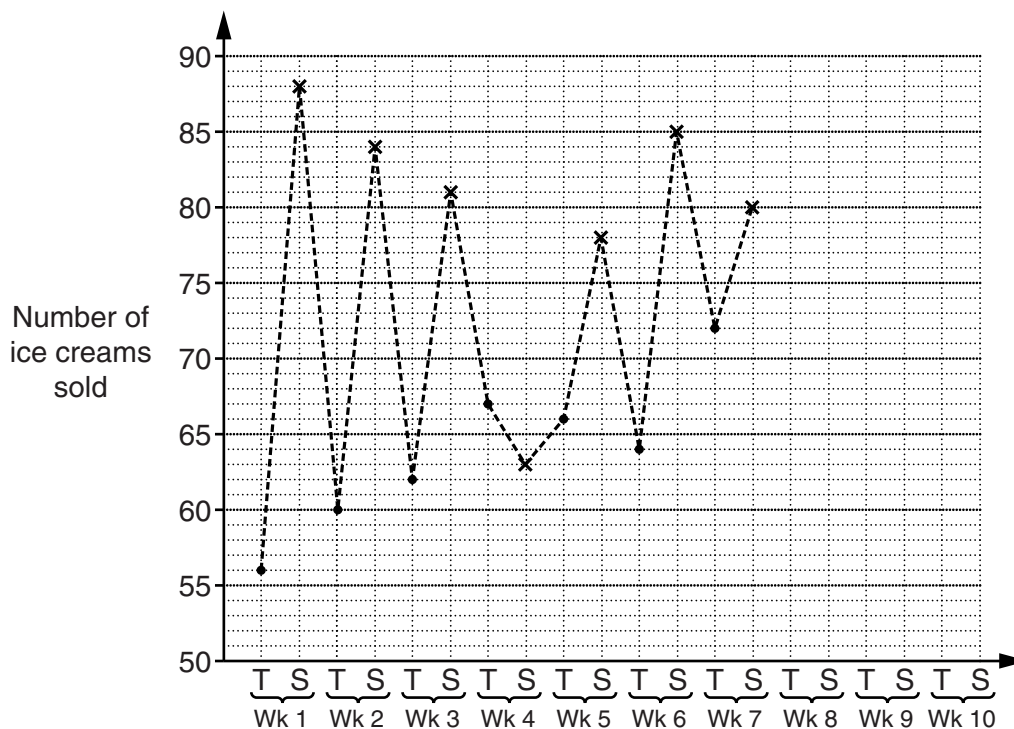
(c) Translate triangle **T** by $\begin{pmatrix} 7 \\ 3 \end{pmatrix}$.

Label the image **C**.

[2]

- 9 Robin sells ice creams at a market on Thursdays and Saturdays. He records how many ice creams he sells on each of these days for 10 weeks.

Week (Wk)	1	2	3	4	5	6	7	8	9	10
Thursday (T)	56	60	62	67	66	64	72	74	77	78
Saturday (S)	88	84	81	63	78	85	80	84	86	83



- (a) Complete the time series graph.
The first 7 weeks have been done for you. [2]

- (b) Look at the time series graph.

Make two comments about Robin's data.

(1) _____

(2) _____

_____ [2]

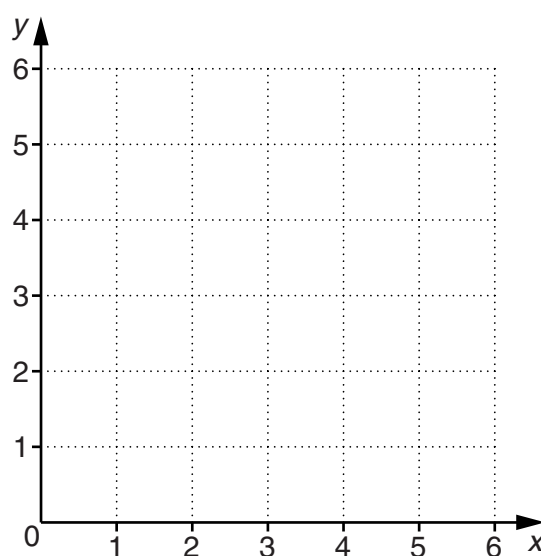
14

10 (a) Complete the table for $2x + 3y = 12$.

x	0	4.5	
y			0

[2]

(b) Draw the graph of $2x + 3y = 12$ for $0 \leq x \leq 6$.



[2]

(c) Use your graph to find the gradient of the line $2x + 3y = 12$.

(c) _____ [2]

END OF QUESTION PAPER

15
BLANK PAGE

PLEASE DO NOT WRITE ON THIS PAGE

PLEASE DO NOT WRITE ON THIS PAGE



Copyright Information

OCR is committed to seeking permission to reproduce all third-party content that it uses in its assessment materials. OCR has attempted to identify and contact all copyright holders whose work is used in this paper. To avoid the issue of disclosure of answer-related information to candidates, all copyright acknowledgements are reproduced in the OCR Copyright Acknowledgements Booklet. This is produced for each series of examinations and is freely available to download from our public website (www.ocr.org.uk) after the live examination series.

If OCR has unwittingly failed to correctly acknowledge or clear any third-party content in this assessment material, OCR will be happy to correct its mistake at the earliest possible opportunity.

For queries or further information please contact the Copyright Team, First Floor, 9 Hills Road, Cambridge CB2 1GE.

OCR is part of the Cambridge Assessment Group; Cambridge Assessment is the brand name of University of Cambridge Local Examinations Syndicate (UCLES), which is itself a department of the University of Cambridge.