



Cambridge IGCSE™

CANDIDATE
NAME

CENTRE
NUMBER

--	--	--	--	--

CANDIDATE
NUMBER

--	--	--	--



MATHEMATICS

0580/42

Paper 4 (Extended)

May/June 2023

2 hours 30 minutes

You must answer on the question paper.

You will need: Geometrical instruments

INSTRUCTIONS

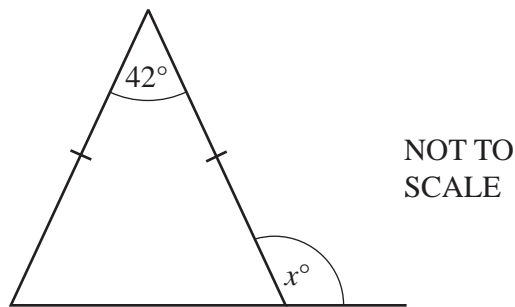
- Answer **all** questions.
- Use a black or dark blue pen. You may use an HB pencil for any diagrams or graphs.
- Write your name, centre number and candidate number in the boxes at the top of the page.
- Write your answer to each question in the space provided.
- Do **not** use an erasable pen or correction fluid.
- Do **not** write on any bar codes.
- You should use a calculator where appropriate.
- You may use tracing paper.
- You must show all necessary working clearly.
- Give non-exact numerical answers correct to 3 significant figures, or 1 decimal place for angles in degrees, unless a different level of accuracy is specified in the question.
- For π , use either your calculator value or 3.142.

INFORMATION

- The total mark for this paper is 130.
- The number of marks for each question or part question is shown in brackets [].

This document has **20** pages. Any blank pages are indicated.

1 (a)



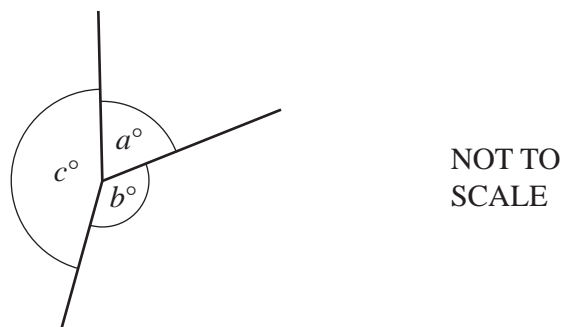
The diagram shows an isosceles triangle with the base extended.

Find the value of x .

$x = \dots\dots\dots$ [3]

(b) The diagram shows three lines meeting at a point.
The ratio $a : b : c = 3 : 4 : 5$.

Find the value of c .



$c = \dots\dots\dots$ [3]

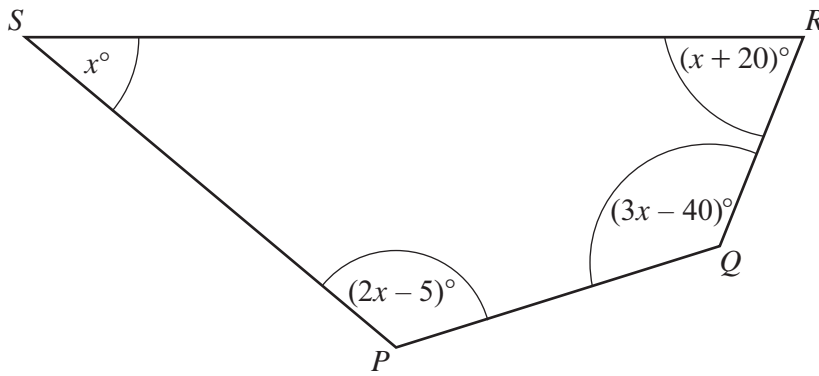
(c) A regular pentagon has an exterior angle, d .
A regular hexagon has an interior angle, h .

Find the fraction $\frac{d}{h}$.

Give your answer in its simplest form.

$\dots\dots\dots$ [4]

(d)

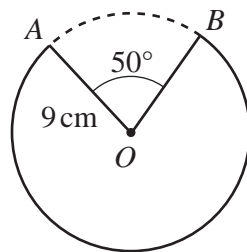


NOT TO SCALE

Show that $PQRS$ is a cyclic quadrilateral.

[5]

(e)



NOT TO SCALE

The diagram shows a circle of radius 9 cm , centre O .
The minor sector AOB , with sector angle 50° , is removed from the circle.

Calculate the length of the major arc AB .

..... cm [3]

- 2 (a) Anil changes \$830 into euros when the exchange rate is 1 euro = \$1.16 .
 He spends 500 euros.
 He then changes the remaining money back into dollars at the same exchange rate.

Work out how much, in dollars, Anil receives.

\$ [3]

- (b) In 2021, Anil earns \$37 000.

- (i) He spends \$12 400 on bills in 2021.

Calculate the percentage of his earnings he spends on bills.

..... % [2]

- (ii) His earnings of \$37 000 increase by 3.2% in 2022.

Calculate his earnings in 2022.

\$ [2]

5

(c) Anil invests \$3500 in an account that pays a rate of 2.4% per year compound interest.

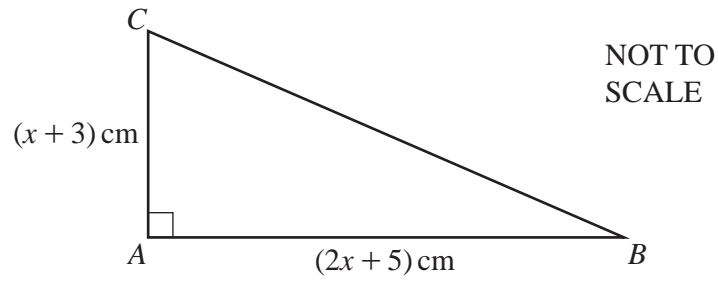
(i) Calculate the total interest earned at the end of 5 years.

\$ [3]

(ii) Find the number of complete years before Anil has at least \$5000 in this account.

..... years [3]

3



The diagram shows a right-angled triangle ABC .

(a) (i) The area of the triangle is 60 cm^2 .

Show that $2x^2 + 11x - 105 = 0$.

[3]

(ii) Solve by factorisation.

$$2x^2 + 11x - 105 = 0$$

$x = \dots\dots\dots$ or $x = \dots\dots\dots$ [3]

(iii) Calculate angle ACB .

$\dots\dots\dots$ [3]

7

(b) Triangle ABC is similar to triangle DEF .
Triangle DEF has an area of 93.75 cm^2 .

(i) Find the size of the smallest angle of triangle DEF .

..... [1]

(ii) Find the length of the shortest side of triangle DEF .

..... cm [3]

4 The table shows information about the heights of 80 children.

Height (h metres)	$1.2 < h \leq 1.4$	$1.4 < h \leq 1.5$	$1.5 < h \leq 1.65$	$1.65 < h \leq 1.8$	$1.8 < h \leq 1.9$
Frequency	2	13	24	32	9

(a) (i) Write down the interval containing the median.

..... $< h \leq$ [1]

(ii) Calculate an estimate of the mean height.

..... m [4]

(b) (i) One of these children is chosen at random.
Calculate the probability that they have a height of 1.4 m or less.

..... [1]

(ii) Two of these children are chosen at random.
Calculate the probability that both children are taller than 1.5 m but only one of them is taller than 1.8 m.

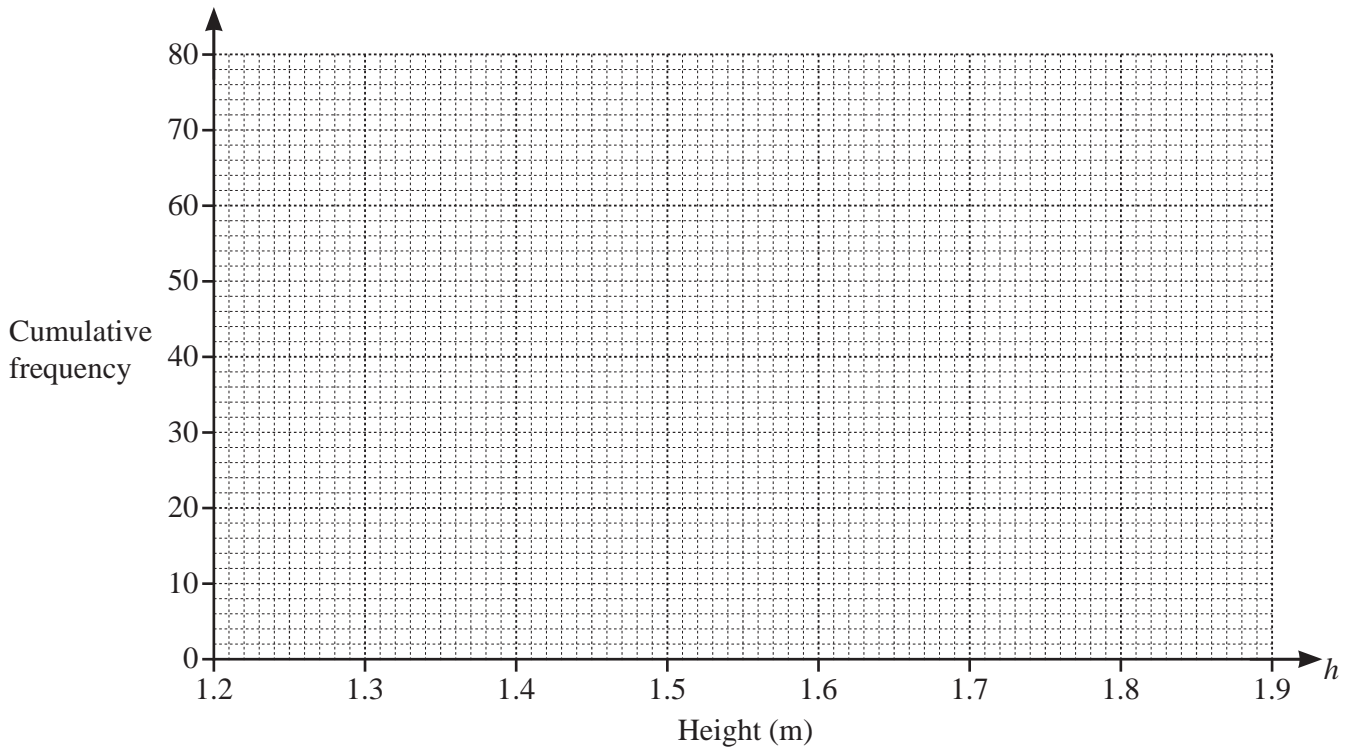
..... [3]

(c) (i) Complete the cumulative frequency table for the heights.

Height (h metres)	$h \leq 1.4$	$h \leq 1.5$	$h \leq 1.65$	$h \leq 1.8$	$h \leq 1.9$
Cumulative frequency	2				

[2]

(ii) On the grid, draw the cumulative frequency diagram.



[3]

(d) Use your diagram to find an estimate of

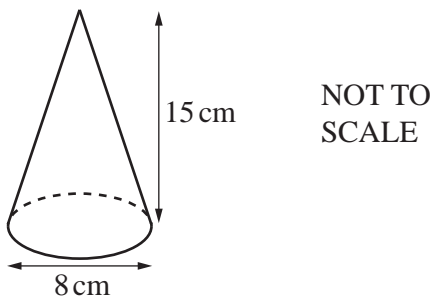
(i) the interquartile range

..... m [2]

(ii) the 60th percentile.

..... m [2]

5 (a)



A cone has base diameter 8 cm and perpendicular height 15 cm.

- (i) Calculate the volume of the cone.
 [The volume, V , of a cone with radius r and height h is $V = \frac{1}{3}\pi r^2 h$.]

..... cm^3 [2]

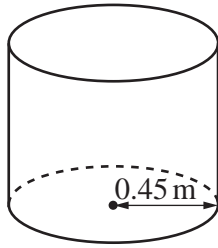
- (ii) A label completely covers the curved surface area of the cone.

Calculate the area of the label as a percentage of the **total** surface area of the cone.
 [The curved surface area, A , of a cone with radius r and slant height l is $A = \pi r l$.]

..... % [5]

11

(b)

NOT TO
SCALE

An empty cylindrical container has radius 0.45 m.
300 litres of water is poured into the container at a rate of 375 ml per second.

(i) Find the time taken, in minutes and seconds, for all the water to be poured into the container.

..... min s [3]

(ii) Calculate the height of the water in the container.

..... m [3]

6 (a) A sequence has n th term $\frac{n}{2n+3}$.

(i) Find the first three terms of this sequence.

Give your answers as fractions.

.....,, [2]

(ii) The k th term of this sequence is $\frac{12}{25}$.

Find the value of k .

$k =$ [2]

(b) Find the n th term of each sequence.

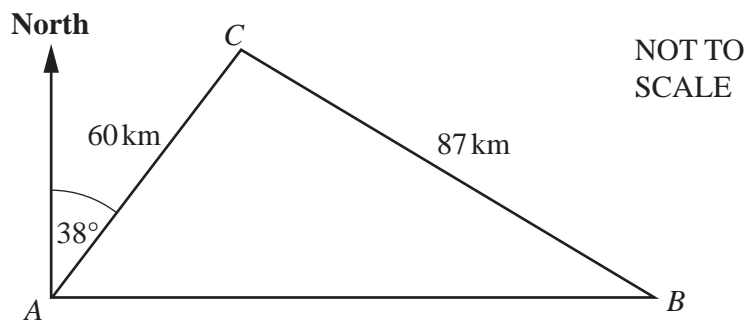
(i) 6, 13, 32, 69, 130, ...

..... [2]

(ii) 100, 50, 25, 12.5, 6.25, ...

..... [2]

7



The diagram shows the straight roads between town A , town B and town C .
 $AC = 60$ km, $CB = 87$ km and B is due east of A .
 The bearing of C from A is 038° .

- (a) Show that angle $ACB = 95.1^\circ$, correct to 1 decimal place.

[5]

- (b) Without stopping, a car travels from town A to town C then to town B , before returning directly to town A .
 The total time taken for the journey is 3 hours 20 minutes.

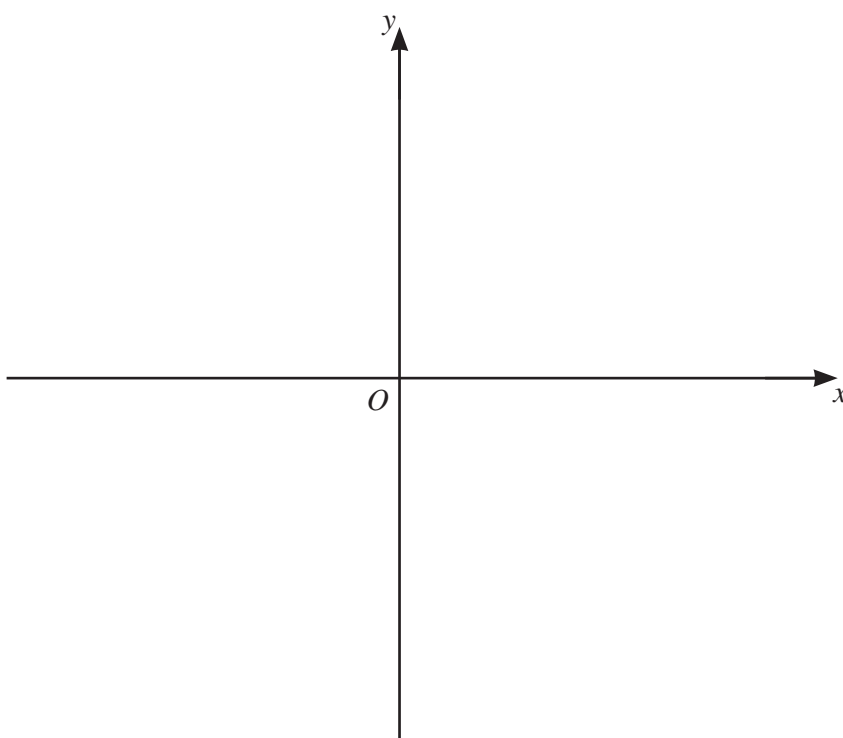
Calculate the average speed of the car for this journey.
 Give your answer in kilometres per hour.

..... km/h [6]

8 (a) (i) Show that the equation $y = (x-4)(x+1)(x-2)$ can be written as $y = x^3 - 5x^2 + 2x + 8$.

[2]

(ii) On the diagram, sketch the graph of $y = x^3 - 5x^2 + 2x + 8$, indicating the values where the graph crosses the axes.



[4]

- (b) The graph of $y = x^3 - 5x^2 + 2x + 8$ has two tangents with a gradient of 10.

Find the equations of these two tangents.

You must show all your working and give your answers in the form $y = mx + c$.

$$y = \dots\dots\dots$$

$$y = \dots\dots\dots [7]$$

9 (a) Simplify.

(i) $(3x^2y^4)^3$

..... [2]

(ii) $\left(\frac{16}{x^{16}y^8}\right)^{-\frac{3}{2}}$

..... [3]

(b) (i) Factorise.

$$x^2 - 9$$

..... [1]

(ii) Simplify.

$$\frac{x^2 - 9}{2xy - 6y + 5x - 15}$$

..... [3]

(c) Solve the simultaneous equations.

You must show all your working and give your answers correct to 2 decimal places.

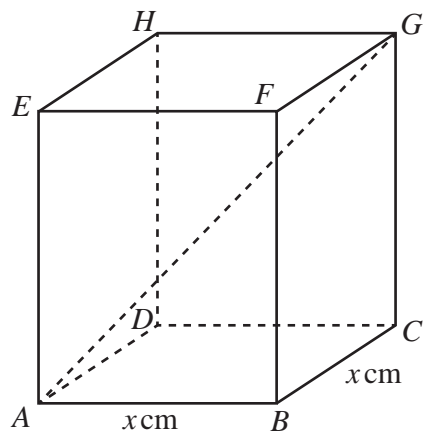
$$2x + y = 7$$

$$y = 5x^2 + 2x - 13$$

$$x = \dots\dots\dots, y = \dots\dots\dots$$

$$x = \dots\dots\dots, y = \dots\dots\dots \quad [6]$$

10 (a)

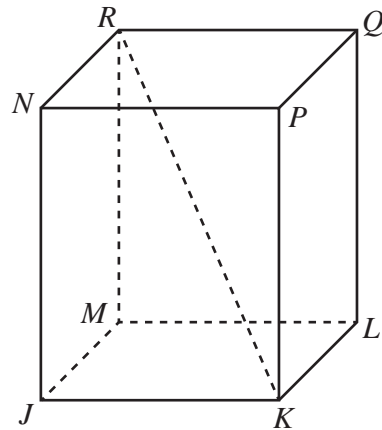
NOT TO
SCALE

$ABCDEFGH$ is a cuboid with a square base of side x cm.
 $CG = 20$ cm and $AG = 28$ cm.

Calculate the value of x .

$x = \dots\dots\dots$ [4]

(b)

NOT TO
SCALE

The diagram shows a different cuboid $JKLMNPQR$.

$MR = 30$ cm correct to the nearest centimetre.

$KR = 37$ cm correct to the nearest centimetre.

Calculate the lower bound of the angle between KR and the base $JKLM$ of the cuboid.

..... [4]

BLANK PAGE

Permission to reproduce items where third-party owned material protected by copyright is included has been sought and cleared where possible. Every reasonable effort has been made by the publisher (UCLES) to trace copyright holders, but if any items requiring clearance have unwittingly been included, the publisher will be pleased to make amends at the earliest possible opportunity.

To avoid the issue of disclosure of answer-related information to candidates, all copyright acknowledgements are reproduced online in the Cambridge Assessment International Education Copyright Acknowledgements Booklet. This is produced for each series of examinations and is freely available to download at www.cambridgeinternational.org after the live examination series.

Cambridge Assessment International Education is part of Cambridge Assessment. Cambridge Assessment is the brand name of the University of Cambridge Local Examinations Syndicate (UCLES), which is a department of the University of Cambridge.