

Please write clearly in block capitals.

Centre number

--	--	--	--	--

Candidate number

--	--	--	--

Surname

---

Forename(s)

---

Candidate signature

---

I declare this is my own work.

# GCSE MATHEMATICS

# H

Higher Tier


Paper 3 Calculator

Time allowed: 1 hour 30 minutes

## Materials

For this paper you must have:

- a calculator
- mathematical instruments.



## Instructions

- Use black ink or black ball-point pen. Draw diagrams in pencil.
- Fill in the boxes at the top of this page.
- Answer **all** questions.
- You must answer the questions in the spaces provided. Do not write outside the box around each page or on blank pages.
- If you need extra space for your answer(s), use the lined pages at the end of this book. Write the question number against your answer(s).
- Do all rough work in this book. Cross through any work you do not want to be marked.

## Information

- The marks for questions are shown in brackets.
- The maximum mark for this paper is 80.
- You may ask for more answer paper, graph paper and tracing paper. These must be tagged securely to this answer book.

For Examiner's Use	
Pages	Mark
2–3	
4–5	
6–7	
8–9	
10–11	
12–13	
14–15	
16–17	
18–19	
20–21	
22–23	
24–25	
26	
<b>TOTAL</b>	

## Advice

In all calculations, show clearly how you work out your answer.



Answer **all** questions in the spaces provided.

**1**  $b$  is 3 more than the square root of  $a$ .

Circle the correct equation.

[1 mark]

$$b = \sqrt{a} + 3$$

$$b = \sqrt{a} - 3$$

$$b = \sqrt{a+3}$$

$$b = \sqrt{a-3}$$

**2** Circle the largest number.

[1 mark]

$0.\dot{5}$

0.55

0.545

$0.5\dot{4}\dot{5}$

**3** A line has equation  $3y = 3x - 2$

Circle the coordinates of the intercept of the line with the  $y$ -axis.

[1 mark]

$(0, 1)$

$(0, -1)$

$\left(0, \frac{2}{3}\right)$

$\left(0, -\frac{2}{3}\right)$



- 4 Factorise  $x^2 - 64$   
Circle your answer.

[1 mark]

$(x + 8)^2$

$(x - 8)^2$

$(x + 8)(x - 8)$

$x(x - 64)$

- 5 Six positive numbers have  
a mean of 10  
a range of 19

Four of the numbers are 12 7 15 3

Work out the other two numbers.

[3 marks]

---

---

---

---

---

---

---

---

Answer \_\_\_\_\_ and \_\_\_\_\_



- 6 At a country park there is a house, a museum and a garden.  
The table shows the prices per person to visit the park.

	Price per person
Garden only	Free
House and museum	£12.50
House only	£8
Museum only	£7

One day, 480 people visit the park.

67 visit the garden **only**.

40% visit the house **and** the museum.

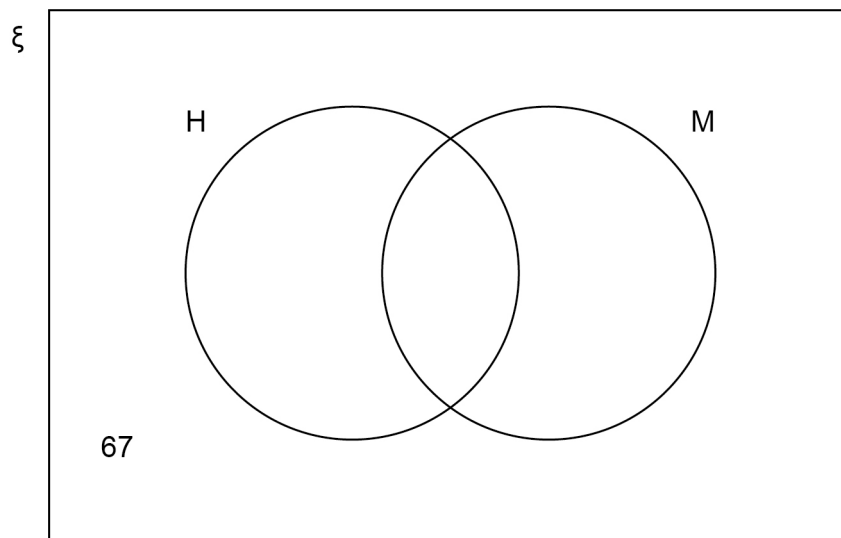
$\frac{3}{8}$  visit the house **only**.

The rest visit the museum **only**.

In total, how much do the 480 people pay to visit the park?

You may use the Venn diagram to help you.

[5 marks]





8 The heel of a shoe exerts a pressure of 198 pounds per square inch.

Convert this pressure into kilograms per square centimetre.

Use

1 pound = 0.45 kilograms

1 square inch = 6.25 square centimetres

**[3 marks]**

---

---

---

---

---

---

---

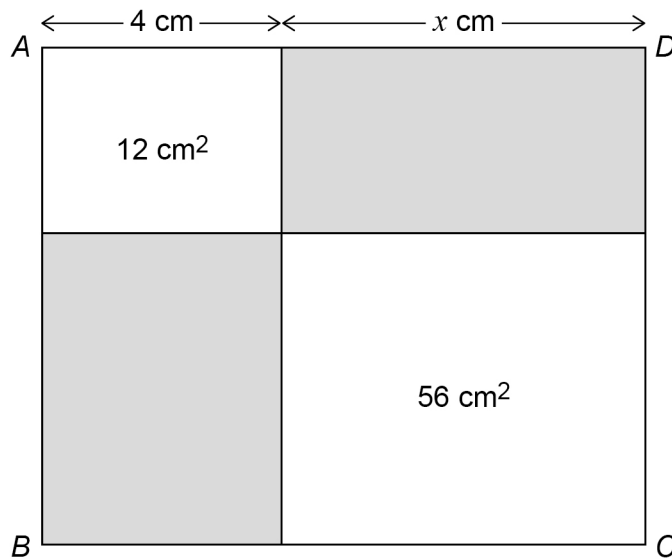
---

---

Answer \_\_\_\_\_ kg/cm<sup>2</sup>



- 9 Rectangle  $ABCD$  is split into four smaller rectangles.  
Two of the smaller rectangles are shaded.



Not drawn  
accurately

$$4 : x = 1 : 2$$

For rectangle  $ABCD$ , work out the ratio shaded area : unshaded area

Give your answer in its simplest form.

[4 marks]

---



---



---



---



---



---



---



---



---



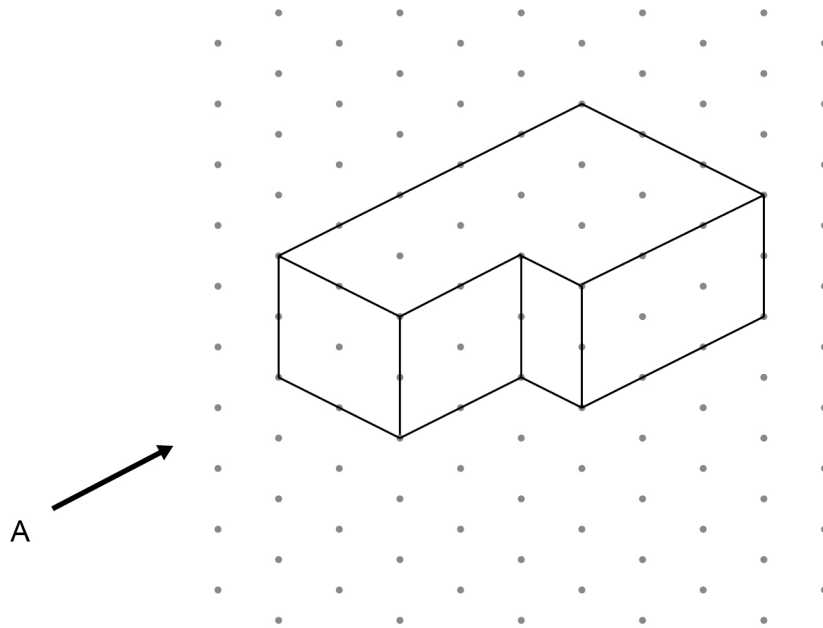
---

Answer \_\_\_\_\_ : \_\_\_\_\_

Turn over ►




- 10** A solid shape is drawn on isometric paper.



- 10 (a)** On the centimetre grid, draw the elevation of the shape from A.

**[1 mark]**

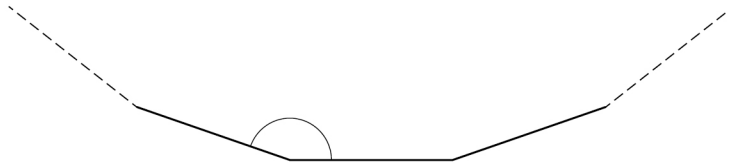






12

Part of a regular polygon with 15 sides is shown.

Not drawn  
accuratelyWork out the size of an **interior** angle.**[2 marks]**

---

---

---

---

---

---

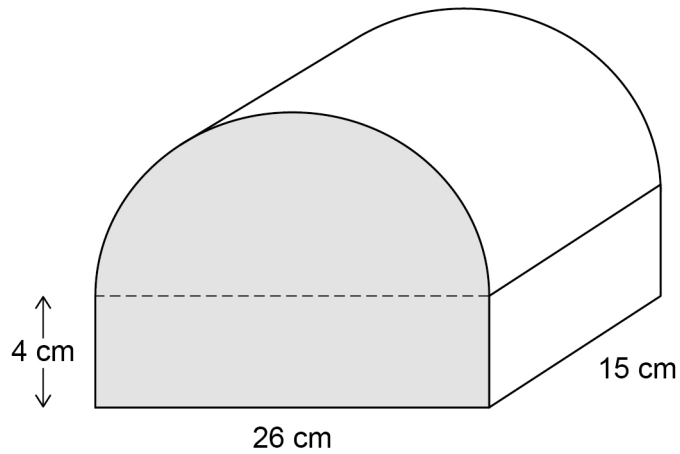
---

---

Answer \_\_\_\_\_ degrees



- 13 A box is the shape of half a cylinder on top of a cuboid.



Work out the volume of the box.

[4 marks]

---



---



---



---



---



---



---



---



---



---

Answer \_\_\_\_\_  $\text{cm}^3$



14

Phil sells ties.

He increases the original price of each tie by 10% to £13.20

A month later he announces a sale.



Phil says,

“The ties will be back to their original price, because each change was by 10%”

Is he correct?

Tick a box.

Yes

No

Show working to support your answer.

**[3 marks]**

---

---

---

---

---

---

---

---

---

---







17  $m^2 > 9$

Circle the possible value of  $m$ .

[1 mark]

$-2\frac{7}{8}$

2.8

3

$-\frac{7}{2}$

18 Simplify  $w^1 \times w^0$

Circle your answer.

[1 mark]

1

0

 $w$  $w^2$ 

19 The equation of a circle is  $x^2 + y^2 = 11$

Work out the length of the **diameter**.

Circle your answer.

[1 mark]

$\sqrt{11}$

$2\sqrt{11}$

$\sqrt{22}$

22

Turn over for the next question

Turn over ►



20

$$\frac{a}{b} = 3c$$

$$\frac{b}{c} = 2$$

Work out the value of  $a$  when  $c = 8$

**[3 marks]**

---

---

---

---

---

---

---

Answer \_\_\_\_\_



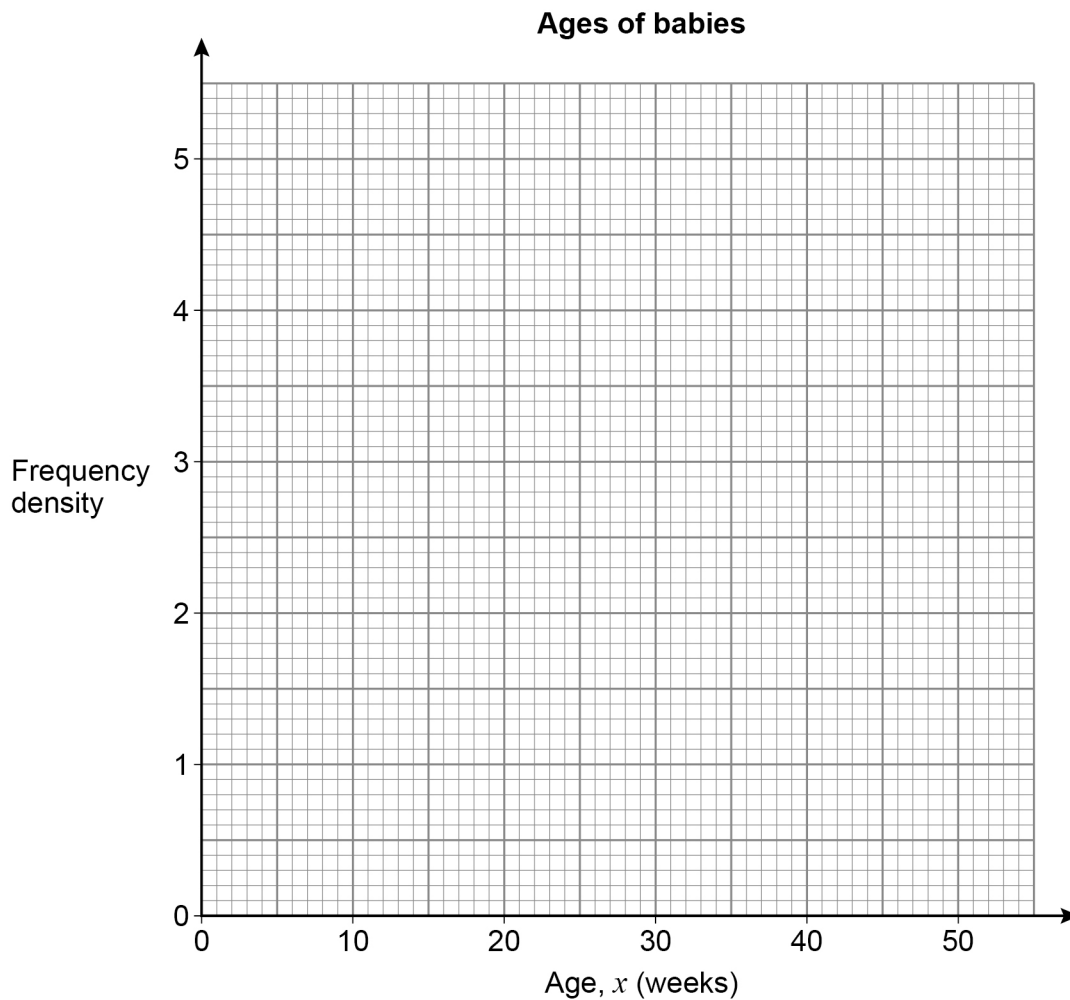


21

Here is some information about the ages of babies at a clinic.

Age, $x$ (weeks)	Frequency		
$0 \leq x < 5$	18		
$5 \leq x < 10$	23		
$10 \leq x < 20$	17		
$20 \leq x < 50$	21		

Draw a histogram to represent the information.

**[4 marks]**

Turn over ►



22

A sequence of patterns is made using horizontal sticks and vertical sticks.


Pattern 1



Pattern 2



Pattern 3



The table shows the number of horizontal sticks and vertical sticks in each pattern.

Pattern	Number of horizontal sticks	Number of vertical sticks
1	2	2
2	4	3
3	6	4

What fraction of the total number of sticks in Pattern  $n$  are horizontal?

Give your answer in terms of  $n$ .

**[3 marks]**

---



---



---



---



---



---



---



---



---



---

Answer \_\_\_\_\_



23 The equation of a curve is  $y = 16^x$

23 (a) Circle the point that lies on the curve.

[1 mark]

(2, 32)

(32, 2)

(2, 256)

(256, 2)

23 (b) A different point on the curve has  $y$ -coordinate  $\frac{1}{16}$

Work out the  $x$ -coordinate.

[1 mark]

---



---

Answer \_\_\_\_\_

24  $a^b = 3$  where  $a$  is an integer and  $b$  is a proper fraction.

Work out **one** possible pair of values of  $a$  and  $b$ .

[1 mark]

---



---



---



---



---

$a =$  \_\_\_\_\_  $b =$  \_\_\_\_\_

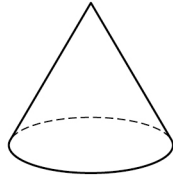




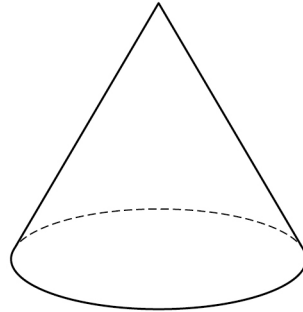
26

Here are two similar cones.

Cone A



Cone B

The surface area of cone A is  $2 \text{ m}^2$ The surface area of cone B is  $4.5 \text{ m}^2$ 

Work out the ratio radius of cone A : radius of cone B

Give your answer in the form  $1 : n$ **[3 marks]**


---



---



---



---



---



---



---

Answer \_\_\_\_\_ : \_\_\_\_\_



27

In the diagram

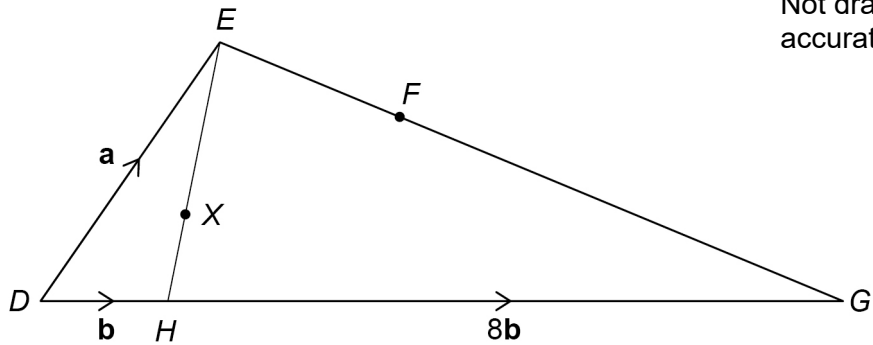
$$\overrightarrow{DE} = \mathbf{a}$$

$$\overrightarrow{DH} = \mathbf{b}$$

$$\overrightarrow{HG} = 8\mathbf{b}$$

$$EX : XH = 3 : 1$$

$$EF : FG = 1 : 3$$



27 (a) Show that  $\overrightarrow{DX} = \frac{1}{4}\mathbf{a} + \frac{3}{4}\mathbf{b}$

[2 marks]

---



---



---



---



---



---



---



---





28  $a = 4.72$  to 3 significant figures.

$b = 158$  to 3 significant figures.

Work out the upper bound of  $\frac{a}{b}$

You **must** show your working.

[3 marks]

---

---

---

---

---

---

---

---

Answer \_\_\_\_\_





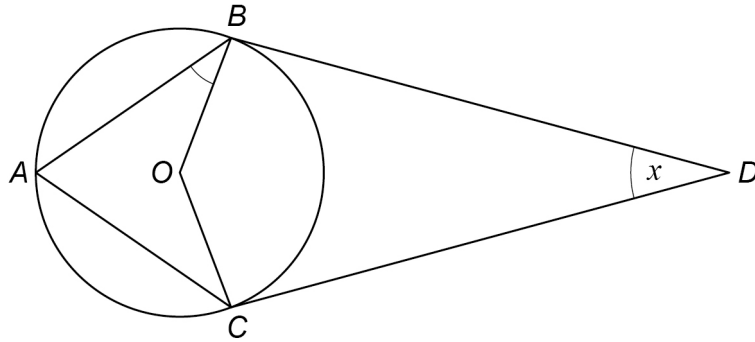
29

$A$ ,  $B$  and  $C$  are three points on the circumference of a circle, centre  $O$ .

$BD$  and  $CD$  are tangents to the circle.

$ABDC$  is a kite.

Angle  $BDC$  is  $x$



Not drawn  
accurately

Prove that angle  $ABO$  is  $45^\circ - \frac{x}{4}$

[4 marks]

---

---

---

---

---

---

---

---

---

---

---

---

---

---

---

---

---

---

---

---

---

---

---

---





**There are no questions printed on this page**

*Do not write  
outside the  
box*

**DO NOT WRITE ON THIS PAGE  
ANSWER IN THE SPACES PROVIDED**











**There are no questions printed on this page**

*Do not write  
outside the  
box*

**DO NOT WRITE ON THIS PAGE  
ANSWER IN THE SPACES PROVIDED**

**Copyright information**

For confidentiality purposes, all acknowledgements of third-party copyright material are published in a separate booklet. This booklet is published after each live examination series and is available for free download from [www.aqa.org.uk](http://www.aqa.org.uk).

Permission to reproduce all copyright material has been applied for. In some cases, efforts to contact copyright-holders may have been unsuccessful and AQA will be happy to rectify any omissions of acknowledgements. If you have any queries please contact the Copyright Team.

Copyright © 2021 AQA and its licensors. All rights reserved.



3 2



2 1 6 G 8 3 0 0 / 3 H

IB/M/Jun21/8300/3H