

Write your name here

Surname	Other names
---------	-------------

**Pearson Edexcel  
International GCSE**

Centre Number

--	--	--	--	--

Candidate Number

--	--	--	--

## Mathematics A

**Level 1/2  
Paper 1F**



**Foundation Tier**

Thursday 24 May 2018 – Morning  
**Time: 2 hours**

Paper Reference

**4MA1/1F**

**You must have:**

Ruler graduated in centimetres and millimetres, protractor, compasses, pen, HB pencil, eraser, calculator. Tracing paper may be used.

Total Marks

--

### Instructions

- Use **black** ink or ball-point pen.
- **Fill in the boxes** at the top of this page with your name, centre number and candidate number.
- Answer **all** questions.
- Without sufficient working, correct answers may be awarded no marks.
- Answer the questions in the spaces provided  
– *there may be more space than you need.*
- **Calculators may be used.**
- You must **NOT** write anything on the formulae page.  
Anything you write on the formulae page will gain **NO** credit.

### Information

- The total mark for this paper is 100.
- The marks for **each** question are shown in brackets  
– *use this as a guide as to how much time to spend on each question.*

### Advice

- Read each question carefully before you start to answer it.
- Check your answers if you have time at the end.

Turn over ►

P54692A

©2018 Pearson Education Ltd.

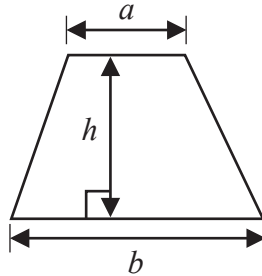
1/1/1/



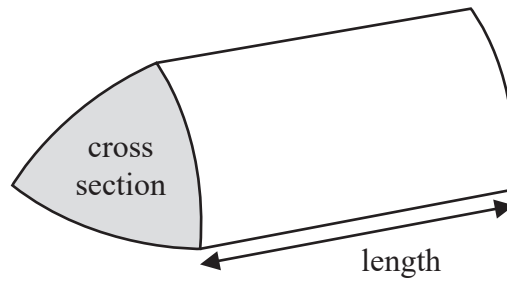
Pearson

**International GCSE Mathematics**  
**Formulae sheet – Foundation Tier**

**Area of trapezium** =  $\frac{1}{2}(a + b)h$

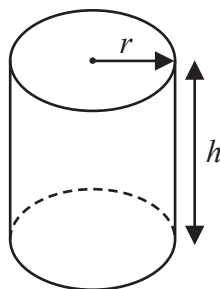


**Volume of prism** = area of cross section  $\times$  length



**Volume of cylinder** =  $\pi r^2 h$

**Curved surface area of cylinder** =  $2\pi r h$



DO NOT WRITE IN THIS AREA

DO NOT WRITE IN THIS AREA

DO NOT WRITE IN THIS AREA



Answer ALL TWENTY ONE questions.

Write your answers in the spaces provided.

You must write down all the stages in your working.

- 1 (a) Write  $\frac{7}{100}$  as a decimal.

$$\frac{7}{100} = 7 \div 100 = 0.07$$

0.07

(1)

- (b) Write  $\frac{48}{60}$  as a fraction in its simplest form.

$$\frac{48}{60} = \frac{12}{15} = \frac{4}{5}$$

in simplest form  
top and bottom of fraction have no common factors

$\frac{4}{5}$

(1)

- (c) Write  $\frac{17}{3}$  as a mixed number.

$$\frac{17}{3} = \frac{15}{3} + \frac{2}{3} = 5\frac{2}{3}$$

$15 \div 3 = 5$

$5\frac{2}{3}$

(1)

There are 840 tickets available for a concert.

$\frac{1}{7}$  of these tickets have **not** been sold.

- (d) How many of the tickets have been sold?

$$\text{not sold} = \frac{1}{7} \times 840 = 120 \text{ tickets}$$

$$\text{Sold} = 840 - 120 = 720 \text{ tickets}$$

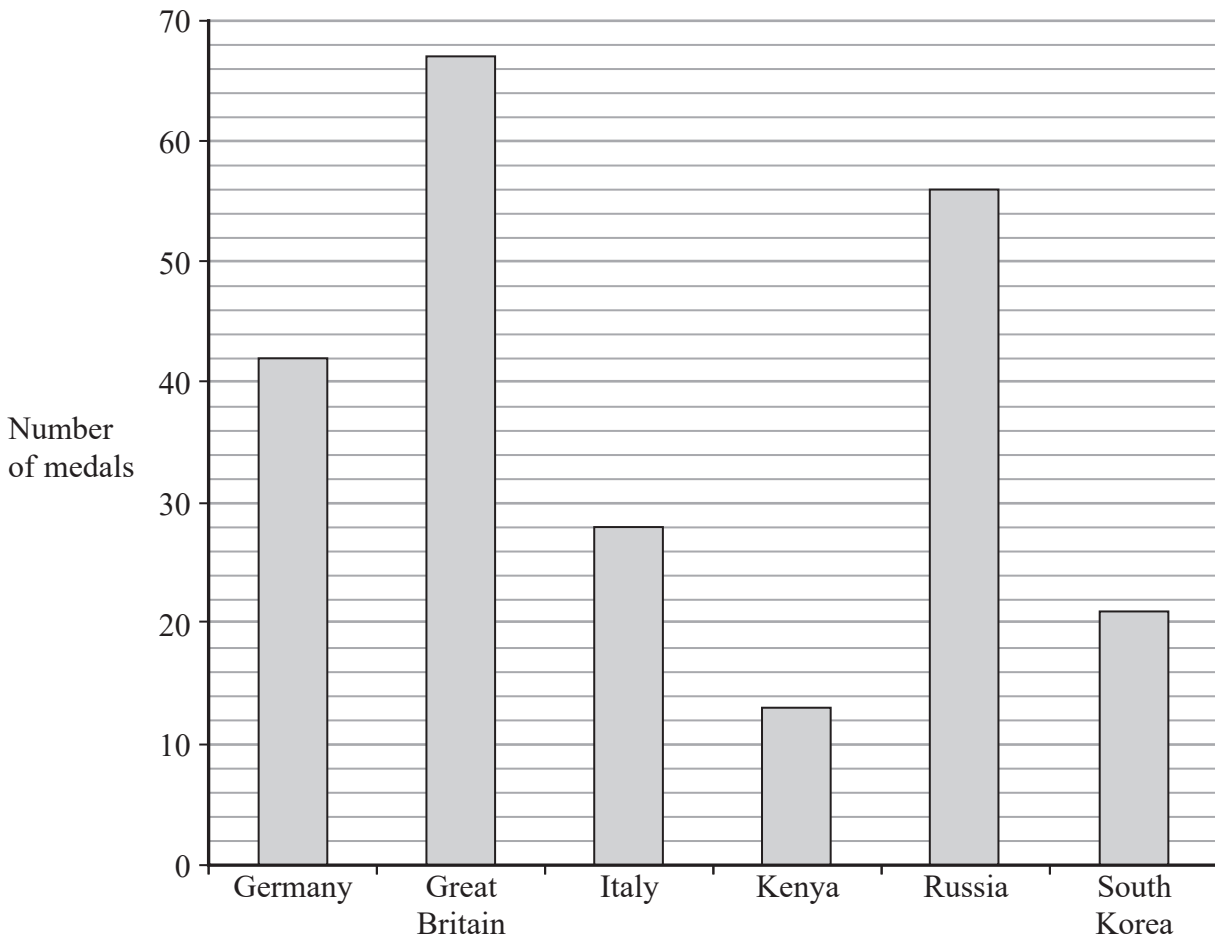
720

(2)

(Total for Question 1 is 5 marks)



- 2 The bar chart gives information about the total number of medals won by each of six countries at the 2016 Olympic Games.



- (a) Which of these countries won the fewest total number of medals?

kenya

kenya

(1)

Great Britain won 27 gold medals.

- (b) How many of the medals won by Great Britain were **not** gold medals?

total number of medals = 67

not gold medals =  $67 - 27 = 40$

40

(2)



DO NOT WRITE IN THIS AREA

DO NOT WRITE IN THIS AREA

DO NOT WRITE IN THIS AREA

- (c) Write down the ratio of the total number of medals won by Russia to the total number of medals won by Germany.  
Give your ratio in its simplest form.

Russia : Germany

$56 \xrightarrow{\div 7} 8$   
 $8 \xrightarrow{\div 2} 4$

$42 \xrightarrow{\div 7} 6$   
 $6 \xrightarrow{\div 2} 3$

in simplest form

$4 : 3$   
.....  
(2)

The USA won

- 46 gold medals
- 37 silver medals
- 38 bronze medals

- (d) What fraction of the total number of medals won by the USA were gold medals?

total number of medals  
 $= 46 + 37 + 38 = 121$

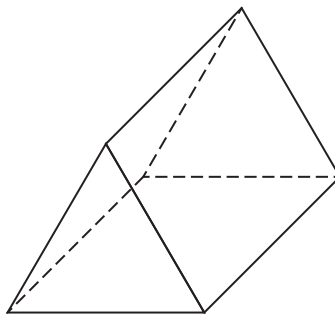
gold medals =  $\frac{46}{121}$

$\rightarrow$  number of gold medals  
 $\rightarrow$  total number of medals

$\frac{46}{121}$   
.....  
(2)

(Total for Question 2 is 7 marks)

- 3 (i) Write down the mathematical name of this 3-D shape.



triangular prism  
.....

- (ii) How many faces does the shape have?

5 faces  
.....

- (iii) How many vertices does the shape have?

6 vertices  
.....

(Total for Question 3 is 3 marks)



4 (a) Change 650 centimetres into metres.

$$100\text{ cm} \xrightarrow{\div 100} 1\text{ m}$$

$$650\text{ cm} \xrightarrow{\div 100} 6.5\text{ metres}$$

..... 6.5 ..... metres  
(1)

(b) Change 8 litres into millilitres.

$$1\text{ litre} \xrightarrow{\times 1000} 1000\text{ ml}$$

$$8\text{ Litres} \xrightarrow{\times 1000} 8000\text{ millilitres}$$

..... 8000 ..... millilitres  
(1)

Memona has a 6 kg sack of rice and some empty bags. She fills each bag with 475 grams of rice from the sack.

(c) How many bags can Memona completely fill with rice?

$$1\text{ kg} \xrightarrow{\times 1000} 1000\text{ g}$$

$$6\text{ kg} \xrightarrow{\times 1000} 6000\text{ g of rice}$$

$$\text{number of bags} = 6000 \div 475 = 12.63$$

✓ 475g of rice per bag  
↓ completely fill so round down to 12 bags

..... 12 .....  
(3)

(Total for Question 4 is 5 marks)

DO NOT WRITE IN THIS AREA

DO NOT WRITE IN THIS AREA

DO NOT WRITE IN THIS AREA



5 (a) Simplify  $6x + 8x - 3x$

$$= 14x - 3x$$

$$= 11x$$

$$11x$$

(1)

(b) Simplify  $4e \times 5f$

$$4e \times 5f = 4 \times 5 \times e \times f$$

$$= 20ef$$

$$20ef$$

(1)

(c) Solve  $8p = 24$

$$\begin{array}{l} 8p = 24 \\ \div 8 \quad \swarrow \quad \searrow \quad \div 8 \\ p = 3 \end{array}$$

$$p = 3$$

(1)

(d) Solve  $k - 4 = 13$

$$\begin{array}{l} k - 4 = 13 \\ +4 \quad \swarrow \quad \searrow \quad +4 \\ k = 17 \end{array}$$

$$k = 17$$

(1)

(e) Simplify  $10t + 4d - 3t + 2d$

$$= (10t - 3t) + (4d + 2d)$$

$$= 7t + 6d$$

$$7t + 6d$$

(2)

(Total for Question 5 is 6 marks)



6 The two-way table shows some information about where 50 people went for their last holiday.

	UK	Africa	USA	Total
Male	$23 - 7 - 2 = 14$	$16 - 9 = 7$	2	23
Female	16	9	$4 - 2 = 2$	$16 + 9 + 2 = 27$
Total	$14 + 16 = 30$	16	$50 - 30 - 16 = 4$	50

(a) Complete the table.

(3)

(b) What percentage of these 50 people were female **and** went on holiday in Africa?

female and went to Africa = 9  
 $\frac{9}{50} \times 100\% = 18\%$

..... 18 %  
 (2)

(Total for Question 6 is 5 marks)

7 3 kg of potatoes and 2 kg of apples cost a total of £7.33  
 4 kg of potatoes cost £3.80

Work out the cost of 1 kg of apples.

$\div 4$   $\left\{ \begin{array}{l} 4 \text{ kg potatoes} = \text{£}3.80 \\ 1 \text{ kg potatoes} = \text{£}0.95 \end{array} \right. \div 4$   
 $\times 3$   $\left\{ \begin{array}{l} 3 \text{ kg potatoes} = \text{£}2.85 \end{array} \right. \times 3$

$2 \text{ kg apples} = \text{£}7.33 - \text{£}2.85 = \text{£}4.48$   
 Total cost      3 kg potatoes

$\div 2$   $\left\{ \begin{array}{l} 2 \text{ kg apples} = \text{£}4.48 \\ 1 \text{ kg apples} = \text{£}2.24 \end{array} \right. \div 2$

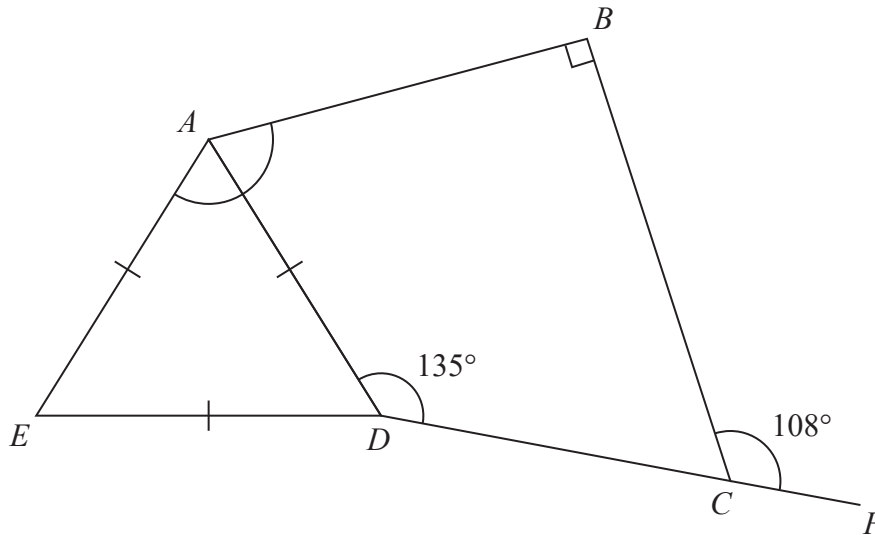
£ 2.24

(Total for Question 7 is 4 marks)





8

Diagram NOT  
accurately drawn $ABCD$  is a quadrilateral. $ADE$  is an equilateral triangle. $DCF$  is a straight line.Work out the size of angle  $EAB$ .

Give a reason for each stage of your working.

$$\text{angle } DCB = 180 - 108 = 72^\circ$$

angles on a straight line add up to  $180^\circ$

$$\text{angle } DAB = 360 - 90 - 72 - 135 = 63^\circ$$

angles in a quadrilateral add up to  $360^\circ$

$$\text{angle } EAD = 60^\circ$$

equilateral triangle = three equal  $60^\circ$  angles

$$\text{angle } EAB = 60 + 63 = 123^\circ$$

angle  $EAD$       angle  $DAB$

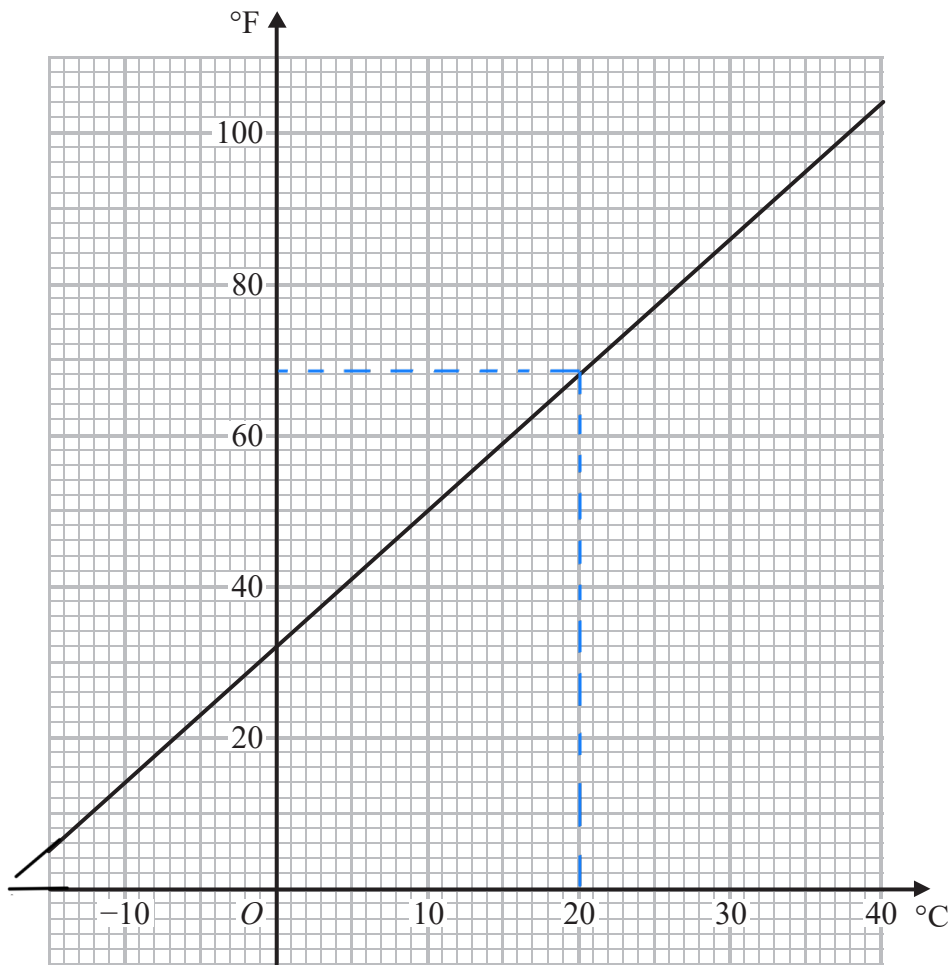
123

(Total for Question 8 is 5 marks)



P 5 4 6 9 2 A 0 9 2 4

9 You can use this graph to change between temperatures in degrees Celsius ( $^{\circ}\text{C}$ ) and temperatures in degrees Fahrenheit ( $^{\circ}\text{F}$ ).



The temperature in Dubai on Monday increased by  $20^{\circ}\text{C}$  from midnight to midday.

(a) What is this temperature increase in degrees Fahrenheit?

$0^{\circ}\text{C} = 32^{\circ}\text{F}$

$20^{\circ}\text{C} = 68^{\circ}\text{F}$

*Choose any two temperatures with a difference of  $20^{\circ}\text{C}$   
 $\rightarrow 0^{\circ}\text{C}$  and  $20^{\circ}\text{C}$   
 $\rightarrow 10^{\circ}\text{C}$  and  $30^{\circ}\text{C}$*

temperature increase =  $68 - 32 = 36^{\circ}\text{F}$

..... **36** .....  $^{\circ}\text{F}$   
(2)

Maninder says,

“ $30^{\circ}\text{C}$  is the same as  $86^{\circ}\text{F}$ , therefore  $60^{\circ}\text{C}$  will be the same as  $172^{\circ}\text{F}$ .”

(b) Is Maninder correct?

Give a reason for your answer.

*No Maninder is not correct as temperatures in  $^{\circ}\text{F}$  are not proportional to temperatures in  $^{\circ}\text{C}$ .  $\rightarrow$  the graph does not pass through  $(0,0)$*

(Total for Question 9 is 3 marks)

DO NOT WRITE IN THIS AREA

DO NOT WRITE IN THIS AREA

DO NOT WRITE IN THIS AREA



10 (a) Find the Lowest Common Multiple (LCM) of 12 and 20

write out multiples of 12

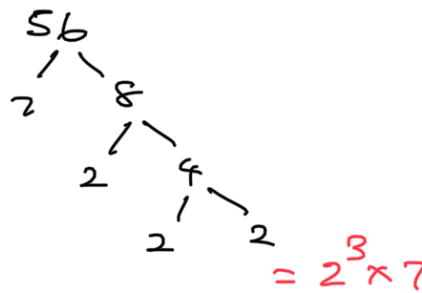
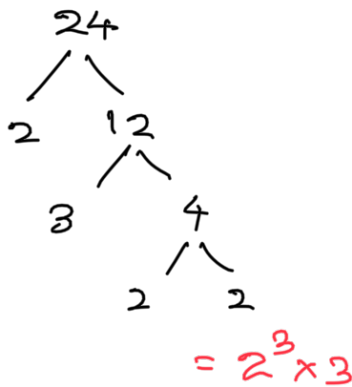
multiples of 12 = 12 24 36 48 60

multiples of 20 = 20 40 60

60

(2)

(b) Find the Highest Common Factor (HCF) of 24 and 56



HCF = product of highest power of each prime factor that appears in both 24 and 56

HCF =  $2^3 = 8$

8

(2)

(Total for Question 10 is 4 marks)

DO NOT WRITE IN THIS AREA

DO NOT WRITE IN THIS AREA

DO NOT WRITE IN THIS AREA



11

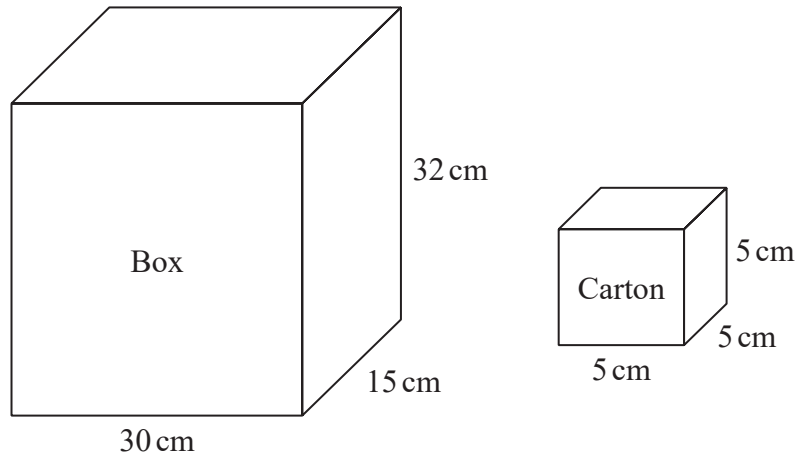


Diagram **NOT** accurately drawn

A wooden box measures 30 cm by 15 cm by 32 cm.  
The box has a lid.

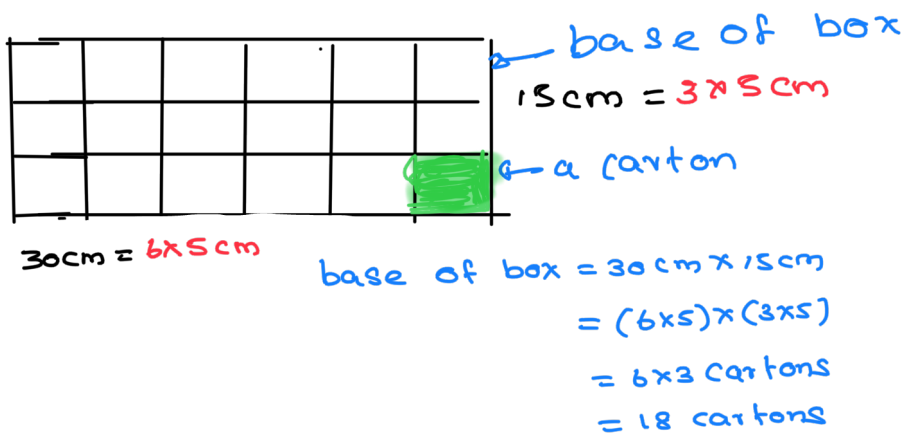
A carton measures 5 cm by 5 cm by 5 cm.

James has 110 cartons.

He wants to put all these cartons in the box and be able to shut the lid.

Can James put all 110 cartons in the box and shut the lid?

Show your working clearly.



$$110 \div 18 = 6.11 \rightarrow \text{there will be 6 complete layers of cartons and a 7th layer with only 2 cartons}$$

$$\approx 7$$

for 7 layers, total height =  $5 \times 7 = 35\text{cm}$   
 $35 > 32 \therefore$  no James cannot put 110 cartons in the box.

(Total for Question 11 is 3 marks)

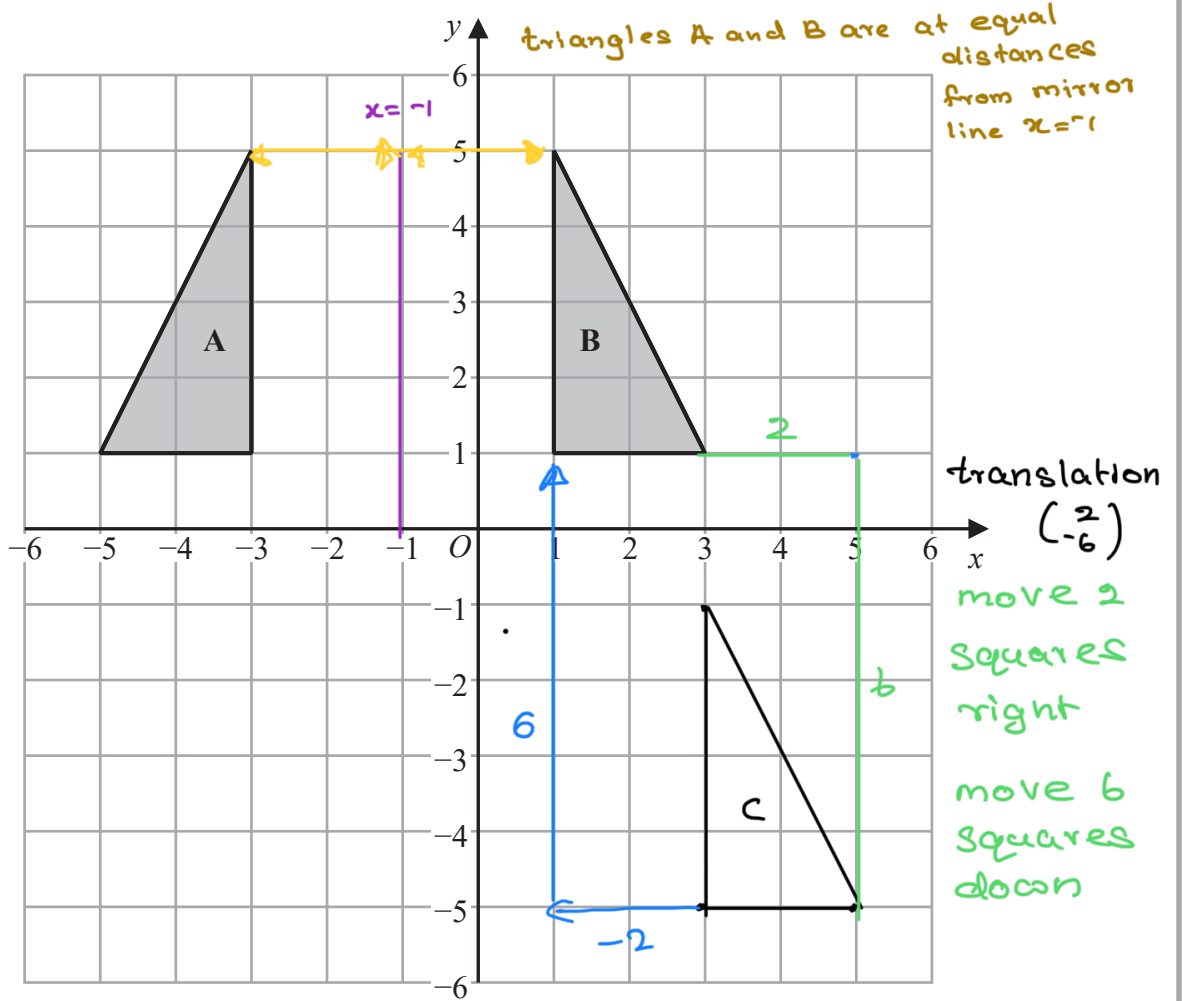
DO NOT WRITE IN THIS AREA

DO NOT WRITE IN THIS AREA

DO NOT WRITE IN THIS AREA



12



(a) Describe fully the single transformation that maps triangle A onto triangle B.

reflection in the line  $x = -1$

(2)

(b) On the grid, translate triangle B by the vector  $\begin{pmatrix} 2 \\ -6 \end{pmatrix}$   
Label your triangle C.

(1)

(c) Describe fully the single transformation that maps triangle C onto triangle B.

translation by  $\begin{pmatrix} -2 \\ 6 \end{pmatrix}$   $\rightarrow$  2 units left  
6 units up

(1)

(Total for Question 12 is 4 marks)

DO NOT WRITE IN THIS AREA

DO NOT WRITE IN THIS AREA

DO NOT WRITE IN THIS AREA



13 There are some people in a cinema.

$\frac{3}{5}$  of the people in the cinema are children.

For the children in the cinema,

$$\text{number of girls} : \text{number of boys} = 2 : 7$$

There are 170 girls in the cinema.

Work out the number of adults in the cinema.

$$\begin{array}{l}
 \text{girls} \quad : \quad \text{boys} \\
 2 \quad : \quad 7 \quad \times 85 \\
 \times 85 \quad \swarrow \quad \searrow \\
 170 \quad : \quad 595 \quad \rightarrow \text{total number of} \\
 \text{Children} = 170 + 595 \\
 = 765
 \end{array}$$

$$\begin{array}{l}
 765 = \frac{3}{5} \text{ of people} \\
 \div 3 \quad \swarrow \quad \searrow \\
 255 = \frac{1}{5} \text{ of people} \\
 \times 2 \quad \swarrow \quad \searrow \\
 510 = \frac{2}{5} \text{ of people} \rightarrow \text{number of} \\
 \text{adults} = 510
 \end{array}$$

..... Sto

(Total for Question 13 is 5 marks)

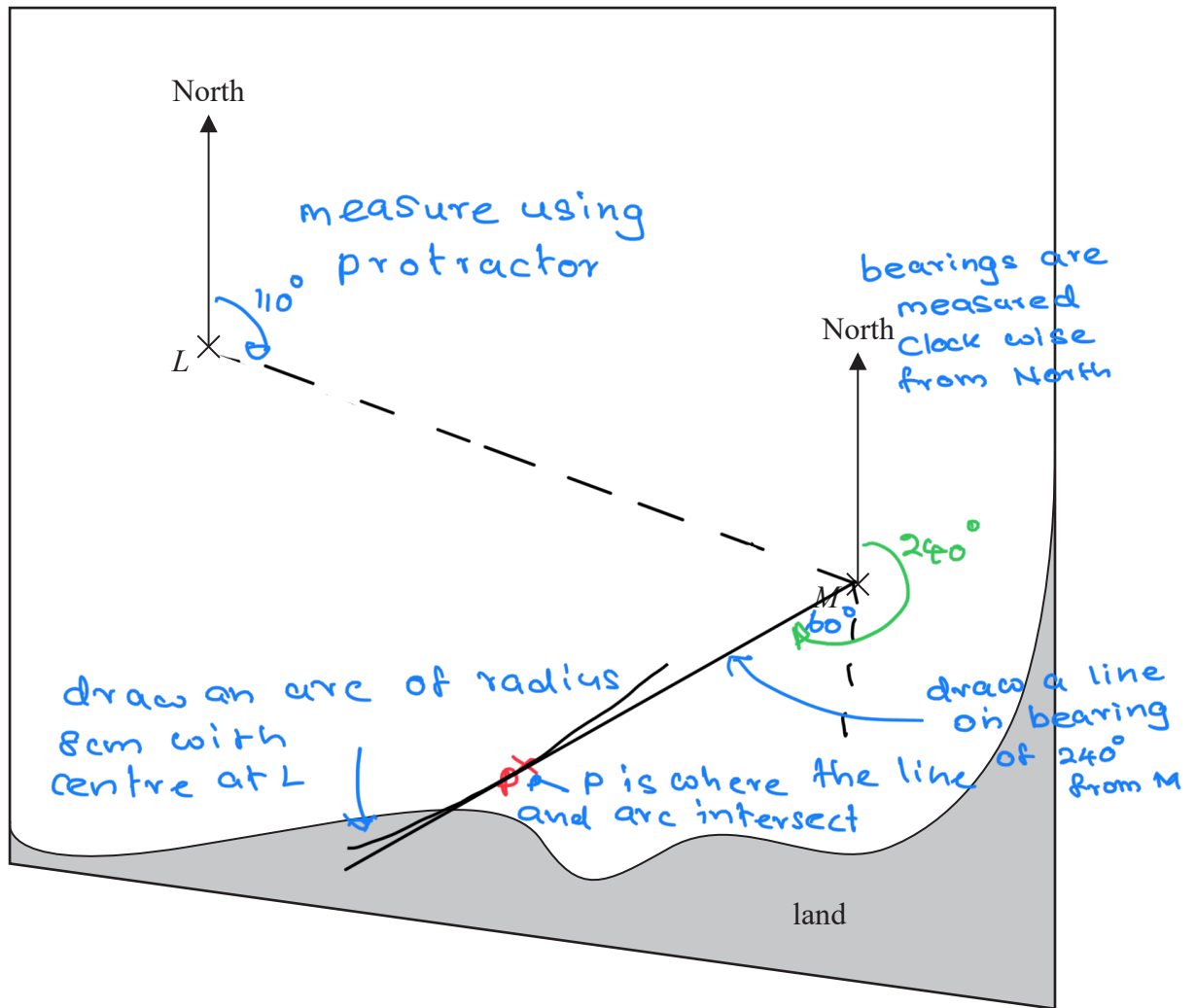
DO NOT WRITE IN THIS AREA

DO NOT WRITE IN THIS AREA

DO NOT WRITE IN THIS AREA



14 The accurate scale drawing shows the positions of two ships, *L* and *M*.



(a) Find the bearing of ship *M* from ship *L*.

110°  
.....  
(1)

The scale of the drawing is 1 cm to 5 km.

Ship *P* is 40 km from *L* and on a bearing of 240° from *M*.

(b) On the diagram, mark with a cross (X) the position of ship *P*.

× 8      1 cm = 5 km  
          8 cm = 40 km

bearing of 240° = 180° + 60°

(Total for Question 14 is 4 marks)

DO NOT WRITE IN THIS AREA

DO NOT WRITE IN THIS AREA

DO NOT WRITE IN THIS AREA



15 The table shows information about the weights, in kg, of 40 parcels.

Weight of parcel ( $p$ kg)	Frequency
$0 < p \leq 1$	19
$1 < p \leq 2$	12
$2 < p \leq 3$	5
$3 < p \leq 4$	2
$4 < p \leq 5$	2

(a) Write down the modal class.

modal class =  $0 < p \leq 1$

↳ class with highest frequency

$$0 < p \leq 1$$

(1)

(b) Work out an estimate for the mean weight of the parcels.

weight (pkg)	midpoint	frequency	mid $\times$ freq. point
$0 < p \leq 1$	0.5	19	9.5
$1 < p \leq 2$	1.5	12	18
$2 < p \leq 3$	2.5	5	12.5
$3 < p \leq 4$	3.5	2	7
$4 < p \leq 5$	4.5	2	9

$$\text{mean} = \frac{\text{Sum of (midpoint} \times \text{frequency)}}{\text{total frequency}} = \frac{56}{40} = 1.4 \text{ kg}$$

(4)

(Total for Question 15 is 5 marks)

$$= \frac{9.5 + 18 + 12.5 + 7 + 9}{40} = \frac{56}{40} = 1.4 \text{ kg.}$$





16 (a) Simplify  $y^5 \times y^9$ 

$$y^5 \times y^9 = y^{5+9} \rightarrow a^m \times a^n = a^{m+n}$$

$$= y^{14}$$

$$y^{14}$$

(1)

(b) Simplify  $(2m^3)^4$ 

$$(2m^3)^4 = 2^4 \times (m^3)^4$$

$$= 16 \times m^{3 \times 4} \rightarrow (a^m)^n = a^{m \times n}$$

$$= 16 \times m^{12}$$

$$16 m^{12}$$

(2)

(c) Solve  $5(x+3) = 3x - 4$   
Show clear algebraic working.

$$5(x+3) = 3x - 4$$

$$5x + 15 = 3x - 4$$

$$2x + 15 = -4$$

$$2x = -19 \div 2$$

$$x = \frac{-19}{2} = -9.5$$

$$x = -9.5$$

(3)

(d) (i) Factorise  $x^2 + 2x - 24$ 

$$x^2 + 2x - 24 = (x+6)(x-4)$$

$$6 \times -4 = -24$$

$$6 + -4 = 2$$

$$(x+6)(x-4)$$

(2)

(ii) Hence, solve  $x^2 + 2x - 24 = 0 \rightarrow (x+6)(x-4) = 0$ 

$$x + 6 = 0$$

$$-6 -6$$

$$x = -6$$

$$x - 4 = 0$$

$$+4 +4$$

$$x = 4$$

$$x = -6, 4$$

(1)

(Total for Question 16 is 9 marks)

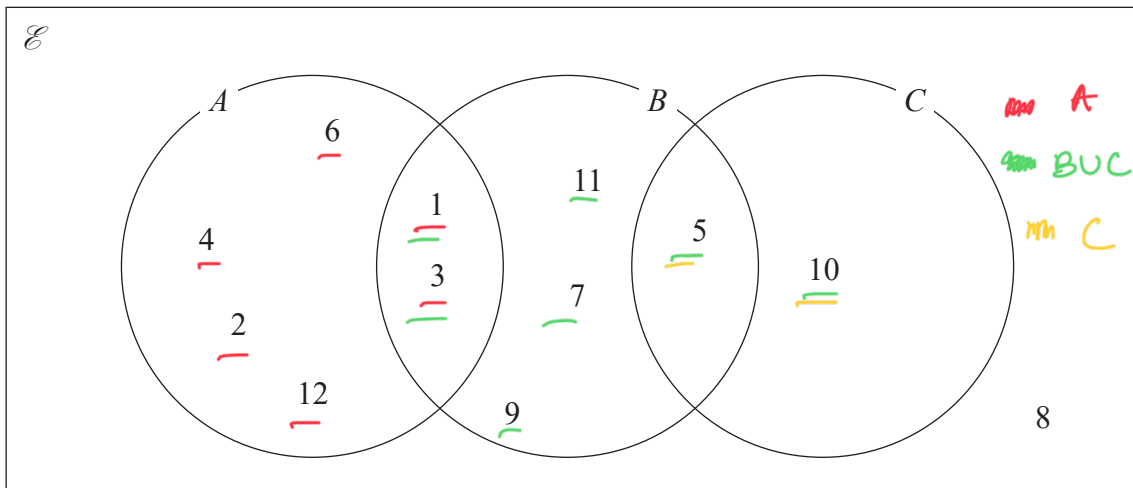
DO NOT WRITE IN THIS AREA

DO NOT WRITE IN THIS AREA

DO NOT WRITE IN THIS AREA



17 Here is a Venn diagram.



(a) Write down the numbers that are in the set

(i)  $A$

1, 2, 3, 4, 6, 12

(ii)  $B \cup C$

Union  
B or C or both

1, 3, 5, 7, 9, 10, 11  
(2)

Brian writes down the statement  $A \cap C = \emptyset$

(b) Is Brian's statement correct?

You must give a reason for your answer.

$A \cap C$  → A and C intersection Yes. Brian is correct as

there are no numbers in both A and C

(1)

One of the numbers in the Venn diagram is picked at random.

(c) Find the probability that this number is in set  $C'$

$P(C) = \frac{2}{12}$  → numbers in set C  
→ total of numbers in Venn diagram

$P(C') = 1 - P(C) = 1 - \frac{2}{12} = \frac{10}{12}$

$\frac{10}{12}$

(2)

Not C

(Total for Question 17 is 5 marks)

DO NOT WRITE IN THIS AREA

DO NOT WRITE IN THIS AREA

DO NOT WRITE IN THIS AREA



18 (a) Write  $8 \times 10^4$  as an ordinary number.

$$8 \times 10^4 = 80000$$

$10^4$  so move decimal point  
4 places to the right

$$\underline{\hspace{1cm}80000\hspace{1cm}}$$

(1)

(b) Work out  $(3.5 \times 10^5) \div (7 \times 10^8)$   
Give your answer in standard form.

$$(3.5 \times 10^5) \div (7 \times 10^8)$$

$$= (3.5 \div 7) \times (10^5 \div 10^8)$$

$$= 0.5 \times 10^{-3}$$

$$= 5 \times 10^{-4}$$

$10^5 \div 10^8 = 10^{5-8} = 10^{-3}$   
multiply front number  
by 10 so divide power by  
10 (subtract 1 from  
power)

standard form  
 $A \times 10^n$  where  $1 \leq A < 10$

$$\underline{\hspace{1cm}5 \times 10^{-4}\hspace{1cm}}$$

(2)

(Total for Question 18 is 3 marks)

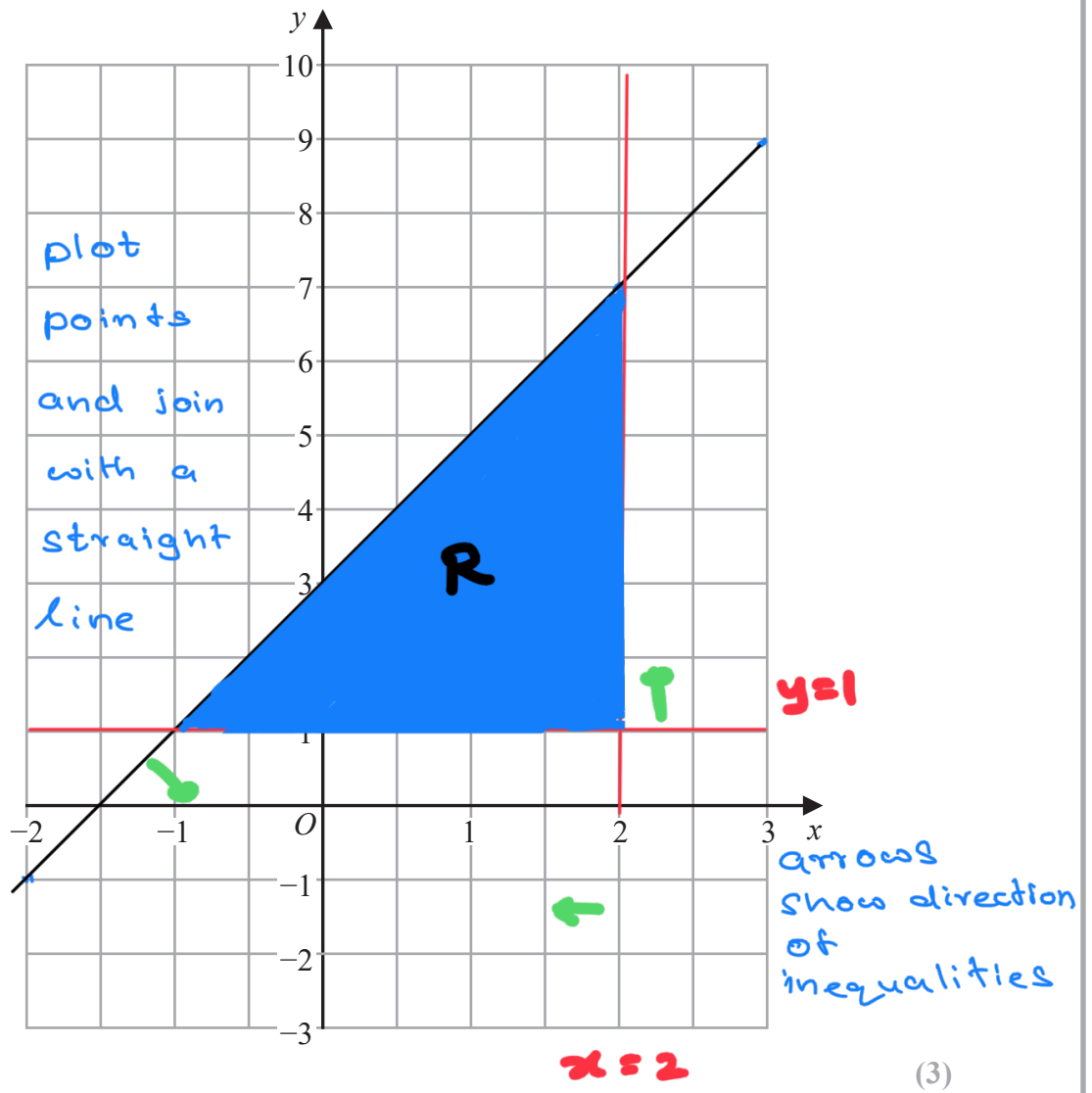
DO NOT WRITE IN THIS AREA

DO NOT WRITE IN THIS AREA

DO NOT WRITE IN THIS AREA



19 (a) On the grid, draw the graph of  $y = 2x + 3$  for values of  $x$  from  $-2$  to  $3$



(3)

(b) Show, by shading on the grid, the region that satisfies **all three** of the inequalities

Label the region **R**.

$x \leq 2$	$y \geq 1$	$y \leq 2x + 3$
to left of line $x = 2$	above line $y = 1$	below line $y = 2x + 3$

(2)

(Total for Question 19 is 5 marks)

$x$	-2	-1	0	1	2	3
$y$	-1	1	3	5	7	9

$\checkmark 2(1) + 3$

$y = 2x + 3$   
Substitute in  $x$ -values

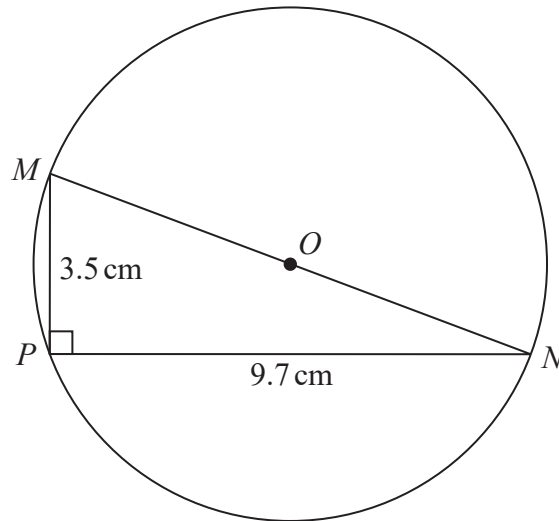
DO NOT WRITE IN THIS AREA

DO NOT WRITE IN THIS AREA

DO NOT WRITE IN THIS AREA



20

Diagram **NOT**  
accurately drawn

$M$ ,  $N$  and  $P$  are points on a circle, centre  $O$ .  
 $MON$  is a diameter of the circle.

$$MP = 3.5 \text{ cm}$$

$$PN = 9.7 \text{ cm}$$

$$\text{Angle } MPN = 90^\circ$$

Work out the circumference of the circle.  
 Give your answer correct to 3 significant figures.

$$\text{Pythagoras: } a^2 + b^2 = c^2$$

$$MON^2 = 3.5^2 + 9.7^2 = 106.34$$

$$MON = \sqrt{106.34} = 10.31\dots \text{ cm}$$

↪ diameter

$$\text{Circumference} = \pi d$$

$$= \pi \times 10.31$$

$$= 32.396$$

$$= 32.4 \text{ cm} \quad \text{to 3sf}$$

..... 32.4 ..... cm

(Total for Question 20 is 4 marks)



21 Chao bought a boat for HK\$160 000  
The value of the boat depreciates by 4% each year.

- (a) Work out the value of the boat at the end of 3 years.  
Give your answer correct to the nearest HK\$.

depreciates by 4%  $\rightarrow 100\% - 4\% = 96\% = 0.96$   $\div 100$   
multiplier

final value = initial value  $\times$  multiplier<sup>n</sup>

= 160 000  $\times$  (0.96)<sup>3</sup>  $\rightarrow$  end of 3 years so substitute n=3

= HK\$ 141 558 to nearest HK\$

HK\$ 141 558  
(3)

Jalina gets a salary increase of 5%  
Her salary after the increase is HK\$252 000

- (b) Work out Jalina's salary before the increase.

5% increase  $\rightarrow 100\% + 5\% = 105\%$  of original salary  
 $\div 105$  HK\$ 252 000 = 105%  
 2400 = 1%  
 $\times 100$  240 000 = 100%  $\times 100$

Jalina's Salary before increase  
HK\$ 240 000

HK\$ 240 000  
(3)

(Total for Question 21 is 6 marks)

TOTAL FOR PAPER IS 100 MARKS

DO NOT WRITE IN THIS AREA

DO NOT WRITE IN THIS AREA

DO NOT WRITE IN THIS AREA



DO NOT WRITE IN THIS AREA

DO NOT WRITE IN THIS AREA

DO NOT WRITE IN THIS AREA

**BLANK PAGE**



DO NOT WRITE IN THIS AREA

DO NOT WRITE IN THIS AREA

DO NOT WRITE IN THIS AREA

**BLANK PAGE**

