



**Cambridge International Examinations**  
Cambridge International General Certificate of Secondary Education

CANDIDATE  
NAME

--

CENTRE  
NUMBER

--	--	--	--	--

CANDIDATE  
NUMBER

--	--	--	--



**ADDITIONAL MATHEMATICS**

**0606/11**

Paper 1

**May/June 2017**

**2 hours**

Candidates answer on the Question Paper.

Additional Materials:      Electronic calculator

**READ THESE INSTRUCTIONS FIRST**

Write your Centre number, candidate number and name on all the work you hand in.

Write in dark blue or black pen.

You may use an HB pencil for any diagrams or graphs.

Do not use staples, paper clips, glue or correction fluid.

**DO NOT WRITE IN ANY BARCODES.**

Answer **all** the questions.

Give non-exact numerical answers correct to 3 significant figures, or 1 decimal place in the case of angles in degrees, unless a different level of accuracy is specified in the question.

The use of an electronic calculator is expected, where appropriate.

You are reminded of the need for clear presentation in your answers.

At the end of the examination, fasten all your work securely together.

The number of marks is given in brackets [ ] at the end of each question or part question.

The total number of marks for this paper is 80.

This document consists of **12** printed pages.

**Mathematical Formulae****1. ALGEBRA***Quadratic Equation*

For the equation  $ax^2 + bx + c = 0$ ,

$$x = \frac{-b \pm \sqrt{b^2 - 4ac}}{2a}$$

*Binomial Theorem*

$$(a + b)^n = a^n + \binom{n}{1} a^{n-1} b + \binom{n}{2} a^{n-2} b^2 + \dots + \binom{n}{r} a^{n-r} b^r + \dots + b^n,$$

where  $n$  is a positive integer and  $\binom{n}{r} = \frac{n!}{(n-r)!r!}$

**2. TRIGONOMETRY***Identities*

$$\sin^2 A + \cos^2 A = 1$$

$$\sec^2 A = 1 + \tan^2 A$$

$$\operatorname{cosec}^2 A = 1 + \cot^2 A$$

*Formulae for  $\triangle ABC$* 

$$\frac{a}{\sin A} = \frac{b}{\sin B} = \frac{c}{\sin C}$$

$$a^2 = b^2 + c^2 - 2bc \cos A$$

$$\Delta = \frac{1}{2} bc \sin A$$

1 The line  $y = kx - 5$ , where  $k$  is a positive constant, is a tangent to the curve  $y = x^2 + 4x$  at the point  $A$ .

(i) Find the exact value of  $k$ . [3]

(ii) Find the gradient of the normal to the curve at the point  $A$ , giving your answer in the form  $a + b\sqrt{5}$ , where  $a$  and  $b$  are constants. [2]

- 2 It is given that  $p(x) = x^3 + ax^2 + bx - 48$ . When  $p(x)$  is divided by  $x - 3$  the remainder is 6. Given that  $p'(1) = 0$ , find the value of  $a$  and of  $b$ . [5]

- 3 (a) Simplify  $\sqrt{x^8y^{10}} \div \sqrt[3]{x^3y^{-6}}$ , giving your answer in the form  $x^ay^b$ , where  $a$  and  $b$  are integers. [2]

- (b) (i) Show that  $4(t-2)^{\frac{1}{2}} + 5(t-2)^{\frac{3}{2}}$  can be written in the form  $(t-2)^p(qt+r)$ , where  $p$ ,  $q$  and  $r$  are constants to be found. [3]

- (ii) Hence solve the equation  $4(t-2)^{\frac{1}{2}} + 5(t-2)^{\frac{3}{2}} = 0$ . [1]

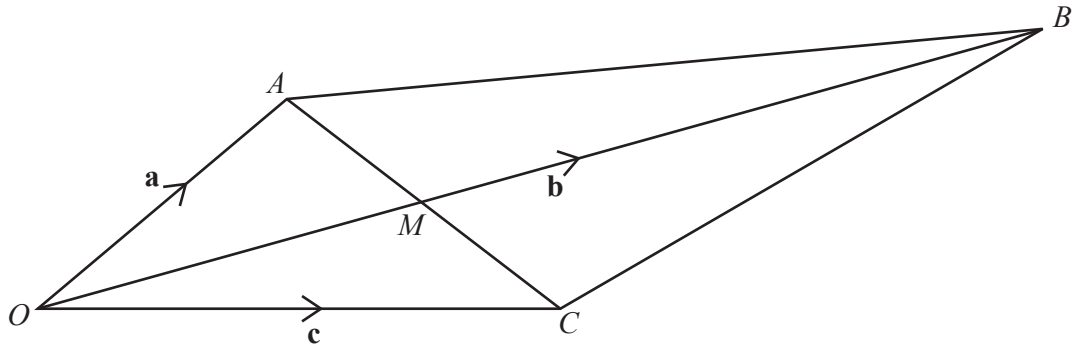
4 (a) It is given that  $f(x) = 3e^{-4x} + 5$  for  $x \in \mathbb{R}$ .

(i) State the range of  $f$ . [1]

(ii) Find  $f^{-1}$  and state its domain. [4]

(b) It is given that  $g(x) = x^2 + 5$  and  $h(x) = \ln x$  for  $x > 0$ . Solve  $hg(x) = 2$ . [3]

5 (a)



The diagram shows a figure  $OACB$ , where  $\vec{OA} = \mathbf{a}$ ,  $\vec{OB} = \mathbf{b}$  and  $\vec{OC} = \mathbf{c}$ . The lines  $AC$  and  $OB$  intersect at the point  $M$  where  $M$  is the midpoint of the line  $AC$ .

(i) Find, in terms of  $\mathbf{a}$  and  $\mathbf{c}$ , the vector  $\vec{OM}$ . [2]

(ii) Given that  $OM : MB = 2 : 3$ , find  $\mathbf{b}$  in terms of  $\mathbf{a}$  and  $\mathbf{c}$ . [2]

(b) Vectors  $\mathbf{i}$  and  $\mathbf{j}$  are unit vectors parallel to the  $x$ -axis and  $y$ -axis respectively.

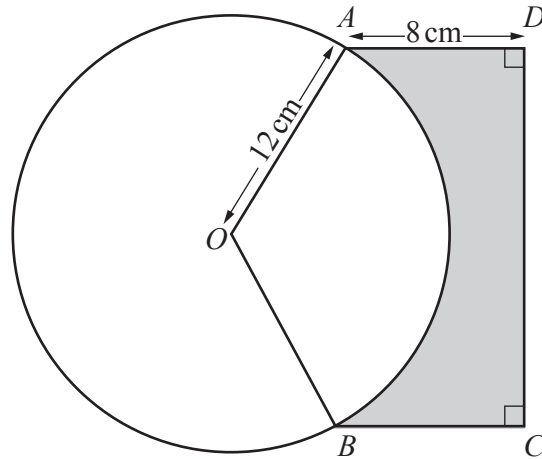
The vector  $\mathbf{p}$  has a magnitude of 39 units and has the same direction as  $-10\mathbf{i} + 24\mathbf{j}$ .

(i) Find  $\mathbf{p}$  in terms of  $\mathbf{i}$  and  $\mathbf{j}$ . [2]

(ii) Find the vector  $\mathbf{q}$  such that  $2\mathbf{p} + \mathbf{q}$  is parallel to the positive  $y$ -axis and has a magnitude of 12 units. [3]

(iii) Hence show that  $|\mathbf{q}| = k\sqrt{5}$ , where  $k$  is an integer to be found. [2]

6



The diagram shows a circle, centre  $O$ , radius  $12\text{ cm}$ . The points  $A$  and  $B$  lie on the circumference of the circle and form a rectangle with the points  $C$  and  $D$ . The length of  $AD$  is  $8\text{ cm}$  and the area of the minor sector  $AOB$  is  $150\text{ cm}^2$ .

(i) Show that angle  $AOB$  is  $2.08$  radians, correct to 2 decimal places. [2]

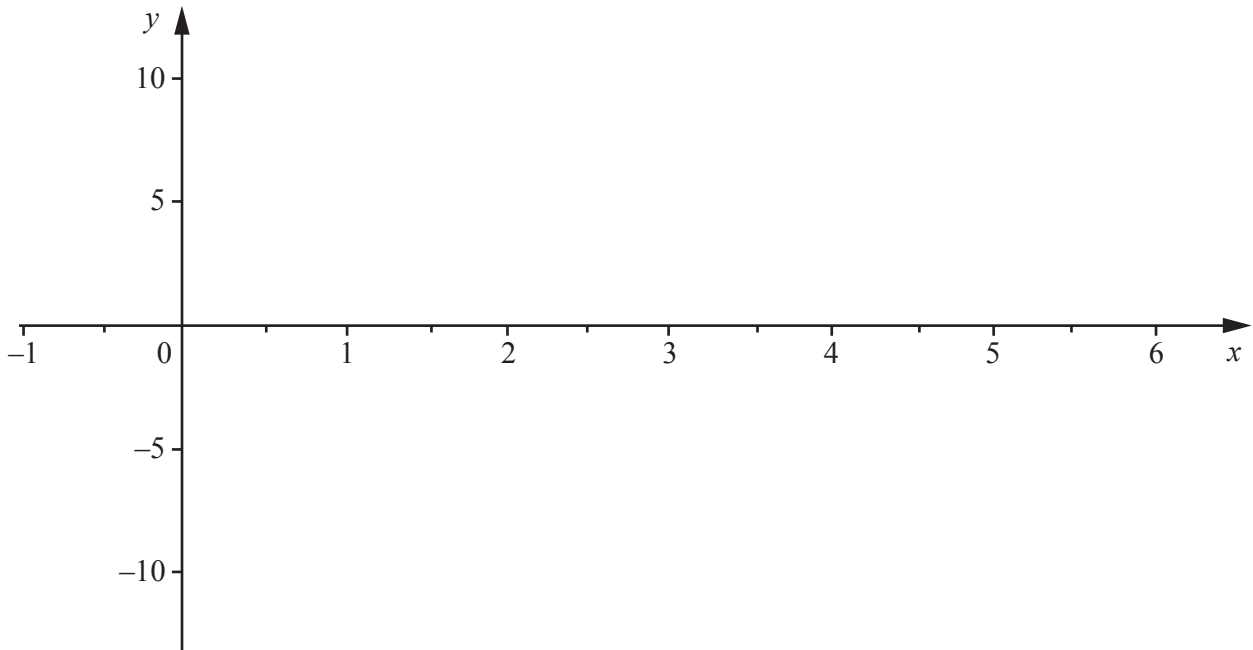
(ii) Find the area of the shaded region  $ADCB$ . [6]

(iii) Find the perimeter of the shaded region  $ADCB$ . [3]



- 7 Show that the curve  $y = (3x^2 + 8)^{\frac{5}{3}}$  has only one stationary point. Find the coordinates of this stationary point and determine its nature. [8]

- 8 (i) On the axes below sketch the graphs of  $y = |2x - 5|$  and  $9y = 80x - 16x^2$ . [5]



- (ii) Solve  $|2x - 5| = 4$ . [3]

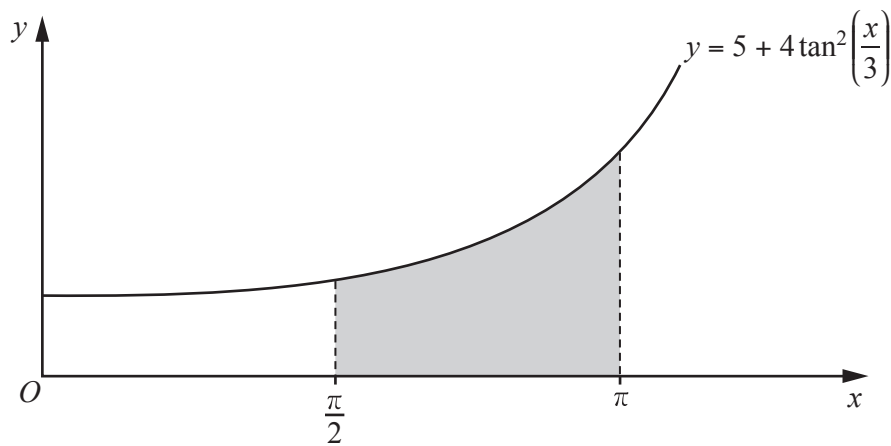
- (iii) Hence show that the graphs of  $y = |2x - 5|$  and  $9y = 80x - 16x^2$  intersect at the points where  $y = 4$ . [1]

- (iv) Hence find the values of  $x$  for which  $9|2x - 5| \leq 80x - 16x^2$ . [2]

9 (i) Show that  $5 + 4 \tan^2\left(\frac{x}{3}\right) = 4 \sec^2\left(\frac{x}{3}\right) + 1$ . [1]

(ii) Given that  $\frac{d}{dx}\left(\tan\left(\frac{x}{3}\right)\right) = \frac{1}{3}\sec^2\left(\frac{x}{3}\right)$ , find  $\int \sec^2\left(\frac{x}{3}\right) dx$ . [1]

(iii)



The diagram shows part of the curve  $y = 5 + 4 \tan^2\left(\frac{x}{3}\right)$ . Using the results from parts (i) and (ii), find the exact area of the shaded region enclosed by the curve, the  $x$ -axis and the lines  $x = \frac{\pi}{2}$  and  $x = \pi$ . [5]

Question 10 is printed on the next page.

10 (a) Given that  $y = \frac{e^{3x}}{4x^2 + 1}$ , find  $\frac{dy}{dx}$ . [3]

(b) Variables  $x$ ,  $y$  and  $t$  are such that  $y = 4 \cos\left(x + \frac{\pi}{3}\right) + 2\sqrt{3} \sin\left(x + \frac{\pi}{3}\right)$  and  $\frac{dy}{dt} = 10$ .

(i) Find the value of  $\frac{dy}{dx}$  when  $x = \frac{\pi}{2}$ . [3]

(ii) Find the value of  $\frac{dx}{dt}$  when  $x = \frac{\pi}{2}$ . [2]

---

Permission to reproduce items where third-party owned material protected by copyright is included has been sought and cleared where possible. Every reasonable effort has been made by the publisher (UCLES) to trace copyright holders, but if any items requiring clearance have unwittingly been included, the publisher will be pleased to make amends at the earliest possible opportunity.

To avoid the issue of disclosure of answer-related information to candidates, all copyright acknowledgements are reproduced online in the Cambridge International Examinations Copyright Acknowledgements Booklet. This is produced for each series of examinations and is freely available to download at [www.cie.org.uk](http://www.cie.org.uk) after the live examination series.

Cambridge International Examinations is part of the Cambridge Assessment Group. Cambridge Assessment is the brand name of University of Cambridge Local Examinations Syndicate (UCLES), which is itself a department of the University of Cambridge.