

Write your name here

Surname

Other names

Pearson
Edexcel GCSE

Centre Number

--	--	--	--	--	--

Candidate Number

--	--	--	--	--	--

Chemistry/Science

Unit C1: Chemistry in Our World

Foundation Tier

Thursday 19 May 2016 – Morning

Time: 1 hour

Paper Reference

5CH1F/01

You must have:

Calculator, ruler

Total Marks

Instructions

- Use **black** ink or ball-point pen.
- **Fill in the boxes** at the top of this page with your name, centre number and candidate number.
- Answer **all** questions.
- Answer the questions in the spaces provided
– *there may be more space than you need.*

Information

- The total mark for this paper is 60.
- The marks for **each** question are shown in brackets
– *use this as a guide as to how much time to spend on each question.*
- Questions labelled with an **asterisk** (*) are ones where the quality of your written communication will be assessed
– *you should take particular care with your spelling, punctuation and grammar, as well as the clarity of expression, on these questions.*

Advice

- Read each question carefully before you start to answer it.
- Try to answer every question.
- Check your answers if you have time at the end.

Turn over ►

P45927A

©2016 Pearson Education Ltd.

1/1/1/1/



PEARSON

The Periodic Table of the Elements

1	2	3	4	5	6	7	0										
7 Li lithium 3	9 Be beryllium 4	11 Na sodium 11	12 C carbon 6	13 Al aluminium 13	14 N nitrogen 7	15 P phosphorus 15	16 O oxygen 8	17 F fluorine 9	18 Ne neon 10								
19 K potassium 19	20 Ca calcium 20	23 Sc scandium 21	24 Ti titanium 22	25 V vanadium 23	26 Cr chromium 24	27 Mn manganese 25	28 Fe iron 26	29 Co cobalt 27	30 Ni nickel 28	31 Cu copper 29	32 Zn zinc 30	33 Ga gallium 31	34 Ge germanium 32	35 As arsenic 33	36 Se selenium 34	37 Br bromine 35	38 Kr krypton 36
37 Rb rubidium 37	38 Sr strontium 38	39 Y yttrium 39	40 Zr zirconium 40	41 Nb niobium 41	42 Mo molybdenum 42	43 Tc technetium 43	44 Ru ruthenium 44	45 Rh rhodium 45	46 Pd palladium 46	47 Ag silver 47	48 Cd cadmium 48	49 In indium 49	50 Sn tin 50	51 Sb antimony 51	52 Te tellurium 52	53 I iodine 53	54 Xe xenon 54
55 Cs caesium 55	56 Ba barium 56	57 La* lanthanum 57	72 Hf hafnium 72	73 Ta tantalum 73	74 W tungsten 74	75 Re rhenium 75	76 Os osmium 76	77 Ir iridium 77	78 Pt platinum 78	79 Au gold 79	80 Hg mercury 80	81 Tl thallium 81	82 Pb lead 82	83 Bi bismuth 83	84 Po polonium 84	85 At astatine 85	86 Rn radon 86
[223] Fr francium 87	[226] Ra radium 88	[227] Ac* actinium 89	[261] Rf rutherfordium 104	[262] Db dubnium 105	[266] Sg seaborgium 106	[264] Bh bohrium 107	[277] Hs hassium 108	[268] Mt meitnerium 109	[271] Ds darmstadtium 110	[272] Rg roentgenium 111	Elements with atomic numbers 112-116 have been reported but not fully authenticated						

1
H
hydrogen
1

relative atomic mass
atomic symbol
name
atomic (proton) number

* The lanthanoids (atomic numbers 58-71) and the actinoids (atomic numbers 90-103) have been omitted.

The relative atomic masses of copper and chlorine have not been rounded to the nearest whole number.

DO NOT WRITE IN THIS AREA

DO NOT WRITE IN THIS AREA

DO NOT WRITE IN THIS AREA



DO NOT WRITE IN THIS AREA

DO NOT WRITE IN THIS AREA

DO NOT WRITE IN THIS AREA

BLANK PAGE

Questions begin on next page.



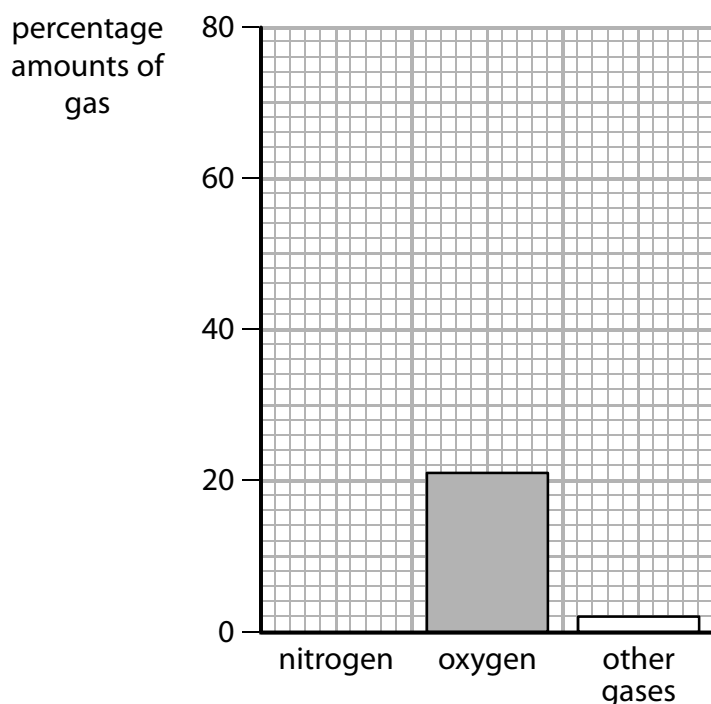
Answer ALL questions

Some questions must be answered with a cross in a box ☒. If you change your mind about an answer, put a line through the box ☒ and then mark your new answer with a cross ☒.

The atmosphere

- 1 (a) The bar chart shows the percentages of some gases in a sample of dry air from today's atmosphere.

The bar for the percentage of nitrogen is missing.



- (i) The percentage of nitrogen is 78.

Add the bar to the chart to show this.

(1)

- (ii) Complete the sentence by putting a cross (☒) in the box next to your answer.

(1)

The bar chart shows the percentage of oxygen in this dry air is

- A** 1
- B** 11
- C** 21
- D** 31

DO NOT WRITE IN THIS AREA

DO NOT WRITE IN THIS AREA

DO NOT WRITE IN THIS AREA



(b) In the Earth's early atmosphere there was little or no oxygen.

Explain what caused the percentage of oxygen in the atmosphere to increase.

(2)

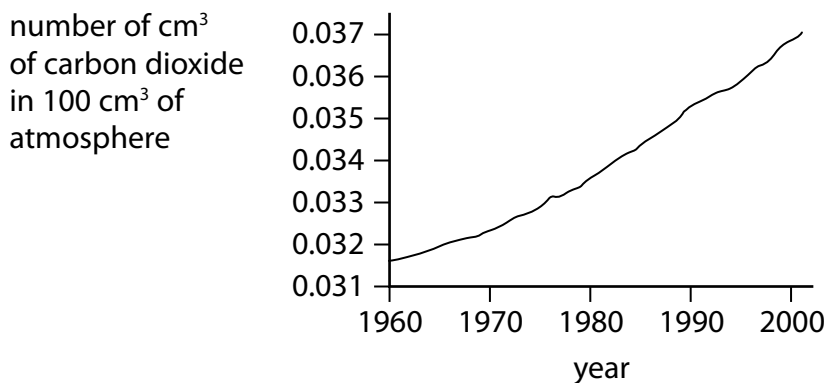
(c) Carbon dioxide is one of the other gases in the atmosphere.

(i) The formula of carbon dioxide is CO_2 .

Describe what atoms are present in carbon dioxide.

(2)

(ii) The graph below shows the volume of carbon dioxide in the atmosphere between the years 1960 and 2000.



Explain one reason why the volume of carbon dioxide increased between the years 1960 and 2000.

(2)

(Total for Question 1 = 8 marks)



DO NOT WRITE IN THIS AREA

DO NOT WRITE IN THIS AREA

DO NOT WRITE IN THIS AREA

Acids and electrolysis

2 (a) Acids can be neutralised.

Which of the following compounds will neutralise sulfuric acid?

Put a cross (☒) in the box next to your answer.

(1)

- A sodium chloride
- B sodium hydroxide
- C sodium nitrate
- D sodium sulfate

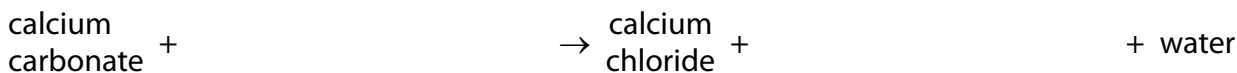
(b) Indigestion is caused by excess hydrochloric acid in the stomach.

Calcium carbonate neutralises the excess hydrochloric acid, producing calcium chloride, a gas and water.

Use words from the box to complete the word equation for this reaction.

(2)

calcium hydroxide	calcium oxide	carbon dioxide
chlorine	hydrochloric acid	hydrogen



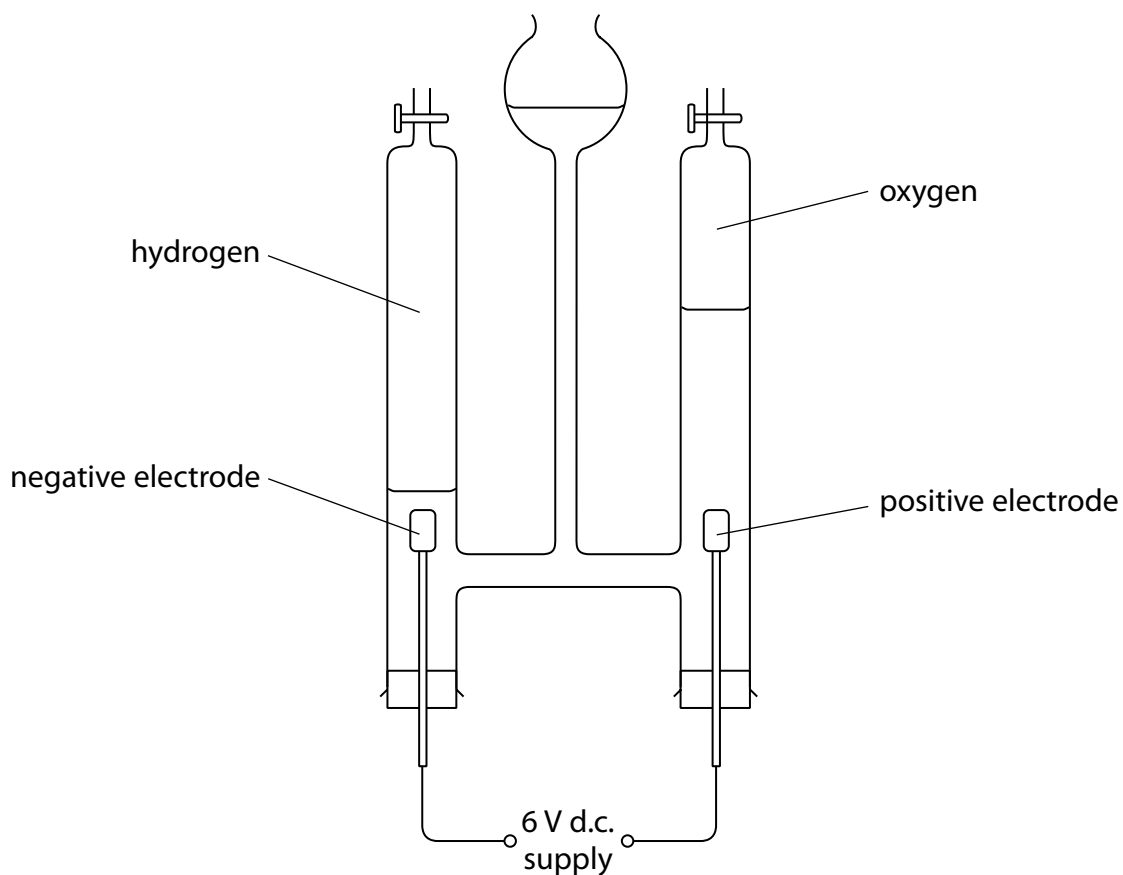
DO NOT WRITE IN THIS AREA

DO NOT WRITE IN THIS AREA

DO NOT WRITE IN THIS AREA



- (c) Water is electrolysed in the apparatus shown.
The water decomposes to produce hydrogen and oxygen.



- (i) Describe the test to show that one of the gases evolved is oxygen.

(2)

.....

.....

.....

.....



- (ii) After the experiment has started, the volumes of hydrogen and oxygen collected are measured after 2, 4 and 6 minutes.

The results are shown in the table.

time / minutes	volume of hydrogen / cm ³	volume of oxygen / cm ³
0	0.0	0.0
2	8.0	4.0
4	16.0	8.0
6	24.0	12.0

Describe what the results show about the volumes of hydrogen and oxygen produced during the experiment.

(2)

.....

.....

.....

.....

- (d) When hydrochloric acid is electrolysed a gas is produced which bleaches damp blue litmus paper.

Give the name of this gas.

(1)

.....

(Total for Question 2 = 8 marks)

DO NOT WRITE IN THIS AREA

DO NOT WRITE IN THIS AREA

DO NOT WRITE IN THIS AREA



DO NOT WRITE IN THIS AREA

DO NOT WRITE IN THIS AREA

DO NOT WRITE IN THIS AREA

BLANK PAGE



Hydrocarbons

3 (a) Which of these is the formula of a hydrocarbon?

Put a cross (☒) in the box next to your answer.

(1)

- A** C_2H_5Cl
- B** C_2H_6
- C** C_2H_6O
- D** $NaHCO_3$

(b) Crude oil is a complex mixture of hydrocarbons.

(i) Give the name of the process used to separate crude oil into simpler mixtures.

(2)

(ii) Petrol and kerosene are obtained from crude oil.
They are used as fuels.

Which line in the table shows the correct use of each fuel?

Put a cross (☒) in the box next to your answer.

(1)

	petrol used as fuel for	kerosene used as fuel for
<input type="checkbox"/> A	aircraft	cars
<input type="checkbox"/> B	cars	aircraft
<input type="checkbox"/> C	aircraft	ships
<input type="checkbox"/> D	cars	ships

(c) Propane reacts with oxygen to form carbon dioxide and water.

(i) Write the word equation for this reaction.

(2)

(ii) Propane is an alkane.

Give the formula of a molecule of propane.

(2)

DO NOT WRITE IN THIS AREA

DO NOT WRITE IN THIS AREA

DO NOT WRITE IN THIS AREA



(d) Explain a problem caused by incomplete combustion of hydrocarbons.

(2)

.....

.....

.....

.....

(Total for Question 3 = 10 marks)

DO NOT WRITE IN THIS AREA

DO NOT WRITE IN THIS AREA

DO NOT WRITE IN THIS AREA



Metals

4 (a) Metals are extracted from ores found in the Earth's crust.

Draw a straight line from each metal to the method used to extract the metal from its ore.

(3)

metal	method of extraction from ore
aluminium ●	● fractional distillation
gold ●	● separating the uncombined metal
iron ●	● heating with carbon
	● electrolysis

(b) When a mixture of zinc oxide and carbon is heated, zinc metal is formed.

(i) Complete the word equation for this reaction.

(2)

zinc oxide + → zinc +

(ii) In this reaction zinc oxide has lost oxygen to form zinc.

State the name of the change that occurs when a compound loses oxygen.

(1)

(c) Copper is used in electric wires.

State **two** properties of copper that make it suitable for this use.

(2)

property 1.....

property 2.....

DO NOT WRITE IN THIS AREA

DO NOT WRITE IN THIS AREA

DO NOT WRITE IN THIS AREA



(d) Gold jewellery is made of alloys containing gold and copper.
These alloys are stronger than pure gold.

Gold atoms are bigger than copper atoms.

Use this information to explain why these gold alloys are stronger than pure gold.

(2)

.....

.....

.....

(Total for Question 4 = 10 marks)

DO NOT WRITE IN THIS AREA

DO NOT WRITE IN THIS AREA

DO NOT WRITE IN THIS AREA



Alkenes and polymers

- 5 (a) This table showing the names, molecular formulae and structures of the three alkenes is incomplete.

Complete the table.

(3)

name of alkene	molecular formula	structure
ethene	C_2H_4	
	C_3H_6	
butene		

- (b) Describe what is **seen** when bromine water is added to a sample of a liquid alkene and the mixture is shaken.

(2)

.....

.....

.....

.....

DO NOT WRITE IN THIS AREA

DO NOT WRITE IN THIS AREA

DO NOT WRITE IN THIS AREA



- (c) In industry alkenes are formed when large alkane molecules are broken down into smaller alkane molecules and alkenes.

What is the name of this process?

Put a cross (X) in the box next to your answer.

(1)

- A combustion
- B cracking
- C neutralisation
- D precipitation

DO NOT WRITE IN THIS AREA

DO NOT WRITE IN THIS AREA

DO NOT WRITE IN THIS AREA



DO NOT WRITE IN THIS AREA

DO NOT WRITE IN THIS AREA

DO NOT WRITE IN THIS AREA

(Total for Question 5 = 12 marks)



P 4 5 9 2 7 A 0 1 7 2 4

Limestone

6 (a) The photograph shows a sample of limestone.



State what evidence in the photograph shows that the limestone is a sedimentary rock.

(1)

.....

.....

.....

(b) Complete the sentence by putting a cross (☒) in the box next to your answer.

(1)

Limestone is an important raw material.

In industry limestone is **not** used as a raw material to make

- A cement
- B concrete
- C glass
- D marble

DO NOT WRITE IN THIS AREA

DO NOT WRITE IN THIS AREA

DO NOT WRITE IN THIS AREA



(c) (i) When limestone is heated it breaks down to form calcium oxide and carbon dioxide.
Give the name of the process in which a substance is broken down by heating. (2)

(ii) Calcium hydroxide is formed when water is added to calcium oxide.
Write the word equation for this reaction. (2)

DO NOT WRITE IN THIS AREA

DO NOT WRITE IN THIS AREA

DO NOT WRITE IN THIS AREA



DO NOT WRITE IN THIS AREA

DO NOT WRITE IN THIS AREA

DO NOT WRITE IN THIS AREA

*(d) Sulfur impurity can be present in the coal used in coal-fired power stations. As a result of the presence of the sulfur impurity, the gases from the chimneys of these power stations can produce acid rain. Limestone can be used to reduce the emission of these harmful gases from the chimneys of coal-fired power stations.

Explain how acid rain is formed, the environmental problems caused by acid rain and how the use of limestone in the chimneys of coal-fired power stations reduces these problems.

(6)

.....

.....

.....

.....

.....

.....

.....

.....

.....

.....

.....

.....

.....

.....

.....

.....

.....

.....

.....

.....

.....

.....

.....

.....

.....



DO NOT WRITE IN THIS AREA

DO NOT WRITE IN THIS AREA

DO NOT WRITE IN THIS AREA

(Total for Question 6 = 12 marks)

TOTAL FOR PAPER = 60 MARKS



DO NOT WRITE IN THIS AREA

DO NOT WRITE IN THIS AREA

DO NOT WRITE IN THIS AREA

BLANK PAGE



DO NOT WRITE IN THIS AREA

DO NOT WRITE IN THIS AREA

DO NOT WRITE IN THIS AREA

BLANK PAGE



P 4 5 9 2 7 A 0 2 3 2 4

DO NOT WRITE IN THIS AREA

DO NOT WRITE IN THIS AREA

DO NOT WRITE IN THIS AREA

BLANK PAGE

