



# H

Thursday 15 May 2014 – Morning

## GCSE TWENTY FIRST CENTURY SCIENCE CHEMISTRY A/SCIENCE A

**A171/02** Modules C1 C2 C3 (Higher Tier)

Candidates answer on the Question Paper.  
A calculator may be used for this paper.

**OCR supplied materials:**  
None

**Other materials required:**

- Pencil
- Ruler (cm/mm)

**Duration:** 1 hour



Candidate forename		Candidate surname	
-----------------------	--	----------------------	--

Centre number						Candidate number				
---------------	--	--	--	--	--	------------------	--	--	--	--

### INSTRUCTIONS TO CANDIDATES

- Write your name, centre number and candidate number in the boxes above. Please write clearly and in capital letters.
- Use black ink. HB pencil may be used for graphs and diagrams only.
- Answer **all** the questions.
- Read each question carefully. Make sure you know what you have to do before starting your answer.
- Write your answer to each question in the space provided. Additional paper may be used if necessary but you must clearly show your candidate number, centre number and question number(s).
- Do **not** write in the bar codes.

### INFORMATION FOR CANDIDATES

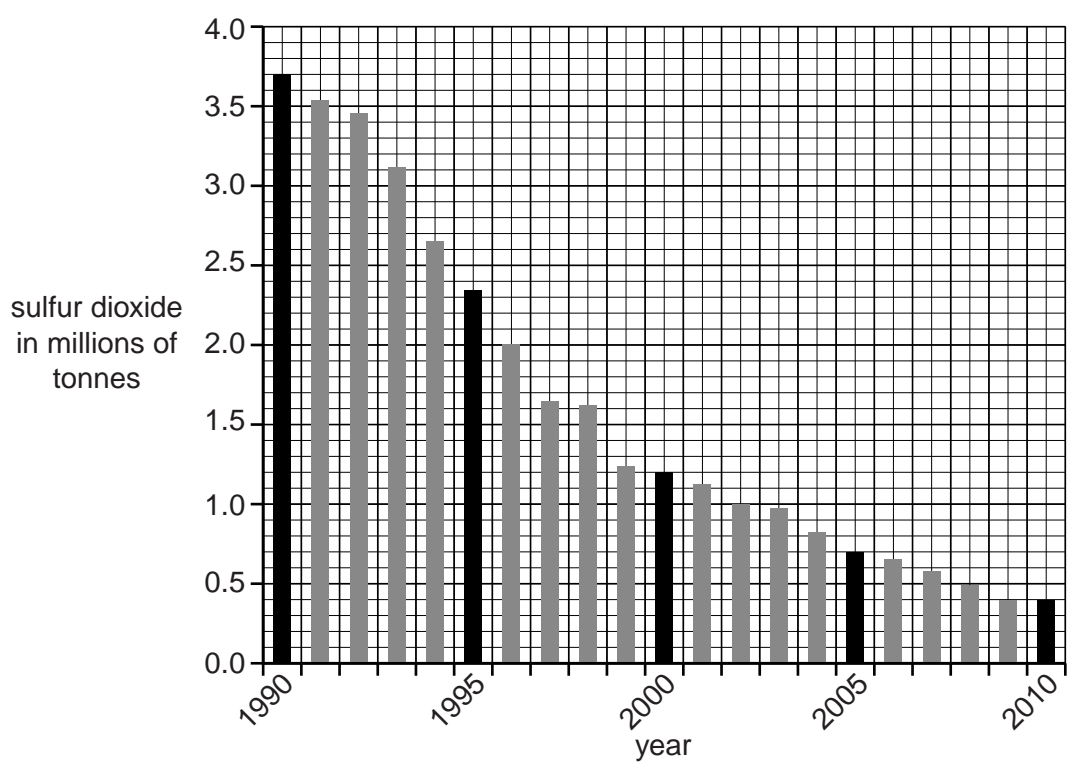
- The quality of written communication is assessed in questions marked with a pencil (✎).
- The Periodic Table is printed on the back page.
- The number of marks is given in brackets [ ] at the end of each question or part question.
- The total number of marks for this paper is **60**.
- This document consists of **24** pages. Any blank pages are indicated.

2

Answer **all** the questions.

1 Sulfur dioxide is an air pollutant.

The graph shows the amount of sulfur dioxide put into the air from 1990 to 2010 in the UK.



(a) (i) What was the amount of sulfur dioxide put into the air in 2010 as a fraction of that in 2000?

answer = ..... [1]

(ii) The Government says that the amount of sulfur dioxide put into the air falls to a third every 10 years since 1990.

Is this true? Justify your answer.

.....

.....

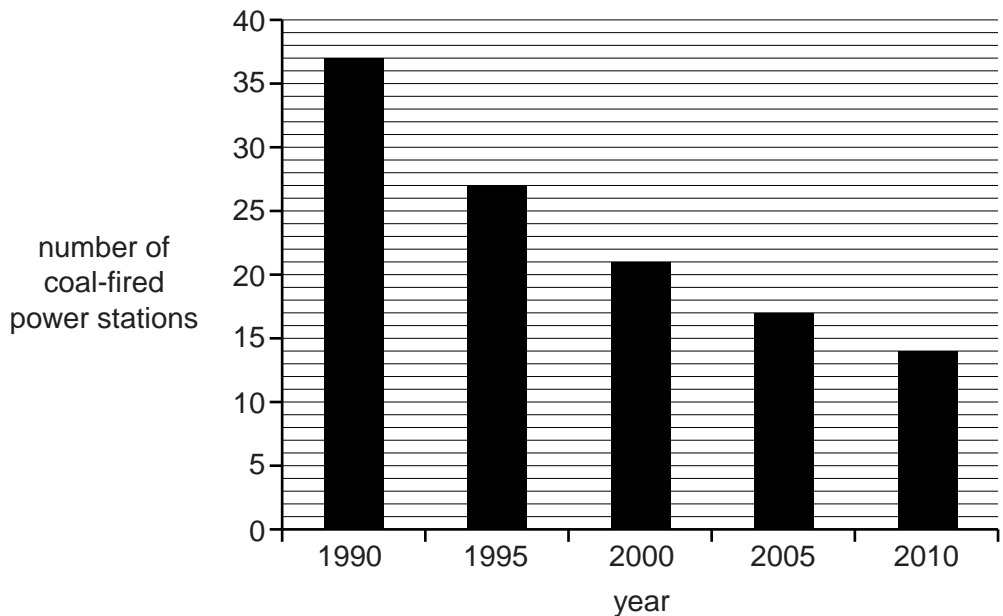
.....

..... [2]

3

Most sulfur dioxide in the air comes from power stations.

This graph shows the number of coal-fired power stations in the UK between 1990 and 2010.



(b) Look at the **two** graphs.

What is the correlation shown by the data?

.....

.....

.....

..... [2]

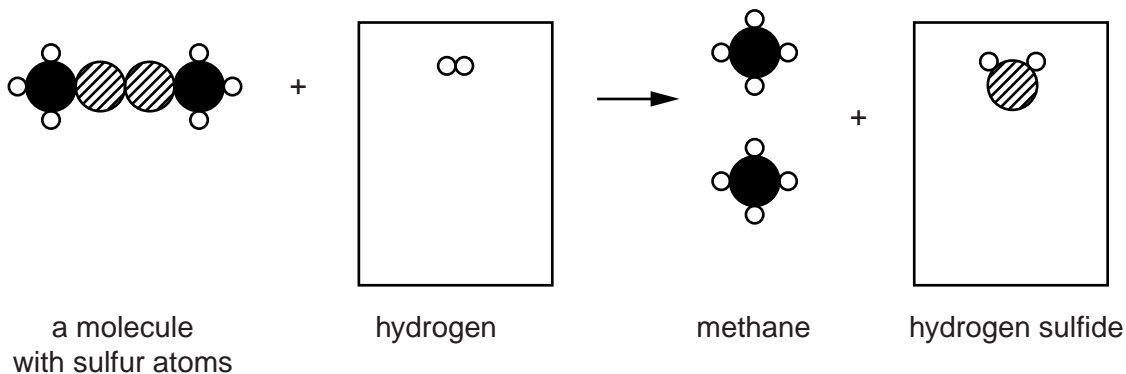
(c) Power stations can also burn natural gas.

The amount of sulfur dioxide put into the air is lowered by removing sulfur from natural gas.

Sulfur is removed from molecules in natural gas by reacting them with hydrogen.

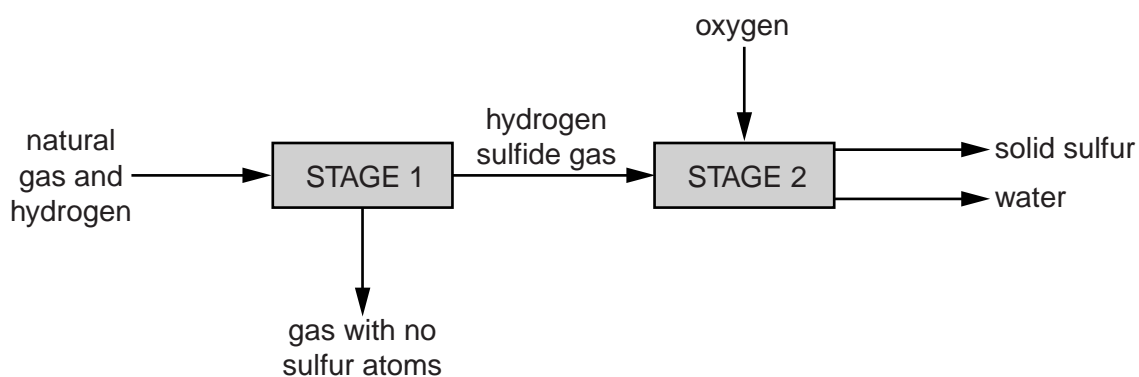
The diagram shows this type of reaction.

(i) Complete this diagram to show the correct number of hydrogen and hydrogen sulfide molecules.



[2]

(ii) The flow scheme shows the process of removing sulfur from natural gas.



Stage 2 converts hydrogen sulfide into water and sulfur.

Suggest why stage 2 is necessary.

.....

.....

.....

..... [2]

[Total: 9]



6

(b) Biofuels may be used to run buses instead of fuels from crude oil.

Suggest a reason for using biofuel. Explain your answer.

.....

.....

.....

..... [2]

(c) A fuel is burned to make **only** carbon dioxide and water.

What does this tell you about the elements in the fuel and the conditions in which the fuel burns?

.....

.....

.....

..... [2]

(d) Which term describes the changes to the elements in the fuel as it burns?

Put a **ring** around the correct answer.

**carbonised**      **electrolysed**      **neutralised**      **oxidised**      **reduced**      [1]

[Total: 11]

3 A supermarket uses plastic carrier bags.



The handles of some of a **new** set of bags break when customers carry their shopping away.

The supermarket complains to the company that makes the bags.

The company tests 5 of the new set of bags.

They find the mass that will break each bag.

Here are their measurements.

<b>Bag number</b>	<b>1</b>	<b>2</b>	<b>3</b>	<b>4</b>	<b>5</b>
<b>Mass to break handle in kg</b>	6.5	8.2	6.1	10.2	9.0

(a) (i) Use **all** their measurements to find the mean value of the mass to break the handles.

Show your working.

answer = ..... kg [2]

(ii) The company compare the data for the old and new sets of bags.

	<b>Old set of bags</b>	<b>New set of bags</b>
<b>Mean value of mass to break the handles in kg</b>	14.5	
<b>Range of values of mass to break the handles in kg</b>	10.0 – 18.5	

Complete the table with your answer to **(a)(i)** and the range of values.

Has the strength of the bags changed?

Use the data to explain your conclusion.

.....

.....

.....

..... [2]

8

(b) Carrier bags are made of polyethene.

There are two types of polyethene.

High density polyethene (HDPE) is stronger than low density polyethene (LDPE).

HDPE is more crystalline than LDPE

How do the **arrangements of molecules** in HDPE and LDPE differ?

Suggest a reason why this makes HDPE stronger.

You may use diagrams to help you answer.

.....

.....

.....

..... [2]

[Total: 6]



**BLANK PAGE**

**Question 4 begins on page 10**

**PLEASE DO NOT WRITE ON THIS PAGE**

## 10

- 4 An oil company refines crude oil into different fractions.

This table shows the volume of each fraction made from a barrel of crude oil in litres.

It also shows the range of the number of carbon atoms in the molecules in each fraction.

	<b>fraction</b>	<b>fraction in one barrel of crude oil in litres</b>	<b>number of carbon atoms in molecules</b>
top of barrel	liquefied fuel gas	3	1 – 4
	petrol	40	5 – 10
	making chemicals	8	6 – 12
	fuel oil	88	13 – 25
	lubricants	8	20 – 22
bottom of barrel	bitumen for roads	13	25+

- (a) Show that more than 80% of the crude oil is used as fuel.

[2]



12

**BLANK PAGE**

**PLEASE DO NOT WRITE ON THIS PAGE**

5 This is a question about nanotechnology.

(a) Nanotechnology is the use and control of particles that are very small.

What is the range of sizes of nanoparticles?

Put a tick (✓) in the box next to the correct answer.

0.1 to 1 nm

1 to 100 nm

100 to 200 nm

200 to 1000 nm

[1]

(b) Some calculators have photocells to absorb light to charge the battery.

Photocells contain gold which absorbs light on its surface.

Explain why photocells contain gold nanoparticles rather than a solid piece of gold.



photocell

.....

.....

.....

..... [2]

(c) Some scientists are concerned about the possible effects of nanoparticles on humans.

Give **two** reasons why scientists are concerned.

.....

.....

.....

..... [2]

[Total: 5]

6 Some people are talking about the Government's advice on eating salt.

This is what they say.

**Dr Abbott**  
Salt has been used as a preservative for centuries. My company makes foods that use salt in this way. Sickness from food poisoning is much more common than high blood pressure.



**Mr Collins**  
Government scientists set a target to eat less than 6 g per day of salt. I eat 0 g per day because I never put salt on my food.



**Miss Brown**  
A great deal of evidence that eating less salt lowers blood pressure has been published in scientific journals.



**Mrs Evans**  
I look on packet labels and try to keep my salt intake as low as possible.



**Professor Derry**  
I went to a conference where scientists showed evidence that a low sodium diet could be harmful to some people.



(a) (i) Who is talking about information that has been **peer reviewed**?

Put ticks (✓) in the boxes next to the **two** correct answers.

- |                 |                          |
|-----------------|--------------------------|
| Dr Abbott       | <input type="checkbox"/> |
| Miss Brown      | <input type="checkbox"/> |
| Mr Collins      | <input type="checkbox"/> |
| Professor Derry | <input type="checkbox"/> |
| Mrs Evans       | <input type="checkbox"/> |

[1]

15

- (ii) Who is saying that a benefit of salt in food, outweighs a risk from eating too much salt?

Put a tick (✓) in the box next to the correct answer.

Dr Abbott	<input type="checkbox"/>
Miss Brown	<input type="checkbox"/>
Mr Collins	<input type="checkbox"/>
Professor Derry	<input type="checkbox"/>
Mrs Evans	<input type="checkbox"/>

[1]

- (iii) Which person is wrong about their salt intake?

Put a tick (✓) in the box next to the correct answer.

Dr Abbott	<input type="checkbox"/>
Miss Brown	<input type="checkbox"/>
Mr Collins	<input type="checkbox"/>
Professor Derry	<input type="checkbox"/>
Mrs Evans	<input type="checkbox"/>

[1]

- (iv) Companies add salt to foods to preserve them and for one other reason.

What is that other reason?

..... [1]

- (b) (i) People with high blood pressure can use potassium chloride as a substitute for salt (sodium chloride).

Rocks containing potassium chloride are found deep underground and mined in the same ways as those containing sodium chloride.

Companies make potassium chloride using solution mining.

Suggest reasons why they might use solution mining rather than digging rocks out of the ground.

.....  
.....  
.....  
..... [2]

- (ii) The electrolysis of potassium chloride solution is similar to the electrolysis of sodium chloride.

What three products are made when potassium chloride solution is electrolysed?

.....  
.....  
..... [2]

[Total: 8]



17

**BLANK PAGE**

**Question 7 begins on page 18**

**PLEASE DO NOT WRITE ON THIS PAGE**

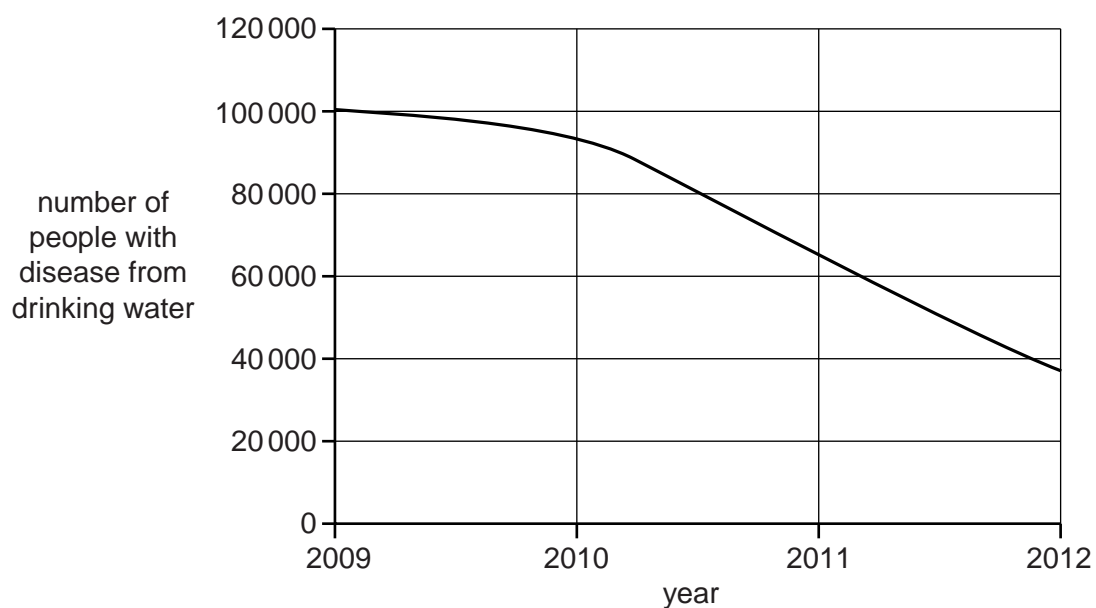
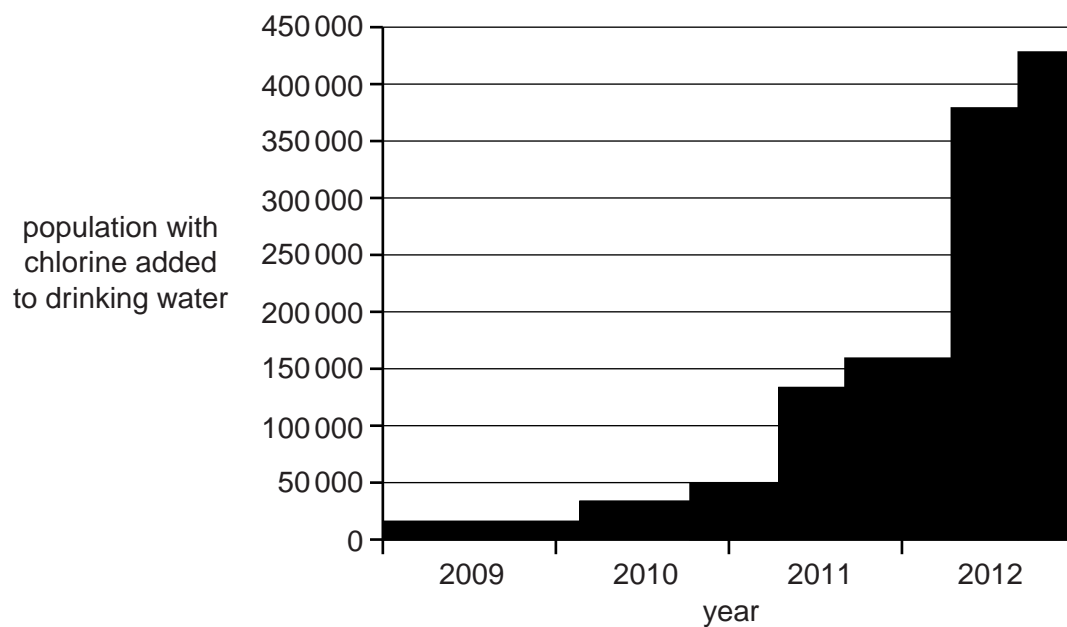
## 18

7 In remote parts of a developing country, the drinking water causes diseases that kill people.

In one area people started to add chlorine to drinking water from 2009.

A charity raised the money to pay for this.

Look at the graphs.





20

8 Geologists understand the history of the Earth's surface by looking at rocks.

(a) Features in these rocks tell us things about their origin.

Draw a straight line from each **feature** to **what it tells us**.

feature	what it tells us
rock salt	formed in fast flowing rivers
fossils of plants and animals	formed in deserts
rounded grains of sand in sandstone	the age of the rock
sharp grains of sand in sandstone	formed when shallow seas evaporated

[3]

(b) Salt, limestone and coal were made in different climatic conditions.

All three of these rock types are found in north west England.

Which two statements, when put together, explain how this happened?

Put ticks (✓) in the boxes next to the **two** correct answers.

The atmosphere of the early Earth was mainly nitrogen.

Ocean currents cause land areas to move.

When continents moved their climate changed.

The weather in the UK changes every day.

Earthquakes occur on the edges of tectonic plates as they move.

Tectonic plates move across the Earth.

[2]

(c) Studies of the magnetic properties of rocks tell scientists about the rocks.

What do they measure and what does this tell them about the rocks?

.....

.....

.....

..... [2]

[Total: 7]

**END OF QUESTION PAPER**

22

**BLANK PAGE**

**PLEASE DO NOT WRITE ON THIS PAGE**

**PLEASE DO NOT WRITE ON THIS PAGE**



**Copyright Information**

OCR is committed to seeking permission to reproduce all third-party content that it uses in its assessment materials. OCR has attempted to identify and contact all copyright holders whose work is used in this paper. To avoid the issue of disclosure of answer-related information to candidates, all copyright acknowledgements are reproduced in the OCR Copyright Acknowledgements Booklet. This is produced for each series of examinations and is freely available to download from our public website ([www.ocr.org.uk](http://www.ocr.org.uk)) after the live examination series.

If OCR has unwittingly failed to correctly acknowledge or clear any third-party content in this assessment material, OCR will be happy to correct its mistake at the earliest possible opportunity.

For queries or further information please contact the Copyright Team, First Floor, 9 Hills Road, Cambridge CB2 1GE.

OCR is part of the Cambridge Assessment Group; Cambridge Assessment is the brand name of University of Cambridge Local Examinations Syndicate (UCLES), which is itself a department of the University of Cambridge.

# The Periodic Table of the Elements

	1	2	3	4	5	6	7	0										
	<div style="border: 1px solid black; padding: 5px; width: fit-content; margin: auto;">                     1 H hydrogen 1                 </div>							<div style="border: 1px solid black; padding: 5px; width: fit-content; margin: auto;">                     4 He helium 2                 </div>										
	<div style="border: 1px solid black; padding: 5px; width: fit-content; margin: auto;">                     relative atomic mass atomic symbol name atomic (proton) number                 </div>																	
	7 Li lithium 3	9 Be beryllium 4	11 Na sodium 11	12 Mg magnesium 12	13 Al aluminium 13	14 Si silicon 14	15 P phosphorus 15	16 S sulfur 16	17 Cl chlorine 17	18 Ar argon 18								
	19 K potassium 19	20 Ca calcium 20	21 Sc scandium 21	22 Ti titanium 22	23 V vanadium 23	24 Cr chromium 24	25 Mn manganese 25	26 Fe iron 26	27 Co cobalt 27	28 Ni nickel 28	29 Cu copper 29	30 Zn zinc 30	31 Ga gallium 31	32 Ge germanium 32	33 As arsenic 33	34 Se selenium 34	35 Br bromine 35	36 Kr krypton 36
	37 Rb rubidium 37	38 Sr strontium 38	39 Y yttrium 39	40 Zr zirconium 40	41 Nb niobium 41	42 Mo molybdenum 42	43 Tc technetium [98]	44 Ru ruthenium 44	45 Rh rhodium 45	46 Pd palladium 46	47 Ag silver 47	48 Cd cadmium 48	49 In indium 49	50 Sn tin 50	51 Sb antimony 51	52 Te tellurium 52	53 I iodine 53	54 Xe xenon 54
	55 Cs caesium 55	56 Ba barium 56	57 La* lanthanum 57	72 Hf hafnium 72	73 Ta tantalum 73	74 W tungsten 74	75 Re rhenium 75	76 Os osmium 76	77 Ir iridium 77	78 Pt platinum 78	79 Au gold 79	80 Hg mercury 80	81 Tl thallium 81	82 Pb lead 82	83 Bi bismuth 83	84 Po polonium 84	85 At astatine 85	86 Rn radon 86
	[223] Fr francium 87	[226] Ra radium 88	[227] Ac* actinium 89	[261] Rf rutherfordium 104	[262] Db dubnium 105	[266] Sg seaborgium 106	[264] Bh bohrium 107	[277] Hs hassium 108	[268] Mt meitnerium 109	[271] Ds darmstadtium 110	[272] Rg roentgenium 111	Elements with atomic numbers 112-116 have been reported but not fully authenticated						

\* The lanthanoids (atomic numbers 58-71) and the actinoids (atomic numbers 90-103) have been omitted.

The relative atomic masses of copper and chlorine have not been rounded to the nearest whole number.