

Please check the examination details below before entering your candidate information

Candidate surname

Other names

Centre Number

Candidate Number

--	--	--	--	--

--	--	--	--

Pearson Edexcel International GCSE

Time 2 hours 30 minutes

Paper
reference

4MB1/02R

Mathematics B PAPER 2R



You must have: Ruler graduated in centimetres and millimetres, protractor, pair of compasses, pen, HB pencil, eraser, calculator. Tracing paper may be used.

Total Marks

Instructions

- Use **black** ink or ball-point pen.
- **Fill in the boxes** at the top of this page with your name, centre number and candidate number.
- Answer **all** questions.
- Answer the questions in the spaces provided
– *there may be more space than you need.*
- **Calculators may be used.**

Information

- The total mark for this paper is 100.
- The marks for **each** question are shown in brackets
– *use this as a guide as to how much time to spend on each question.*

Advice

- Read each question carefully before you start to answer it.
- Check your answers if you have time at the end.
- Without sufficient working, correct answers may be awarded no marks.

Turn over ►

P68819A

©2022 Pearson Education Ltd.

1/1/1/



Pearson

Question 1 continued

DO NOT WRITE IN THIS AREA

DO NOT WRITE IN THIS AREA

DO NOT WRITE IN THIS AREA

Area with horizontal dotted lines for writing.

(Total for Question 1 is 4 marks)



P 6 8 8 1 9 A 0 3 3 6

3 Peter has two boxes of bricks, box **A** and box **B**.
Each box contains only red bricks, green bricks and yellow bricks.

In box **A** there are 15 bricks of which

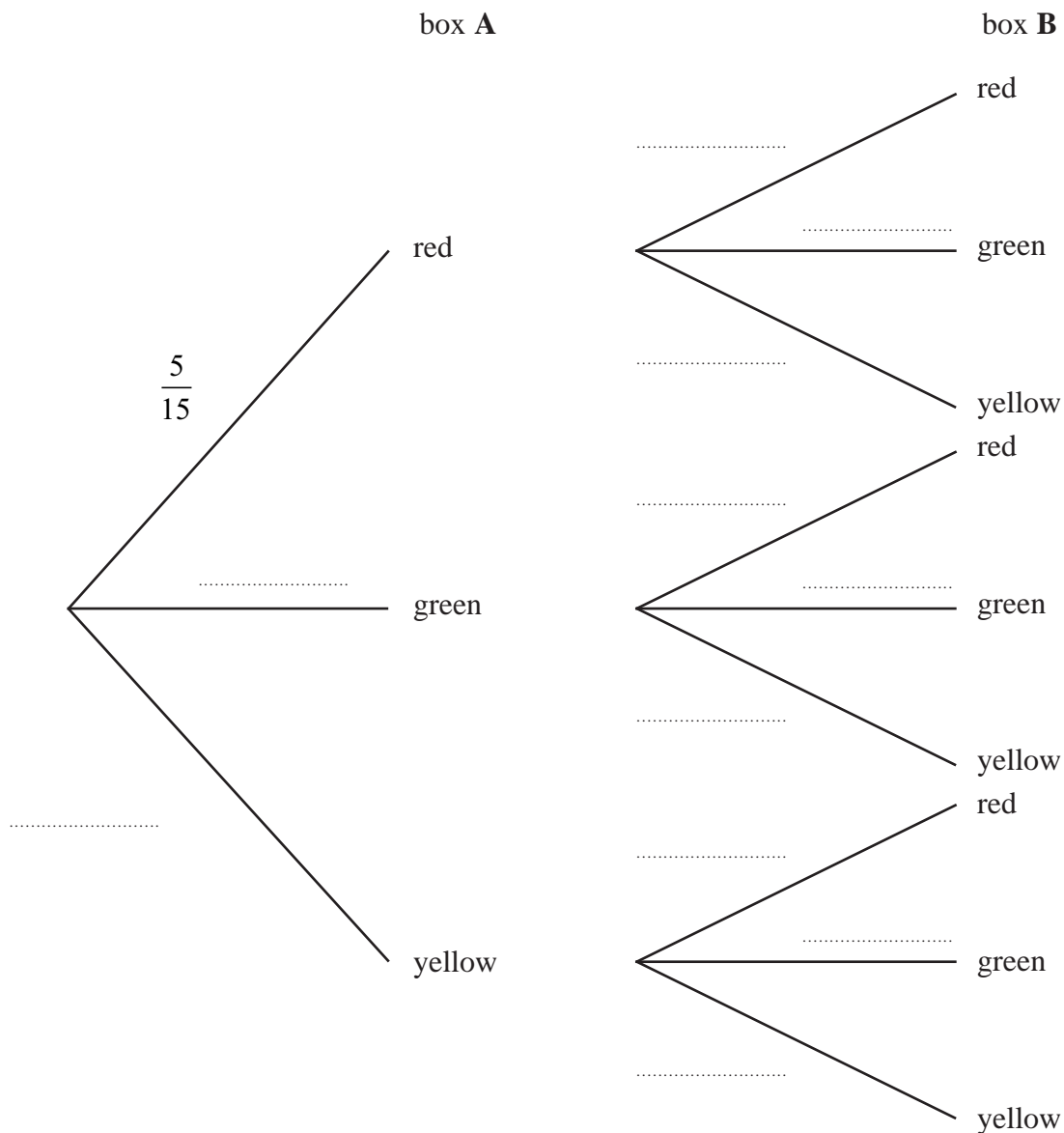
5 are red,
7 are green,
and 3 are yellow.

In box **B** there are 20 bricks of which

8 are red,
9 are green,
and 3 are yellow.

Ami is going to take a brick at random from box **A** and a brick at random from box **B**.
She is going to put these two bricks on a table.

(a) Complete the probability tree diagram.



(3)

DO NOT WRITE IN THIS AREA

DO NOT WRITE IN THIS AREA

DO NOT WRITE IN THIS AREA



Question 3 continued

Area with horizontal dotted lines for writing.

DO NOT WRITE IN THIS AREA

DO NOT WRITE IN THIS AREA

DO NOT WRITE IN THIS AREA



Question 3 continued

DO NOT WRITE IN THIS AREA

DO NOT WRITE IN THIS AREA

DO NOT WRITE IN THIS AREA

Area with horizontal dotted lines for writing.

(Total for Question 3 is 9 marks)



Question 4 continued

DO NOT WRITE IN THIS AREA

DO NOT WRITE IN THIS AREA

DO NOT WRITE IN THIS AREA

Area with horizontal dotted lines for writing.

(Total for Question 4 is 9 marks)



P 6 8 8 1 9 A 0 1 1 3 6

5 The graph of the straight line with equation $3x + y = 11$ is drawn on the grid opposite for $0 \leq x \leq 4$

(a) (i) On the grid, draw the graph of the straight line with equation $4x = 3 + 2y$ for $0 \leq x \leq 4$

(3)

(ii) Use your graphs to find estimates, to one decimal place, of the value of x and the value of y that satisfy the simultaneous equations

$$\begin{aligned} 3x + y &= 11 \\ 4x &= 3 + 2y \end{aligned}$$

(1)

(b) Solve the simultaneous equations

$$\begin{aligned} 4x + xy - x^2 &= -10 \\ 3y + x &= 7 \end{aligned}$$

Show clear algebraic working.

(6)

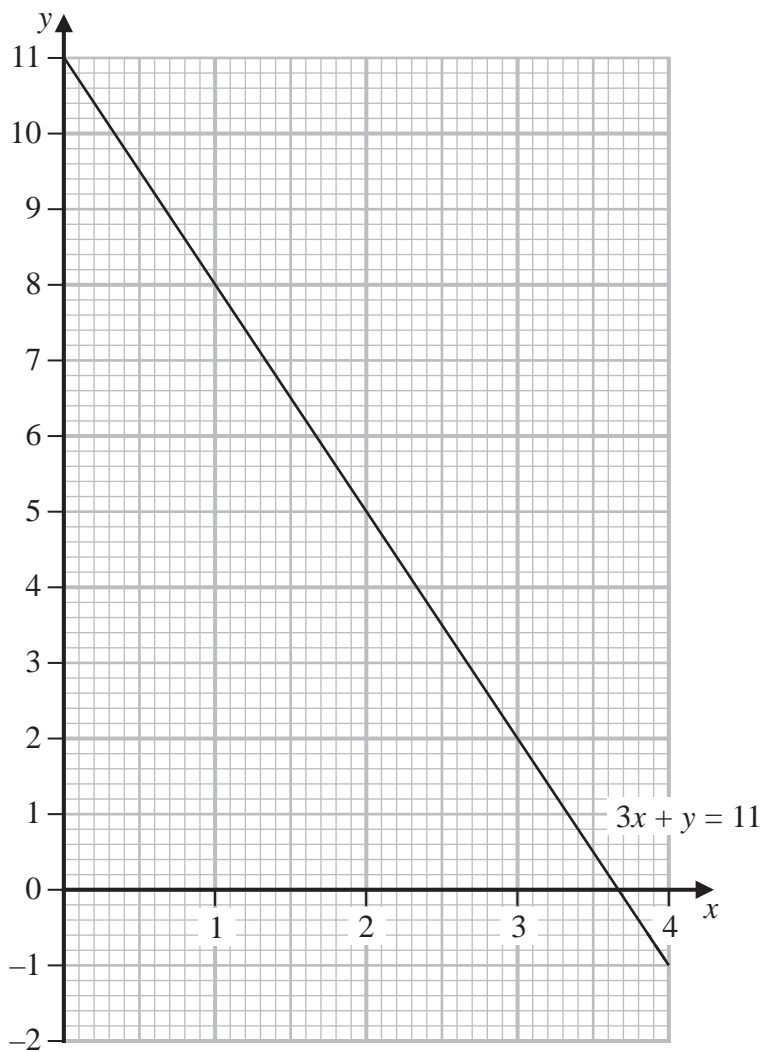
DO NOT WRITE IN THIS AREA

DO NOT WRITE IN THIS AREA

DO NOT WRITE IN THIS AREA



Question 5 continued



DO NOT WRITE IN THIS AREA

DO NOT WRITE IN THIS AREA

DO NOT WRITE IN THIS AREA

.....

.....

.....

.....

.....

.....

.....

.....

.....

.....

.....

.....

.....

.....

.....

.....

.....

.....

.....

.....

.....

.....

.....



Question 5 continued

Area with horizontal dotted lines for writing.

DO NOT WRITE IN THIS AREA

DO NOT WRITE IN THIS AREA

DO NOT WRITE IN THIS AREA



Question 5 continued

DO NOT WRITE IN THIS AREA

DO NOT WRITE IN THIS AREA

DO NOT WRITE IN THIS AREA

Area with horizontal dotted lines for writing.

(Total for Question 5 is 10 marks)



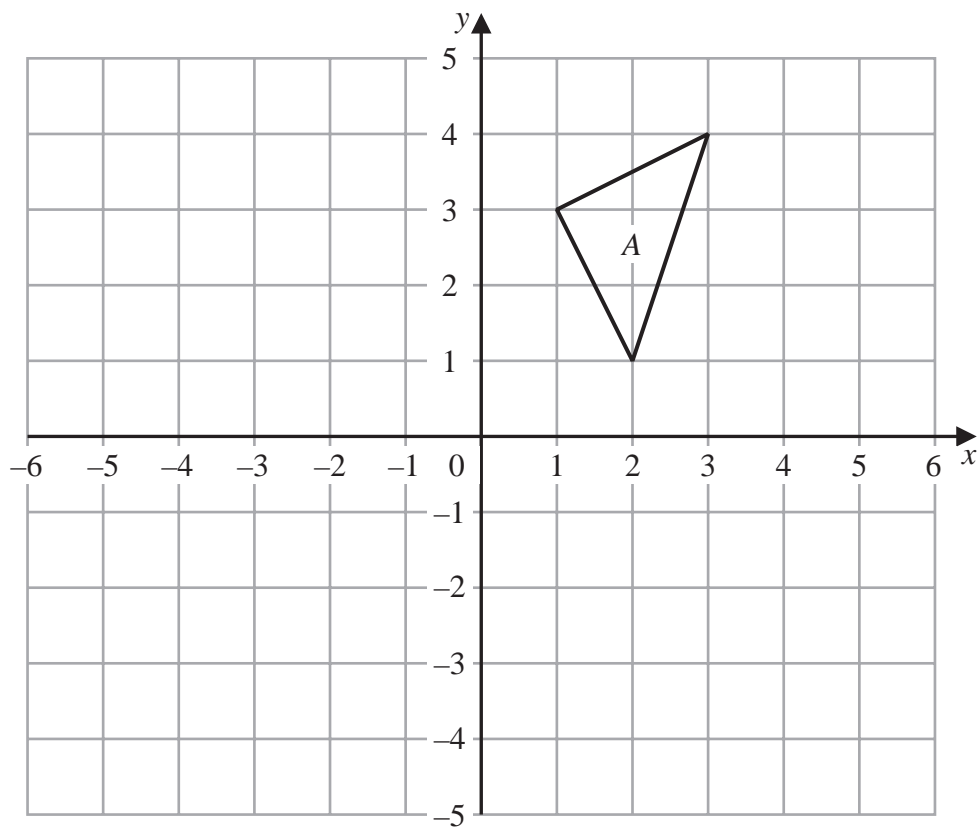
P 6 8 8 1 9 A 0 1 5 3 6

DO NOT WRITE IN THIS AREA

DO NOT WRITE IN THIS AREA

DO NOT WRITE IN THIS AREA

Question 6 continued



.....

.....

.....

.....

.....

.....

.....

.....

.....

.....

.....

.....

.....

.....

.....

.....

.....

.....

.....

.....

.....

.....

Turn over for a spare grid if you need to redraw your triangles.



Question 6 continued

Area with horizontal dotted lines for writing.

DO NOT WRITE IN THIS AREA

DO NOT WRITE IN THIS AREA

DO NOT WRITE IN THIS AREA



7 There are 480 people in an airport departure lounge.

30% of these people are catching a plane to Dubai.

(a) Show that 336 of these people are **not** catching a plane to Dubai.

(2)

The people in the airport lounge who are not catching a plane to Dubai are catching a plane to Sweden or a plane to Greece or a plane to Brazil.

Of these 336 people

the number catching a plane to Sweden is s
 the number catching a plane to Greece is g
 the number catching a plane to Brazil is b where

$$s : g : b = 6 : 7 : 8$$

(b) Calculate the value of s

(3)

Pablo went by plane from Canada to Brazil in February 2020 and in February 2021

In February 2020, the cost of his ticket was \$680

In February 2021, the cost of his ticket was \$730

(c) Calculate the percentage increase, to one decimal place, in the cost of the ticket from February 2020 to February 2021

(2)

Pablo bought a ticket to go by plane to Sweden in June 2021

The cost of his ticket was \$468

The cost of this ticket was 4% greater than the cost of his ticket the last time he went by plane to Sweden, which was in December 2020

(d) Calculate the cost of Pablo's ticket to Sweden in December 2020

(2)

At the end of his trip, Pablo had 320 Swedish krona left.

He changed the 320 Swedish krona into Canadian dollars.

Using the following exchange rates,

$$1 \text{ Canadian dollar} = 0.57 \text{ euros}$$

$$1 \text{ Swedish krona} = 0.094 \text{ euros}$$

(e) calculate the number, to 2 decimal places, of Canadian dollars that Pablo should have received.

(3)

DO NOT WRITE IN THIS AREA

DO NOT WRITE IN THIS AREA

DO NOT WRITE IN THIS AREA



Question 7 continued

DO NOT WRITE IN THIS AREA

DO NOT WRITE IN THIS AREA

DO NOT WRITE IN THIS AREA

Area with horizontal dotted lines for writing.



P 6 8 8 1 9 A 0 2 1 3 6

Question 7 continued

Area with horizontal dotted lines for writing.

DO NOT WRITE IN THIS AREA

DO NOT WRITE IN THIS AREA

DO NOT WRITE IN THIS AREA



Question 7 continued

DO NOT WRITE IN THIS AREA

DO NOT WRITE IN THIS AREA

DO NOT WRITE IN THIS AREA

Area with horizontal dotted lines for writing.

(Total for Question 7 is 12 marks)



P 6 8 8 1 9 A 0 2 3 3 6

8 The equation of a curve C is $y = x^2 - \frac{3}{2}x - 1$

The curve C has a minimum at the point A

(a) Show that the coordinates of A are $(0.75, -1.5625)$

(4)

(b) Complete the table of values for $y = x^2 - \frac{3}{2}x - 1$

x	-3	-2	-1	0	1	2	3	4
y	12.5						3.5	

(3)

The point A has been plotted on the grid opposite.

(c) On the grid opposite, draw the curve with equation $y = x^2 - \frac{3}{2}x - 1$ for values of x from -3 to 4

(3)

(d) Using your curve, find an estimate, to one decimal place, for the range of values of x for which $x^2 - \frac{3}{2}x - 1 \leq 3$

Show your working clearly.

(2)

(e) By drawing a suitable straight line on the grid, find estimates, to one decimal place, of the solutions of the equation $x^2 - \frac{7}{2}x = \frac{1}{2}$

Show your working clearly.

(3)

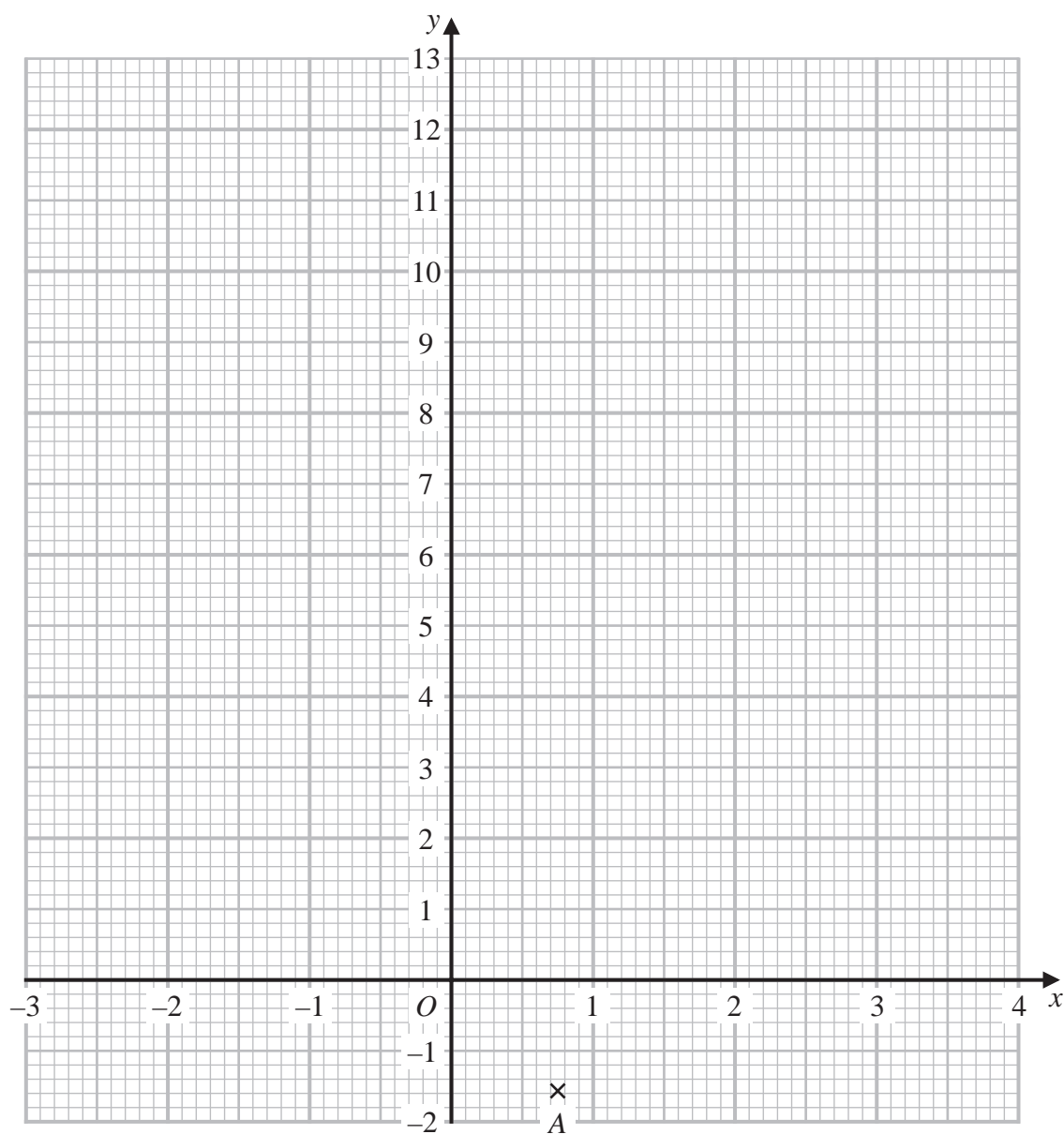
DO NOT WRITE IN THIS AREA

DO NOT WRITE IN THIS AREA

DO NOT WRITE IN THIS AREA



Question 8 continued



Turn over for a spare grid if you need to redraw your graph.

.....

.....

.....

.....

.....

.....

DO NOT WRITE IN THIS AREA

DO NOT WRITE IN THIS AREA

DO NOT WRITE IN THIS AREA



Question 8 continued

Area with horizontal dotted lines for writing.

DO NOT WRITE IN THIS AREA

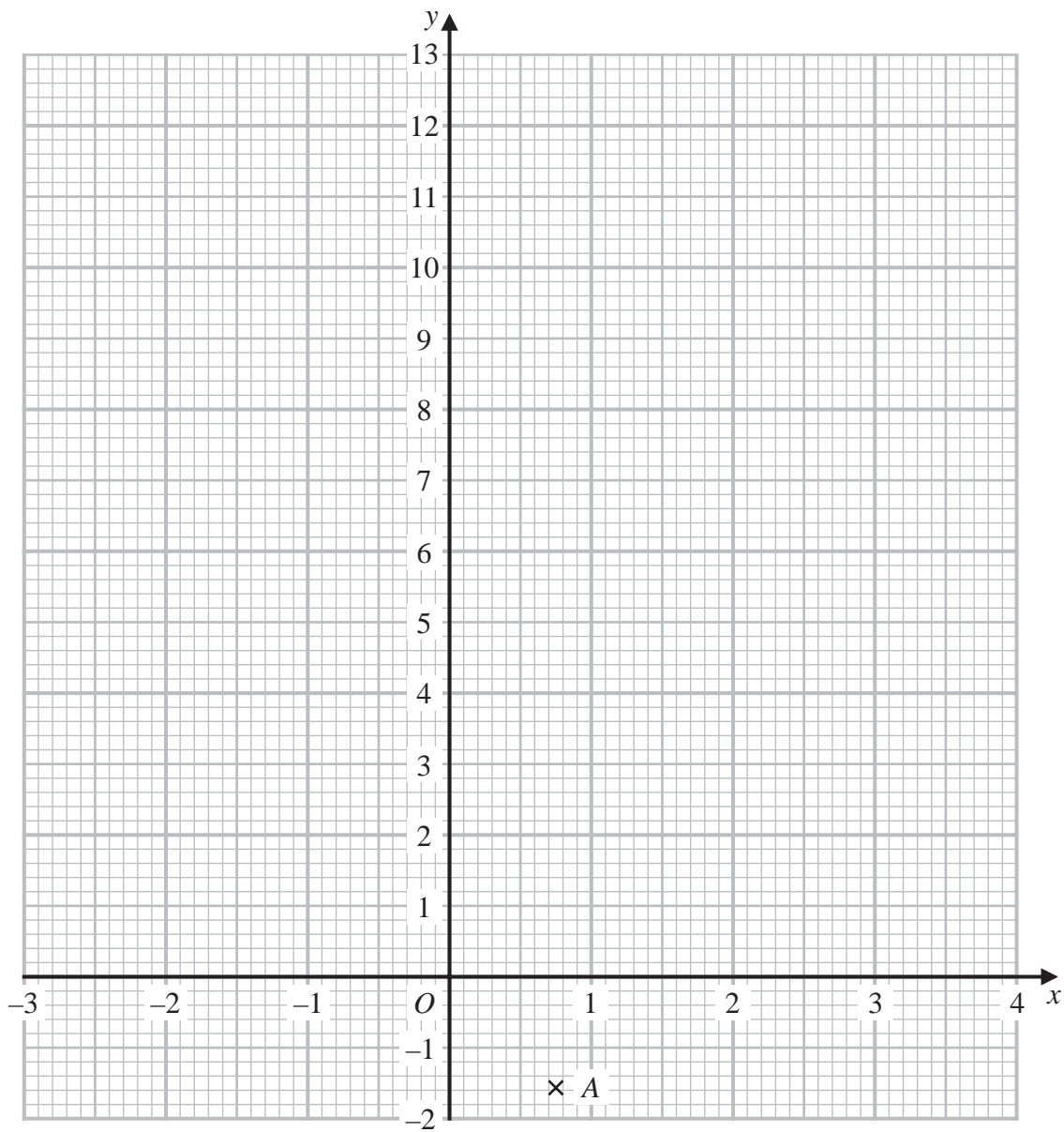
DO NOT WRITE IN THIS AREA

DO NOT WRITE IN THIS AREA



Question 8 continued

Only use this grid if you need to redraw your graph.



DO NOT WRITE IN THIS AREA

DO NOT WRITE IN THIS AREA

DO NOT WRITE IN THIS AREA

.....

.....

.....

.....

.....

(Total for Question 8 is 15 marks)



9

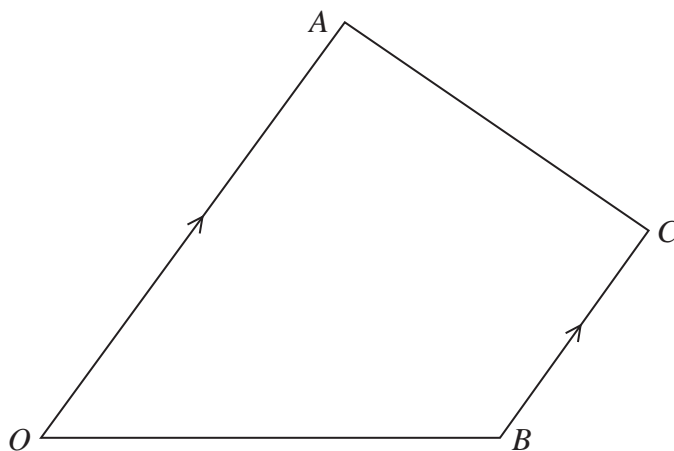


Figure 1

Diagram **NOT**
accurately drawn

Figure 1 shows a trapezium $OACB$ in which OA is parallel to BC and $OA : BC = 2 : 1$

The point P lies on AC such that $AP : PC = 3 : 1$

The point D is such that $\vec{OD} = \lambda \vec{OP}$ where $\lambda > 1$ and such that BCD is a straight line.

Given that $\vec{OA} = 6\mathbf{a}$ and that $\vec{OB} = 8\mathbf{b}$

use a vector method to find and simplify an expression, in terms of \mathbf{a} and \mathbf{b} only, for \vec{AD}
Show your working clearly.

(6)

DO NOT WRITE IN THIS AREA

DO NOT WRITE IN THIS AREA

DO NOT WRITE IN THIS AREA



Question 9 continued

DO NOT WRITE IN THIS AREA

DO NOT WRITE IN THIS AREA

DO NOT WRITE IN THIS AREA

Area with horizontal dotted lines for writing.

(Total for Question 9 is 6 marks)



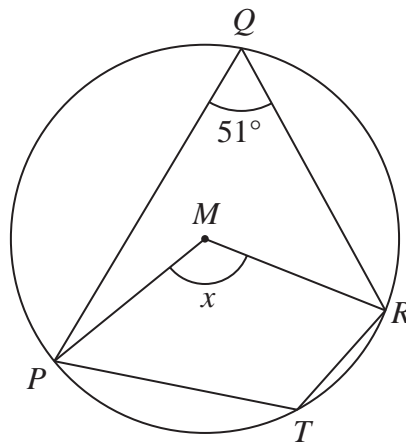


Diagram **NOT** accurately drawn

Figure 2

In Figure 2, P, Q, R and T are points on a circle with centre M such that $\angle PQR = 51^\circ$

- (a) Find the size, in degrees, of the angle marked x in Figure 2 (1)
- (b) Find the size, in degrees, of the obtuse angle PTR . (1)

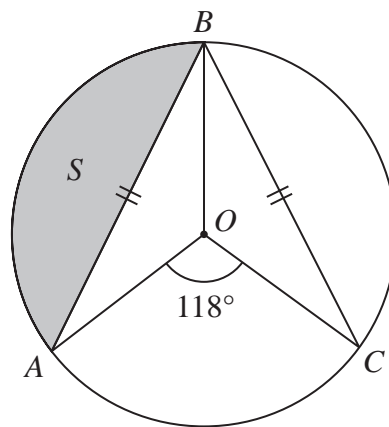


Diagram **NOT** accurately drawn

Figure 3

In Figure 3, A, B and C are points on a circle with centre O such that $\angle AOC = 118^\circ$ and $BA = BC$.

The area of the region S , shown shaded in Figure 3, is 70 cm^2

- (c) Calculate the total area, in cm^2 to 3 significant figures, of the unshaded region inside the circle. (5)

$$\left[\text{Area of triangle} = \frac{1}{2} ab \sin C \right]$$

DO NOT WRITE IN THIS AREA

DO NOT WRITE IN THIS AREA

DO NOT WRITE IN THIS AREA



Question 10 continued

DO NOT WRITE IN THIS AREA

DO NOT WRITE IN THIS AREA

DO NOT WRITE IN THIS AREA

Area with horizontal dotted lines for writing.

(Total for Question 10 is 7 marks)



P 6 8 8 1 9 A 0 3 1 3 6

Question 11 continued

DO NOT WRITE IN THIS AREA

DO NOT WRITE IN THIS AREA

DO NOT WRITE IN THIS AREA

Area with horizontal dotted lines for writing.

Question 11 continues on page 34



P 6 8 8 1 9 A 0 3 3 3 6

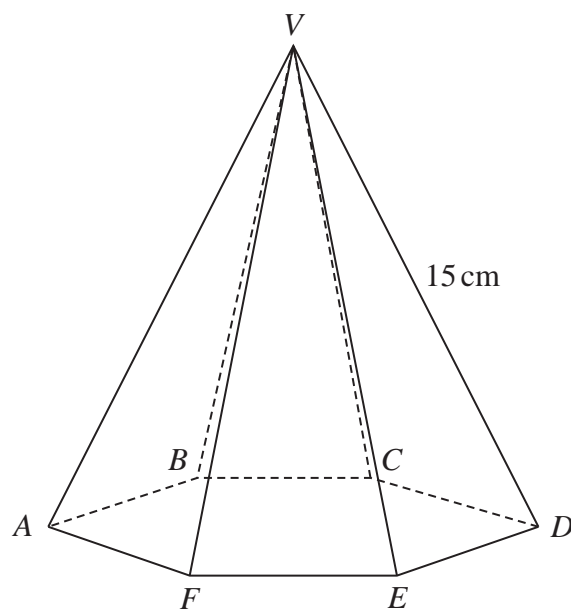


Diagram **NOT**
accurately drawn

Figure 5

Figure 5 shows a right pyramid.

The base $ABCDEF$ of the pyramid is a regular hexagon and the vertex V of the pyramid is such that

$$AV = BV = CV = DV = EV = FV = 15 \text{ cm and } \angle AVD = 40^\circ$$

(b) Calculate the volume, in cm^3 to 3 significant figures, of the pyramid.

(5)

$$\left[\begin{array}{l} \text{Area of triangle} = \frac{1}{2} ab \sin C \\ \text{Volume of pyramid} = \frac{1}{3} \times \text{base area} \times \text{height} \end{array} \right]$$



Question 11 continued

DO NOT WRITE IN THIS AREA

DO NOT WRITE IN THIS AREA

DO NOT WRITE IN THIS AREA

Area with horizontal dotted lines for writing.



P 6 8 8 1 9 A 0 3 5 3 6

