

Centre Number						Candidate Number				
Surname										
Other Names										
Candidate Signature										

For Examiner's Use	
Examiner's Initials	
Question	Mark
1	
2	
3	
4	
5	
6	
7	
TOTAL	



General Certificate of Secondary Education
Higher Tier
January 2013

Additional Science

Unit Chemistry C2

CH2HP

Chemistry

Unit Chemistry C2

H

Thursday 24 January 2013 9.00 am to 10.00 am

For this paper you must have:

- the Chemistry Data Sheet (enclosed).
- You may use a calculator.

Time allowed

- 1 hour

Instructions

- Use black ink or black ball-point pen.
- Fill in the boxes at the top of this page.
- Answer **all** questions.
- You must answer the questions in the spaces provided. Do not write outside the box around each page or on blank pages.
- Do all rough work in this book. Cross through any work you do not want to be marked.

Information

- The marks for questions are shown in brackets.
- The maximum mark for this paper is 60.
- You are expected to use a calculator where appropriate.
- You are reminded of the need for good English and clear presentation in your answers.
- Question 2(d) should be answered in continuous prose.
In this question you will be marked on your ability to:
 - use good English
 - organise information clearly
 - use specialist vocabulary where appropriate.

Advice

- In all calculations, show clearly how you work out your answer.



J A N 1 3 C H 2 H P 0 1

G/J89668 6/6/6/6

CH2HP

Answer **all** questions in the spaces provided.

- 1** A student investigated the rate of reaction between sodium thiosulfate and dilute hydrochloric acid.

The student placed a conical flask over a cross on a piece of paper.

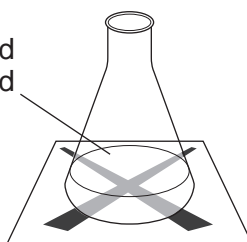
The student mixed the solutions in the flask.

The solution slowly went cloudy.

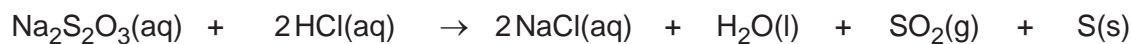
The student timed how long it took until the cross could not be seen.



Sodium thiosulfate and
dilute hydrochloric acid



The equation for the reaction is:



sodium thiosulfate + hydrochloric acid \rightarrow sodium chloride + water + sulfur dioxide + sulfur

- 1 (a)** Explain why the solution goes cloudy.

.....

.....

.....

.....

(2 marks)



- 1 (b) The student repeated the experiment with different concentrations of sodium thiosulfate.

Concentration of sodium thiosulfate in moles per dm ³	Time taken until the cross could not be seen in seconds			
	Trial 1	Trial 2	Trial 3	Mean
0.040	71	67	69	69
0.060	42	45	45	44
0.080	31	41	33	

- 1 (b) (i) Calculate the mean time for 0.080 moles per dm³ of sodium thiosulfate.

.....

.....

.....

Mean = seconds
(2 marks)

- 1 (b) (ii) Describe and explain, in terms of particles and collisions, the effect that increasing the concentration of sodium thiosulfate has on the rate of the reaction.

.....

.....

.....

.....

.....

.....

.....

(3 marks)

7

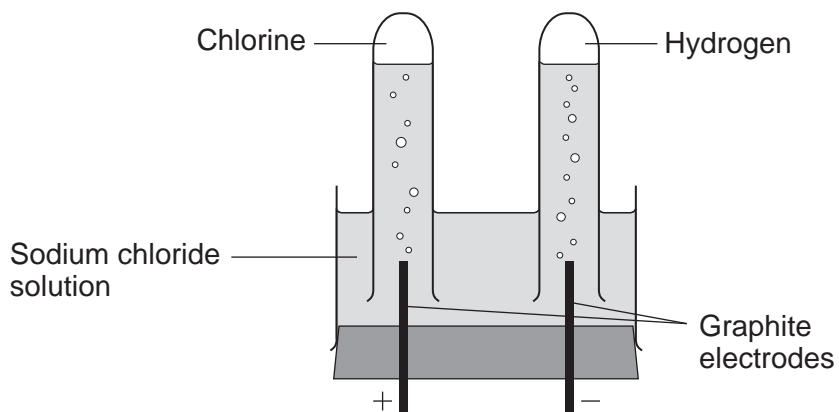
Turn over for the next question

Turn over ►



2 The electrolysis of sodium chloride solution is an industrial process.

The diagram shows the apparatus used in a school experiment.



2 (a) One of the products of the electrolysis of sodium chloride solution is hydrogen.

2 (a) (i) Why do hydrogen ions move to the negative electrode?

.....
.....
(1 mark)

2 (a) (ii) How does a hydrogen ion change into a hydrogen atom?

.....
.....
(1 mark)

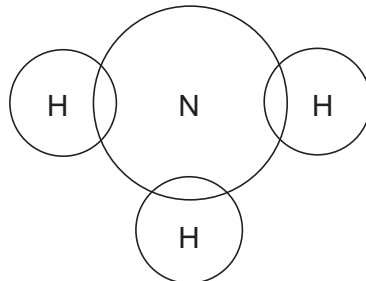


2 (b) Hydrogen is used to make ammonia (NH_3).

Complete the diagram to show the bonding in ammonia.

Use dots (•) and crosses (x) to show electrons.

Show only outer shell electrons.



(2 marks)

2 (c) The table shows the ions in sodium chloride solution.

Positive ions	Negative ions
hydrogen	chloride
sodium	hydroxide

In industry, some of the waste from the electrolysis of sodium chloride solution is alkaline and has to be neutralised.

2 (c) (i) Which ion makes the waste alkaline?

.....
(1 mark)

2 (c) (ii) This waste must be neutralised.

Write the ionic equation for the neutralisation reaction.

.....
(1 mark)

Question 2 continues on the next page

Turn over ►



2 (d) *In this question you will be assessed on using good English, organising information clearly and using specialist terms where appropriate.*

The electrolysis of sodium chloride solution also produces chlorine and sodium hydroxide.

In industry, the electrolysis of sodium chloride solution can be done in several types of electrolysis cell.

Some information about two different types of electrolysis cell is given below.

	Mercury cell	Membrane cell
Cost of construction	Expensive	Relatively cheap
Additional substances used	Mercury, which is recycled. Mercury is toxic so any traces of mercury must be removed from the waste.	Membrane, which is made of a polymer. The membrane must be replaced every 3 years.
Amount of electricity used for each tonne of chlorine produced in kWh	3400	2950
Quality of chlorine produced	Pure	Needs to be liquefied and distilled to make it pure.
Quality of sodium hydroxide solution produced	50% concentration. Steam is used to concentrate the sodium hydroxide solution produced.	30% concentration. Steam is used to concentrate the sodium hydroxide solution produced.

Use the information and your knowledge and understanding to compare the environmental and economic advantages and disadvantages of these **two** types of electrolysis cell.

.....

.....

.....

.....

.....

.....

.....

.....

.....

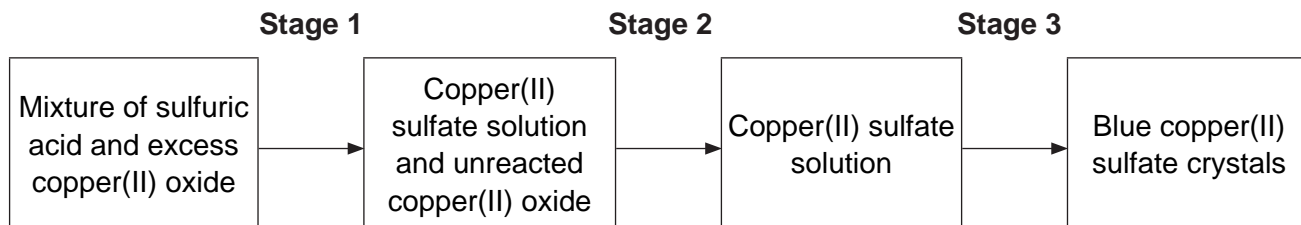
.....



3 This question is about compounds of copper.

3 (a) A student made some copper(II) sulfate crystals.

The flow diagram shows the stages of the preparation of copper(II) sulfate crystals.



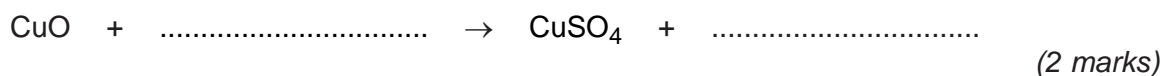
3 (a) (i) The reaction mixture is heated in **Stage 1**.

Suggest why.

.....

 (1 mark)

3 (a) (ii) Complete the equation for this reaction.



3 (a) (iii) How would the student remove the unreacted copper(II) oxide in **Stage 2**?

.....

 (1 mark)

3 (a) (iv) How would the student obtain copper(II) sulfate crystals from the copper(II) sulfate solution in **Stage 3**?

.....
 (1 mark)

3 (a) (v) The mass of crystals obtained was less than the student had calculated.

Suggest **one** reason why.

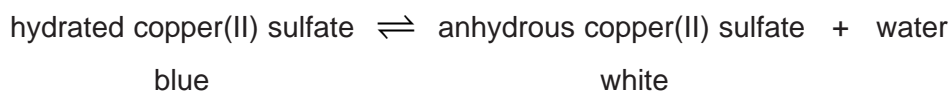
.....

 (1 mark)



3 (b) The student heated the blue copper(II) sulfate crystals.

The word equation for the reaction is shown below.



3 (b) (i) What does the symbol \rightleftharpoons mean ?

.....
(1 mark)

3 (b) (ii) 300 J of energy are taken in when some blue copper(II) sulfate crystals are heated.

What is the energy change when an excess of water is added to the anhydrous copper(II) sulfate produced?

.....
.....
(2 marks)

3 (c) A sample of copper nitride contains 3.81 g of copper and 0.28 g of nitrogen.

Calculate the empirical formula.

You **must** show all your working to get full marks.

Relative atomic masses (A_r): N = 14; Cu = 63.5.

.....
.....
.....
.....
.....
.....
.....

Empirical formula =
(4 marks)



4 Thermosoftening polymers can be used to make plastic bottles and food packaging.

4 (a) The reaction to produce polymers uses a catalyst.

Why does the catalyst work for a long time before it needs replacing?

.....
.....

(1 mark)

4 (b) Thermosoftening polymers would **not** be suitable for packaging very hot food.

Explain why in terms of their properties and structure.

.....
.....
.....
.....
.....

(2 marks)



4 (c) Compounds from food packaging must not contaminate the food.

Food can be tested for contamination using gas chromatography linked to mass spectroscopy (GC-MS).

4 (c) (i) Gas chromatography can separate substances in a mixture of compounds.

Describe how, as fully as you can.

.....
.....
.....
.....
.....
.....
.....
.....

(3 marks)

4 (c) (ii) What information does the molecular ion peak give about the molecule?

.....
.....

(1 mark)

7


Turn over for the next question

Turn over ►



5 Kelp is a seaweed.

Kelp can be used in foods and as a renewable energy source.



5 (a) Scientific experiments, on their own, **cannot** fully answer one of the following questions. Which one?

Tick (✓) **one** box.

Questions	Tick (✓)
How much carbon dioxide is produced when 100g of kelp is burned?	
Does kelp give out more heat energy than coal?	
Will kelp last longer than coal as an energy source?	
Which fuel, kelp or coal, produces the most ash when burned?	

(1 mark)

5 (b) Scientists cannot answer the question 'should people use kelp instead of coal as an energy source?'

Give **two** reasons why.

.....

.....

.....

.....

(2 marks)



5 (c) Sodium iodide can be produced from kelp.

5 (c) (i) How many electrons are in the outer shell of an iodine atom?

(1 mark)

5 (c) (ii) Sodium iodide contains sodium ions (Na^+) and iodide ions (I^-).

Describe, as fully as you can, what happens when sodium atoms react with iodine atoms to produce sodium iodide.

You may use a diagram in your answer

.....

.....

.....

.....

.....

.....

.....

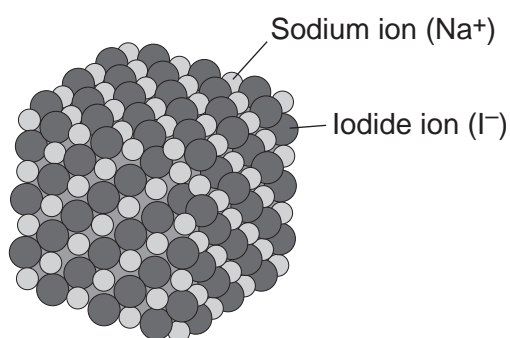
(3 marks)

Question 5 continues on the next page

Turn over ►



5 (c) (iii) The diagram shows the structure of sodium iodide.



Solid sodium iodide does not conduct electricity.

Why does sodium iodide solution conduct electricity?

.....
.....

(1 mark)

5 (c) (iv) When sodium iodide solution is electrolysed, iodine is formed at the positive electrode.

Complete and balance the half equation for the formation of iodine.



(1 mark)

5 (c) (v) What is formed at the negative electrode when sodium iodide solution is electrolysed?

Explain why.

.....
.....
.....
.....

(2 marks)

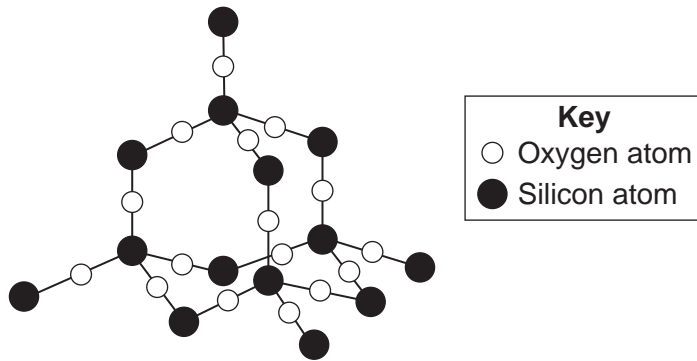


6 Silicon dioxide is used as a lining for furnaces.

Furnaces can be used to melt iron for recycling.



The diagram shows a small part of the structure of silicon dioxide.



Explain why silicon dioxide is a suitable material for lining furnaces.

.....

.....

.....

.....

.....

.....

.....

.....

.....


(4 marks)

4

Turn over ►



- 7 Etching is a way of making printed circuit boards for computers.



Printed circuit boards are made when copper sheets are etched using iron(III) chloride solution. Where the copper has been etched, only plastic remains.

- 7 (a) Copper is a good conductor of electricity.

Explain why.

.....

.....

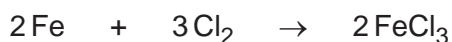
.....

.....

(2 marks)



7 (b) Iron(III) chloride can be produced by the reaction shown in the equation:



7 (b) (i) Calculate the maximum mass of iron(III) chloride (FeCl_3) that can be produced from 11.20 g of iron.

Relative atomic masses (A_r): Cl = 35.5; Fe = 56.

.....

.....

.....

.....

.....

Maximum mass of iron(III) chloride = g
(3 marks)

7 (b) (ii) The actual mass of iron(III) chloride (FeCl_3) produced was 24.3g.

Calculate the percentage yield.

(If you did not answer part (b)(i) assume that the maximum theoretical mass of iron(III) chloride (FeCl_3) is 28.0g. This is **not** the correct answer to part (b)(i).)

.....

.....

Percentage yield =%
(1 mark)

6

END OF QUESTIONS



There are no questions printed on this page

**DO NOT WRITE ON THIS PAGE
ANSWER IN THE SPACES PROVIDED**



There are no questions printed on this page

**DO NOT WRITE ON THIS PAGE
ANSWER IN THE SPACES PROVIDED**



There are no questions printed on this page

**DO NOT WRITE ON THIS PAGE
ANSWER IN THE SPACES PROVIDED**

ACKNOWLEDGEMENT OF COPYRIGHT-HOLDERS AND PUBLISHERS

- Question 5 Photograph © Jeffrey Rotman/Corbis
Question 6 Photograph © Thinkstock
Question 7 Photograph © Thinkstock

Copyright © 2012 AQA and its licensors. All rights reserved.

