



Cambridge Assessment International Education
Cambridge International General Certificate of Secondary Education

CHEMISTRY

0620/21

Paper 2 Multiple Choice (Extended)

October/November 2019

45 minutes

Additional Materials: Multiple Choice Answer Sheet
Soft clean eraser
Soft pencil (type B or HB is recommended)



READ THESE INSTRUCTIONS FIRST

Write in soft pencil.
Do not use staples, paper clips, glue or correction fluid.
Write your name, centre number and candidate number on the Answer Sheet in the spaces provided unless this has been done for you.
DO NOT WRITE IN ANY BARCODES.

There are **forty** questions on this paper. Answer **all** questions. For each question there are four possible answers **A, B, C** and **D**.
Choose the **one** you consider correct and record your choice in **soft pencil** on the separate Answer Sheet.

Read the instructions on the Answer Sheet very carefully.

Each correct answer will score one mark. A mark will not be deducted for a wrong answer.
Any rough working should be done in this booklet.
A copy of the Periodic Table is printed on page 16.
Electronic calculators may be used.

This syllabus is regulated for use in England, Wales and Northern Ireland as a Cambridge International Level 1/Level 2 Certificate.

This document consists of **13** printed pages and **3** blank pages.

- 1 Samples of four gases are released in a room at the same time.

The gases are carbon dioxide, CO_2 , hydrogen chloride, HCl , hydrogen sulfide, H_2S , and nitrogen dioxide, NO_2 .

Which gas diffuses fastest?

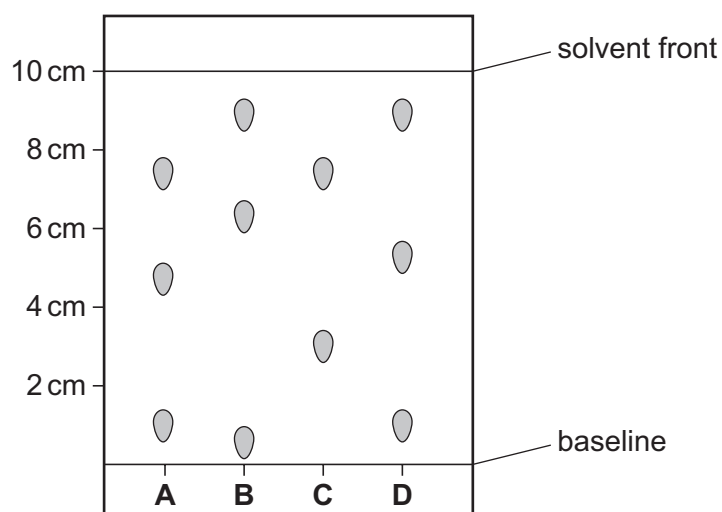
- A carbon dioxide
 - B hydrogen chloride
 - C hydrogen sulfide
 - D nitrogen dioxide
- 2 A student is asked to measure the time taken for 0.4 g of magnesium carbonate to react completely with 25.0 cm^3 of dilute hydrochloric acid.

Which pieces of apparatus does the student need?

- A balance, stop-clock, pipette
 - B balance, stop-clock, thermometer
 - C balance, pipette, thermometer
 - D stop-clock, pipette, thermometer
- 3 Four different food colourings are analysed using chromatography.

The results are shown on the chromatogram. The diagram is not drawn to scale.

Which food colouring contains a component with an R_f value of 0.3?



4 Which statement about an ionic compound is **not** correct?

- A It conducts electricity when dissolved in water.
- B It has a high melting point due to strong attractive forces between ions.
- C It has a regular lattice of oppositely charged ions in a 'sea of electrons'.
- D The ionic bonds are formed between metallic and non-metallic elements.

5 An isotope of chromium is represented by ${}_{24}^{52}\text{Cr}$.

Which statement about an atom of this isotope of chromium is correct?

- A It contains 24 electrons.
- B It contains 24 neutrons.
- C It contains 28 protons.
- D It contains 52 neutrons.

6 Element X has two isotopes, ${}_{6}^{12}\text{X}$ and ${}_{6}^{14}\text{X}$.

Which statement about these isotopes is correct?

- A They have different chemical properties because they have different numbers of neutrons.
- B They have the same chemical properties because they have the same number of outer shell electrons.
- C They have the same nucleon number because the sum of the number of protons and electrons is the same.
- D They have different positions in the Periodic Table because they have different numbers of neutrons.

7 How are the structures of diamond and silicon(IV) oxide similar?

- A Molecules of both diamond and silicon(IV) oxide are held together by weak attractive forces.
- B They both contain atoms arranged in planes held together by weak bonds.
- C They both contain ions that are free to move.
- D The carbon in diamond and the silicon in silicon(IV) oxide each have four covalent bonds.

8 Which statement describes the structure of copper?

- A It has a lattice of negative ions in a 'sea of electrons'.
- B It has a lattice of negative ions in a 'sea of protons'.
- C It has a lattice of positive ions in a 'sea of electrons'.
- D It has a lattice of positive ions in a 'sea of protons'.

- 9 Four fertilisers are each supplied in 100 kg bags.

Which fertiliser supplies the greatest mass of nitrogen per 100 kg bag?

- A ammonium nitrate, NH_4NO_3
 B ammonium phosphate, $(\text{NH}_4)_3\text{PO}_4$
 C ammonium sulfate, $(\text{NH}_4)_2\text{SO}_4$
 D urea, $\text{CO}(\text{NH}_2)_2$

- 10 Calcium carbonate reacts with dilute hydrochloric acid.

The equation for the reaction is shown.



1.00 g of calcium carbonate is added to 50.0 cm^3 of 0.0500 mol/dm^3 hydrochloric acid.

Which volume of carbon dioxide is made in this reaction?

- A 30 cm^3 B 60 cm^3 C 120 cm^3 D 240 cm^3
- 11 Which rows correctly show cathode and anode products from the electrolysis of the named electrolyte?

	electrolyte	cathode product	anode product
1	copper(II) sulfate solution using copper electrodes	copper	oxygen
2	molten lead(II) bromide	lead	bromine
3	dilute sodium bromide solution	hydrogen	oxygen
4	copper(II) sulfate solution using carbon electrodes	hydrogen	oxygen

- A 1 and 2 only B 1 and 4 only C 2 and 3 only D 3 and 4 only

- 12 What are the ionic half-equations for the electrode reactions during the electrolysis of concentrated aqueous sodium chloride?

	anode	cathode
A	$\text{Cl}_2 + 2\text{e}^- \rightarrow 2\text{Cl}^-$	$\text{H}_2 \rightarrow 2\text{H}^+ + 2\text{e}^-$
B	$2\text{Cl}^- \rightarrow \text{Cl}_2 + 2\text{e}^-$	$2\text{H}^+ + 2\text{e}^- \rightarrow \text{H}_2$
C	$\text{H}_2 \rightarrow 2\text{H}^+ + 2\text{e}^-$	$\text{Cl}_2 + 2\text{e}^- \rightarrow 2\text{Cl}^-$
D	$2\text{H}^+ + 2\text{e}^- \rightarrow \text{H}_2$	$2\text{Cl}^- \rightarrow \text{Cl}_2 + 2\text{e}^-$

13 Which statements about endothermic reactions are correct?

- 1 The energy of the products is greater than the energy of the reactants.
- 2 The energy of the reactants is greater than the energy of the products.
- 3 The temperature of the surroundings increases during the reaction.
- 4 The temperature of the surroundings decreases during the reaction.

A 1 and 3 only B 1 and 4 only C 2 and 3 only D 2 and 4 only

14 Which gases are used to generate electricity in a fuel cell?

- A carbon dioxide and oxygen
- B hydrogen and methane
- C hydrogen and oxygen
- D methane and carbon dioxide

15 Which is a chemical change?

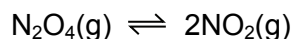
- A boiling water
- B cooking an egg
- C dissolving sugar
- D melting ice cubes

16 The rate of reaction between magnesium and dilute hydrochloric acid is increased by increasing the concentration of the acid.

How does this affect the reacting particles?

	collision rate of particles	proportion of particles with sufficient energy to react
A	increases	increases
B	increases	stays the same
C	stays the same	increases
D	stays the same	stays the same

- 17 Dinitrogen tetroxide, N_2O_4 , is converted into nitrogen dioxide, NO_2 , in a reversible reaction.




The forward reaction is endothermic.

Which conditions give the highest equilibrium yield of nitrogen dioxide?

	pressure /atmospheres	temperature
A	2	high
B	2	low
C	50	high
D	50	low

- 18 The equation for the reaction between iron(II) sulfate and bromine is shown.



Which row identifies the oxidising agent and the reducing agent?

	oxidising agent	reducing agent
A	Br_2	FeSO_4
B	FeSO_4	Br_2
C	FeBr_3	$\text{Fe}_2(\text{SO}_4)_3$
D	$\text{Fe}_2(\text{SO}_4)_3$	FeBr_3

- 19 Which statement about amphoteric oxides is correct?

- A** They are made by combining an acidic oxide with a basic oxide.
- B** They react with water to give a solution of pH 7.
- C** They react with both acids and bases.
- D** They do not react with acids or bases.

- 20 Carbonic acid is a weak acid formed when carbon dioxide dissolves in water.

What is the pH of the solution?

- A** 1 **B** 5 **C** 7 **D** 9

- 24 Which pair of elements reacts together most violently?
- A chlorine and lithium
 - B chlorine and potassium
 - C iodine and lithium
 - D iodine and potassium
- 25 Which pair of compounds shows that transition elements have variable oxidation states?
- A Cr_2O_3 and CrBr_3
 - B CuSO_4 and CuCl_2
 - C Fe_2O_3 and FeCl_2
 - D NiO and NiCl_2
- 26 Some properties of substance X are listed.
- It conducts electricity when molten.
 - It has a high melting point.
 - It burns in oxygen and the oxide dissolves in water to give a solution with pH 11.

What is X?

- A a covalent compound
 - B a macromolecule
 - C a metal
 - D an ionic compound
- 27 Which statement is correct?
- A Aluminium is used in the manufacture of aircraft because it has a high density.
 - B Copper is used for cooking utensils because it is a good conductor of heat.
 - C Mild steel is used for car bodies because it is resistant to corrosion.
 - D Stainless steel is used for cutlery because it is a conductor of electricity.

28 Iron rusts but aluminium does not easily corrode.

Which statement explains why aluminium does **not** easily corrode?

- A It is an alloy.
- B It is below iron in the reactivity series.
- C It is not a transition element.
- D Its surface is protected by an oxide layer.

29 Which statement about the extraction of aluminium is correct?

- A Aluminium is formed at the cathode during the electrolysis of aluminium oxide.
- B Hematite is mainly aluminium oxide.
- C Molten cryolite is used to raise the melting point of the aluminium oxide.
- D Oxygen gains electrons at the anode during the electrolysis of aluminium oxide.

30 River water contains soluble impurities, insoluble impurities and bacteria.

River water is made safe to drink by filtration and chlorination.

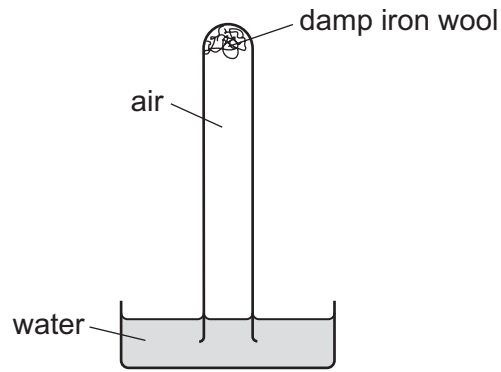
Which statement is correct?

- A Filtration removes bacteria and insoluble impurities, and chlorination removes soluble impurities.
- B Filtration removes insoluble impurities, and chlorination kills the bacteria.
- C Filtration removes soluble and insoluble impurities, and chlorination kills the bacteria.
- D Filtration removes soluble impurities and bacteria, and chlorination removes insoluble impurities.

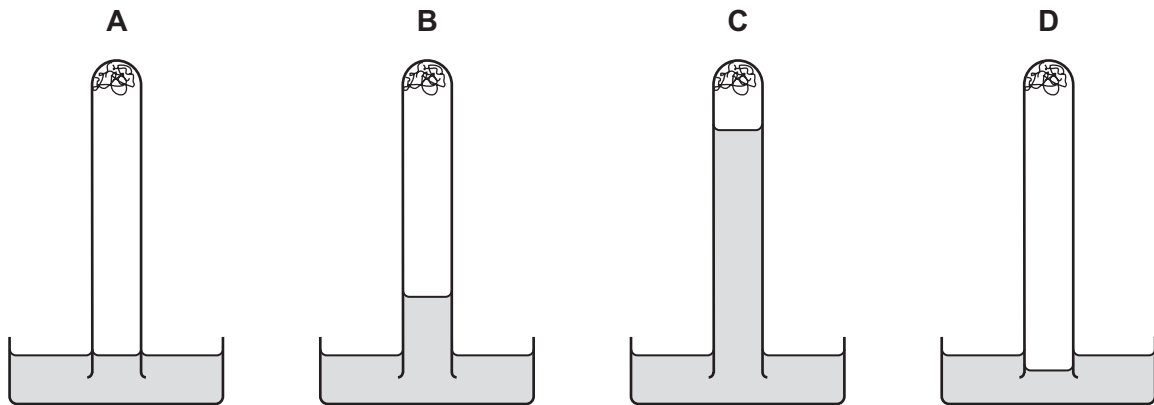
31 Which physical property is used to separate the nitrogen and oxygen from air?

- A boiling point
- B density
- C electrical conductivity
- D molecular mass

32 The apparatus shown is set up and left for a week.



Which diagram shows the level of the water at the end of the week?



33 Which statement about the carbon cycle is correct?

- A Carbon is absorbed from the atmosphere by combustion and released into it by respiration.
- B Carbon is absorbed from the atmosphere by photosynthesis and released into it by combustion.
- C Carbon is absorbed from the atmosphere by both respiration and combustion.
- D Carbon is released into the atmosphere by both photosynthesis and respiration.

34 Ammonium sulfate is used as a fertiliser.

It is made from ammonia and sulfuric acid.

Which words complete gaps 1, 2 and 3?

The1..... is made by the2..... process in which3..... is used as a catalyst.

	1	2	3
A	ammonia	Contact	iron
B	ammonia	Haber	vanadium(V) oxide
C	sulfuric acid	Contact	vanadium(V) oxide
D	sulfuric acid	Haber	iron

35 Which process is used to obtain lime from limestone?

- A** cracking
- B** fractional distillation
- C** neutralisation
- D** thermal decomposition

36 Petroleum is separated by fractional distillation.

Which statement about the fractions produced is correct?

- A** Bottled gas for heating and cooking is obtained from the naphtha fraction.
- B** Diesel oil is used as a fuel for jet aircraft.
- C** Substances used to make polishes are obtained from the lubricating fraction.
- D** The kerosene fraction contains many useful waxes.

37 Which products are obtained by the cracking of an alkane?

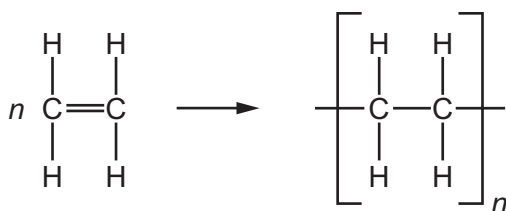
	alkene	hydrogen	water
A	✓	✓	✓
B	✓	✓	x
C	✓	x	✓
D	x	✓	✓

38 Ethanol is manufactured by the catalytic addition of steam to ethene and by fermentation.

Which statement describes an advantage of fermentation compared to the catalytic addition of steam to ethene?

- A Fermentation is a more rapid reaction.
- B Fermentation produces a purer product.
- C Fermentation uses a higher temperature.
- D Fermentation uses renewable resources.

39 The diagram shows the structure of a monomer and of the polymer made from it.



What are the monomer and polymer?

	monomer	polymer
A	ethane	poly(ethane)
B	ethane	poly(ethene)
C	ethene	poly(ethane)
D	ethene	poly(ethene)

40 Which polymers possess the same linkage?

- A nylon and protein
- B protein and starch
- C starch and nylon
- D nylon and *Terylene*

BLANK PAGE

Permission to reproduce items where third-party owned material protected by copyright is included has been sought and cleared where possible. Every reasonable effort has been made by the publisher (UCLES) to trace copyright holders, but if any items requiring clearance have unwittingly been included, the publisher will be pleased to make amends at the earliest possible opportunity.

To avoid the issue of disclosure of answer-related information to candidates, all copyright acknowledgements are reproduced online in the Cambridge Assessment International Education Copyright Acknowledgements Booklet. This is produced for each series of examinations and is freely available to download at www.cambridgeinternational.org after the live examination series.

Cambridge Assessment International Education is part of the Cambridge Assessment Group. Cambridge Assessment is the brand name of the University of Cambridge Local Examinations Syndicate (UCLES), which itself is a department of the University of Cambridge.

The Periodic Table of Elements

		Group																																																																																																																																																																																																																																																																																																																																																																																																										
I	II	III	IV	V	VI	VII	VIII																																																																																																																																																																																																																																																																																																																																																																																																					
3 Li lithium 7	4 Be beryllium 9	11 Na sodium 23	12 Mg magnesium 24	<table border="1"> <thead> <tr> <th colspan="2">Key</th> </tr> <tr> <th>atomic number</th> <th>atomic symbol name relative atomic mass</th> </tr> </thead> <tbody> <tr> <td>1</td> <td>H hydrogen 1</td> </tr> </tbody> </table>										Key		atomic number	atomic symbol name relative atomic mass	1	H hydrogen 1																																																																																																																																																																																																																																																																																																																																																																																									
Key																																																																																																																																																																																																																																																																																																																																																																																																												
atomic number	atomic symbol name relative atomic mass																																																																																																																																																																																																																																																																																																																																																																																																											
1	H hydrogen 1																																																																																																																																																																																																																																																																																																																																																																																																											
19 K potassium 39	20 Ca calcium 40	21 Sc scandium 45	22 Ti titanium 48	23 V vanadium 51	24 Cr chromium 52	25 Mn manganese 55	26 Fe iron 56	27 Co cobalt 59	28 Ni nickel 59	29 Cu copper 64	30 Zn zinc 65	31 Ga gallium 70	32 Ge germanium 73	33 As arsenic 75	34 Se selenium 79	35 Br bromine 80	36 Kr krypton 84																																																																																																																																																																																																																																																																																																																																																																																											
37 Rb rubidium 85	38 Sr strontium 88	39 Y yttrium 89	40 Zr zirconium 91	41 Nb niobium 93	42 Mo molybdenum 96	43 Tc technetium —	44 Ru ruthenium 101	45 Rh rhodium 103	46 Pd palladium 106	47 Ag silver 108	48 Cd cadmium 112	49 In indium 115	50 Sn tin 119	51 Sb antimony 122	52 Te tellurium 128	53 I iodine 127	54 Xe xenon 131																																																																																																																																																																																																																																																																																																																																																																																											
55 Cs caesium 133	56 Ba barium 137	57–71 lanthanoids	72 Hf hafnium 178	73 Ta tantalum 181	74 W tungsten 184	75 Re rhenium 186	76 Os osmium 190	77 Ir iridium 192	78 Pt platinum 195	79 Au gold 197	80 Hg mercury 201	81 Tl thallium 204	82 Pb lead 207	83 Bi bismuth 209	84 Po polonium —	85 At astatine —	86 Rn radon —																																																																																																																																																																																																																																																																																																																																																																																											
87 Fr francium —	88 Ra radium —	89–103 actinoids	104 Rf rutherfordium —	105 Db dubnium —	106 Sg seaborgium —	107 Bh bohrium —	108 Hs hassium —	109 Mt meitnerium —	110 Ds darmstadtium —	111 Rg roentgenium —	112 Cn copernicium —	114 Fl flerovium —	116 Lv livermorium —	118 Og oganeson —	119 Uue unbinilium —	120 Uub unbinilium —	121 Uut ununilium —	122 Uuq ununilium —	123 Uuq ununilium —	124 Uuq ununilium —	125 Uuq ununilium —	126 Uuq ununilium —	127 Uuq ununilium —	128 Uuq ununilium —	129 Uuq ununilium —	130 Uuq ununilium —	131 Uuq ununilium —	132 Uuq ununilium —	133 Uuq ununilium —	134 Uuq ununilium —	135 Uuq ununilium —	136 Uuq ununilium —	137 Uuq ununilium —	138 Uuq ununilium —	139 Uuq ununilium —	140 Uuq ununilium —	141 Uuq ununilium —	142 Uuq ununilium —	143 Uuq ununilium —	144 Uuq ununilium —	145 Uuq ununilium —	146 Uuq ununilium —	147 Uuq ununilium —	148 Uuq ununilium —	149 Uuq ununilium —	150 Uuq ununilium —	151 Uuq ununilium —	152 Uuq ununilium —	153 Uuq ununilium —	154 Uuq ununilium —	155 Uuq ununilium —	156 Uuq ununilium —	157 Uuq ununilium —	158 Uuq ununilium —	159 Uuq ununilium —	160 Uuq ununilium —	161 Uuq ununilium —	162 Uuq ununilium —	163 Uuq ununilium —	164 Uuq ununilium —	165 Uuq ununilium —	166 Uuq ununilium —	167 Uuq ununilium —	168 Uuq ununilium —	169 Uuq ununilium —	170 Uuq ununilium —	171 Uuq ununilium —	172 Uuq ununilium —	173 Uuq ununilium —	174 Uuq ununilium —	175 Uuq ununilium —	176 Uuq ununilium —	177 Uuq ununilium —	178 Uuq ununilium —	179 Uuq ununilium —	180 Uuq ununilium —	181 Uuq ununilium —	182 Uuq ununilium —	183 Uuq ununilium —	184 Uuq ununilium —	185 Uuq ununilium —	186 Uuq ununilium —	187 Uuq ununilium —	188 Uuq ununilium —	189 Uuq ununilium —	190 Uuq ununilium —	191 Uuq ununilium —	192 Uuq ununilium —	193 Uuq ununilium —	194 Uuq ununilium —	195 Uuq ununilium —	196 Uuq ununilium —	197 Uuq ununilium —	198 Uuq ununilium —	199 Uuq ununilium —	200 Uuq ununilium —	201 Uuq ununilium —	202 Uuq ununilium —	203 Uuq ununilium —	204 Uuq ununilium —	205 Uuq ununilium —	206 Uuq ununilium —	207 Uuq ununilium —	208 Uuq ununilium —	209 Uuq ununilium —	210 Uuq ununilium —	211 Uuq ununilium —	212 Uuq ununilium —	213 Uuq ununilium —	214 Uuq ununilium —	215 Uuq ununilium —	216 Uuq ununilium —	217 Uuq ununilium —	218 Uuq ununilium —	219 Uuq ununilium —	220 Uuq ununilium —	221 Uuq ununilium —	222 Uuq ununilium —	223 Uuq ununilium —	224 Uuq ununilium —	225 Uuq ununilium —	226 Uuq ununilium —	227 Uuq ununilium —	228 Uuq ununilium —	229 Uuq ununilium —	230 Uuq ununilium —	231 Uuq ununilium —	232 Uuq ununilium —	233 Uuq ununilium —	234 Uuq ununilium —	235 Uuq ununilium —	236 Uuq ununilium —	237 Uuq ununilium —	238 Uuq ununilium —	239 Uuq ununilium —	240 Uuq ununilium —	241 Uuq ununilium —	242 Uuq ununilium —	243 Uuq ununilium —	244 Uuq ununilium —	245 Uuq ununilium —	246 Uuq ununilium —	247 Uuq ununilium —	248 Uuq ununilium —	249 Uuq ununilium —	250 Uuq ununilium —	251 Uuq ununilium —	252 Uuq ununilium —	253 Uuq ununilium —	254 Uuq ununilium —	255 Uuq ununilium —	256 Uuq ununilium —	257 Uuq ununilium —	258 Uuq ununilium —	259 Uuq ununilium —	260 Uuq ununilium —	261 Uuq ununilium —	262 Uuq ununilium —	263 Uuq ununilium —	264 Uuq ununilium —	265 Uuq ununilium —	266 Uuq ununilium —	267 Uuq ununilium —	268 Uuq ununilium —	269 Uuq ununilium —	270 Uuq ununilium —	271 Uuq ununilium —	272 Uuq ununilium —	273 Uuq ununilium —	274 Uuq ununilium —	275 Uuq ununilium —	276 Uuq ununilium —	277 Uuq ununilium —	278 Uuq ununilium —	279 Uuq ununilium —	280 Uuq ununilium —	281 Uuq ununilium —	282 Uuq ununilium —	283 Uuq ununilium —	284 Uuq ununilium —	285 Uuq ununilium —	286 Uuq ununilium —	287 Uuq ununilium —	288 Uuq ununilium —	289 Uuq ununilium —	290 Uuq ununilium —	291 Uuq ununilium —	292 Uuq ununilium —	293 Uuq ununilium —	294 Uuq ununilium —	295 Uuq ununilium —	296 Uuq ununilium —	297 Uuq ununilium —	298 Uuq ununilium —	299 Uuq ununilium —	300 Uuq ununilium —	301 Uuq ununilium —	302 Uuq ununilium —	303 Uuq ununilium —	304 Uuq ununilium —	305 Uuq ununilium —	306 Uuq ununilium —	307 Uuq ununilium —	308 Uuq ununilium —	309 Uuq ununilium —	310 Uuq ununilium —	311 Uuq ununilium —	312 Uuq ununilium —	313 Uuq ununilium —	314 Uuq ununilium —	315 Uuq ununilium —	316 Uuq ununilium —	317 Uuq ununilium —	318 Uuq ununilium —	319 Uuq ununilium —	320 Uuq ununilium —	321 Uuq ununilium —	322 Uuq ununilium —	323 Uuq ununilium —	324 Uuq ununilium —	325 Uuq ununilium —	326 Uuq ununilium —	327 Uuq ununilium —	328 Uuq ununilium —	329 Uuq ununilium —	330 Uuq ununilium —	331 Uuq ununilium —	332 Uuq ununilium —	333 Uuq ununilium —	334 Uuq ununilium —	335 Uuq ununilium —	336 Uuq ununilium —	337 Uuq ununilium —	338 Uuq ununilium —	339 Uuq ununilium —	340 Uuq ununilium —	341 Uuq ununilium —	342 Uuq ununilium —	343 Uuq ununilium —	344 Uuq ununilium —	345 Uuq ununilium —	346 Uuq ununilium —	347 Uuq ununilium —	348 Uuq ununilium —	349 Uuq ununilium —	350 Uuq ununilium —	351 Uuq ununilium —	352 Uuq ununilium —	353 Uuq ununilium —	354 Uuq ununilium —	355 Uuq ununilium —	356 Uuq ununilium —	357 Uuq ununilium —	358 Uuq ununilium —	359 Uuq ununilium —	360 Uuq ununilium —	361 Uuq ununilium —	362 Uuq ununilium —	363 Uuq ununilium —	364 Uuq ununilium —	365 Uuq ununilium —	366 Uuq ununilium —	367 Uuq ununilium —	368 Uuq ununilium —	369 Uuq ununilium —	370 Uuq ununilium —	371 Uuq ununilium —	372 Uuq ununilium —	373 Uuq ununilium —	374 Uuq ununilium —	375 Uuq ununilium —	376 Uuq ununilium —	377 Uuq ununilium —	378 Uuq ununilium —	379 Uuq ununilium —	380 Uuq ununilium —	381 Uuq ununilium —	382 Uuq ununilium —	383 Uuq ununilium —	384 Uuq ununilium —	385 Uuq ununilium —	386 Uuq ununilium —	387 Uuq ununilium —	388 Uuq ununilium —	389 Uuq ununilium —	390 Uuq ununilium —	391 Uuq ununilium —	392 Uuq ununilium —	393 Uuq ununilium —	394 Uuq ununilium —	395 Uuq ununilium —	396 Uuq ununilium —	397 Uuq ununilium —	398 Uuq ununilium —	399 Uuq ununilium —	400 Uuq ununilium —	401 Uuq ununilium —	402 Uuq ununilium —	403 Uuq ununilium —	404 Uuq ununilium —	405 Uuq ununilium —	406 Uuq ununilium —	407 Uuq ununilium —	408 Uuq ununilium —	409 Uuq ununilium —	410 Uuq ununilium —	411 Uuq ununilium —	412 Uuq ununilium —	413 Uuq ununilium —	414 Uuq ununilium —	415 Uuq ununilium —	416 Uuq ununilium —	417 Uuq ununilium —	418 Uuq ununilium —	419 Uuq ununilium —	420 Uuq ununilium —	421 Uuq ununilium —	422 Uuq ununilium —	423 Uuq ununilium —	424 Uuq ununilium —	425 Uuq ununilium —	426 Uuq ununilium —	427 Uuq ununilium —	428 Uuq ununilium —	429 Uuq ununilium —	430 Uuq ununilium —	431 Uuq ununilium —	432 Uuq ununilium —	433 Uuq ununilium —	434 Uuq ununilium —	435 Uuq ununilium —	436 Uuq ununilium —	437 Uuq ununilium —	438 Uuq ununilium —	439 Uuq ununilium —	440 Uuq ununilium —	441 Uuq ununilium —	442 Uuq ununilium —	443 Uuq ununilium —	444 Uuq ununilium —	445 Uuq ununilium —	446 Uuq ununilium —	447 Uuq ununilium —	448 Uuq ununilium —	449 Uuq ununilium —	450 Uuq ununilium —	451 Uuq ununilium —	452 Uuq ununilium —	453 Uuq ununilium —	454 Uuq ununilium —	455 Uuq ununilium —	456 Uuq ununilium —	457 Uuq ununilium —	458 Uuq ununilium —	459 Uuq ununilium —	460 Uuq ununilium —	461 Uuq ununilium —	462 Uuq ununilium —	463 Uuq ununilium —	464 Uuq ununilium —	465 Uuq ununilium —	466 Uuq ununilium —	467 Uuq ununilium —	468 Uuq ununilium —	469 Uuq ununilium —	470 Uuq ununilium —	471 Uuq ununilium —	472 Uuq ununilium —	473 Uuq ununilium —	474 Uuq ununilium —	475 Uuq ununilium —	476 Uuq ununilium —	477 Uuq ununilium —	478 Uuq ununilium —	479 Uuq ununilium —	480 Uuq ununilium —	481 Uuq ununilium —	482 Uuq ununilium —	483 Uuq ununilium —	484 Uuq ununilium —	485 Uuq ununilium —	486 Uuq ununilium —	487 Uuq ununilium —	488 Uuq ununilium —	489 Uuq ununilium —	490 Uuq ununilium —	491 Uuq ununilium —	492 Uuq ununilium —	493 Uuq ununilium —	494 Uuq ununilium —	495 Uuq ununilium —	496 Uuq ununilium —	497 Uuq ununilium —	498 Uuq ununilium —	499 Uuq ununilium —	500 Uuq ununilium —

lanthanoids	57 La lanthanum 139	58 Ce cerium 140	59 Pr praseodymium 141	60 Nd neodymium 144	61 Pm promethium —	62 Sm samarium 150	63 Eu europium 152	64 Gd gadolinium 157	65 Tb terbium 159	66 Dy dysprosium 163	67 Ho holmium 165	68 Er erbium 167	69 Tm thulium 169	70 Yb ytterbium 173	71 Lu lutetium 175
actinoids	89 Ac actinium —	90 Th thorium 232	91 Pa protactinium 231	92 U uranium 238	93 Np neptunium —	94 Pu plutonium —	95 Am americium —	96 Cm curium —	97 Bk berkelium —	98 Cf californium —	99 Es einsteinium —	100 Fm fermium —	101 Md mendelevium —	102 No nobelium —	103 Lr lawrencium —

The volume of one mole of any gas is 24 dm³ at room temperature and pressure (r.t.p.).