



UNIVERSITY OF CAMBRIDGE INTERNATIONAL EXAMINATIONS
International General Certificate of Secondary Education

CANDIDATE
NAME

CENTRE
NUMBER

--	--	--	--	--

CANDIDATE
NUMBER

--	--	--	--

* 5 0 4 8 5 1 3 2 0 2 *



CHEMISTRY

0620/22

Paper 2

October/November 2013

1 hour 15 minutes

Candidates answer on the Question Paper.

No Additional Materials are required.

READ THESE INSTRUCTIONS FIRST

Write your Centre number, candidate number and name in the spaces at the top of this page.

Write in dark blue or black pen.

You may need to use a pencil for any diagrams, graphs or rough working.

Do not use staples, paper clips, highlighters, glue or correction fluid.

DO NOT WRITE IN ANY BARCODES.

Answer **all** questions.

Electronic calculators may be used.

A copy of the Periodic Table is printed on page 16.

You may lose marks if you do not show your working or if you do not use appropriate units.

At the end of the examination, fasten all your work securely together.

The number of marks is given in brackets [] at the end of each question or part question.

This document consists of **15** printed pages and **1** blank page.



BLANK PAGE

- 1 (a) Choose from the list of compounds below to answer the following questions.

For
Examiner's
Use

ammonia
ammonium chloride
calcium carbonate
calcium oxide
copper(II) sulfate
ethane
iron(II) chloride
methane
water

Each compound can be used once, more than once or not at all.

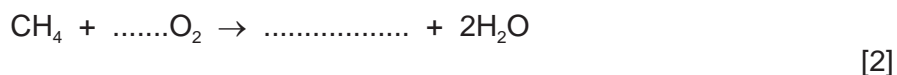
Which compound:

- (i) is an alkaline gas, [1]
 (ii) is a gas contributing to climate change, [1]
 (iii) is a salt containing only non-metals, [1]
 (iv) turns blue cobalt chloride paper pink, [1]
 (v) reacts with an acid to release carbon dioxide, [1]
 (vi) gives a light blue precipitate when aqueous sodium hydroxide is added to a solution of its aqueous ions? [1]

- (b) What is the meaning of the term *compound*?

.....
 [1]

- (c) Complete the following symbol equation for the complete combustion of methane in oxygen.



[Total: 9]

- 2 (a) The table describes the reactivity of some metals with hydrochloric acid.

For
Examiner's
Use

metal	observations
calcium	Many bubbles produced. Reaction mixture may boil.
magnesium	Steady stream of bubbles produced. Reaction mixture gets hot.
sodium	Many bubbles produced. May explode.
zinc	Slow stream of bubbles produced. Reaction mixture rises slightly in temperature.

Put these metals in order of their reactivity.

least reactive \longrightarrow most reactive

--	--	--	--

[2]

- (b) Complete the word equation for the reaction of magnesium with hydrochloric acid.

magnesium + hydrochloric acid \rightarrow +

.....

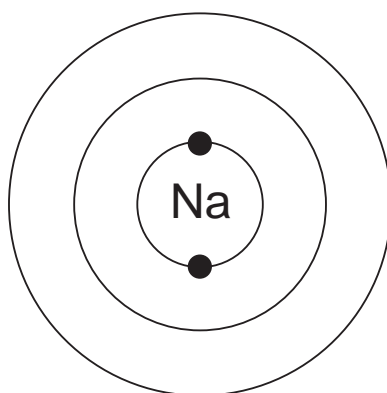
[2]

- (c) When magnesium reacts with hydrochloric acid, magnesium atoms lose electrons. What type of magnesium particle is formed?
Put a ring around the correct answer.

covalent **ion** **molecule** **proton**

[1]

- (d) Complete the diagram to show the electronic structure of a sodium atom.



[2]

- (e) A student added large lumps of zinc to 20 cm³ of 2 mol/dm³ hydrochloric acid. She carried out the reaction at 15 °C. She measured the volume of gas given off at various time intervals.

For
Examiner's
Use

- (i) Draw a labelled diagram of the apparatus she could use for this experiment.

[3]

- (ii) Describe **three** different things she could do to increase the rate of this reaction.

1.

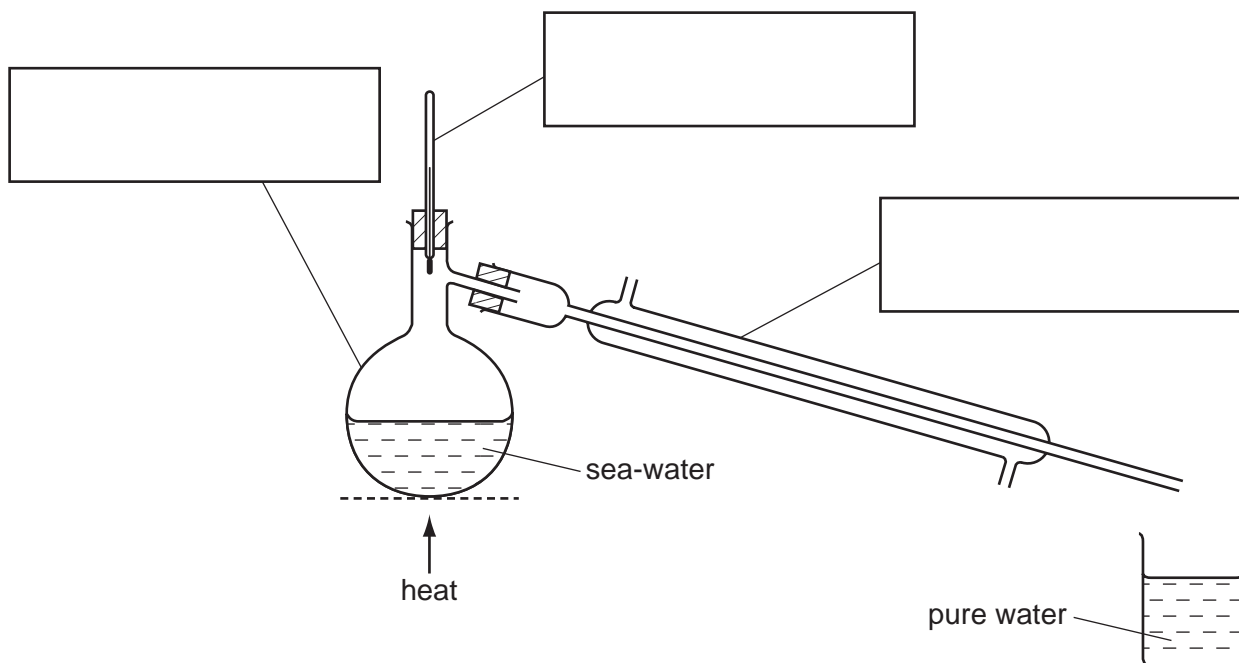
2.

3. [3]

[Total: 13]

3 The diagram below shows the apparatus which can be used to obtain pure water from sea-water.

For
Examiner's
Use



(a) State the name of this process.

..... [1]

(b) Label the boxes on the diagram above with the correct names of the pieces of apparatus shown. [3]

(c) Complete the following sentences using words from the list below.

- | | | | |
|---------------|------------------|--------------|----------------|
| boils | condenses | cools | freezes |
| higher | lower | melts | |

Water has a boiling point than salt. When a solution of salt is heated strongly, the water and escapes as steam. When the steam cools, it back to liquid water. [3]

(d) The table shows the concentration of the seven most abundant compounds in sea-water.

For
Examiner's
Use

compound	ions present	concentration in g/m ³
calcium carbonate	Ca ²⁺ and CO ₃ ²⁻	100
calcium sulfate	Ca ²⁺ and SO ₄ ²⁻	1 800
magnesium chloride	Mg ²⁺ and Cl ⁻	6 800
magnesium sulfate		5 700
potassium bromide	K ⁺ and Br ⁻	100
potassium chloride	K ⁺ and Cl ⁻	800
sodium chloride	Na ⁺ and Cl ⁻	28 000

(i) Which negative ion is present in the greatest concentration in sea-water?

..... [1]

(ii) Which positive ion is present in the lowest concentration in sea-water?

..... [1]

(iii) Write the formulae of the **two** ions present in magnesium sulfate.

..... [2]

[Total: 11]

- 4 (a) Match the compounds on the left with the statements on the right.
The first one has been done for you.

For
Examiner's
Use

butane	a hydrocarbon containing four carbon atoms
poly(ethene)	it decolourises bromine water
ethene	it is the main constituent of natural gas
methane	it contains a -COOH functional group
ethanoic acid	it has a very long chain of carbon atoms

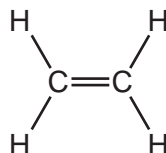
[4]

- (b) Methane and ethene are hydrocarbons.

- (i) What is meant by the term *hydrocarbon*?

..... [1]

- (ii) The structure of ethene is shown below.



Use this structure to explain why ethene is an unsaturated hydrocarbon.

..... [1]

- (c) Molecules of ethene react together at high temperature and pressure to form poly(ethene).

Which **one** of the following words best describes the molecules of ethene in this reaction?
Put a ring around the correct answer.

acids **alkanes** **monomers** **polymers**

[1]

(d) Ethanoic acid can be made by the oxidation of ethanol.

For
Examiner's
Use

(i) What is meant by the term *oxidation*?

..... [1]

(ii) Ethanol can be made by fermentation.
Complete the word equation for fermentation.

..... $\xrightarrow{\text{yeast}}$ + ethanol
.....

[2]

[Total: 10]

- 5 (a) Explain why metals are often used in the form of alloys.
In your answer, write about

- the structure of an alloy,
- why alloys are often more useful than pure metals.

.....

.....

.....

.....

..... [3]

- (b) Iron is a transition element.

- (i) Which two of the following statements about iron are correct?
Tick **two** boxes.

A freshly-cut surface of iron is green in colour.

Iron exists in only one oxidation state in its compounds.

Iron has a high density.

Iron has a giant covalent structure.

Iron has a high melting point.

[2]

- (ii) Describe **one** method of rust prevention and explain how it works.

method

how this works

..... [2]

- (c) Iron is used as a catalyst in the Haber process for making ammonia.

- (i) What does the term *catalyst* mean?

..... [1]

- (ii) Describe a test for ammonia.

test

result [2]

(iii) Ammonia is used to make fertilisers.
Explain why farmers need to add fertilisers to the soil.

*For
Examiner's
Use*

.....
.....
..... [2]

[Total: 12]

- 6 (a) Garlic is a vegetable that is often used in cooking. It has a strong smell. A student is cutting up garlic in the kitchen.

For
Examiner's
Use



After a time, the smell of the garlic travels all over the house even though there are no currents of air.

Use the kinetic particle theory to explain why the smell of garlic travels all over the house.

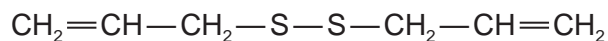
.....

.....

.....

..... [3]

- (b) The smell of garlic is due to a compound containing sulfur. The structure of this compound (compound **A**) is shown below.

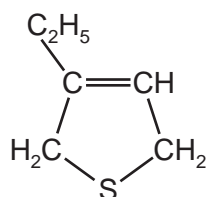


compound **A**

- (i) Write the molecular formula for this compound.

..... [1]

- (ii) Another organic sulfur compound (compound **B**) is shown below.



compound **B**

By comparing the formulae of compound **A** and compound **B**, how can you tell that compound **A** has the higher relative molecular mass?

You are not required to do any mathematical calculations.

.....

..... [2]

(c) An isotope of sulfur has a nucleon number of 34 and an atomic number of 16.

(i) How many neutrons are there in one atom of this isotope of sulfur?

..... [1]

(ii) What is meant by the terms

isotope,

..... [1]

nucleon number? [1]

(iii) Some fuels contain sulfur as a contaminating substance.
Complete the following sentences using words from the list below.

coal	dioxide	hydrogen	monoxide
nitrogen	oxidised	reduced	water

Fuels such as contain sulfur.

When these fuels burn, the sulfur is to sulfur

This reacts with in the atmosphere to form an acidic solution. [4]

(iv) Describe and explain the effect of acid rain on buildings made of limestone.

.....

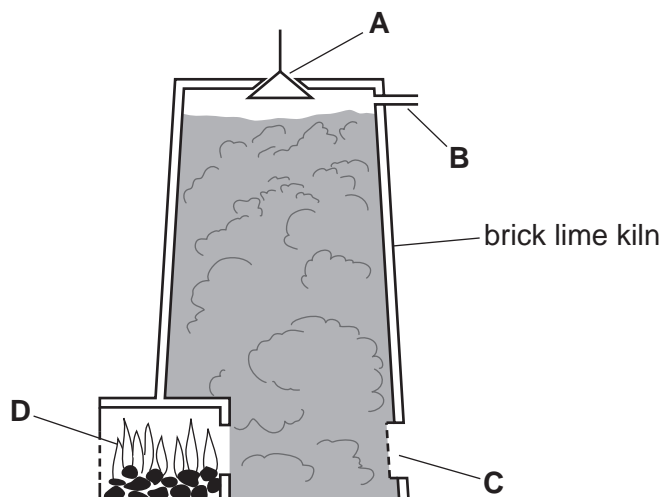
.....

..... [2]

[Total: 15]

- 7 The diagram shows a kiln for making lime (calcium oxide) from limestone (calcium carbonate).

For
Examiner's
Use



- (a) (i) Which letter on the diagram above shows
where the limestone is added,
- where the waste gases exit from the kiln? [2]

- (ii) Complete the symbol equation for the decomposition of limestone.



[1]

- (iii) When 50 g of calcium carbonate is decomposed, 28 g of calcium oxide is formed.
Calculate the minimum mass of calcium carbonate needed to produce 8.4 g of
calcium oxide.

[1]

- (b) The table below shows the temperatures at which some Group II carbonates decompose.

Group II carbonate	temperature at which Group II carbonates decompose / °C
beryllium carbonate	100
magnesium carbonate	350
calcium carbonate	900

- (i) Describe the pattern in the ease of decomposition of Group II carbonates.

..... [1]

15

(ii) Predict the decomposition temperature of barium carbonate.

..... °C [1]

For
Examiner's
Use

(c) Lime is calcium oxide.

(i) State **one** use of lime.

..... [1]

(ii) What type of oxide is calcium oxide?

..... [1]

(iii) Calculate the relative formula mass of calcium oxide.
Use your Periodic Table to help you.

[1]

(d) Calcium is extracted from its compounds by electrolysis.
Suggest why calcium is extracted by electrolysis rather than by reduction with carbon.

..... [1]

[Total: 10]

DATA SHEET
The Periodic Table of the Elements

Group		Group															
		I	II	III	IV	V	VI	VII	0								
		1 H Hydrogen 1								2 He Helium 2							
3	4	7 Li Lithium 3	9 Be Beryllium 4								10 Ne Neon 10						
11	12	23 Na Sodium 11	24 Mg Magnesium 12								18 Ar Argon 18						
19	20	39 K Potassium 19	40 Ca Calcium 20	48 Ti Titanium 22	51 V Vanadium 23	52 Cr Chromium 24	55 Mn Manganese 25	56 Fe Iron 26	59 Co Cobalt 27	59 Ni Nickel 28	64 Cu Copper 29	73 Ge Germanium 32	75 As Arsenic 33	79 Se Selenium 34	80 Br Bromine 35	84 Kr Krypton 36	
37	38	85 Rb Rubidium 37	88 Sr Strontium 38	91 Zr Zirconium 40	93 Nb Niobium 41	96 Mo Molybdenum 42	101 Ru Ruthenium 44	101 Rh Rhodium 45	103 Rh Rhodium 45	106 Pd Palladium 46	108 Ag Silver 47	112 Cd Cadmium 48	115 In Indium 49	119 Sn Tin 50	122 Sb Antimony 51	127 I Iodine 53	131 Xe Xenon 54
55	56	133 Cs Caesium 55	137 Ba Barium 56	178 Hf Hafnium 72	181 Ta Tantalum 73	184 W Tungsten 74	190 Os Osmium 76	192 Ir Iridium 77	195 Pt Platinum 78	197 Au Gold 79	201 Hg Mercury 80	204 Tl Thallium 81	207 Pb Lead 82	209 Bi Bismuth 83	210 Po Polonium 84	210 At Astatine 85	210 Rn Radon 86
87	88	226 Fr Francium 87	226 Ra Radium 88	†		†		†		†		†		†		†	

140	141	144	150	152	157	159	162	165	167	169	173	175
Ce Cerium 58	Pr Praseodymium 59	Nd Neodymium 60	Sm Samarium 62	Eu Europium 63	Gd Gadolinium 64	Tb Terbium 65	Dy Dysprosium 66	Ho Holmium 67	Er Erbium 68	Tm Thulium 69	Yb Ytterbium 70	Lu Lutetium 71
232	238	238	94	95	96	97	98	99	100	101	102	103
Th Thorium 90	Pa Protactinium 91	U Uranium 92	Pu Plutonium 94	Am Americium 95	Cm Curium 96	Bk Berkelium 97	Cf Californium 98	Es Einsteinium 99	Fm Fermium 100	Md Mendelevium 101	No Nobelium 102	Lr Lawrencium 103

a	X
b	†

a = relative atomic mass
 X = atomic symbol
 b = proton (atomic) number

*58-71 Lanthanoid series
 †90-103 Actinoid series

The volume of one mole of any gas is 24 dm³ at room temperature and pressure (r.t.p.).

Permission to reproduce items where third-party owned material protected by copyright is included has been sought and cleared where possible. Every reasonable effort has been made by the publisher (UCLES) to trace copyright holders, but if any items requiring clearance have unwittingly been included the publisher will be pleased to make amends at the earliest possible opportunity.

University of Cambridge International Examinations is part of the Cambridge Assessment Group. Cambridge Assessment is the brand name of University of Cambridge Local Examinations Syndicate (UCLES), which is itself a department of the University of Cambridge.