



**Cambridge International Examinations**  
Cambridge International General Certificate of Secondary Education

CANDIDATE  
NAME

CENTRE  
NUMBER

--	--	--	--	--

CANDIDATE  
NUMBER

--	--	--	--

\* 1 7 2 6 3 1 0 7 5 1 \*

**CHEMISTRY**

**0620/32**

Paper 3 Theory (Core)

**February/March 2017**

**1 hour 15 minutes**

Candidates answer on the Question Paper.

No Additional Materials are required.

**READ THESE INSTRUCTIONS FIRST**

Write your Centre number, candidate number and name on all the work you hand in.

Write in dark blue or black pen.

You may use an HB pencil for any diagrams or graphs.

Do not use staples, paper clips, glue or correction fluid.

**DO NOT WRITE IN ANY BARCODES.**

Answer **all** questions.

Electronic calculators may be used.

A copy of the Periodic Table is printed on page 16.

You may lose marks if you do not show your working or if you do not use appropriate units.

At the end of the examination, fasten all your work securely together.

The number of marks is given in brackets [ ] at the end of each question or part question.

The syllabus is approved for use in England, Wales and Northern Ireland as a Cambridge International Level 1/Level 2 Certificate.

This document consists of **14** printed pages and **2** blank pages.

1 (a) Choose from the list of elements to answer the following questions.

aluminium  
argon  
carbon  
lithium  
magnesium  
nickel  
nitrogen  
oxygen  
sulfur

Each element can be used once, more than once or not at all.

Which element

(i) forms 21% of dry air,

..... [1]

(ii) reacts rapidly with cold water to produce hydrogen,

..... [1]

(iii) is in Group III of the Periodic Table,

..... [1]

(iv) has atoms which have a complete outer shell of electrons,

..... [1]

(v) is a transition element,

..... [1]

(vi) forms stable ions with a single positive charge?

..... [1]

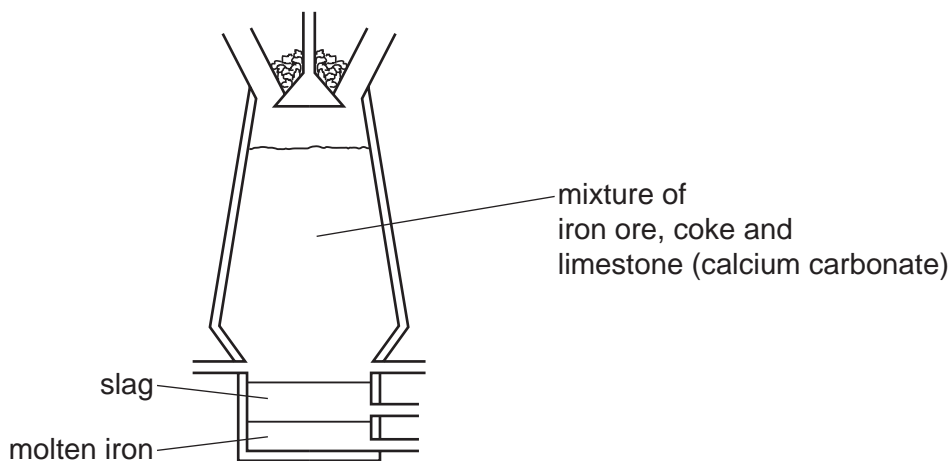
(b) Complete the table to show the number of electrons, neutrons and protons in the nickel atom and oxide ion shown.

	number of electrons	number of neutrons	number of protons
${}^{62}_{28}\text{Ni}$			28
${}^{18}_8\text{O}^{2-}$			

[4]

[Total: 10]

2 The diagram shows a blast furnace for extracting iron.



(a) (i) On the diagram write

- the letter **A** to show where air is blown into the furnace,
- the letter **W** to show where waste gases exit the furnace.

[2]

(ii) How do you know from the information in the diagram that slag is less dense than molten iron?

..... [1]

(b) Limestone (calcium carbonate) is one of the raw materials added to the blast furnace. Calcium carbonate undergoes thermal decomposition in the blast furnace.

(i) What is meant by the term *thermal decomposition*?

.....  
 ..... [2]

(ii) Complete the chemical equation for this reaction.



(iii) A further reaction in the blast furnace involves calcium oxide, CaO.

Describe this reaction and explain its importance.

.....  
 ..... [2]

(c) Pure iron can be prepared by electrolysis of an aqueous solution of a suitable iron(II) salt.

Draw a labelled diagram of an electrolysis cell that could be used to carry out this reaction. In your diagram include

- the electrodes,
- the electrolyte,
- the power supply.

[3]

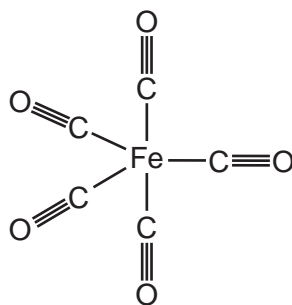
(d) (i) State the name of an element that could be used for the electrodes.

..... [1]

(ii) State **one** property that an electrode should have.

..... [1]

(e) Pure iron can also be prepared by the thermal decomposition of iron pentacarbonyl. The structure of iron pentacarbonyl is shown.



(i) Write the formula for iron pentacarbonyl.

..... [1]

(ii) The word equation for the reaction is shown.



Explain why the gaseous product is hazardous.

..... [1]

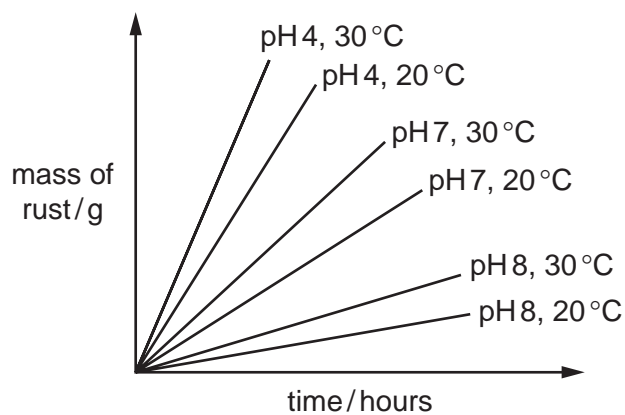
5

(f) The rate of rusting of iron varies with pH and temperature.

(i) What **two** substances must be in contact with iron for it to rust?

..... [2]

(ii) The graph shows the rate of rusting at different pH values and temperatures.



How do pH and temperature affect the rate of rusting?

pH .....

temperature .....

[2]

[Total: 19]

- 3 The hydrocarbons burnt in car engines react with air to form a mixture of gases. The table shows the composition of the mixture of all the gases coming from a car exhaust.

gas	% of gas in the exhaust gases
carbon dioxide	15
carbon monoxide	3
hydrocarbons	2
hydrogen	1
nitrogen oxides	1
oxygen	1
water vapour	18
gas X	59

- (a) Identify gas X.

..... [1]

- (b) Carbon dioxide is formed when hydrocarbons such as octane are burnt in car engines.

- (i) What is meant by the term *hydrocarbon*?

.....  
 ..... [2]

- (ii) Complete the word equation for this reaction.

octane + ..... → carbon dioxide + ..... [2]

- (iii) The concentration of carbon dioxide in the atmosphere is increasing.

Explain why this is a global concern.

.....  
 .....  
 ..... [2]

- (iv) Explain why carbon monoxide is present in the exhaust gases.

..... [1]

(v) Complete the table to calculate the relative molecular mass of octane,  $C_8H_{18}$ .

	number of atoms	relative atomic mass	relative mass in octane
hydrogen	18	1	$18 \times 1 = 18$
carbon			

relative molecular mass = ..... [2]

(c) Octane is an alkane.  
The table shows some properties of different alkanes.

alkane	formula	melting point /°C	boiling point /°C
methane	$CH_4$	-182	-164
ethane	$C_2H_6$	-183	-88
propane	$C_3H_8$	-190	-42
butane	$C_4H_{10}$	-138	0
pentane	$C_5H_{12}$	-130	36

(i) How does the boiling point of the alkanes change with the number of carbon atoms?

..... [1]

(ii) Which alkane in the table is liquid at room temperature (20°C)?  
Explain your answer.

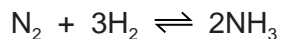
.....  
..... [2]

(iii) Draw the structure of methane showing all of the atoms and all of the bonds.

[1]

[Total: 14]

- 4 Ammonia is manufactured by combining nitrogen and hydrogen at high temperature and pressure.



- (a) What does the symbol  $\rightleftharpoons$  mean?

..... [1]

- (b) Ammonia is used to make fertilisers.

Explain why farmers spread fertilisers on the soil where they are going to grow crops.

.....  
..... [1]

- (c) Some fertilisers are salts made by adding acids to ammonia.

Give the name of the compound formed when ammonia reacts with nitric acid.

..... [1]

- (d) Farmers use calcium oxide to treat acidic soils.

- (i) Explain how calcium oxide helps treat acidic soils.

.....  
..... [1]

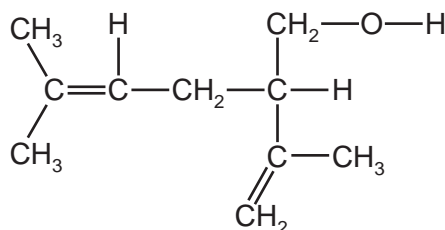
- (ii) Suggest why farmers need to treat soils which are too acidic.

.....  
..... [1]

[Total: 5]



- 5 Lavandulol is a compound found in lavender flowers.  
The structure of lavandulol is shown.



(a) On the diagram, draw a circle around the alcohol functional group. [1]

(b) How many carbon atoms are there in **one** molecule of lavandulol?

..... [1]

(c) (i) What feature of the lavandulol structure shows that it is unsaturated?

..... [1]

(ii) Describe a test to show that lavandulol is unsaturated.

test .....

result .....

[2]

(d) Lavandulol can be extracted from lavender flowers.

The following statements are about the procedure for extracting lavandulol.

- A Stir the mixture and leave it for a few hours.
- B Filter off the solid from the solution.
- C Distil the solution.
- D Add solvent to the ground up lavender flowers.
- E Grind up the lavender flowers.

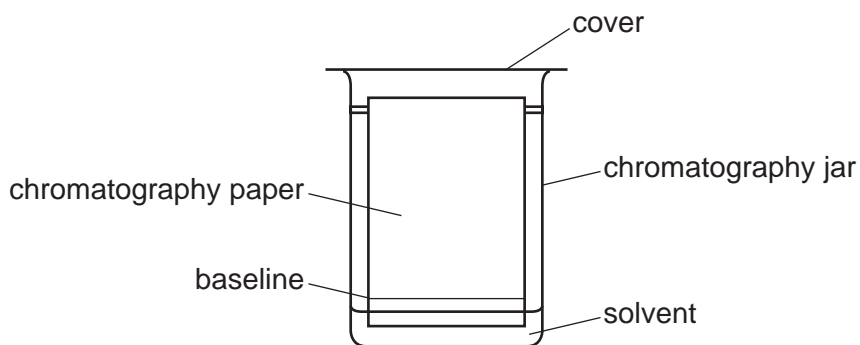
Put the statements **A**, **B**, **C**, **D** and **E** in the correct order.

The first one has been done for you.

E				
---	--	--	--	--

[2]

- (e) Chromatography can be used to separate the coloured pigments extracted from lavender flowers. The apparatus used is shown.



After a few minutes the solvent vapour fills the whole chromatography jar.

Use the kinetic particle model to explain this.

.....

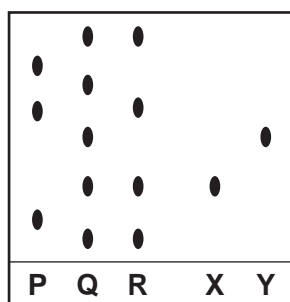
.....

.....

.....

..... [3]

- (f) Three different dye mixtures, **P**, **Q** and **R**, were placed on a sheet of chromatography paper. Two pure dyes, **X** and **Y**, were also placed on the same piece of chromatography paper. The experiment was carried out and the results are shown.



- (i) Where were the dyes placed on the chromatography paper at the start of the experiment?  
 ..... [1]
- (ii) Which dye mixture contained the greatest number of dyes?  
 ..... [1]
- (iii) Which dye mixture contained both dye **X** and dye **Y**?  
 ..... [1]

[Total: 13]

- 6 Chlorine and sodium hydroxide are manufactured by the electrolysis of concentrated aqueous sodium chloride.

(a) Chlorine is produced at the positive electrode (anode).

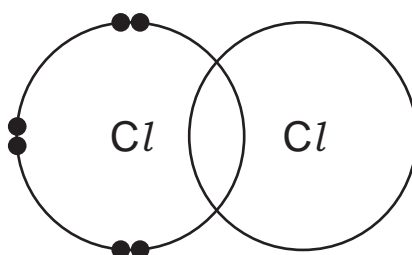
Name the substance produced at the negative electrode (cathode) during the electrolysis.

..... [1]

(b) State the name of the particle that is removed from a chloride ion to make a chlorine atom.

..... [1]

(c) Complete the electronic structure of a chlorine molecule.



[2]

(d) Describe a test for chlorine.

test .....

result .....

[2]

(e) If chlorine reacts with sodium hydroxide, sodium chlorate(I),  $\text{NaOCl}$ , is formed. Another compound of sodium is also produced. This forms a white precipitate on addition of aqueous silver nitrate.

Complete the chemical equation for this reaction.



[2]

- (f) 1000g of a solution produced by the electrolysis of concentrated aqueous sodium chloride contains the following masses of compounds.

compound	mass of substance present/g
sodium chlorate(I)	300
sodium chloride	6
sodium hydroxide	9
water	685
total	1000

- (i) Calculate the mass of sodium hydroxide present in 200g of this solution.

[1]

- (ii) All the water from the 1000g of solution is evaporated.

Deduce the mass of the remaining mixture.

[1]

[Total: 10]

7 Metals have characteristic properties.

(a) Write about the properties of metals.

In your answer

- refer to the physical properties which are characteristic of metals,
- refer to the chemical properties which are characteristic of metals,
- include a word equation to show a chemical reaction of a metal.

.....

.....

.....

.....

.....

.....

.....

.....

..... [5]

(b) The table shows how easy it is to reduce four metal oxides.

metal oxide	ease of reduction
calcium oxide	not reduced by carbon at 1600 °C
magnesium oxide	reduced by carbon at 1600 °C
nickel(II) oxide	reduced by carbon at 350 °C
zinc oxide	reduced by carbon at 850 °C

Use this information to put the metals in order of their reactivity. Put the least reactive metal first.

least reactive  $\xrightarrow{\hspace{15em}}$  most reactive

[2]

(c) Uranium is a radioactive metal which has several isotopes.

(i) What is the meaning of the term *isotopes*?

.....

..... [1]

(ii) Give the main use of the isotope  $^{235}\text{U}$ .

..... [1]

[Total: 9]



**BLANK PAGE**

---

Permission to reproduce items where third-party owned material protected by copyright is included has been sought and cleared where possible. Every reasonable effort has been made by the publisher (UCLES) to trace copyright holders, but if any items requiring clearance have unwittingly been included, the publisher will be pleased to make amends at the earliest possible opportunity.

To avoid the issue of disclosure of answer-related information to candidates, all copyright acknowledgements are reproduced online in the Cambridge International Examinations Copyright Acknowledgements Booklet. This is produced for each series of examinations and is freely available to download at [www.cie.org.uk](http://www.cie.org.uk) after the live examination series.

Cambridge International Examinations is part of the Cambridge Assessment Group. Cambridge Assessment is the brand name of University of Cambridge Local Examinations Syndicate (UCLES), which is itself a department of the University of Cambridge.

The Periodic Table of Elements

		Group																																																																																					
I	II	III	IV	V	VI	VII	VIII																																																																																
		1 <b>H</b> hydrogen 1																																																																																					
<b>Key</b>																																																																																							
atomic number																																																																																							
atomic symbol																																																																																							
name																																																																																							
relative atomic mass																																																																																							
3 <b>Li</b> lithium 7	4 <b>Be</b> beryllium 9	5 <b>B</b> boron 11	6 <b>C</b> carbon 12	7 <b>N</b> nitrogen 14	8 <b>O</b> oxygen 16	9 <b>F</b> fluorine 19	10 <b>Ne</b> neon 20	11 <b>Na</b> sodium 23	12 <b>Mg</b> magnesium 24	13 <b>Al</b> aluminium 27	14 <b>Si</b> silicon 28	15 <b>P</b> phosphorus 31	16 <b>S</b> sulfur 32	17 <b>Cl</b> chlorine 35.5	18 <b>Ar</b> argon 40	19 <b>K</b> potassium 39	20 <b>Ca</b> calcium 40	21 <b>Sc</b> scandium 45	22 <b>Ti</b> titanium 48	23 <b>V</b> vanadium 51	24 <b>Cr</b> chromium 52	25 <b>Mn</b> manganese 55	26 <b>Fe</b> iron 56	27 <b>Co</b> cobalt 59	28 <b>Ni</b> nickel 59	29 <b>Cu</b> copper 64	30 <b>Zn</b> zinc 65	31 <b>Ga</b> gallium 70	32 <b>Ge</b> germanium 73	33 <b>As</b> arsenic 75	34 <b>Se</b> selenium 79	35 <b>Br</b> bromine 80	36 <b>Kr</b> krypton 84	37 <b>Rb</b> rubidium 85	38 <b>Sr</b> strontium 88	39 <b>Y</b> yttrium 89	40 <b>Zr</b> zirconium 91	41 <b>Nb</b> niobium 93	42 <b>Mo</b> molybdenum 96	43 <b>Tc</b> technetium —	44 <b>Ru</b> ruthenium 101	45 <b>Rh</b> rhodium 103	46 <b>Pd</b> palladium 106	47 <b>Ag</b> silver 108	48 <b>Cd</b> cadmium 112	49 <b>In</b> indium 115	50 <b>Sn</b> tin 119	51 <b>Sb</b> antimony 122	52 <b>Te</b> tellurium 128	53 <b>I</b> iodine 127	54 <b>Xe</b> xenon 131	55 <b>Cs</b> caesium 133	56 <b>Ba</b> barium 137	57–71 lanthanoids	72 <b>Hf</b> hafnium 178	73 <b>Ta</b> tantalum 181	74 <b>W</b> tungsten 184	75 <b>Re</b> rhenium 186	76 <b>Os</b> osmium 190	77 <b>Ir</b> iridium 192	78 <b>Pt</b> platinum 195	79 <b>Au</b> gold 197	80 <b>Hg</b> mercury 201	81 <b>Tl</b> thallium 204	82 <b>Pb</b> lead 207	83 <b>Bi</b> bismuth 209	84 <b>Po</b> polonium —	85 <b>At</b> astatine —	86 <b>Rn</b> radon —	87 <b>Fr</b> francium —	88 <b>Ra</b> radium —	89–103 actinoids	104 <b>Rf</b> rutherfordium —	105 <b>Db</b> dubnium —	106 <b>Sg</b> seaborgium —	107 <b>Bh</b> bohrium —	108 <b>Hs</b> hassium —	109 <b>Mt</b> meitnerium —	110 <b>Ds</b> darmstadtium —	111 <b>Rg</b> roentgenium —	112 <b>Cn</b> copernicium —	113 <b>Nh</b> nihonium —	114 <b>Fl</b> flerovium —	115 <b>Mc</b> moscovium —	116 <b>Lv</b> livermorium —	117 <b>Ts</b> tennessine —	118 <b>Og</b> oganesson —

lanthanoids	57 <b>La</b> lanthanum 139	58 <b>Ce</b> cerium 140	59 <b>Pr</b> praseodymium 141	60 <b>Nd</b> neodymium 144	61 <b>Pm</b> promethium —	62 <b>Sm</b> samarium 150	63 <b>Eu</b> europium 152	64 <b>Gd</b> gadolinium 157	65 <b>Tb</b> terbium 159	66 <b>Dy</b> dysprosium 163	67 <b>Ho</b> holmium 165	68 <b>Er</b> erbium 167	69 <b>Tm</b> thulium 169	70 <b>Yb</b> ytterbium 173	71 <b>Lu</b> lutetium 175
actinoids	89 <b>Ac</b> actinium	90 <b>Th</b> thorium 232	91 <b>Pa</b> protactinium 231	92 <b>U</b> uranium 238	93 <b>Np</b> neptunium —	94 <b>Pu</b> plutonium —	95 <b>Am</b> americium —	96 <b>Cm</b> curium —	97 <b>Bk</b> berkelium —	98 <b>Cf</b> californium —	99 <b>Es</b> einsteinium —	100 <b>Fm</b> fermium —	101 <b>Md</b> mendelevium —	102 <b>No</b> nobelium —	103 <b>Lr</b> lawrencium —

The volume of one mole of any gas is 24 dm<sup>3</sup> at room temperature and pressure (r.t.p.).