



# Cambridge IGCSE™

CANDIDATE  
NAME

CENTRE  
NUMBER

--	--	--	--	--

CANDIDATE  
NUMBER

--	--	--	--



**BIOLOGY**

**0610/33**

Paper 3 Theory (Core)

**May/June 2021**

**1 hour 15 minutes**

You must answer on the question paper.

No additional materials are needed.

## INSTRUCTIONS

- Answer **all** questions.
- Use a black or dark blue pen. You may use an HB pencil for any diagrams or graphs.
- Write your name, centre number and candidate number in the boxes at the top of the page.
- Write your answer to each question in the space provided.
- Do **not** use an erasable pen or correction fluid.
- Do **not** write on any bar codes.
- You may use a calculator.
- You should show all your working and use appropriate units.

## INFORMATION

- The total mark for this paper is 80.
- The number of marks for each question or part question is shown in brackets [ ].

This document has **24** pages. Any blank pages are indicated.

- 1 (a) State the name of the large group of organisms that includes insects, arachnids, crustaceans and myriapods.

..... [1]

- (b) Fig. 1.1 shows a key that identifies nine genera of invertebrates that have jointed legs.

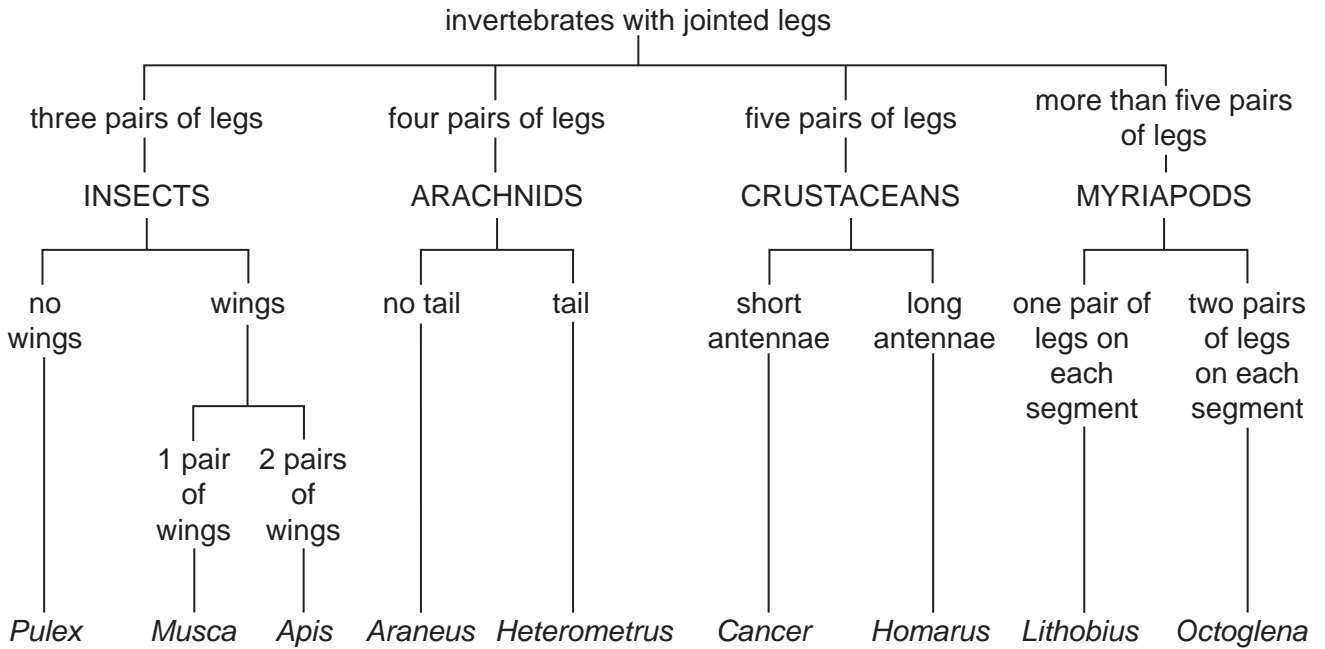


Fig. 1.1

- (i) Use the information in Fig. 1.1 to describe **two** features of *Musca*.

1 .....

.....


2 .....

.....

[2]

3

(ii) Fig. 1.2 shows one of the animals described in the key.



**Fig. 1.2**

Use the key in Fig. 1.1 to identify this animal.

..... [1]

[Total: 4]

- 2 (a) (i) State the name of the process that occurs in the presence of chlorophyll.  
 ..... [1]
- (ii) State the name of the mineral ion the plant needs to make chlorophyll.  
 ..... [1]
- (iii) State the name of the structure that contains chlorophyll in a plant cell.  
 ..... [1]

(b) Fig. 2.1 shows a diagram of a cross-section of a leaf.

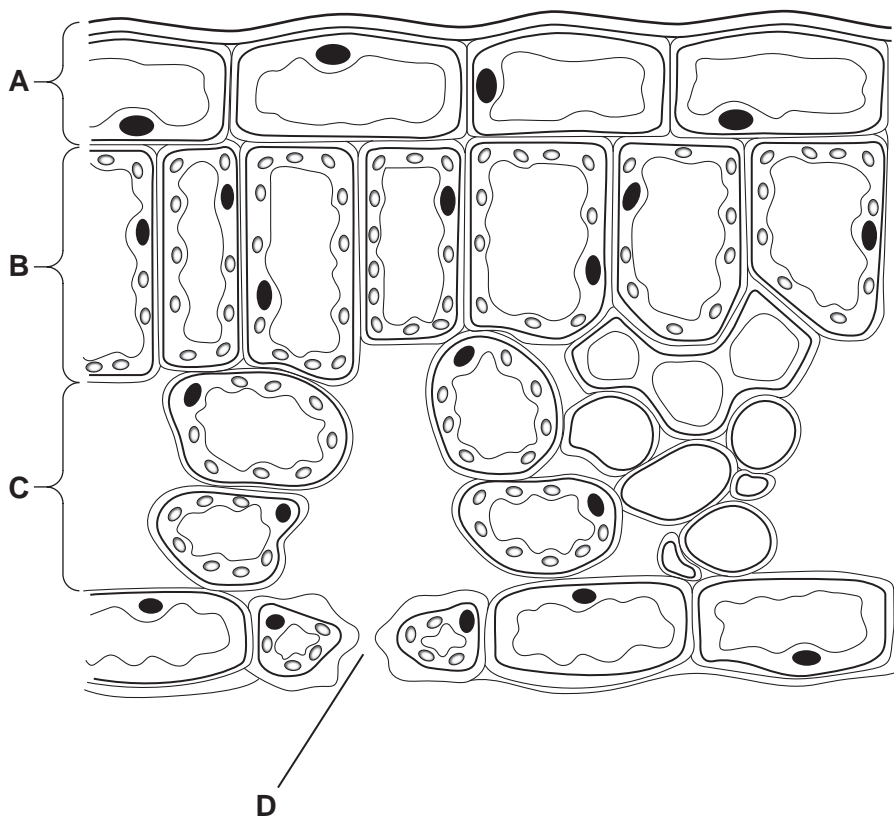


Fig. 2.1

- (i) State the letter that identifies the part of the leaf that contains the most chlorophyll in Fig. 2.1.  
 ..... [1]
- (ii) State the name of the tissue in the leaf that does **not** contain chlorophyll.  
 ..... [1]

[Total: 5]

3 All living organisms need water. Most plants obtain water from the soil.

(a) (i) State the pathway taken by water as it enters and passes through a plant.

Use words from the list to fill in the spaces.

mesophyll cells      root cortex cells      root hair cells      xylem vessels

enters ..... → ..... → ..... → .....

[2]

(ii) Some of the water that enters the plant is used for transpiration.

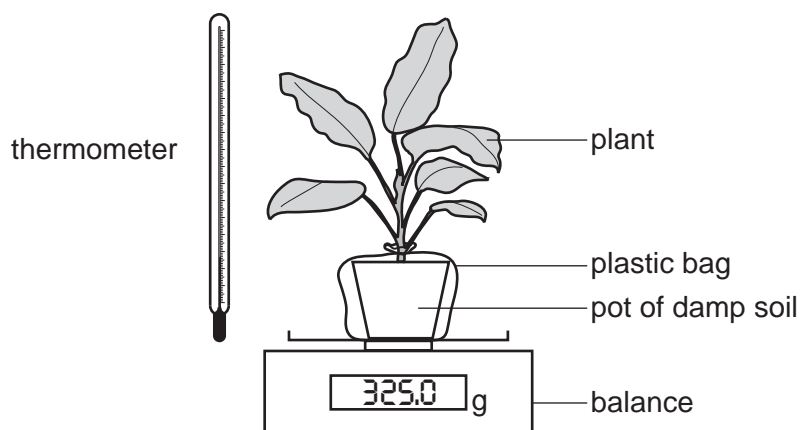
Define the term transpiration.

.....  
.....  
.....  
.....  
..... [3]

(iii) State **two** ways a plant uses water other than for transpiration.

1 .....  
.....  
2 .....  
..... [2]

(b) Fig. 3.1 shows apparatus that can be used to measure water loss in a plant.



**Fig. 3.1**

Suggest a reason why the pot of damp soil was placed inside a sealed plastic bag.

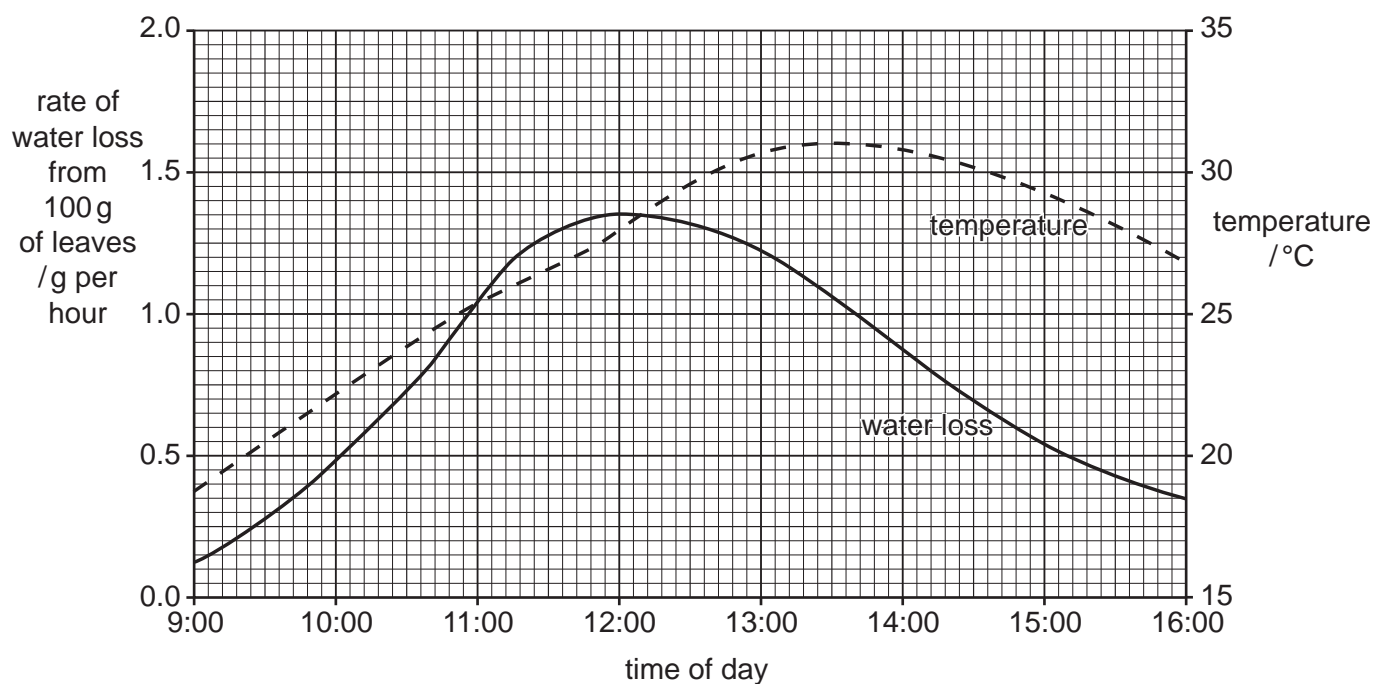
.....

.....

..... [1]

(c) The apparatus shown in Fig. 3.1 was used in an investigation. The results of this investigation are shown in Fig. 3.2.

Readings were taken at hourly intervals during the day between 9:00 and 16:00.



**Fig. 3.2**

(i) Use the information in Fig. 3.2 to state:

the maximum rate of water loss from 100 g of leaves ..... g per hour

the time at which the temperature was highest .....

the maximum temperature reached during the investigation ..... °C

[3]

(ii) Describe the relationship between temperature and the rate of water loss from leaves shown in Fig. 3.2.

.....

.....

.....

.....

.....

.....

.....

.....

.....

..... [3]

[Total: 14]

4 Fig. 4.1 shows part of the human nervous system.

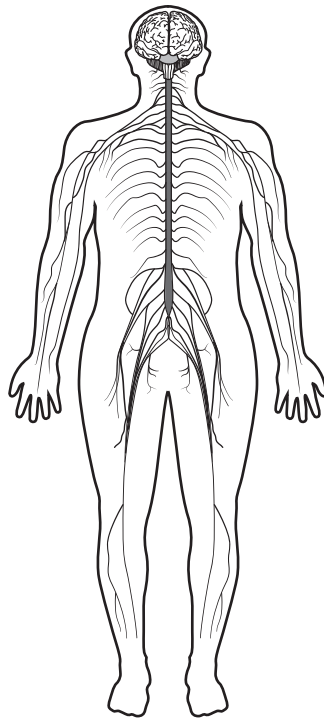


Fig. 4.1

(a) (i) State the **two** parts of the central nervous system.

- 1 .....
- 2 ..... [2]

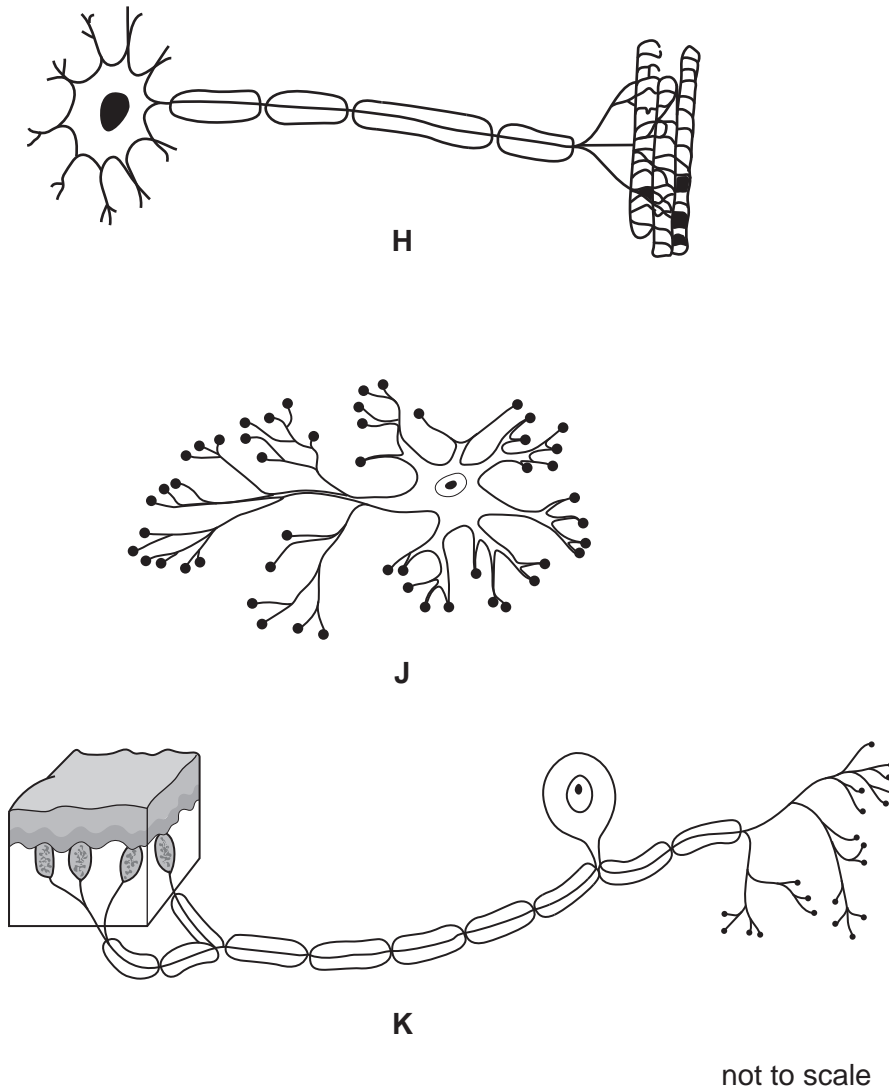
(ii) Describe the main function of the nervous system.

.....  
.....  
..... [1]



(b) Fig. 4.2 shows three different types of neurone.

These cells are used in some reflex actions.



not to scale

Fig. 4.2

(i) State the names of cells **H** and **K** in Fig. 4.2.

**H** .....

**K** .....

[2]

(ii) Describe **one** feature of a reflex action.

.....  
 .....  
 ..... [1]

(iii) State **one** example of a reflex action.

..... [1]

10

(c) Certain types of drugs can affect the nervous system.

Heroin and alcohol both affect reflex actions.

(i) State **one** effect of heroin on the nervous system.

..... [1]

(ii) State **one** long-term effect of excessive consumption of alcohol.

..... [1]

[Total: 9]

- 5 (a) The four boxes on the left contain definitions of processes carried out by the alimentary canal. The six boxes on the right contain the names of processes.
- Draw a straight line to join each definition to the matching process.
- Draw only **four** lines.

**definition****process**

The breakdown of large, insoluble molecules into small, soluble molecules.

absorption

The movement of digested food molecules into the cells of the body where they are used, becoming part of the cells.

assimilation

The passing out of food that has not been digested or absorbed, as faeces, through the anus.

chemical digestion

The taking of food substances, e.g. food and drink, into the body through the mouth.

egestion

mechanical digestion

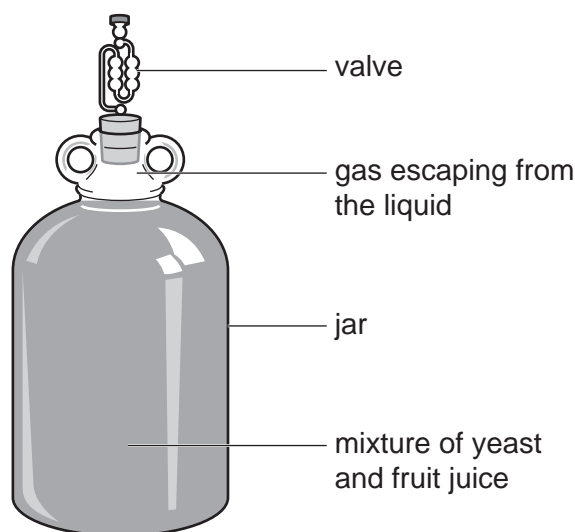
ingestion

[4]

(b) Fig. 5.1 shows yeast being used to produce alcohol.

A mixture of yeast and fruit juice is placed in a jar. Fruit juice contains sugar.

A valve lets gas out of the jar but stops gas from entering the jar.



**Fig. 5.1**

(i) State the name of the process that the yeast uses to make alcohol.

..... [1]

(ii) State the name of the gas produced when yeast makes alcohol.

..... [1]

(iii) State the name of the gas that must be stopped from entering the jar when alcohol is being made.

..... [1]

(iv) State the name of the group of chemicals that yeast uses to catalyse the breakdown of glucose molecules.

Choose your answer from the list.

**antibiotics      antibodies      enzymes      hormones**

..... [1]

[Total: 8]

6 Fig. 6.1 is a section of a flower that has both male and female parts.

Parts of the flower are labelled with the letters L to S.

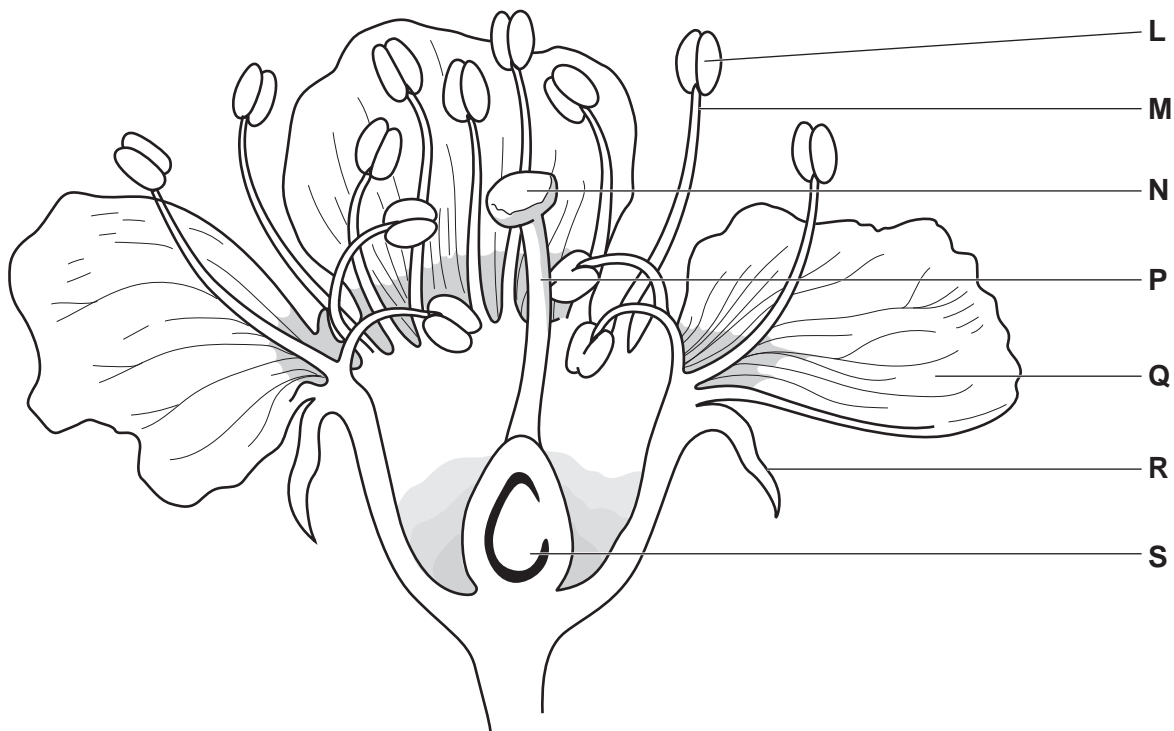


Fig. 6.1

(a) (i) Describe a **function** of each of the parts labelled L, N and Q.

L .....

.....

N .....

.....

Q .....

.....

[3]

(ii) State the names of parts M, P, R and S.

M .....

P .....

R .....

S .....

[4]

(b) Fig. 6.2 shows a mature maize plant. Maize plants have separate male and female flowers. Maize plants are pollinated by the wind.

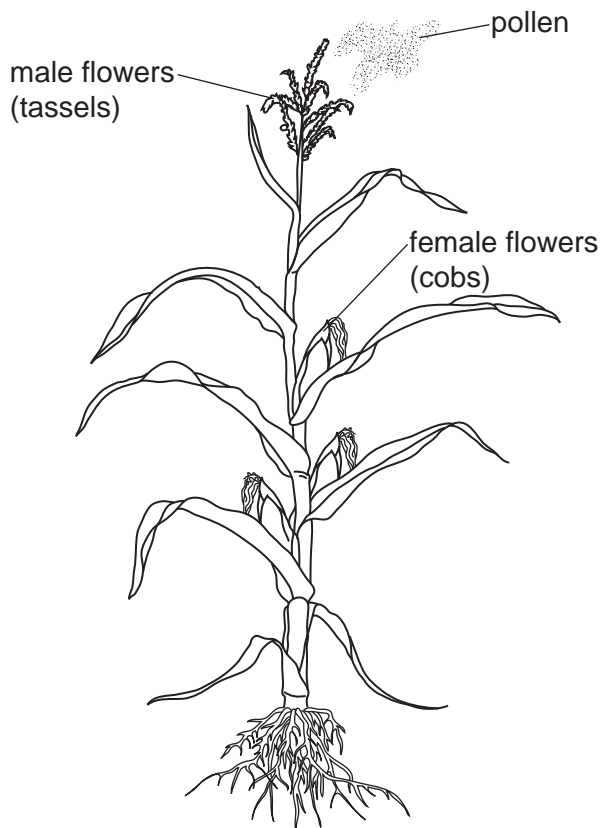


Fig. 6.2

(i) Use the information in Fig. 6.2 to describe how the **position** of the male and female flowers can increase the chance of pollination taking place.

.....

.....

..... [1]

(ii) Describe **two** ways pollen from an insect-pollinated flower differs from pollen from a wind-pollinated flower.

1 .....

.....

2 .....

.....

[2]

[Total: 10]

7 (a) Define the terms herbivore and carnivore.

herbivore .....

carnivore .....

[2]

(b) Fig. 7.1 shows some organisms collected from underneath a rotting log.


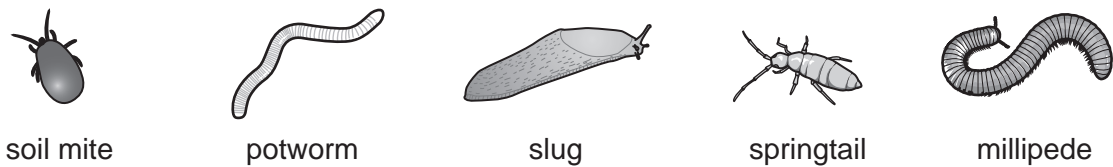



Fig. 7.1

Fig. 7.2 can be used to identify these organisms.

**herbivores**



**carnivores**



not to scale

Fig. 7.2





8 Fig. 8.1 shows an area of land where the trees have been cut down.



Fig. 8.1

(a) (i) List **three** undesirable effects of deforestation.

- 1 .....
- 2 .....
- 3 .....

[3]

(ii) Deforested land may be used for growing monocultures of crop plants.

Describe the negative impacts to an ecosystem of large-scale monocultures of crop plants.

- .....
- .....
- .....
- .....
- .....

[2]

(b) Replanting trees in deforested areas can help to conserve endangered species.

Describe **two** other ways that endangered species can be conserved.

1 .....

.....

.....

2 .....

.....

.....

[2]

[Total: 7]

9 (a) Fig. 9.1 is a label taken from a container of semi-skimmed milk.

The milk is pasteurised and some of the milk fat has been removed.

Fresh Pasteurised Semi Skimmed MILK	Nutritional information per 100cm <sup>3</sup> of milk	
	Energy	209kJ
	Carbohydrate	4.8g
	Fat	1.7g
	Protein	3.6g
	Fibre	0.0g
	Salt	0.1g

Fig. 9.1

(i) Fig. 9.1 gives information about five groups of nutrients.

State **two** parts of a balanced diet that are missing from the label.

- 1 .....
- 2 ..... [2]

(ii) State the name of the group of organisms that produce milk to feed their young.

..... [1]

(b) (i) Describe the dietary importance of fats, carbohydrates and proteins in the human diet.

- fats .....
- .....
- .....
- carbohydrates .....
- .....
- .....
- proteins .....
- .....
- ..... [3]

(ii) State the name of the element which is present in a protein but which is **not** found in fats or carbohydrates.

..... [1]

(c) Some doctors recommend that people with a risk of coronary heart disease should drink skimmed or semi-skimmed milk instead of whole milk.

State **two** risk factors for coronary heart disease, **other than** diet.

1 .....

2 .....

[2]

[Total: 9]

10 (a) Fig. 10.1 shows the results of crossing a plant with red flowers with a plant with white flowers.

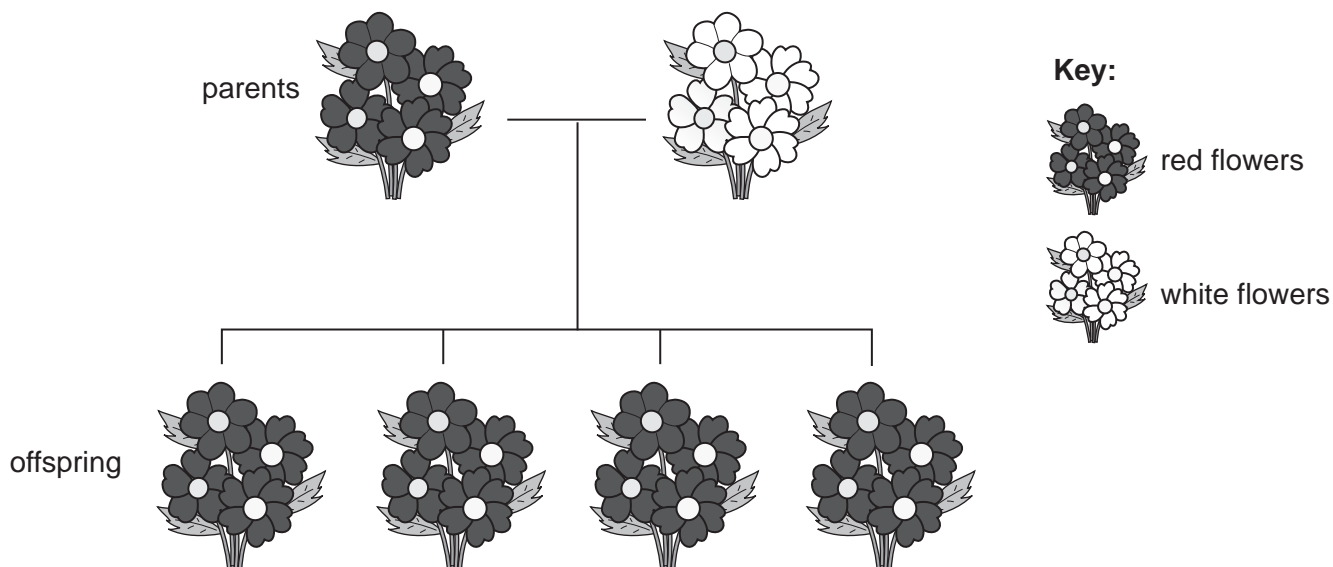


Fig. 10.1

Both of the parent plants were homozygous for flower colour.

All of their offspring had red flowers.

(i) State what is meant by the term homozygous.

.....  
 .....  
 ..... [1]

(ii) The gene controlling flower colour in this plant species has two alleles:

- **R** is dominant and represents the allele for red flowers
- **r** is recessive and represents the allele for white flowers.

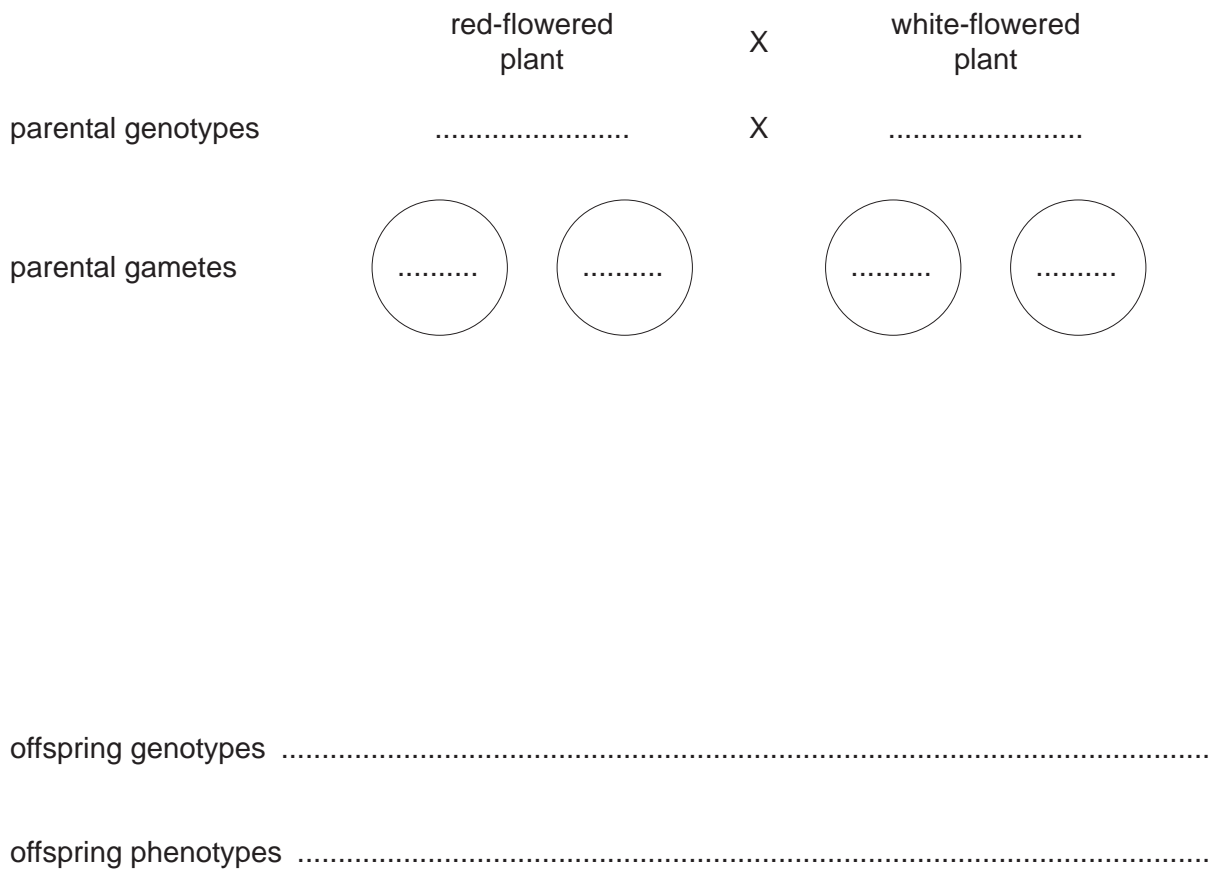
Describe the evidence shown in Fig. 10.1 that supports the fact that **R** is the dominant allele for flower colour in this species of plant.

.....  
 .....  
 ..... [1]

(b) Another plant with red flowers was crossed with a plant with white flowers.

Some of the offspring plants from this cross had red flowers and some of the offspring plants had white flowers.

Complete the genetic diagram to show the results of this cross.



[5]

[Total: 7]

**BLANK PAGE**

---

Permission to reproduce items where third-party owned material protected by copyright is included has been sought and cleared where possible. Every reasonable effort has been made by the publisher (UCLES) to trace copyright holders, but if any items requiring clearance have unwittingly been included, the publisher will be pleased to make amends at the earliest possible opportunity.

To avoid the issue of disclosure of answer-related information to candidates, all copyright acknowledgements are reproduced online in the Cambridge Assessment International Education Copyright Acknowledgements Booklet. This is produced for each series of examinations and is freely available to download at [www.cambridgeinternational.org](http://www.cambridgeinternational.org) after the live examination series.

Cambridge Assessment International Education is part of the Cambridge Assessment Group. Cambridge Assessment is the brand name of the University of Cambridge Local Examinations Syndicate (UCLES), which itself is a department of the University of Cambridge.