



Cambridge International Examinations
Cambridge International General Certificate of Secondary Education

CANDIDATE
NAME

CENTRE
NUMBER

--	--	--	--	--

CANDIDATE
NUMBER

--	--	--	--

CHEMISTRY

0620/22

Paper 2

May/June 2014

1 hour 15 minutes

Candidates answer on the Question Paper.

No Additional Materials are required.

READ THESE INSTRUCTIONS FIRST

Write your Centre number, candidate number and name in the spaces at the top of this page.

Write in dark blue or black pen.

You may use an HB pencil for any diagrams or graphs.

Do not use staples, paper clips, glue or correction fluid.

DO NOT WRITE IN ANY BARCODES.

Answer **all** questions.

Electronic calculators may be used.

A copy of the Periodic Table is printed on page 16.

You may lose marks if you do not show your working or if you do not use appropriate units.

At the end of the examination, fasten all your work securely together.

The number of marks is given in brackets [] at the end of each question or part question.

The syllabus is approved for use in England, Wales and Northern Ireland as a Cambridge International Level 1/Level 2 Certificate.

This document consists of **15** printed pages and **1** blank page.



BLANK PAGE

1 The diagram shows part of the Periodic Table. Only some of the elements are shown.

H															
Li													C	N	O
Na													Al		
K							Fe	Co	Ni	Cu	Zn				
Rb															
Cs													Pb		

- (a) Answer the following questions using **only** the elements shown in the diagram. Each element may be used once, more than once or not at all.
- (i) Which element has a giant covalent structure? [1]
- (ii) Which element has the highest relative atomic mass? [1]
- (iii) Which **two** elements are formed when molten aluminium oxide is electrolysed?
..... and [1]
- (iv) Which element in Group I reacts most rapidly with water? [1]
- (v) Which element oxidises in the presence of water to form rust? [1]
- (vi) Which element burns in oxygen to form water? [1]

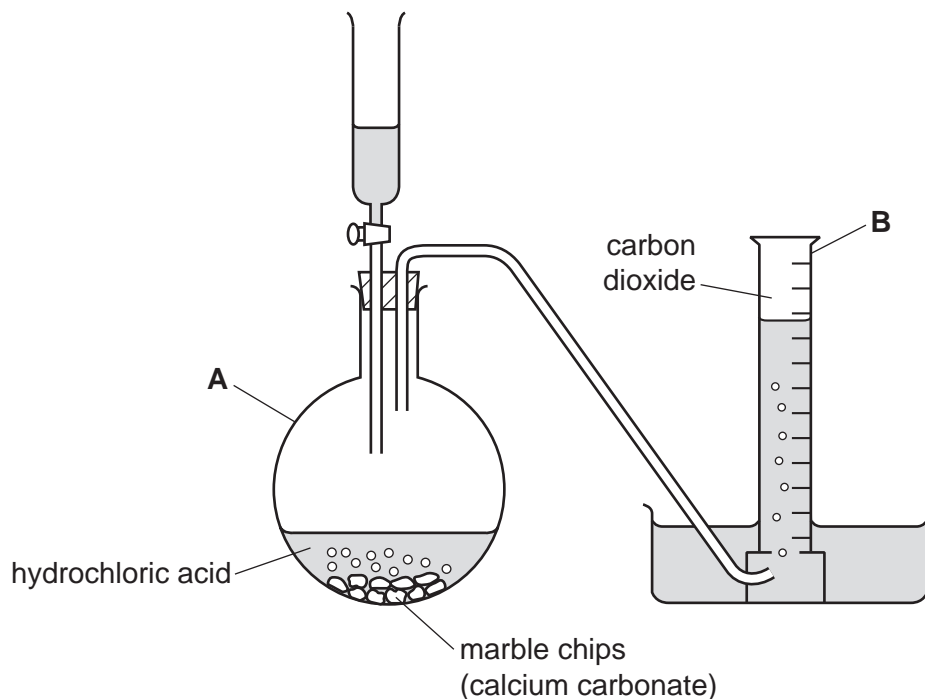
- (b) Rubidium reacts with oxygen to form rubidium oxide, Rb_2O . Complete the symbol equation for this reaction.



- (c) Lead compounds are atmospheric pollutants. State **one** adverse effect of lead compounds on health.
..... [1]

[Total: 9]

2 Carbon dioxide can be prepared in the laboratory using the apparatus shown below.




(a) State the names of the pieces of apparatus labelled **A** and **B**.

A

B

[2]

(b) Complete the word equation for this reaction.



[2]

(c) Carbon dioxide is slightly soluble in water.
What effect will this have on the volume of carbon dioxide collected?
Tick **one** box.

The volume is lower than expected.

The volume is higher than expected.

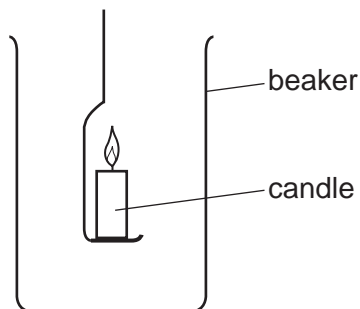
The volume is the same as expected.

No carbon dioxide is collected.

[1]

5

(d) A burning candle is lowered into a beaker of carbon dioxide.



- (i) The flame goes out.
Explain why the flame goes out.

..... [1]

- (ii) After 20 seconds, the candle is removed and relit.
It is then lowered into the same beaker again.
The flame goes out again.
What does this tell you about the density of carbon dioxide compared to air?

..... [1]

- (iii) After 40 minutes, the candle is removed and relit.
It is then lowered into the same beaker again.
The candle stays alight.
Explain why the candle stays alight.

.....
.....
..... [2]

[Total: 9]

3 River water contains a variety of ions and gases, and insoluble materials such as soil particles.

- (a) Describe how you could remove the insoluble materials from a sample of river water. Include a labelled diagram.

.....

.....

.....

..... [4]

- (b) The table shows the ions present in a sample of river water.

name of ion	formula of ion	concentration in mg/dm ³
calcium	Ca ²⁺	0.6
chloride	Cl ⁻	14.0
hydrogen carbonate	HCO ₃ ⁻	1.5
iron(III)	Fe ³⁺	0.5
magnesium	Mg ²⁺	1.0
potassium	K ⁺	3.0
sodium	Na ⁺	11.0
	SO ₄ ²⁻	0.4

- (i) Which ion with a charge of 2+ is present in the highest concentration?

..... [1]

- (ii) State the name of the ion with the formula SO₄²⁻.

..... [1]

7

(iii) Calculate the total mass of ions present in 1 dm³ of river water.

..... mg [1]

(iv) Use your answer to part (iii) to calculate the total mass of ions in 50 cm³ of river water.

..... mg [1]

(v) A student evaporated the sample of river water to leave a solid containing a number of different compounds.

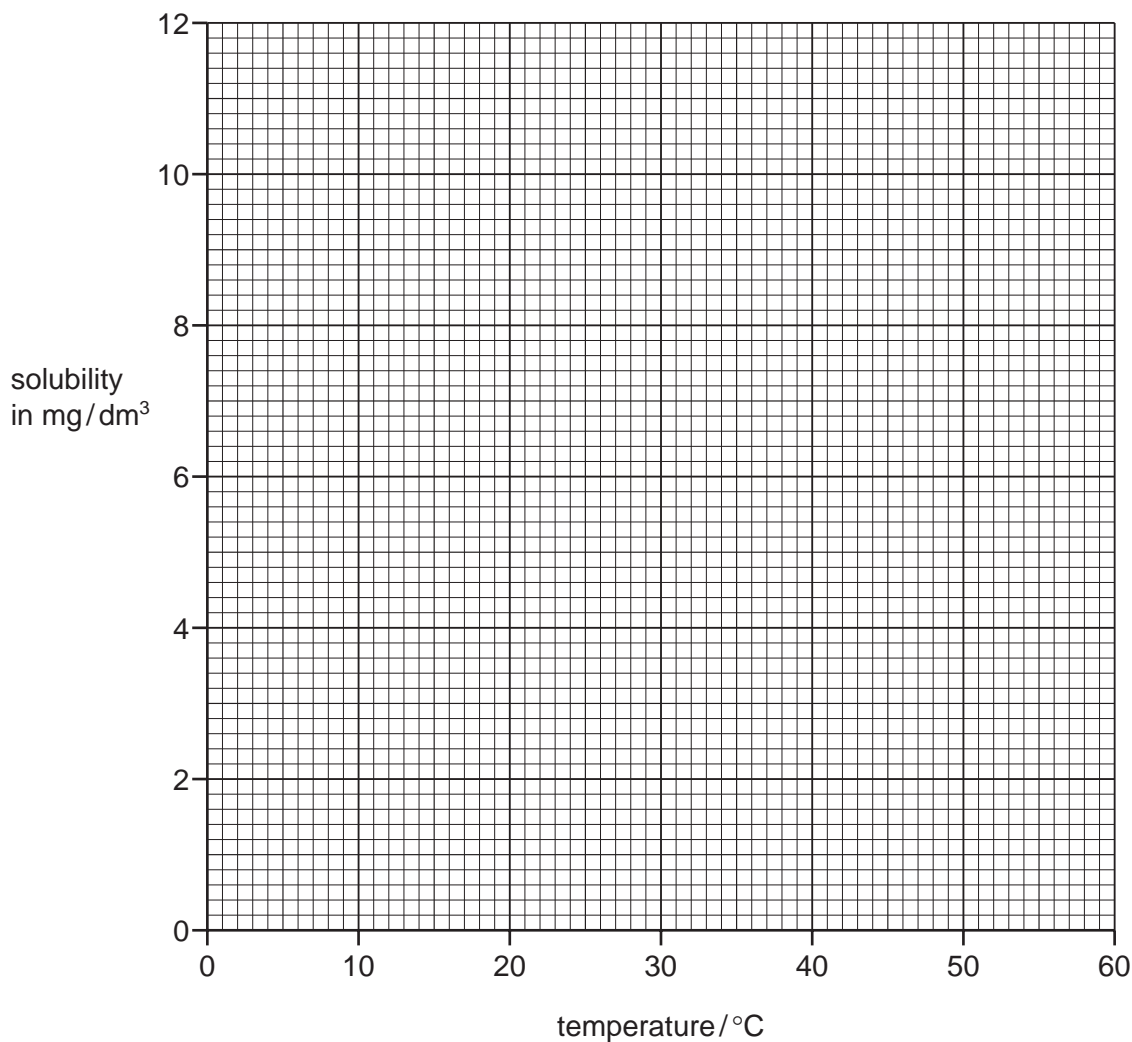
Use the information in the table to suggest the name of the compound present in the greatest amount.

..... [1]

(c) The table shows the solubility of oxygen in river water at different temperatures.

temperature / °C	0	10	20	30	40	50	60
solubility in mg/dm ³	11.0	8.8	7.2	6.0	4.9	4.2	3.6

(i) On the axes below, plot a graph to show how the solubility of oxygen changes with temperature. Draw a curve of best fit through the points.



[3]

(ii) Deduce the solubility of oxygen in river water at 25 °C.

..... [1]

(iii) State the approximate percentage of oxygen **in the air**.

..... [1]

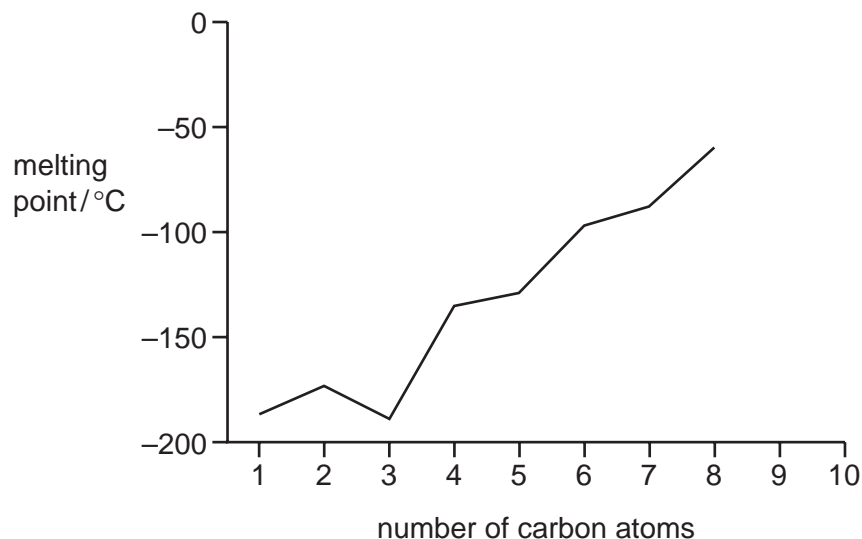
[Total: 14]

4 The alkanes are a homologous series of hydrocarbons.

(a) Name another homologous series of hydrocarbons.

..... [1]

(b) The graph below shows how the melting points of the first eight alkanes vary with the number of carbon atoms.



(i) Describe how the melting points of these alkanes vary with the number of carbon atoms.

.....

 [2]

(ii) **On the graph above**, continue the line to show the melting points of the hydrocarbons having 9 and 10 carbon atoms. [2]

(c) The first member of the alkane homologous series is methane.


(i) State **one** source of the methane in the atmosphere.

..... [1]

(ii) State **one** adverse effect of methane in the atmosphere.

..... [1]

(d) Complete the symbol equation to show the complete combustion of methane.



[2]

[Total: 9]

5 Iron from a blast furnace contains carbon, sulfur, silicon and phosphorus as impurities.

(a) Iron is converted into steel in a basic oxygen converter.

The impurities undergo oxidation.

What is meant by the term *oxidation*?

..... [1]

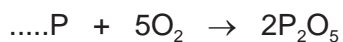
(b) Carbon is oxidised to carbon dioxide. Sulfur is oxidised to sulfur dioxide.

Explain why these oxides are easily removed from the molten iron.

..... [1]

(c) Phosphorus is converted to phosphorus(V) oxide.

(i) Complete the symbol equation for this reaction.



[1]

(ii) Is phosphorus(V) oxide an acidic or basic oxide?

Give a reason for your answer.

.....

..... [1]

(d) Phosphorus(V) oxide is a solid.

Explain how this oxide is removed from the molten iron.

.....

.....

..... [3]

(e) Steel is an alloy.


(i) State **one** use of:

mild steel,

stainless steel.

[2]

- (ii) Which diagram, **A**, **B**, **C** or **D**, best represents an alloy?
Put a ring around the correct answer.

**A****B****C****D**

[1]

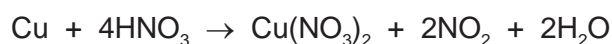
- (f) The table shows the composition of some different brasses.

composition of the brass		strength / 10^8 Pa
% zinc	% copper	
10	90	2.6
20	80	3.0
30	70	3.3
40	60	3.6

How does the composition of brass affect its strength?

..... [1]

- (g) A student dissolved a sample of brass in concentrated nitric acid.
Nitrogen dioxide, NO_2 , was released.



- (i) Write a word equation for this reaction.

[2]

- (ii) The student added aqueous ammonia to the solution formed until the ammonia was in excess.
Describe what the student would observe.

.....

 [3]

- (iii) State **one** source of the nitrogen dioxide in the atmosphere.

..... [1]

[Total: 17]

- 6 In the 1860s, John Newlands listed the elements in order of increasing atomic mass. Part of his table is shown.

H 1	Li 2	Be 3	B 4	C 5	N 6	O 7
F 8	Na 9	Mg 10	Al 11	Si 12	P 13	S 14
Cl 15	K 16	Ca 17	Cr 18	Ti 19	Mn 20	Fe 21

- (a) (i) Describe the differences between Newlands' table and the Periodic Table we use today.

.....

 [3]

- (ii) What evidence is there, from Newlands' table, that some elements with similar properties are grouped together?

.....
 [1]

- (b) The table below shows some properties of some of the halogens.

halogen	melting point /°C	boiling point /°C	colour
chlorine	-101	-7	yellow-green
bromine	-7		red-brown
iodine	+114	+184	grey-black
astatine	+302	+337	

Deduce:


the colour of astatine,

the boiling point of bromine,

the state of iodine at 190°C.

[3]

(c) Aqueous chlorine reacts with aqueous potassium bromide.



(i) Describe the colour change you would observe in this reaction.

..... [1]

(ii) State the name of the salt formed in this reaction.

..... [1]

(iii) Explain why aqueous bromine does not react with aqueous potassium chloride.

.....

..... [1]

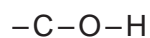
(iv) The halogens exist as diatomic molecules.
What is meant by the term *diatomic*?

..... [1]

[Total: 11]

7 Ethanol is an alcohol.

(a) Complete the structure of ethanol showing all atoms and bonds.



[1]

(b) State the name of the products formed when ethanol undergoes **incomplete** combustion.

..... and [2]

(c) Ethanol can be manufactured by fermentation or by the hydration of ethene.

(i) Complete the word equation for the manufacture of ethanol from ethene.

ethene + → ethanol

[1]

(ii) What conditions are needed for the manufacture of ethanol from ethene?
Tick **two** boxes.

temperature above 100 °C

room temperature

presence of inorganic catalyst

presence of yeast

presence of hydrogen

[2]

(iii) When ethanol is prepared by fermentation, the fermentation mixture produced contains ethanol and water.

The boiling point of ethanol is 78°C .

Describe how fractional distillation can be used to separate ethanol from water.

In your answer, refer to:

- the apparatus used,
- changes in state,
- differences in boiling points.

You may use a diagram.

.....

.....

.....

.....

.....

.....

.....

..... [5]

[Total: 11]

DATA SHEET
The Periodic Table of the Elements

		Group																																																																																																																															
I	II	III	IV	V	VI	VII	0																																																																																																																										
7 Li Lithium 3	9 Be Beryllium 4	1 H Hydrogen 1	11 B Boron 5	12 C Carbon 6	13 Al Aluminium 13	14 N Nitrogen 7	15 O Oxygen 8	16 F Fluorine 9	17 Ne Neon 10	18 Ar Argon 18	19 K Potassium 19	20 Ca Calcium 20	21 Sc Scandium 21	22 Ti Titanium 22	23 V Vanadium 23	24 Cr Chromium 24	25 Mn Manganese 25	26 Fe Iron 26	27 Co Cobalt 27	28 Ni Nickel 28	29 Cu Copper 29	30 Zn Zinc 30	31 Ga Gallium 31	32 Ge Germanium 32	33 As Arsenic 33	34 Se Selenium 34	35 Br Bromine 35	36 Kr Krypton 36	37 Rb Rubidium 37	38 Sr Strontium 38	39 Y Yttrium 39	40 Zr Zirconium 40	41 Nb Niobium 41	42 Mo Molybdenum 42	43 Tc Technetium 43	44 Ru Ruthenium 44	45 Rh Rhodium 45	46 Pd Palladium 46	47 Ag Silver 47	48 Cd Cadmium 48	49 In Indium 49	50 Sn Tin 50	51 Sb Antimony 51	52 Te Tellurium 52	53 I Iodine 53	54 Xe Xenon 54	55 Cs Caesium 55	56 Ba Barium 56	57 La Lanthanum 57	72 Hf Hafnium 72	73 Ta Tantalum 73	74 W Tungsten 74	75 Re Rhenium 75	76 Os Osmium 76	77 Ir Iridium 77	78 Pt Platinum 78	79 Au Gold 79	80 Hg Mercury 80	81 Tl Thallium 81	82 Pb Lead 82	83 Bi Bismuth 83	84 Po Polonium 84	85 At Astatine 85	86 Rn Radon 86	87 Fr Francium 87	88 Ra Radium 88	89 Ac Actinium 89	†	90 Th Thorium 90	91 Pa Protactinium 91	92 U Uranium 92	93 Np Neptunium 93	94 Pu Plutonium 94	95 Am Americium 95	96 Cm Curium 96	97 Bk Berkelium 97	98 Cf Californium 98	99 Es Einsteinium 99	100 Fm Fermium 100	101 Md Mendelevium 101	102 No Nobelium 102	103 Lr Lawrencium 103	133 Cs Caesium 55	137 Ba Barium 56	139 La Lanthanum 57	178 Hf Hafnium 72	181 Ta Tantalum 73	184 W Tungsten 74	186 Re Rhenium 75	190 Os Osmium 76	192 Ir Iridium 77	195 Pt Platinum 78	197 Au Gold 79	201 Hg Mercury 80	204 Tl Thallium 81	207 Pb Lead 82	209 Bi Bismuth 83	212 Po Polonium 84	214 At Astatine 85	216 Rn Radon 86	226 Ra Radium 88	227 Ac Actinium 89	†	232 Th Thorium 90	238 U Uranium 92	238 Np Neptunium 93	238 Pu Plutonium 94	238 Am Americium 95	238 Cm Curium 96	238 Bk Berkelium 97	238 Cf Californium 98	238 Es Einsteinium 99	238 Fm Fermium 100	238 Md Mendelevium 101	238 No Nobelium 102	238 Lr Lawrencium 103	140 Ce Cerium 58	141 Pr Praseodymium 59	144 Nd Neodymium 60	150 Sm Samarium 62	152 Eu Europium 63	157 Gd Gadolinium 64	159 Tb Terbium 65	162 Dy Dysprosium 66	165 Ho Holmium 67	167 Er Erbium 68	169 Tm Thulium 69	173 Yb Ytterbium 70	175 Lu Lutetium 71

*58-71 Lanthanoid series
†90-103 Actinoid series

Key

a	X
b	

a = relative atomic mass
X = atomic symbol
b = proton (atomic) number

The volume of one mole of any gas is 24 dm³ at room temperature and pressure (r.t.p.).

Permission to reproduce items where third-party owned material protected by copyright is included has been sought and cleared where possible. Every reasonable effort has been made by the publisher (UCLES) to trace copyright holders, but if any items requiring clearance have unwittingly been included the publisher will be pleased to make amends at the earliest possible opportunity.